

Bjornar Alseth
Ann-Christin Arnås
Henrik Kirkegaard
Mona Røsseland

Multi



2. LÄHKOE

ÅARJELSAEMIEN

3b

MAADTHGÆRJA

Matematihke
maanadaltesasse



$$\begin{array}{r} 639 \\ + 117 \\ \hline = \end{array}$$

ČállidLágádus

SISVEGE

9	ÅESIESTIDH JÏH DOEKEDH	2
10	TAALE-VIJREME	18
11	ADDISJOVNE JÏH SUBTRAKSJOVNE . .	32
12	GEOMETRIJE 2	48
13	BRÖÖKH	62
14	GEARTOEHTIDH 2	78
15	RYÖKNEDIDH	102
16	ROVHTE-VEARMAN SJÏHTESJIDH . .	118

Baakoelæstoe

2-geartoehtimmie 2-gangen
3-geartoehtimmie 3-gangen
4-geartoehtimmie 4-gangen
5-geartoehtimmie 5-gangen
10-geartoehtimmie 10-gangen
baalka-bihkedasse veibeskrivelse
brööke brøk
brööke-biehkje brøkdel
daarhve flekk
daltese trinn
dyjre-geehije dyrepasser
elmie-otnjege himmelretning
gaajhkijste i, fra alt
gaarsjelimmie-biejje idrettsdag
gaessie voks
gaevnie-maarhna loppemarked
geartodh doble
geartoehtidh gange
geartoehtimmie ganging
geartoehtimmie-bingo gange-bingo
geartoehtimmie-boelhke gange-stykke
geartoehtimmie-tabelle gange-tabell
geaseldh stiplet, stiplede
goere skjema; mønster
golme-koersh trekløver
golmen-gierth tredobbelt
graade grad
guvvieraajroe-plaerie tegneserie-hefte
guaktahtasse todel
gålmahtasse tredel
dievvie-tjengkere stikkball
ikte-nualan under hverandre
juekeme-boelhke delestykke

kaarhte kart
kastanje-nöödtere kastanjenøtt
lapte etasje
lijla lilla
mearoe-tjuvrie sjørøver
milledh avrunde
milleme avrundning
njealjahtasse firedel
njieljiien-bortege firkant
njieljiien-bortege (pred.) (er) firkan-tet, firkantede
njieljiien-borth (attr.) firkantet, firkantede
njimkehtse klister
njälhtjoe-saavtje hoppestrikk
námhpoeh (attr.) stumpvinklet
námhpoen (pred.) (er) stumpvinklet
námhpoeh skaavhte stump vinkel
otnjege-bihkedasse retningsan-givelse
parallele parallell
parallellogramme parallelogram
peara-snaejrieh potetgull
plakaate plakat
preejre brett (bake-)
påaske-sualadimmie påskeinn-brudd
riekte (attr.) rett
riekte (pred.) (er) rett
riekte skaavhte rett vinkel
riekte-skaavhtege (pred.) (er) rettvinklet
riekte-skaavhtes (attr.) rettvinklet
rovhte-vuesiehtimmie rutehenvi-sning
rååpsehke (pred.) (er) rød
saavtje strikk

tjaisehkh skøyter
sjiehtedimmie oversikt, (ordning)
syyjesje glider (under ski)
sjöhtege passende
skaehtie-sååle skatteøya
skreerkeme-gærja kladdebok
skaehtjoe bod
snaejrie del (av brød)
snjuhtjele (pred.) (er) spiss
snjuhtjeles (attr.) spiss
snjuhtjeles skaavhte spiss vinkel
sovkedahke huskestativ
sovkedh huske
spiejeme-tjengkerh smashballer
spiele-käärth kortstokk
taale-goere tallmønster
tangramme-spiele tangrampusle-spill
tjöölle lyseblå
tjååhpehke (pred.) (er) svart
treavka-bådtja skismurning
treblie-aarhke prikkemark
tseagkode rett opp
tseegkedh stille opp
tsegkie stativ
tsiehkje punkt
vaapele-riehje slengtau
vaedtseme-okse inngang
vaffele vaffel
vihtesjidh markere
vihtedimmie-tæjmoe gymsal
vuesiehtimmie referanse
åasa-læstoe prislister
åavtoes mystisk

Daate lea Multi-raajroen vuoestes versjovdne jaarjelsaemiengielese. Berteme ja Saemiedigkie utnijh vaajtelieh raerieh/bih-kedassh buektedh juktie mubpien aejkien goh trygkesåvva daejtie maahta dåvvodh. Seedth raerieh dan e-påastese: poasta@lagadus.org

© ČálliidLágádus – ForfatternesForlag – Authors'Publisher
Pb 140, NO-9735 Kárásjohka-Karasjok
Fanasgieddi, NO-9845 Deatnu-Tana

Gærjabovre gaskeviermesne: www.lagadus.org

Redaktööre Gyldendal: Thor-Atle Refsdal
Redaktööre saemien, ČálliidLágádus: Svein Nordsletta
Design jñh layout, originaale: Anne Tryti
Layout, saemien: Britt Hansen
Jarkoestamme: Sig-Britt Persson, Karin Rensberg Ripa, Elin Fjellheim

Bijjjebieliedesign: Hanne Dahl
Bijjjebielieguvvie: Børre Holth

Guvvije: Anne Tryti
Dataguvvije: Børre Holth

Gærja åndsverk-laakeste vaarjelåvva. Ij Leah luhpie kopijem gærjeste vaeltedh jis ij luhpiem utnieh dejstie mejstie gærjam buakteme jallh tjaelijjstie. Jis kopijem læjhkan dan vuestie vaeltie, iehciem dorjeme jñh maahta bysvehts böötine jallh faangke-gæetine åadtjodh.

© ČálliidLágádus 2017
Originaale riektes-aajhtere: Gyldendal Norsk Forlag AS 2006, 2. låhkoe
Gærja dehtie matematihkelearoeverhteste Multi 1-7.
Trygkesovveme: Waasa Graphics Oy, Vaasa
ISBN 978-82-8263-079-5

Bjørnar Alseth · Ann-Christin Arnås · Henrik Kirkegaard · Mona Røsseland

Multi 2. læhke



3b


MAADTHGÆRJA


ČállidLágádus




[·] Man dovres?


$$150 + 210 = \underline{360} \text{ kr}$$


$$\underline{\quad} + \underline{\quad} = \underline{\quad} \text{ kr}$$


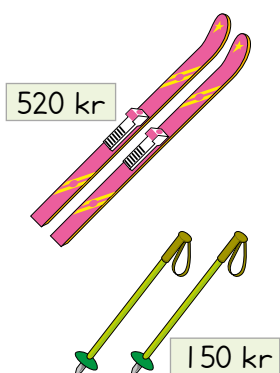
$$\underline{\quad} + \underline{\quad} = \underline{\quad} \text{ kr}$$


$$\underline{\quad} + \underline{\quad} = \underline{\quad} \text{ kr}$$

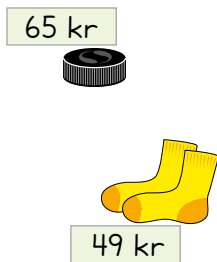
[·] Man dovres?



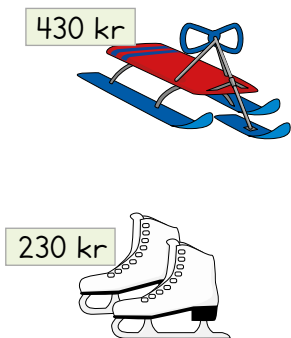
$$\underline{\hspace{2cm}} + \underline{\hspace{2cm}} = \underline{\hspace{2cm}} \text{ kr}$$



$$\underline{\hspace{2cm}} + \underline{\hspace{2cm}} = \underline{\hspace{2cm}} \text{ kr}$$




$$\underline{\hspace{2cm}} + \underline{\hspace{2cm}} = \underline{\hspace{2cm}} \text{ kr}$$



$$\underline{\hspace{2cm}} + \underline{\hspace{2cm}} = \underline{\hspace{2cm}} \text{ kr}$$

[·] Man dovres?

430 kr



210 kr



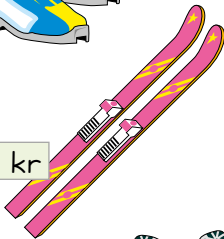
49 kr

$$\underline{\hspace{2cm}} + \underline{\hspace{2cm}} + \underline{\hspace{2cm}} = \underline{\hspace{2cm}} \text{ kr}$$

375 kr



520 kr



50 kr

$$\underline{\hspace{2cm}} + \underline{\hspace{2cm}} + \underline{\hspace{2cm}} = \underline{\hspace{2cm}} \text{ kr}$$

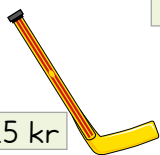
230 kr



65 kr



125 kr



$$\underline{\hspace{2cm}} + \underline{\hspace{2cm}} + \underline{\hspace{2cm}} = \underline{\hspace{2cm}} \text{ kr}$$

[·] Veeljh jijtje.

$$\underline{\hspace{2cm}} + \underline{\hspace{2cm}} + \underline{\hspace{2cm}} = \underline{\hspace{2cm}} \text{ kr}$$



[.] Man jeene aajmojne?

Dov leah:



Datne aastah:

430 kr



$$500 - 430$$

$$= \underline{70} \text{ kr}$$

Dov leah:



Datne aastah:

230 kr



$$\underline{\quad} - \underline{\quad} = \underline{\quad} \text{ kr}$$

Dov leah:



Datne aastah:

210 kr



$$\underline{\quad} - \underline{\quad} = \underline{\quad} \text{ kr}$$

Dov leah:



Datne aastah:

65 kr




$$\underline{\quad} - \underline{\quad} = \underline{\quad} \text{ kr}$$

[.] Man jeene aajmojne?

Dov leah:



Datne aastah



_____ kr

Dov leah:



Datne aastah:



_____ kr

Dov leah:



Datne aastah:



_____ kr

[.] Veeljh jijtje.

Dov leah:



Datne aastah:

_____ kr

Milleme

[·] Mahte man dovres daah golme treavka-bådtjah ektesne?



Daate væhta mahte seamma-ligkie.

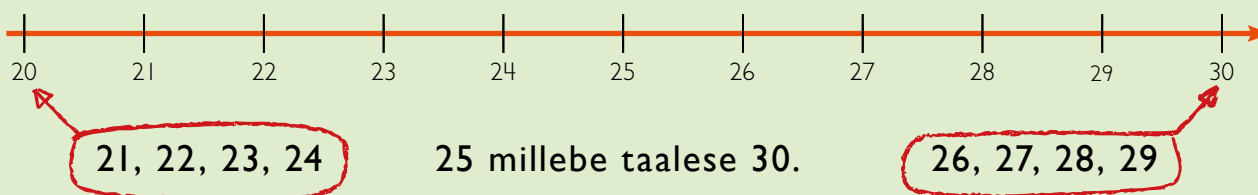


2	9	≈	3	0
5	2	≈	5	0
4	1	≈	4	0

Jih maam dellie ektesne åadtjoeh?



Milleme lihkemes låkagasse:



[··] Millh lihkemes låkagasse.

29 ≈ _____

42 ≈ _____

73 ≈ _____

41 ≈ _____

63 ≈ _____

89 ≈ _____

56 ≈ _____

82 ≈ _____

138 ≈ _____

117 ≈ _____

8 ≈ _____

237 ≈ _____

109 ≈ _____

97 ≈ _____

125 ≈ _____


[·] Millh jñh ryöknedh.



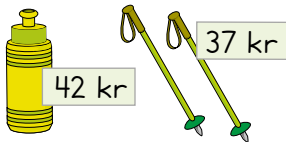
$$30 + 20 = \underline{\quad} \text{ kr}$$



$$= \underline{\quad} \text{ kr}$$



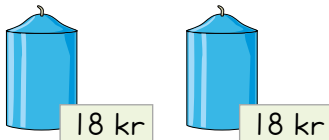
$$= \underline{\quad} \text{ kr}$$



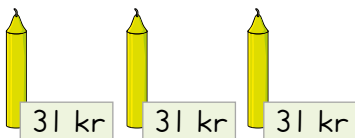
$$= \underline{\quad} \text{ kr}$$



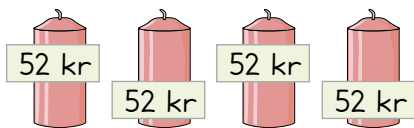
$$= \underline{\quad} \text{ kr}$$



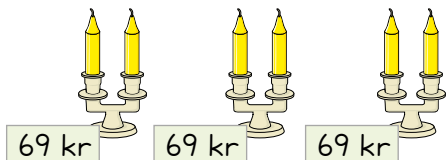
$$= \underline{\quad} \text{ kr}$$



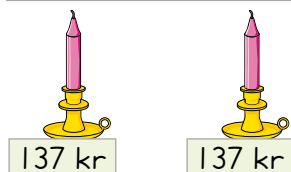
$$= \underline{\quad} \text{ kr}$$



$$= \underline{\quad} \text{ kr}$$



$$= \underline{\quad} \text{ kr}$$



$$= \underline{\quad} \text{ kr}$$

[·] Millh l hkemes l hkagasse.
Biejh tj anghkan.

SJIEHTEDIMMIE

Sjokolade	21 kr ≈				kr
Seigmenn	28 kr ≈				kr
Njaalke-jovkemes	44 kr ≈				kr
Twist	59 kr ≈				kr
Peara-snaejrieh	17 kr ≈				kr
=					kr



[··] Millh l hkemes l hkagasse. Biejh tj anghkan.

$$18 + 23 + 41 \approx 20 + 20 + 40 = \underline{80}$$

$$12 + 34 + 36 \approx \underline{\quad} + \underline{\quad} + \underline{\quad} = \underline{\quad}$$

$$17 + 26 + 52 \approx \underline{\quad} + \underline{\quad} + \underline{\quad} = \underline{\quad}$$

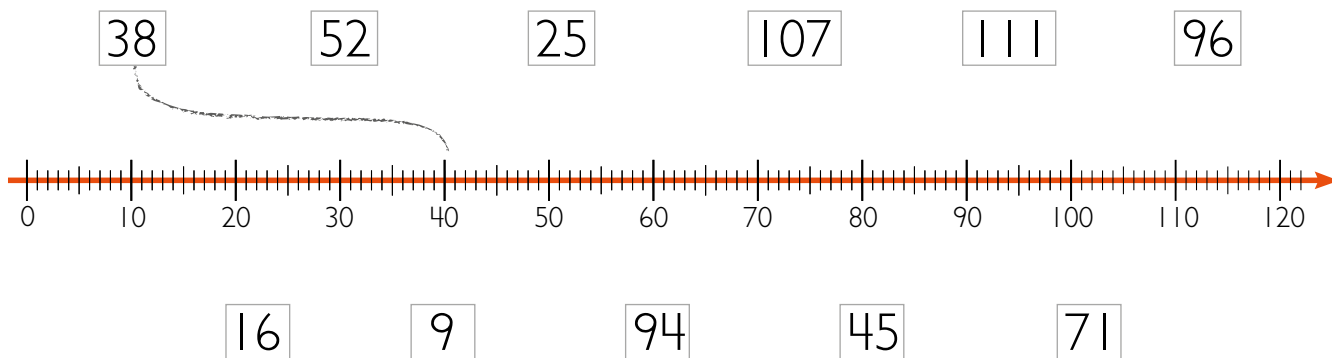
$$31 + 32 + 36 \approx \underline{\quad} + \underline{\quad} + \underline{\quad} = \underline{\quad}$$

$$28 + 26 + 24 \approx \underline{\quad} + \underline{\quad} + \underline{\quad} = \underline{\quad}$$

$$61 + 18 + 39 \approx \underline{\quad} + \underline{\quad} + \underline{\quad} = \underline{\quad}$$

$$42 + 68 + 36 \approx \underline{\quad} + \underline{\quad} + \underline{\quad} = \underline{\quad}$$

[.] Darjoeh sievh lihkemes lähkagasse.



[..] Millh lihkemes lähkagasse.

12 ≈ <u>10</u>	23 ≈ _____	48 ≈ _____
39 ≈ _____	46 ≈ _____	57 ≈ _____
67 ≈ _____	54 ≈ _____	95 ≈ _____
75 ≈ _____	116 ≈ _____	104 ≈ _____
92 ≈ _____	253 ≈ _____	86 ≈ _____

134 ≈ _____	151 ≈ _____	184 ≈ _____
203 ≈ _____	225 ≈ _____	235 ≈ _____
344 ≈ _____	296 ≈ _____	305 ≈ _____
316 ≈ _____	507 ≈ _____	648 ≈ _____
155 ≈ _____	424 ≈ _____	495 ≈ _____

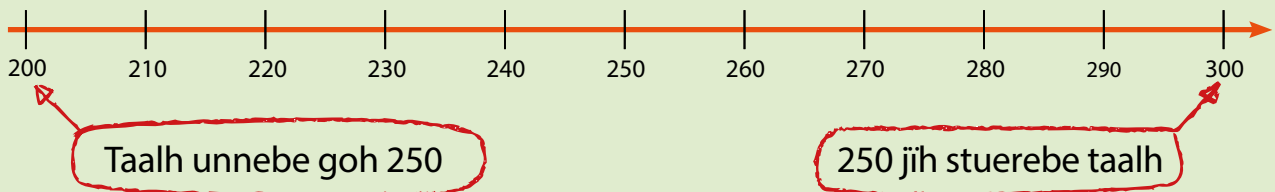
[·] Millh lihkemes tjuatagasse.
Biejh tjãanghkan.



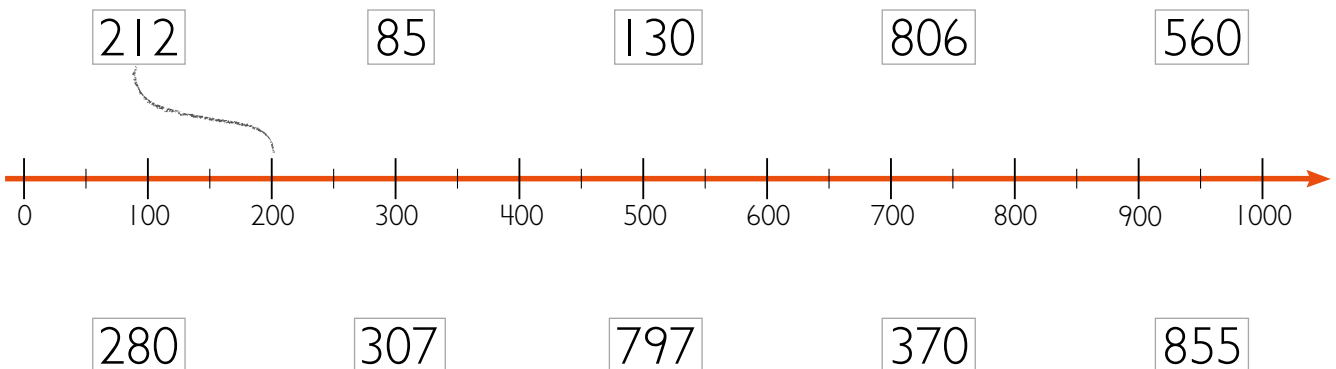
SJËHTEDIMMIE

Tjohpe	85 kr ≈					kr
Mãvkhah	321 kr ≈					kr
Sjãarhtoe	170 kr ≈					kr
Vaanhtsh	105 kr ≈					kr
Trãajjoe	203 kr ≈					kr
=						kr

Milleme lihkemes tjuatagasse:



[··] Darjoeh sievh lihkemes tjuatagasse.



[·] Millh lihkemes tjuatagasse.

$$478 \approx \underline{500}$$

$$687 \approx \underline{\hspace{2cm}}$$

$$973 \approx \underline{\hspace{2cm}}$$

$$299 \approx \underline{\hspace{2cm}}$$

$$150 \approx \underline{\hspace{2cm}}$$

$$250 \approx \underline{\hspace{2cm}}$$

$$231 \approx \underline{\hspace{2cm}}$$

$$342 \approx \underline{\hspace{2cm}}$$

$$439 \approx \underline{\hspace{2cm}}$$

$$809 \approx \underline{\hspace{2cm}}$$

$$650 \approx \underline{\hspace{2cm}}$$

$$645 \approx \underline{\hspace{2cm}}$$

$$147 \approx \underline{\hspace{2cm}}$$

$$812 \approx \underline{\hspace{2cm}}$$

$$639 \approx \underline{\hspace{2cm}}$$

$$450 \approx \underline{\hspace{2cm}}$$

$$249 \approx \underline{\hspace{2cm}}$$

$$545 \approx \underline{\hspace{2cm}}$$

[··] Millh lihkemes tjuatagasse. Biejh tjåanghkan.

$$267 + 105 + 320 \approx 300 + 100 + 300 = \underline{700}$$

$$140 + 485 + 290 \approx \underline{\hspace{2cm}} + \underline{\hspace{2cm}} + \underline{\hspace{2cm}} = \underline{\hspace{2cm}}$$

$$65 + 140 + 109 \approx \underline{\hspace{2cm}} + \underline{\hspace{2cm}} + \underline{\hspace{2cm}} = \underline{\hspace{2cm}}$$

$$350 + 140 + 222 \approx \underline{\hspace{2cm}} + \underline{\hspace{2cm}} + \underline{\hspace{2cm}} = \underline{\hspace{2cm}}$$

$$537 + 328 + 185 \approx \underline{\hspace{2cm}} + \underline{\hspace{2cm}} + \underline{\hspace{2cm}} = \underline{\hspace{2cm}}$$

[··] Veeljh taalh jijtje.

$$\underline{\hspace{2cm}} + \underline{\hspace{2cm}} + \underline{\hspace{2cm}} \approx \underline{\hspace{2cm}} + \underline{\hspace{2cm}} + \underline{\hspace{2cm}} = \underline{\hspace{2cm}}$$

$$\underline{\hspace{2cm}} + \underline{\hspace{2cm}} + \underline{\hspace{2cm}} \approx \underline{\hspace{2cm}} + \underline{\hspace{2cm}} + \underline{\hspace{2cm}} = \underline{\hspace{2cm}}$$

Man dovres?

230 kr



430 kr



$$\underline{\hspace{2cm}} + \underline{\hspace{2cm}} = \underline{\hspace{2cm}} \text{ kr}$$

Man jeene aajmojne?

Dov leah:



Datne aastah:

210 kr



125 kr



$$\underline{\hspace{2cm}} \text{ kr}$$

Millh lihkes l hkagasse.

$$22 \approx \underline{\hspace{2cm}}$$

$$39 \approx \underline{\hspace{2cm}}$$

$$348 \approx \underline{\hspace{2cm}}$$

$$17 \approx \underline{\hspace{2cm}}$$

$$76 \approx \underline{\hspace{2cm}}$$

$$454 \approx \underline{\hspace{2cm}}$$

$$41 \approx \underline{\hspace{2cm}}$$

$$155 \approx \underline{\hspace{2cm}}$$

$$708 \approx \underline{\hspace{2cm}}$$

Darjoeh sievh lihkes tjuatagasse.

231

478

126

703

949

850



• Guvvedh beetnegidie. Millh lähkemes lähkagasse.



≈ 10 kr



≈ _____ kr



≈ _____ kr



≈ _____ kr



•• Millh lähkemes lähkagasse.

12 ≈ 10

8 ≈ _____

23 ≈ _____

31 ≈ _____

29 ≈ _____

48 ≈ _____

83 ≈ _____

77 ≈ _____

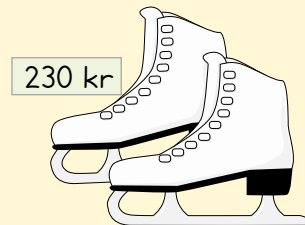
132 ≈ _____

172 ≈ _____

236 ≈ _____

526 ≈ _____

Maeksieh tjalsehkidie njieljeh joekehts vuekiej mietie. Guvvedh krávnah jih sietelh.



230 = _____

230 = _____

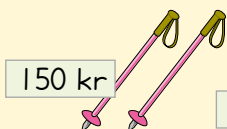
230 = _____

230 = _____

Man dovres?




_____ + _____ = _____ kr



_____ + _____ + _____ = _____ kr

SPĪELE: Lihkemes 1000!



SPĪELE-NJOELKEDASSH

Spiele aktese jallh golmese sjeahta. Tjetskieh tjelmie-skaavhtegem jih tjaelieh taalem akten rovhtese. Gosse gaajhkh rovhtide deavhteme, taalide tjåanghkan biejedh. Gie dihte stoere-tjuetien lihkemes bööti?

$$\square \square \square + \square \square \square = \underline{\hspace{2cm}}$$

$$\square \square \square + \square \square \square + \square \square \square = \underline{\hspace{2cm}}$$

$$\square \square \square + \square \square \square - \square \square \square = \underline{\hspace{2cm}}$$

Stæjna beetnegh spååremine edtja PC:m åestedh.

Dan lea rætnoe reakeds-biejjie jih beetnegh vadtesinie sæjhta.

Stæjna 350 kr reakeds-biejjen åvtelen spååreme.

a Reakeds-biejjen mænngan dan leah 900 kr



Man jeenh beetnegh reakeds-beajjan åadtjoeji?

b Stæjna jih aehtjebe PC:m ektesne åestiejægan.

Dan PC:n åvteste 4100 kr maeksedh.

Stæjna edtja gaajhki sov beetnegigujmie maeksedh.

Man jeenem aehtjebe tjuara maeksedh?

c Gosse bovrese båetiejægan, dam PC:m maehtiejægan

giehpesne åesiestidh. Dam 500 kr aelpebe åadtjoejigan.

Man jeenem dan PC:n åvteste maeksiejægan?

10 TAALE-VIJREME



1 Manne dihte stööremes taale
4-geartoehthimmesne
mij unnebe goh taale 30.
Gie manne?

2 $45 - \underline{\quad} = 20$

3 1237 leah $\underline{\quad}$ lähkegh.

4 Maam áadtjoeh jis aalka 888 jrh 20
vijhten aejkien destie tramhkelidh?

[·] Mij taalide dihte áavtoes X?

$13 + \text{X} = 20$
 $\text{X} = \underline{7}$



Aha! X tjuara 7 áarrodh dannasinie $13 + 7 = 20$.

$30 = \text{X} + 9$
 $\text{X} = \underline{\hspace{2cm}}$

$\text{X} - 5 = 43$
 $\text{X} = \underline{\hspace{2cm}}$

$\text{X} + 100 = 430$
 $\text{X} = \underline{\hspace{2cm}}$

$80 = 100 - \text{X}$
 $\text{X} = \underline{\hspace{2cm}}$

$515 = 300 + \text{X}$
 $\text{X} = \underline{\hspace{2cm}}$

$\text{X} = 813 - 620$
 $\text{X} = \underline{\hspace{2cm}}$

$60 + \text{X} = 199$
 $\text{X} = \underline{\hspace{2cm}}$

$22 = \text{X} - 44$
 $\text{X} = \underline{\hspace{2cm}}$

Goerve-Gaastan p aske-sualadimmie



Aelhie lij govledh politijemiesteren n ajjan.

Ij man gellien aejkien munnjen viehkien mietie ringki.

– Vaj, politije-miesteren jeehti. Mijjeh daejrebe Goerve-Gaasta s an s ejhta akten g atan Nesliesne daan j ijen tjoeltestidh.

S ejhta s an laessiem goervigujmie sualadidh. Ibie mijjeh maehtieh maam darjodh.

– Guktie daejrede edtja dam darjodh? Manne gihtjim.

– Akte politije-barkije dan duekesne bussesne daan biejjien tjakasji. Meehti lohkedh guktie Goerve-Gaasta tekste-b evnesem tjeeli. Desnie tjeeli: Mijjeh daan iehkeden Nesliesne t aanghenibie.

– Dellie tjoerebe dam t o dtjestidh, jeehtim. Dijjeh maam joem vielie daejrede?

– Mij akt, politije-miesteren jeehti. Dan g atien gihtjedibie. Dellie paehperem gaavnimh gusnie vuesehte dihte naan g atiej g ajkoe Nesliesne ussjedamme. Mijjeh barre golmesh daesnie daan iehkeden, juktie ibie nahkesjh gaajkhk g atide geehtedh.

– Manne hov daajram! Vedtieh munnjen g atie-nommeride, edtjebe vuejnedh guktie nahkasjibie.

Politije dejtie gaektsie g atie-aajhteridie bieljele. Seamadieh edtjeh vaeptie- ornegem tjaeledh. G okten haaran joekehtieh, guktie maehtieh sinsitniej g atide geehtedh. Haeride t aanghkan biejjeh guktie t aenghkie g atie-nommerijstie dah g okte haerine seammalaakan sjidtieh.



Magkerh g�atieh Nesliesne	
G�atieh nr.	
3	
5	
8	
12	
19	
22	
24	
29	

[.] Magkere g atie-nommerh dan haerien?

1. haerie man g atie-nommerh: _____ , _____ , _____ , _____

2. haerie man g atie-nommerh: _____ , _____ , _____ , _____

– Daate vihkeles, politije-miesteren t aarvoeji gosse  nnetje dan m nngan ringkie.

– Paehperen duekesne g atie-nommeridie tjaaleme: Mijjeh aelkebe dah golme g atiejgumie mej Leah g atie-nommerh 55 ektesne. Jis buektiehtibie gaavnedh magkerh golme g atieh dah, sih buektiehtibie Goerve-Gaastam joe daan iehkeden feengkedh.

[.] Gaavnh dejtie golme g atide gusnie g atie-nommeri t aenghkie 55.

$$\underline{\quad} + \underline{\quad} + \underline{\quad} = 55$$

[.] Darjoeh golme ryöknedimmie-boelkhk fierhten taalese.



$12 + 8$ $\underline{\quad}$ $-$ $\underline{\quad}$ $\underline{\quad}$ \cdot $\underline{\quad}$ 20

$\underline{\quad}$ $+$ $\underline{\quad}$ $230 - 200$ $\underline{\quad}$ \cdot $\underline{\quad}$ 30

$\underline{\quad}$ $+$ $\underline{\quad}$ $\underline{\quad}$ $-$ $\underline{\quad}$ $\underline{\quad}$ \cdot $\underline{\quad}$ 100

$\underline{\quad}$ $+$ $\underline{\quad}$ $\underline{\quad}$ $-$ $\underline{\quad}$ $\underline{\quad}$ \cdot $\underline{\quad}$ 66



$\underline{\quad}$ $+$ $\underline{\quad}$ $\underline{\quad}$ $+$ $\underline{\quad}$ $\underline{\quad}$ $+$ $\underline{\quad}$ 351

$\underline{\quad}$ $-$ $\underline{\quad}$ $\underline{\quad}$ $-$ $\underline{\quad}$ $\underline{\quad}$ $-$ $\underline{\quad}$ 199


[·] Fibo göökte soeleg h dalvoeminie.

Maahtah viehkietidh? Dievhtieh taalide mah tabellesne fatesieh.



Dan akten soelegen nommem gaavnh gosse baakojde ektedh mah golmen-borth rovhtide sjehtieh.

Dan mubpien soelegen nommem dah rovhtine gaavnh gusnie naestie.



55	56	_____	58	▲	_____
_____ *	200	201	_____	▲	_____ *
_____	298	_____	_____	▲	_____
_____ *	350	_____	_____	▲	_____ *

59	=	E
353	=	V
349	=	L
199	=	
203	=	A
301	=	J

Soelegi nommh leah _____ jih _____

[··] Dievhtieh tabellide.







-10	Taale	+10
321	331	341
	265	
	726	
	512	
	398	
	603	

-100	Taale	+100
419	519	619
	321	
	805	
	139	
	950	
	102	







Lohkeme matematihkesne. • Lohkh tekstem eensilaaan aerebe lierehtimmiem lutnesth. Taalide tabellesne aktine lassanieh.
 •• Dehtie taaleste dennie gaskemes bartelisnie edtja taalem 10 jallh taalem 100 lissiehtidh jallh tramhkelidh.

[·] Fiere guhte maana 30 tjåervieh baanghkeste åådtje giéh beetnegidie jijtse spååreme-snurkeste disse aarjoehtieh. Man jeenem fierhne maana utnieh gosse 30 tjåervieh åådtjeme.



$+30$  52 kr → <u>82</u> kr	$+30$  305 kr → _____ kr	$+30$  77 kr → _____ kr
$+30$  126 kr → _____ kr	$+30$  281 kr → _____ kr	$+30$  699 kr → _____ kr

[··] Maanah geerjene reanhtoem baanghkeste åådtjodh. Ussjedh, gosse naan jaepieh vaaseme dah beetnegh mejtie aarjoehtamme guektien giérth jeenebe sjidteme! Man jeenh beetnegh maanaj dellie.

$\cdot 2$  82 kr → _____ kr	$\cdot 2$  335 kr → _____ kr	$\cdot 2$  _____ kr
$\cdot 2$  _____ kr	$\cdot 2$  _____ kr	$\cdot 2$  _____ kr

Riektiem lutniestidh

Politije Skaajhvoeh Syverem jih Vædtsohke Viktoorem veele vaaksjoeminie. Dan åvteste ij man aelhie dejtie göökte soelegidie, vihth minnedh sualadidh. Bööremes dellie riektiem tellefovnen tjirrh seedtedh. Idtji politije dellie guarkoeh maam ussjedeminie.

Voestegh vuartasjægan gaajhkh bievnesh mejtie maehtiejægan seedtedh. Jih dellie aktem taalem fierhten bievneshasse gaavnijægan.

Naemhtie dihte læstoe vååjnoe.



Taale	Bievnese
12	Mijjeh prædtjosne gaavnesjibie.
16	Veedtjeh bijlem.
34	Mijjeh B soejkesjem veeljebe.
60	Årroeh sjevovth.
150	Geehtede! Politije mijjem vueptiestamme!

Minngemes aktem njoelkedassem provhkoeh gosse dejtie taalide jeatjahtedh. Måantan njoelkedassem Plusse 15 provhkoeh. Gosse bievnesh *Mijjeh prædtjosne gaavnesjibie* ij dellie 12 provhkoeh badth $12 + 15 = 27$.

[·] Provhkh njoelkedassem jih gaavnh riektide mah fååtesieh.

Måanta		Dæjsta		Gaskevåhkoeh		Duarsta	
Njoelkedasse: <i>Plusse 15</i>		Njoelkedasse: <i>Mijnuse 10</i>		Njoelkedasse: <i>Guektien giærth</i>		Njoelkedasse: <i>lehkie, plusse 3</i>	
Taale	Riektie	Taale	Riektie	Taale	Riektie	Taale	Riektie
12	27	12	2	12	24	12	
16	31	16		16		16	11
34		34		34		34	
60		60		60		60	
150		150		150		150	

[··] Maam riektide daase provhkoeh?

Veedtjeh bijlem gaskevåhkoen biejjide? _____

Mij riektie 20 duarstan biejjide? _____

Syvere j̄ih Viktore vueptiestægan politije dejtie d̄aalvohteminie. Danna-
sinie aelkiejægan aktem orre riektiem provhkedh. Daennie orre riek-
tesne fierhtem baakoem aktine taaline lotnedamme dan tabellen mietie.

6	manne	10	gåatan	21	dallah
7	datne	15	tjeakoes sæjjan	24	tæjmosne
8	vuajam / vuejeh / vuaja	17	baanghese	33	jirreden
9	vaadtsam	19	ruevtie-raajrojne	35	politije

Vuesiehtimmien gaavhtan taalide 6-10-9 edtja naemhtie guarkedh *Manne
gåatan vaadtsam*. Jis dejtie riektide vierrebe darjodh guarkedh, Syvere
j̄ih Viktore njoelkedassem provhkoejægan dejtie taalide jeatjahtehedh.

Njoelkedasse lea: Guektien giërth, plusse 5.

- [·] Man *Manne gåatan vaadtsam* riektien mietie sjædta gosse daan
orre njoelkedassen mietie tjaala.

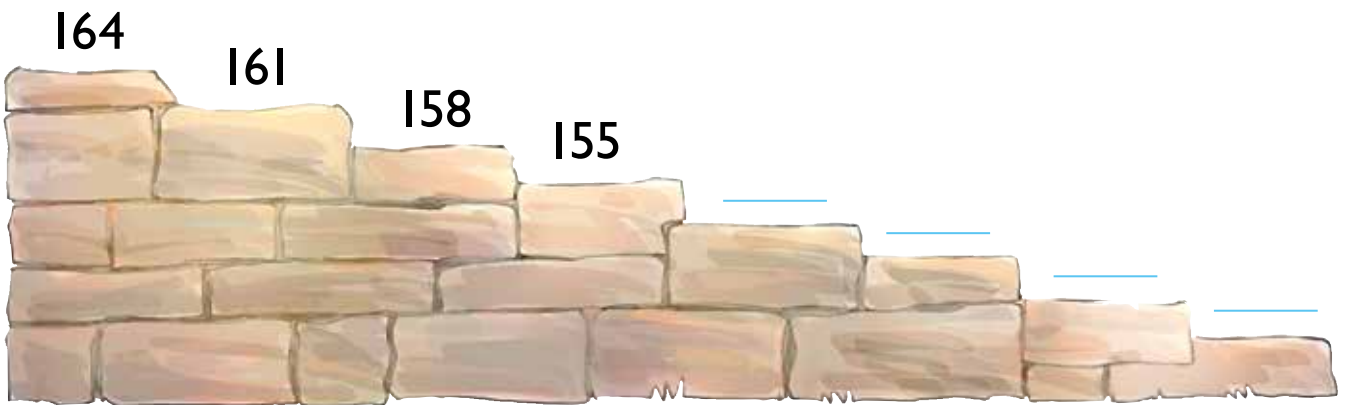
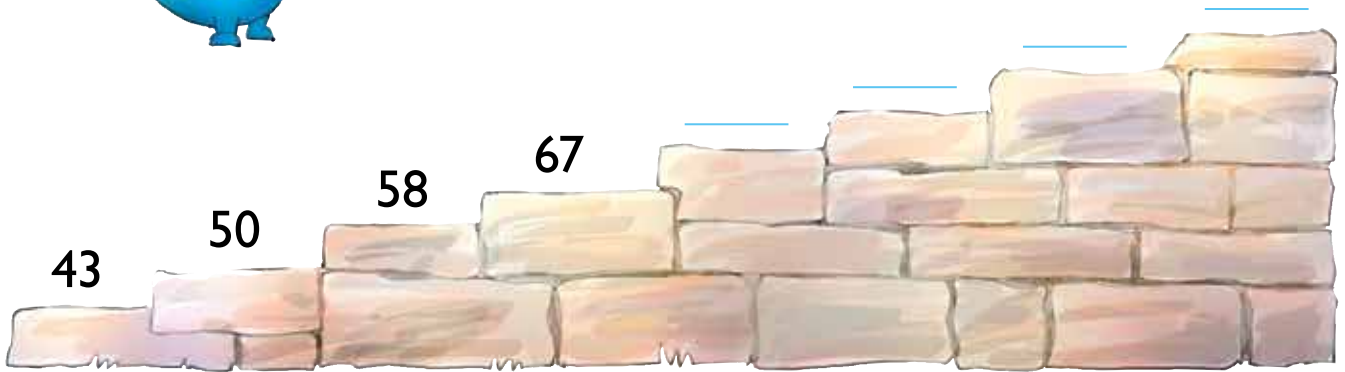

Baakoeh	Manne	gåatan	vaadtsam
Taalh	6	10	9
Riektie	17		

- [·] Tjælieh riektiem daase: *Vuejeh tjeakoes sæjjan tæjmosne*.

Baakoeh	Vuejeh	tjeakoes sæjjan	tæjmosne
Taalh			
Riektie			

- [·] Guktie daam riektiem guarkedh: 75-47-39-43-21?

[·] Gaavnh taale-bääresem jñh tjaelieh taalide mah fäätesieh.



··| Darjoeh jñjtjedh taale-bääresem.

Lotnedh lierehtimmide jeatjah

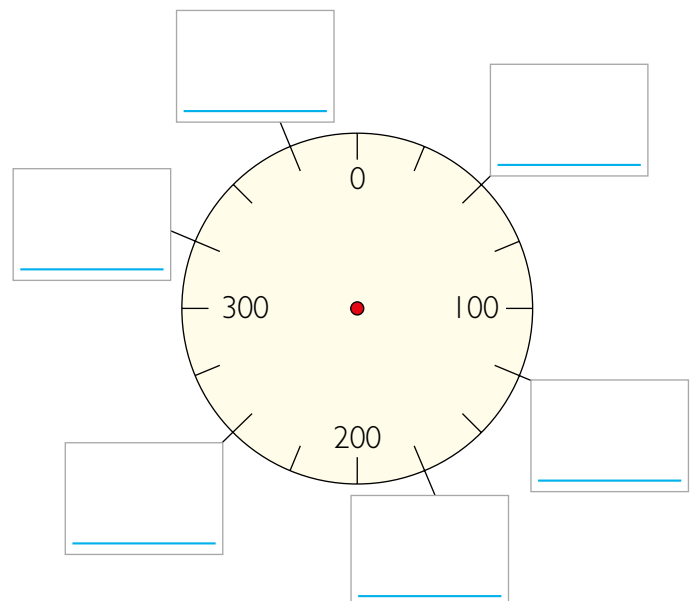
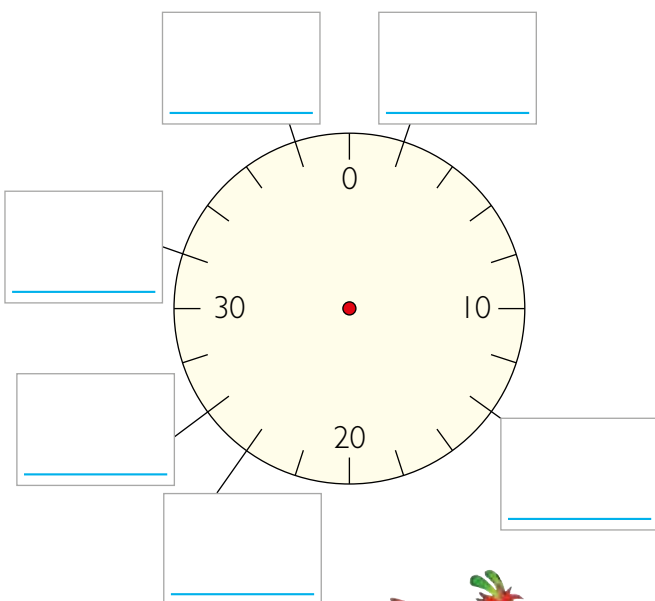
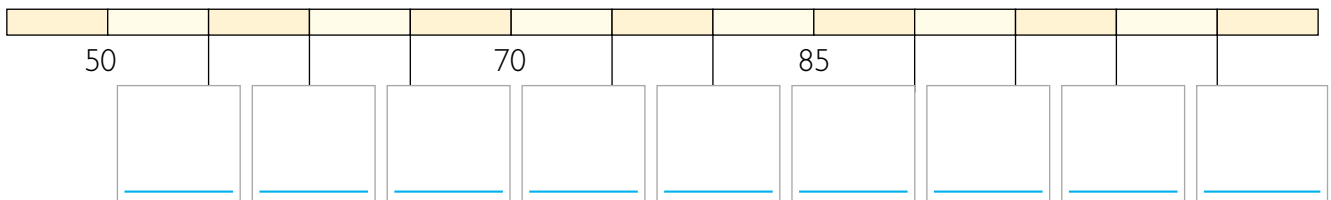
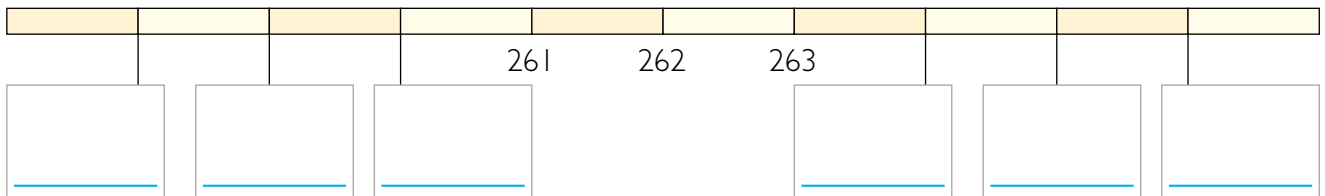
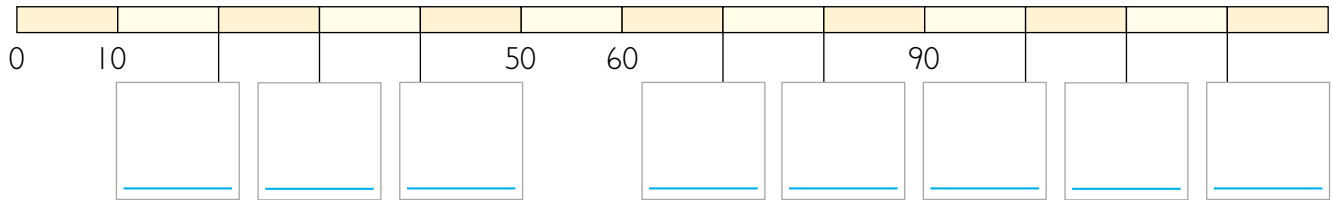
learoehkinie jis sñjth.



[.] Daelie Tåaskoeh-Turid jarhpoedamme!



Gaajhkh möölege-dirregh korrektuvre-lakkinne
 måaladamme. Tjælieh dejtie riectes taalide guktie
 skuvlesne maehtieh gaarsjelimmie-biejjiem utnedh.
 Datne barre taalh rovhtide edtjh tjæledh.



Mij taalide X?

$$55 = \text{X} + 14$$

$$\text{X} = \underline{\hspace{2cm}}$$

$$\text{X} - 20 = 72$$

$$\text{X} = \underline{\hspace{2cm}}$$

Provhkh njoelkedassem jñh dievhtieh tabellem.

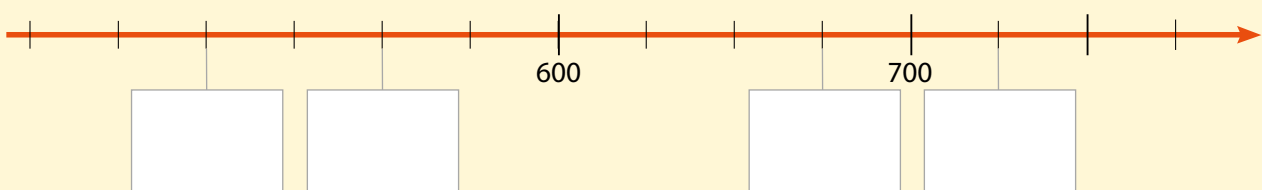
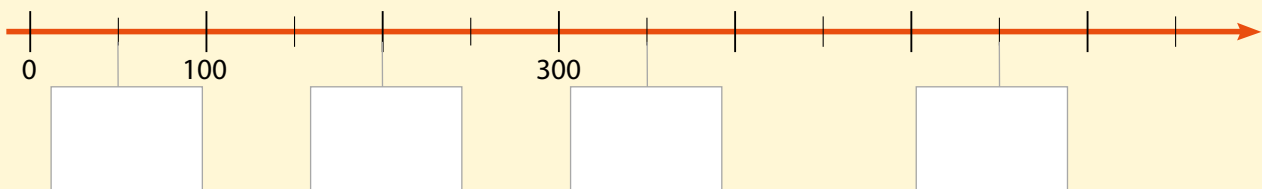
Njoelkedasse: <i>Lehkiem, plusse 5.</i>	
Taale	Riektie
4	
16	
280	

Jæerhkieh taale-bååresidie.

$$15 - 20 - 25 - 30 \quad \underline{\hspace{1cm}} \quad \underline{\hspace{1cm}} \quad \underline{\hspace{1cm}} \quad \underline{\hspace{1cm}}$$

$$350 - 348 - 346 - 344 \quad \underline{\hspace{1cm}} \quad \underline{\hspace{1cm}} \quad \underline{\hspace{1cm}} \quad \underline{\hspace{1cm}}$$

Tjælieh taalh rovhtide.



- Tjaelieh taalide riektes sievide.

Taalesne 346 leah _____ tjuategh.

Taalesne 709 leah _____ l hkegh.

Taalesne 547 leah _____ aktegh.

- Tjaelieh taalem man leah

5 l hkegh, 3 aktegh j h 6 tjuategh _____



6 aktegh j h 4 tjuategh _____

7 tjuategh j h 8 l hkegh _____

- Mij taalide  adtjoeh jis njoelkedassem Tramhkelh taaleste 100?

389 → _____ | 502 → _____ | 184 → _____

- Gaavnh taale-goerem j h tjaelieh taalide mah f atesieh.



LIEREHTIMMIEG ERJA B. 66-68

Provhkh taalide tabellesne gosse lierehtimmide vaestiedidh.

3	1	15	29	13
2	18	6	14	11
27	7	26	22	19
12	16	24	9	21

- Gaavnh golme taalh mah 20 tjåenghkesne sjidtieh.

_____ + _____ + _____ = 20

- Darjoeh 50

golme taaligujmie: _____ + _____ + _____ = 50

njieljie taaligujmie: _____ + _____ + _____ + _____ = 50

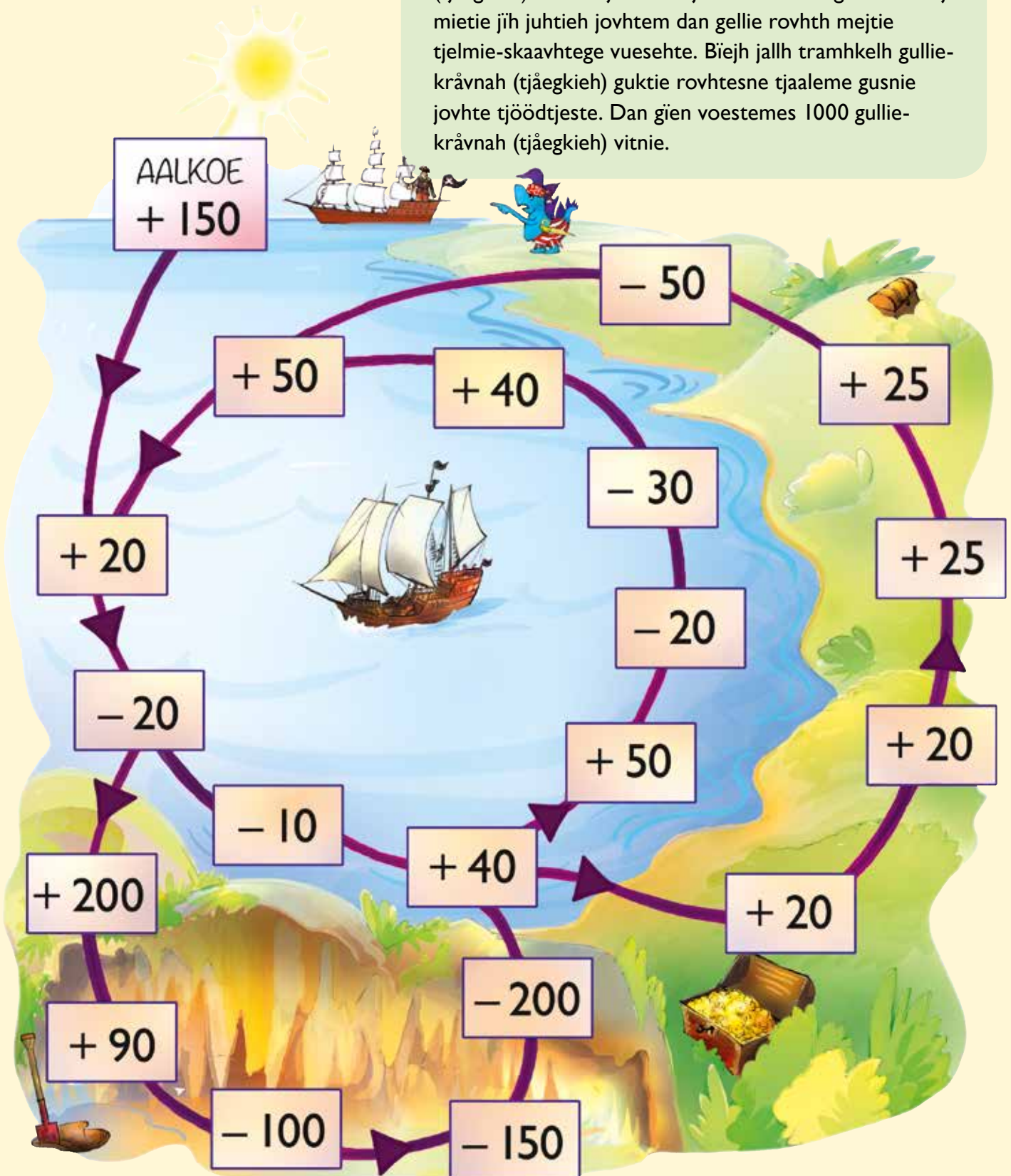
dan gellie taaligujmie guktie nuepie! _____ = 50

- Darjoeh geartoehimmie-boelhkh taaligujmie tabelleste. Dovne lierehtimmieh jih vaastoeh tjuerieh taalh tabelleste årrohdh.

SPĪELE: Voestemes taalese 1000


SPĪELE-NJOELKEDASSH

Spealadie gööktesh jallh gallesh: Fiere guhte spielje aktem jovhtem aalkose beaja jih 150 gullie-krávnajgumie (tjáegkieh) aalka. Tjetskieh tjelmie-skaavhtegem váaroej mietie jih juhtieh jovhtem dan gellie rovtht mejtie tjelmie-skaavhtege vuesehte. Biejh jallh tramhkelh gullie-krávnah (tjáegkieh) guktie rovhtesne tjaaleme gusnie jovhte tjöödtjeste. Dan gien voestemes 1000 gullie-krávnah (tjáegkieh) vitnie.





ADDISJOVNE JIH SUBTRAKSJOVNE







SPIELE-NJOELKEDASSH

Man gellie spielijh: 2-4.

Deerpegh: Göökte tjelmie-skaavhtegh. Tjetskieh dejtie göökte tjelmie-skaavhtegidie vâaroey mietie jîh biejh tjâanghkan göökte-siffere taalese. Jis 3 jîh 5 tjelmie-skaavhtegisnie âadtje, mahtah darjodh 35 jallh 53. Daate daan vâaroen tjâegkieh. Tjaelieh taalem goerese. Biejh tjâegkide tjâanghkan, mejtie aerebe âadtjeme. Dihte vitnie gie voestemes 500 jaksa.




Vuesiehtimmien gaavhtan:

- Manne voestegh  ,
- jîh 52 goerese tjaalam.
- Dan mænngan  ,
- âadtjoem jîh 63 goerese tjaalam.
- Mov Leah daelie 115 tjâegkieh jîh kroessem dah aerebe tjatskoej bijjelen biejem.

Tjuategh	Lâhkegh	Aktegh
	5	2
	6	3
1	1	5

[.] Ryöknedh 156 + 221.



Manne naemhtie
ussjedem!

$$\begin{aligned}
 100 + 200 &= 300 \\
 50 + 20 &= 70 \\
 6 + 1 &= \underline{7} \\
 &= \underline{377}
 \end{aligned}$$


Manne naemhtie
ussjedem!



$$300 + 70 + 7 = \underline{377}$$

[.] Ryöknedh.

$$126 + 243 =$$




= _____ kr

$$232 + 115 =$$



= _____ kr

$$346 + 232 =$$



= _____ kr

[·] Ryöknedh.

$$434 + 125 =$$

$$512 + 273 =$$

$$208 + 381 =$$

$$652 + 234 =$$

[·] Ryöknedh 241 + 135.



Dellie
åadtjoejibie ...

1	+	5	=			6
40	+	30	=			70
200	+	100	=			300
						376

GÏEHTJH!
Daam hov buektiehtim!



	tjuategh	lâhkegh	aktegh
	2	4	1
+	1	3	5
=	3	7	6

[·] Man gellie aktegh, lâhkegh jîh tjuategh?

	1	2	4
+	2	3	2
=			

	3	1	5
+	1	2	1
=			

	4	3	1
+	5	0	2
=			

	2	4	4
+	3	0	2
=			

	6	2	0
+	2	7	3
=			

	4	0	3
+	3	9	2
=			

	5	4	5
+	3	3	4
=			

	6	7	2
+	3	2	7
=			

	3	4	7
+	2	5	1
=			

	2	3	5
+	6	2	3
=			

	4	4	9
+	3	5	0
=			

	7	0	6
+	1	7	3
=			


[.] Ryöknedh 217 + 125.

Mijjeh naemhtie tseegkebe.




		2	1	7	
	+	1	2	5	
	=				

Maam daesnie darjobe? Daesnie jeenebe goh 10 aktegh sjidtieh.



Giehtjh!

217



125



10 krävnaht akten lähkagasse tsööpkebe.



Mijjeh tjaelebe:

			1		
		2	1	7	
	+	1	2	5	
	=	3	4	2	

Mujhtieh!



=



[·] Ryöknedh.

	1	2	7
+	2	3	6
=			

	5	3	6
+	1	4	8
=			

	6	3	9
+	1	1	7
=			

	1	0	7
+	3	0	5
=			

	4	1	8
+	5	6	8
=			

	2	1	7
+	6	4	5
=			

	3	5	5
+	2	8	3
=			

	2	7	3
+	3	6	4
=			


	1	2	8
+	7	5	9
=			

	3	1	9
+		6	7
=			

		8	6
+	4	9	5
=			

	5	0	6
+	2	9	6
=			

[··] Giesieh sievh fierhtede vïnhtseste rïektes prãdtjose.



[•] **Gie dihte jollemes taalem åådtje?**



SPIELE-NJOELKEDASSH
 Tjetskieh tjelmie-skaavhtegem gulmh. Fierhten tjatskose tjaelebe man gellie tjelmieh, aktege- l hkege- jallh tjuatege-s jjan. Dan gi n jollemes golme-siffere taale, aktem tj ægkiem  ådtje. Vitnije dihte gie gellemes tj ægkieh gosse njieljien aejkien spealadamme.

1.

--	--	--

2.

--	--	--

3.

--	--	--

4.

--	--	--

[••] **Gie dihte jollemes tj angkiem  ådtje?**



SPIELE-NJOELKEDASSH
 Tjetskieh tjelmie-skaavhtegem vijhth jih darjoeh aktem golme-siffere taalem jih aktem g  kte-siffere taalem. Dan gi n jollemes tj angkie vitnie.

+			
=			

+			
=			

+			
=			

[••] **Gie dihte jollemes tj angkiem  ådtje?**



SPIELE-NJOELKEDASSH
 Tjetskieh tjelmie-skaavhtegem guvhth jih darjoeh g  kte golme-siffere taalh. Dan gi n jollemes tj angkie vitnie.

+			
=			


+			
=			

+			
=			

[·] Ryöknedh 365 – 221.

Dov leah:

Datne aastah:



Manne naemhtie
ussjedem!

$$\begin{aligned} 300 - 200 &= 100 \\ 60 - 20 &= 40 \\ 5 - 1 &= \underline{4} \\ &= \underline{144} \end{aligned}$$

Manne naemhtie
ussjedem!



$$100 + 40 + 4 = \underline{144}$$

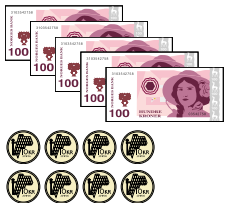
[·] Ryöknedh. Vuesehth guktie ussjedh.

$$340 - 120 =$$




= _____ kr

$$580 - 230 =$$



= _____ kr

$$645 - 424 =$$



= _____ kr

[·] Ryöknedh.

$$748 - 216 =$$

$$547 - 315 =$$

[·] Ryöknedh.

$$538 - 215$$

Manne taalide
ikte-nualan biejem.



	<i>tjuategh</i>	<i>lähkegh</i>	<i>aktegh</i>
	5	3	8
-	2	1	5
=	3	2	3

	5	8	6
-	1	3	5
=			

	3	5	7
-	1	1	1
=			

	5	5	9
-	3	2	7
=			

	8	4	6
-	3	2	3
=			

	7	9	3
-	2	6	1
=			

	5	9	7
-	3	6	2
=			

	9	6	6
-	3	4	5
=			

	8	5	8
-	4	2	7
=			


Ryöknedh 462 – 127.

Mijjeh taalide tseegkebe.



		4	6	2	
-		1	2	7	
=					

Maam daesnie darjobe? Ibie maehtieh 7 daestie tramhkelidh gosse barre 2 utnebe!



Giehtjh!

462



Mijjeh aktem lähkem luhkie krávnine tsööpkebe. Dellie nuekies aktegh sjidtieh.




Daelie 12 aktegh utnebe, jih maehetebe 7 daestie vaeltedh.

Mijjeh tjaelebe:

				10
	4	6	2	
-	1	2	7	
=	3	3	5	

Mujhtieh!



[·] Ryöknedh.

	2	5	3
-	1	3	8
=			

	5	8	3
-	1	6	1
=			

	4	6	2
-	2	2	7
=			

	9	7	3
-	5	4	4
=			

	5	8	6
-	3	4	3
=			

	7	3	4
-	5	1	6
=			

	7	5	0
-	1	1	3
=			

	3	8	1
-	2	6	8
=			

	6	4	7
-	2	6	5
=			

	8	1	3
-	3	6	0
=			

	4	8	2
-		5	8
=			

	6	3	5
-		2	6
=			

[··] Giesieh sievh fierhtede ballängeste riektes almetjasse.

$$\begin{array}{r} 777 \\ - 241 \\ \hline \end{array}$$

$$\begin{array}{r} 683 \\ - 327 \\ \hline \end{array}$$

$$\begin{array}{r} 548 \\ - 182 \\ \hline \end{array}$$

$$\begin{array}{r} 591 \\ - 225 \\ \hline \end{array}$$

$$\begin{array}{r} 721 \\ - 185 \\ \hline \end{array}$$

$$\begin{array}{r} 627 \\ - 271 \\ \hline \end{array}$$



356



366



536

☐ Biejh beetnegidie tjáanghkan.

$$263 + 175 =$$

☐ Ryöknedh.

$$345 - 228 =$$

☐ Ryöknedh.

	4	2	6
+	3	1	1
=			

	1	5	7
+	2	3	6
=			

	4	8	0
+	2	4	7
=			

☐ Ryöknedh.

	5	6	3
-	1	4	2
=			

	7	3	2
-	4	1	8
=			

	5	3	0
-	3	6	0
=			

☐ Ryöknedh.

Golme-tjuetie jih luhkie-tjijhtje plusse njieljeluhkie-vijhte.



■ Guvvedh beetnegidie jñh biejh tjåanghkan.

	3	4	5
+	2	3	6
=			

	=	
--	---	--

	1	7	3
+	1	4	5
=			

■ Juekieh taalide tjuatagidie, lårhkegidie jñh aktagidie jñh biejh tjåanghkan.

324 + 449 =

	Tjuategh	Lårhkegh	Aktegh
	3	2	4
+			
=			

255 + 461 =

	Tjuategh	Lårhkegh	Aktegh
+			
=			

☐ Guvvedh beetnegh jih tramhkelh destie.




Manne lähkegem luhkie krävvide tsööpkem.



Daelie mahtah tjihtje krävnaht kroessedh.

	3	4	2
-	1	2	7
=			



	4	5	1
-	3	1	4
=			

--	--	--

☐ Juekieh taalide tjuatagidie, lähkagidie jih aktagidie jih ryöknedh vaastoem.

548 – 229 =

747 – 365 =

	Tjuategh	Lähkegh	Aktegh
	5	4	8
-			
=			

	Tjuategh	Lähkegh	Aktegh
-			
=			

☐ Ryöknedh.

	9	4	1
-	6	2	7
=			

	5	3	8
-	3	5	6
=			

	7	0	4
-	2	6	1
=			

	6	5	7
-	4	9	2
=			

SPIELE: Unnemes joekehtasse.

SPIELE-NJOELKEDASSH

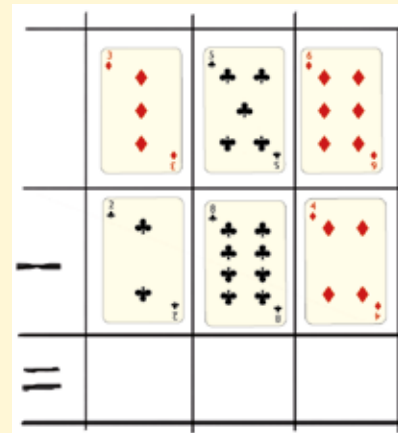
Man gellie spielijh: 2-4.

Deerpegh: Spiele-käärhth, käärhtigujmie

1 (esseste) jih äktsede käärhtese. Pleenth käärhtide. Vedtieh 6 käärhth fiere guhtese.

Biejh käärhtide tjâanghkan göökte golme-siffere taalide. Tramhkelh dam unnemes taalem dehtie stööremes taaleste. Vitnije d'ihthe gien unnemes vaastoe.

Vuesiehtimmien gaavhtan:



Mij sifferidie dej daarhvi duekesne?

		4	6
+	2		0
=	5	6	

	1		
+	6	3	6
=		4	1

	4		5
+		7	
=	8	5	3

	8	4	
-	4		4
=		1	3

	5		2
-	4	6	
=		2	1


	7		
-	5	3	7
=		0	2

	6	5	
-			9
=	5	2	1

			5
-	2	6	
=	4	2	7

			5
-	3	9	
=	2	1	1

12 GEOMETRIJE 2



[.]

Riekte skaavhte 90°

Námhpoeh skaavhte, stuerebe goh 90°


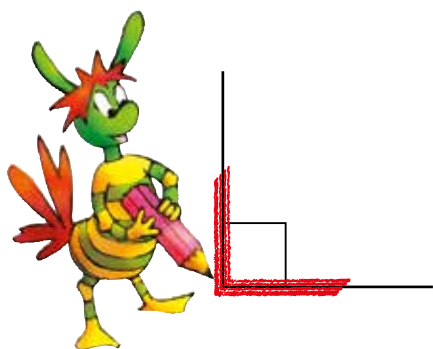
Snjuhtjeles skaavhte, unnebe goh 90°




[..] Mïetesth skaavhtide.

Maam datne mïetestamme?	Riekte 	Námhpoeh 	Snjuhtjeles 


[·] Klaeredh skaavhtide.



[·] Riekte skaavhth.



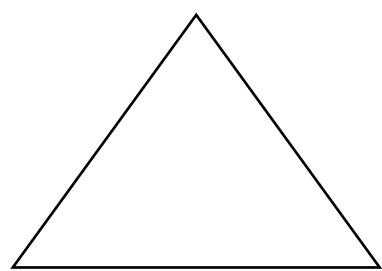

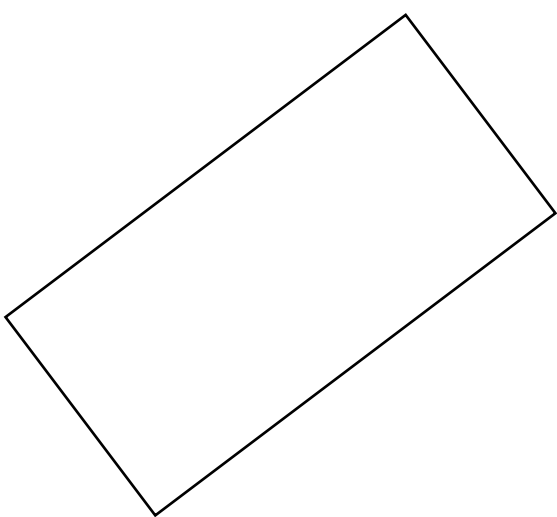

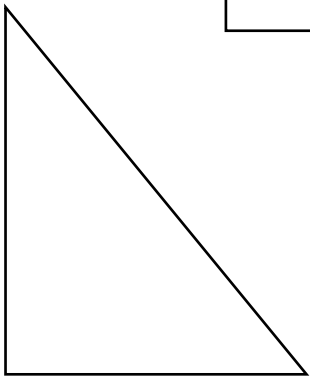
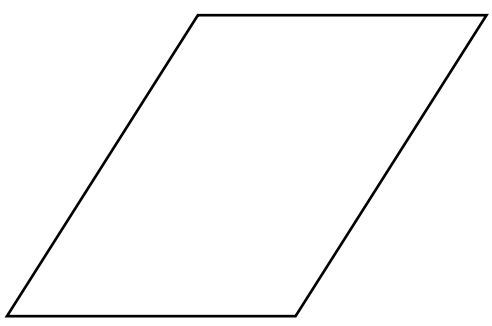

[··] Klaeredh gaajkh dejtje riekte skaavhtide.




[·] Mierhkesjh dejtje riekte skaavhtide.



Daesnie gellie riekte skaavhth.




Daesnie sijhtem mietestidh akten pæhpere-aarhken borteginie.

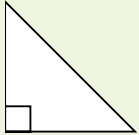


[.]

Mijjeh göökte golmen-bortegh äadtjobe, fierhtine riekte skaavhtine.






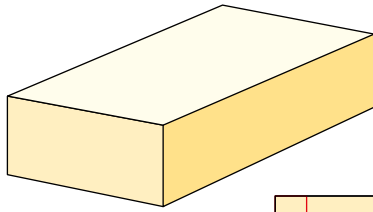
Mejtie golmen-bortege göökte riekte skaavhth maahta utnedh?



Akten riekte-skaavhtes golmen-bortegen lea akte riekte skaavhte.

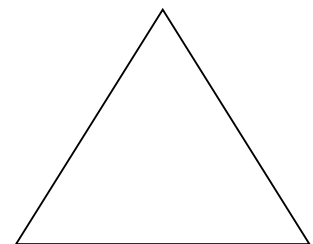

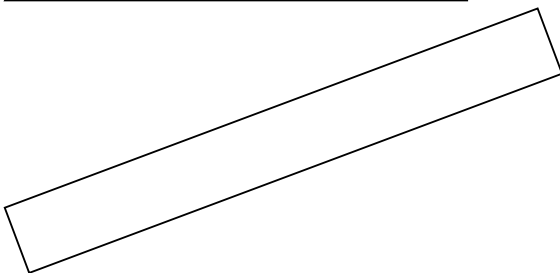



[..] Klaeredh golmen-bortegidie gusnie akte riekte skaavhte.





Rektangeele: Njieljen-bortege barre riekte skaavhtigujmie. Göktesi göktesi bielieh seamma guhkie.

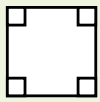
[.] Klaeredh rektangeelidie.



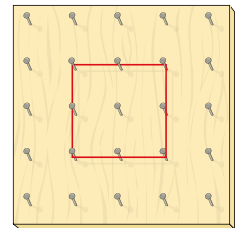
[.]

Tjelmie-skaavhtegen gierh lea
nrieljen-bortege barre riekte
skaavhtigujmie – akte rektangeele.

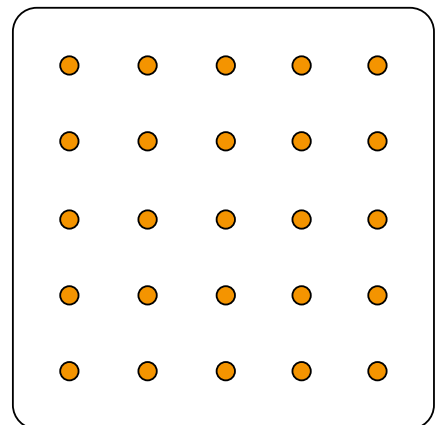
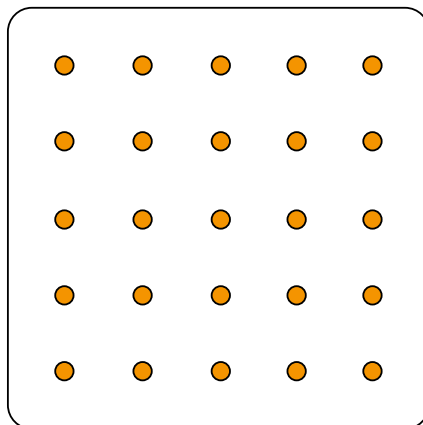
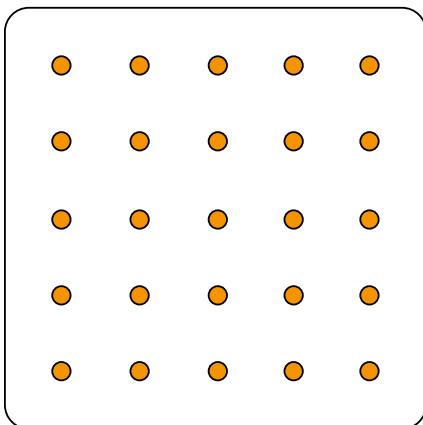
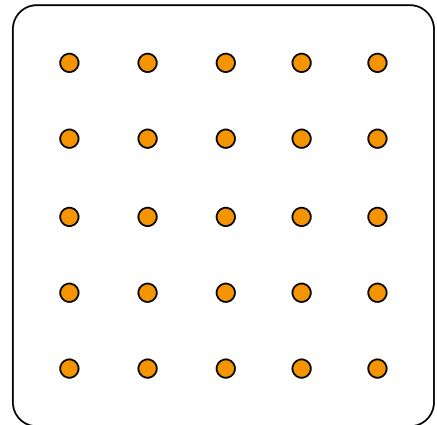
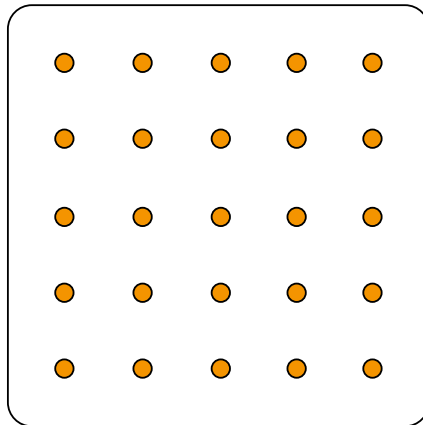
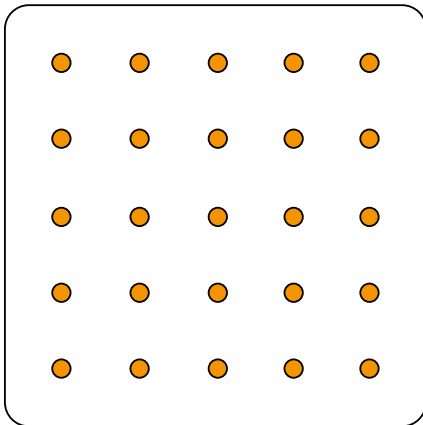
Nov, jih daesnie gaajhkh
bielieh seamma guhkie.
Daagkerem rektangeelem
kvadraatine gohtje.




Kvadraate: Nrieljen-bortege
barre riekte skaavhtigujmie.
Gaajhkh bielieh seamma guhkie.



[..] Guvvedh 3 kvadraath jih 3 rektangeelh.

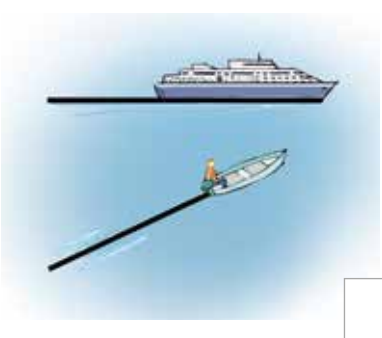










[.]




Göökte sievh mah seamma guhkie leah parallelle.

[.] Mij sievide parallelle leah?

[.]


Akten parallelogrammesne eah dah skaavth daarpesjh riekte årrodh.



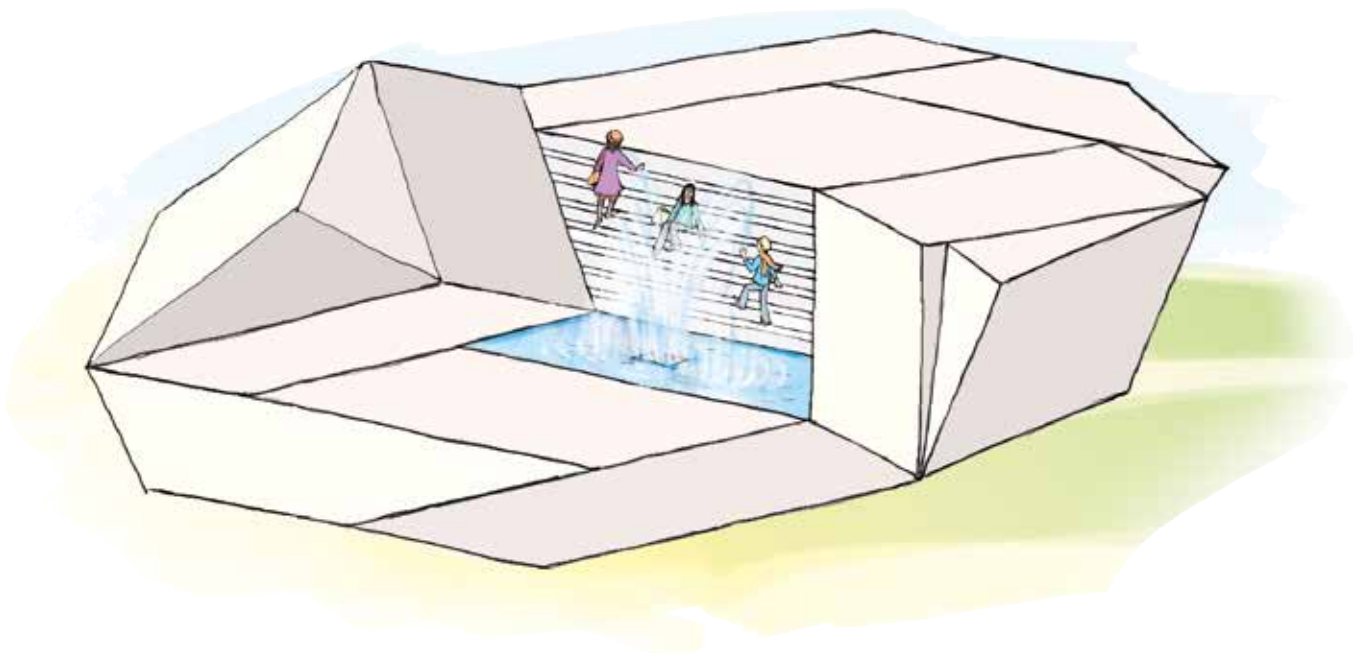
Akte parallelogramme lea njieljebortege, parallele bieliejgumie.



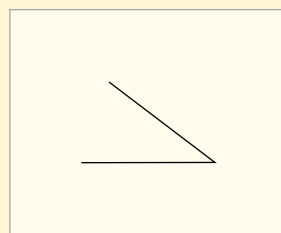
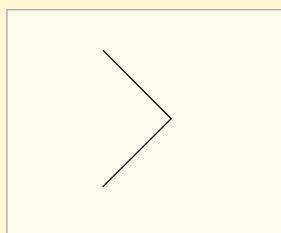
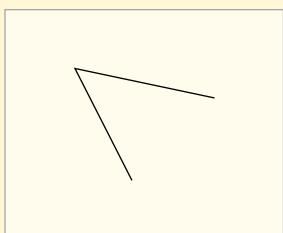
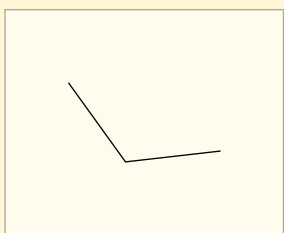
[.] Klaeredh parallelogramme.



[.] Klaeredh parallelogramme skulptuvresne.



☐ Giesieh sievh riektes nommese.

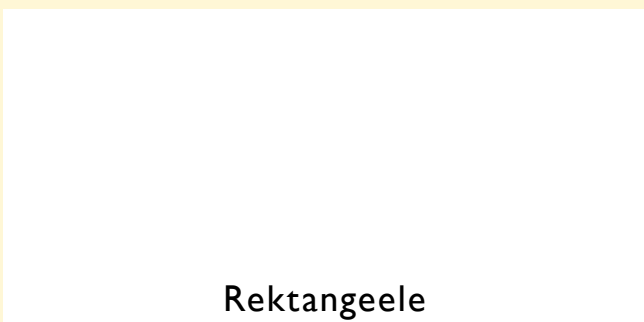


Riekte skaavhte

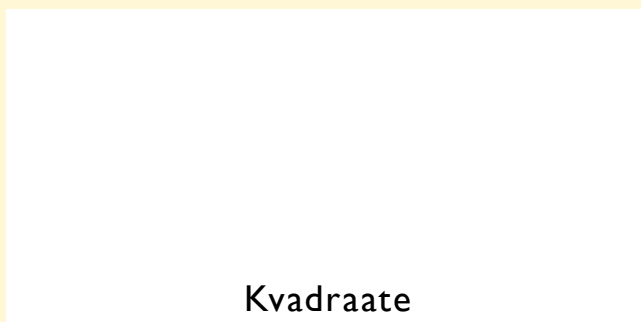
Snjuhtjeles skaavhte

Nåmhpoeht skaavhte

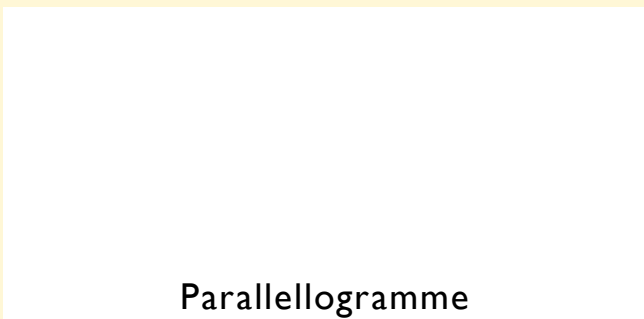
☐☐ Guvvedh haemide.



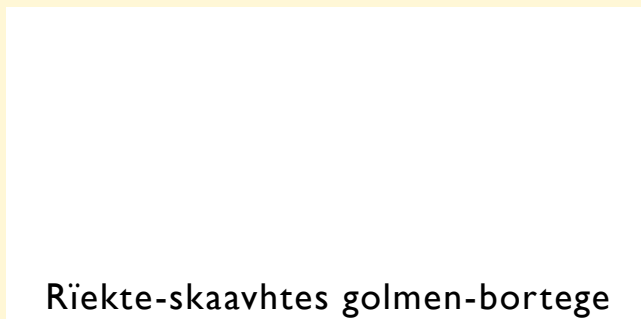
Rektangeele



Kvadraate

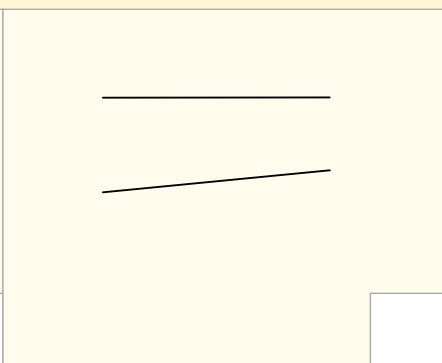
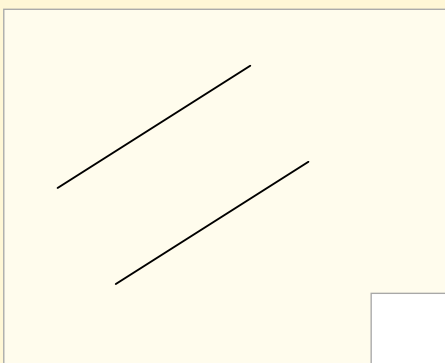


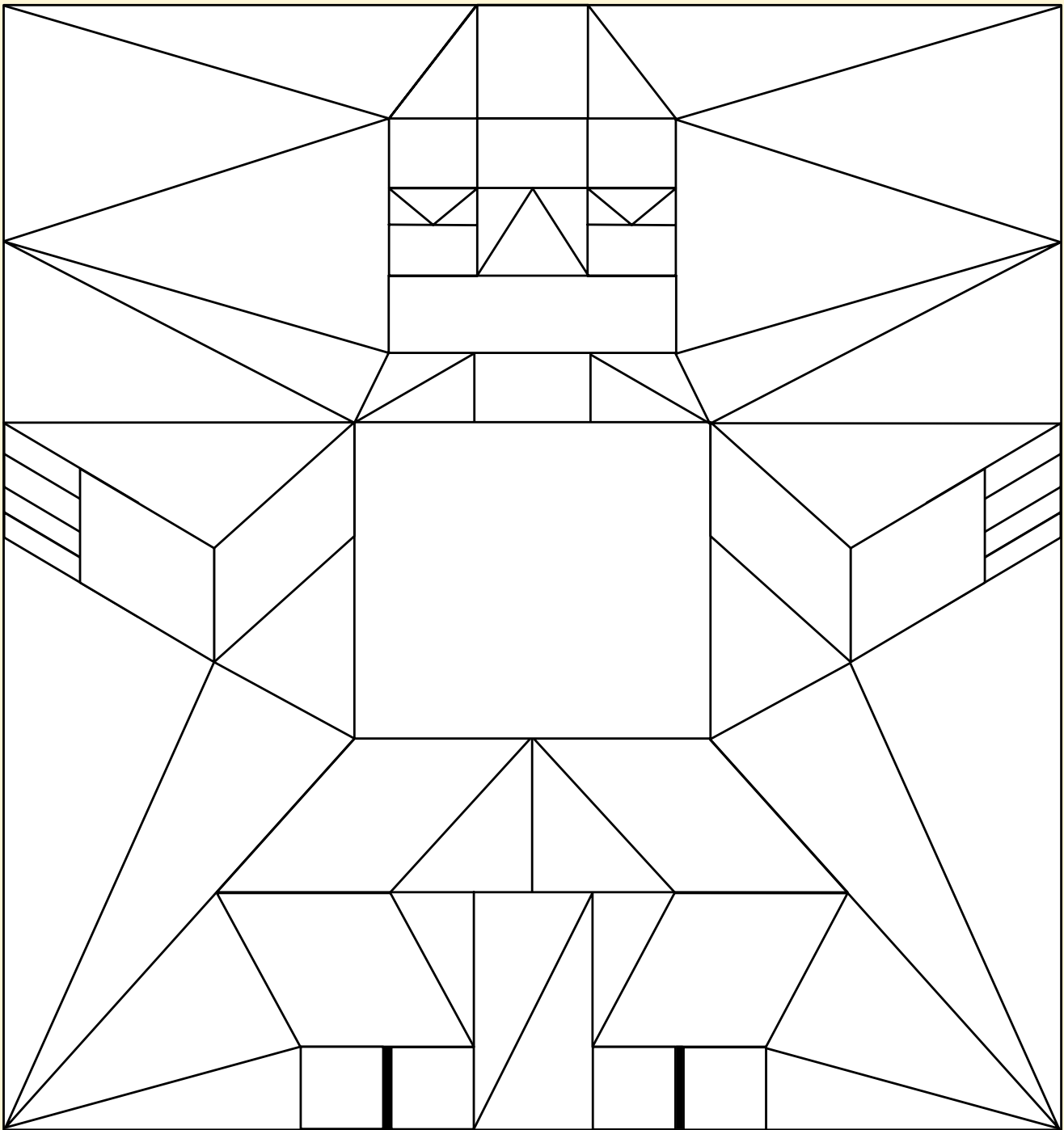
Parallelogramme




Riekte-skaavhtes golmen-bortege

☐☐ Mij sievide parallele?






- Gaavnh daejtie hammojde guvvesne.
Klaeredh riektes klaaran.



Riekte-skaavhtes
golmen-bortege



Golmen-bortege



Kvadraate




Rektangeele



Parallelogramme

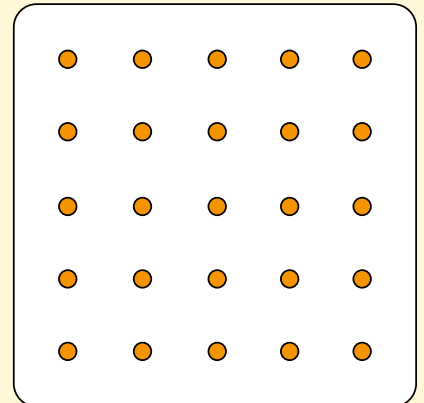
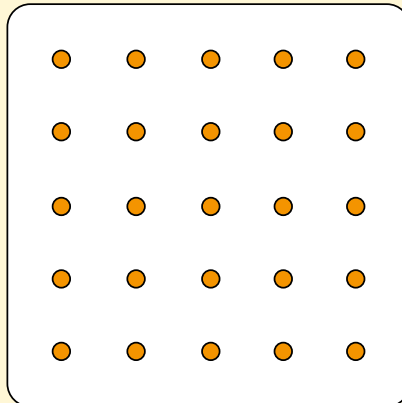
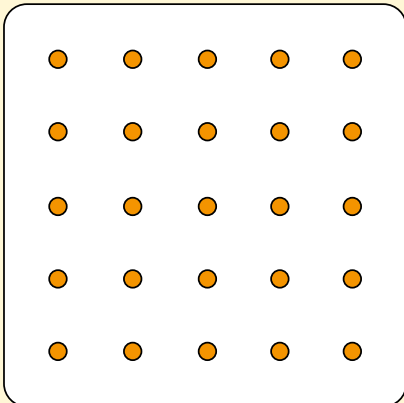
Parallelogramme



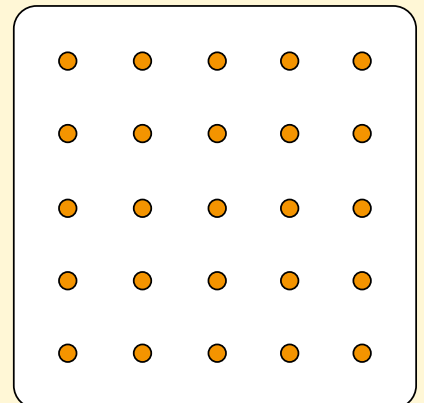
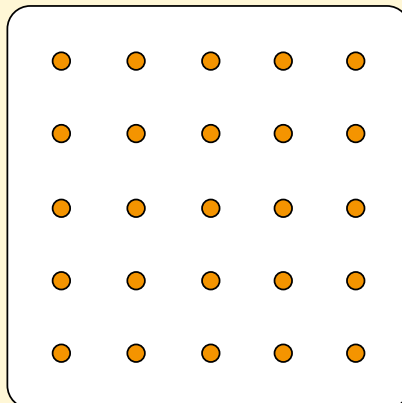
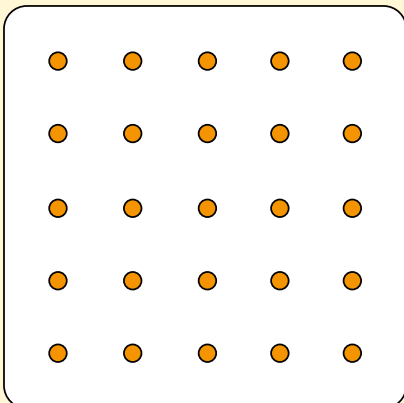
Mov haemien leah
njieljih riekte skaavht.



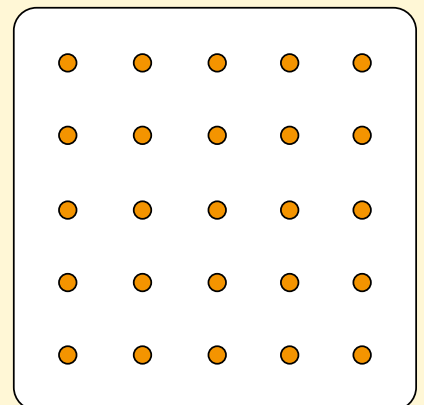
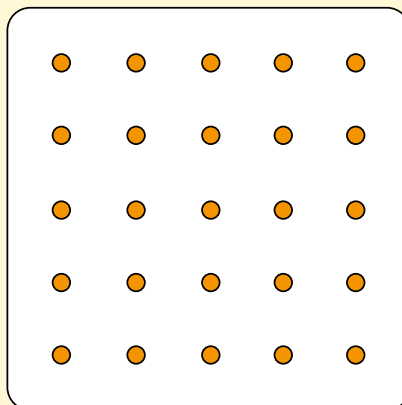
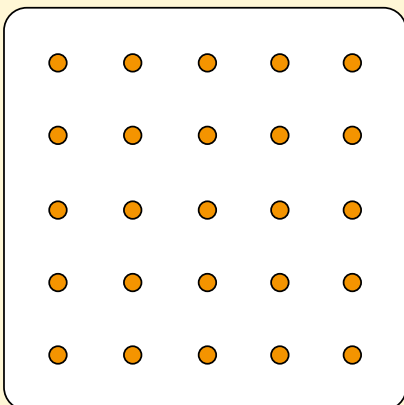
• Guvvedh parallelogrammh.



•• Guvvedh golmen-bortegh riekte skaavhtigujmie.

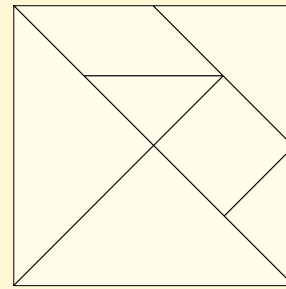


••• Guvvedh haemieh unnemes akten riekte skaavhtine.



Provhkh tangramme-spielem.

- Magkerh geometriske haemieh tangrammesne gaavnh?



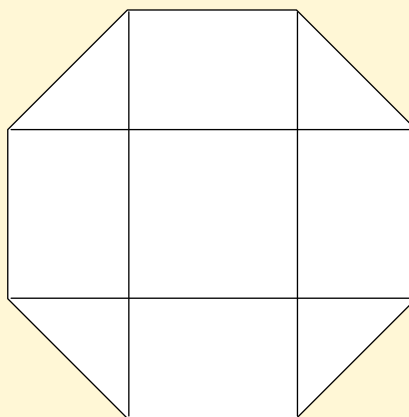
- Darjoeh haemieh gosse gellie biekhieh tjåanghkan biejh. Guvvedh haemieh skreerkeme-gærjese.

Darjoeh

- golmen-bortegh
- rektangeelh
- kvadraath
- parallelogrammh




- Man gellie riekte skaavhth dan haemien?



_____ riekte skaavhth

13 BRÖÖKH



[·] Juekieh laejpiem guktie seamma jeenem fiere guhtese sjædta.

Fierhten snaejrie



Two children (one with blonde hair, one with red hair) are shown next to a rectangular chocolate bar with almond flakes.

$$\frac{1}{2}$$



Three children (one with blonde hair, one with red hair, one with brown hair) are shown next to a rectangular chocolate bar with almond flakes.

$$\frac{1}{3}$$



Four children (one with blonde hair, one with brown hair, one with red hair, one with blonde braids) are shown next to a rectangular chocolate bar with almond flakes.

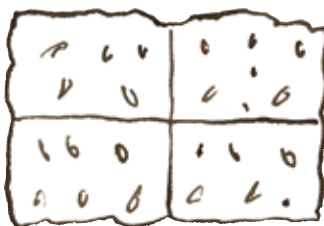

$$\frac{1}{4}$$



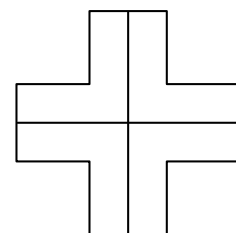
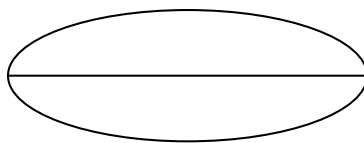

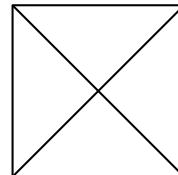
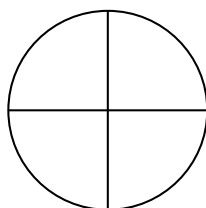

Five children (one with blonde hair, one with blonde braids, one with dark skin, one with brown hair, one with red hair) are shown next to a rectangular chocolate bar with almond flakes.

$$\frac{1}{5}$$

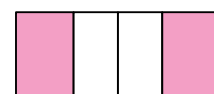
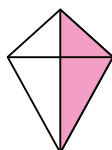
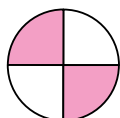
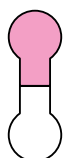
[·] Klaeredh aktem guaktahtassem: $\frac{1}{2}$



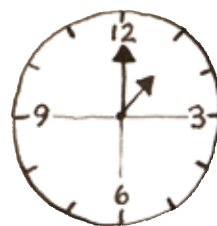

[·] Klaeredh aktem guaktahtassem: $\frac{1}{2}$




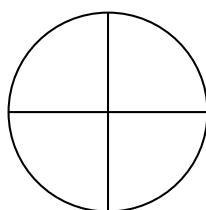
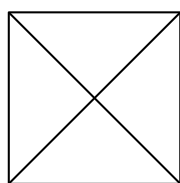

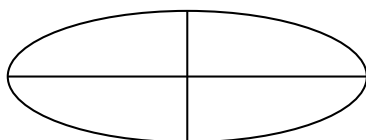

[·] Gievledh haemiej bijre gusnie $\frac{1}{2}$ klaeriedamme.



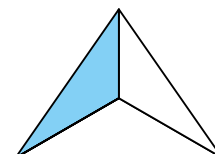
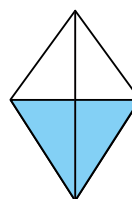
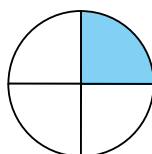
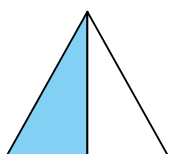
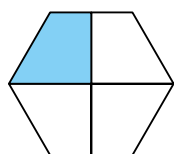
[·] Klaeredh aktem njealjahtassem: $\frac{1}{4}$




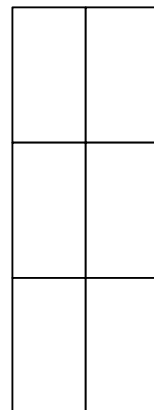
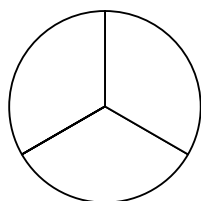
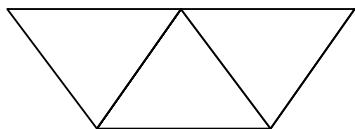
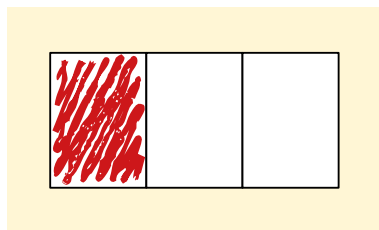
[·] Klaeredh aktem njealjahtassem: $\frac{1}{4}$




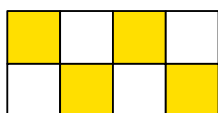
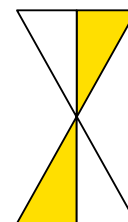
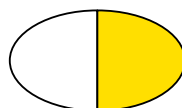
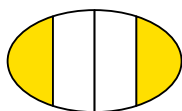
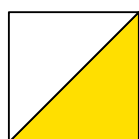
[·] Gievledh haemiej bijre gusnie $\frac{1}{4}$ klaeriedamme.



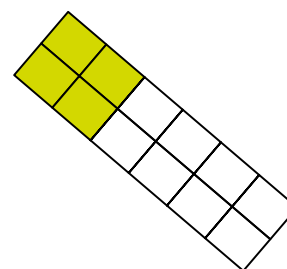
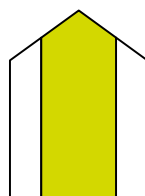
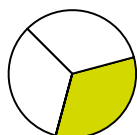
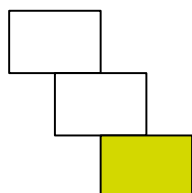
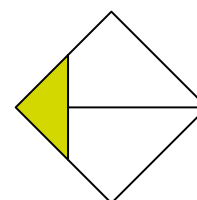
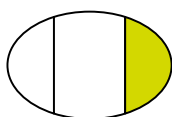

[·] Klaeredh aktem gålmahtassem: $\frac{1}{3}$



[·] Gievledh haemiej bijre gusnie $\frac{1}{2}$ klaeriedamme.



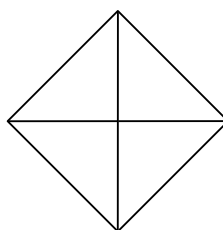
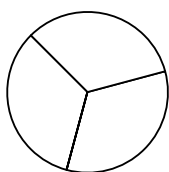

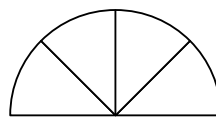
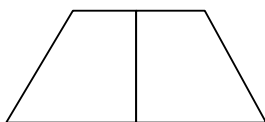
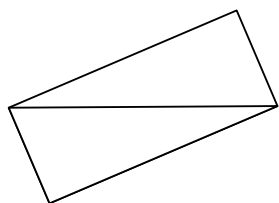
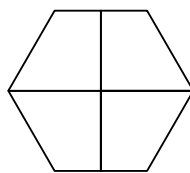
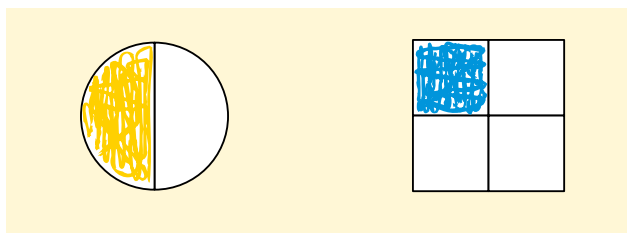
[·] Gievledh haemiej bijre gusnie $\frac{1}{3}$ klaeriedamme.



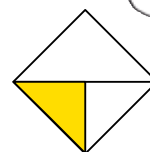

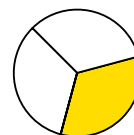

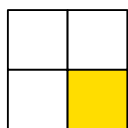
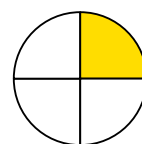
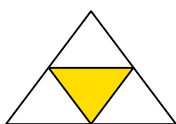
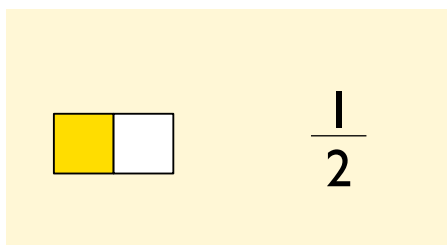
[·] Klaeredh: $\frac{1}{2}$ 

$\frac{1}{4}$ 

$\frac{1}{3}$ 



[·] Man stoere biehkien klaeriedamme?





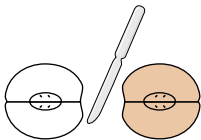
Mejtie daam buekteht?

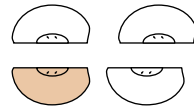
[.]




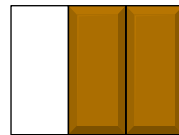
[.] Man stoere biekiem klaeriedamme?

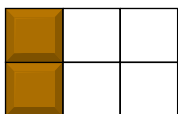

 $\frac{1}{4}$


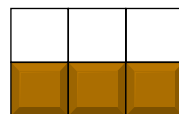









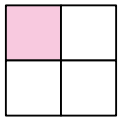


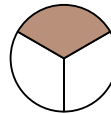



[.]

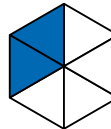


[.] Man stoere biekhiekl klaeriedamme?

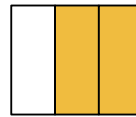




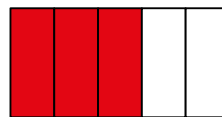


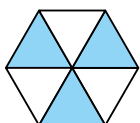


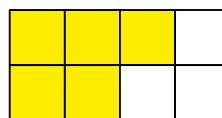




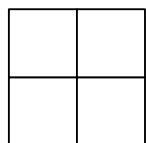




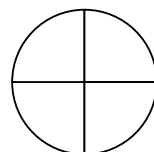




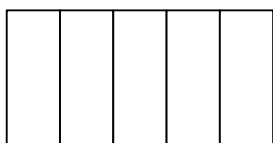
[·] Klaeredh.



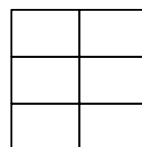
$$\frac{1}{4}$$




$$\frac{3}{4}$$



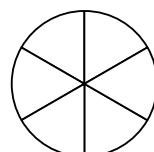
$$\frac{1}{5}$$



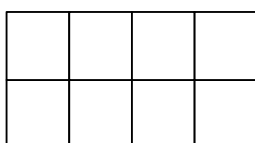
$$\frac{3}{6}$$



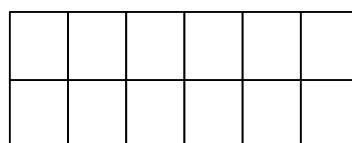
$$\frac{2}{3}$$



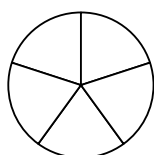
$$\frac{2}{6}$$



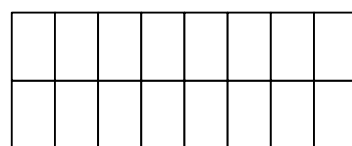
$$\frac{5}{8}$$



$$\frac{4}{12}$$




$$\frac{3}{5}$$

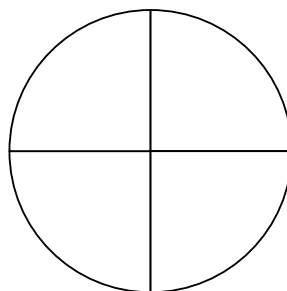


$$\frac{7}{16}$$

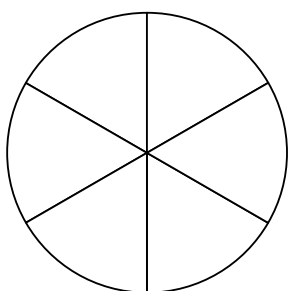
[·] Klaeredh.



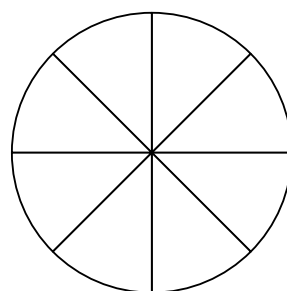
$$\frac{1}{2}$$



$$\frac{2}{4}$$




$$\frac{3}{6}$$




$$\frac{4}{8}$$

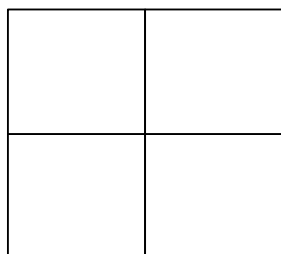
[··] Klaeredh. Viertesth dejtie biehkide mejtie klaeriedamme.
Maam vuajnah?



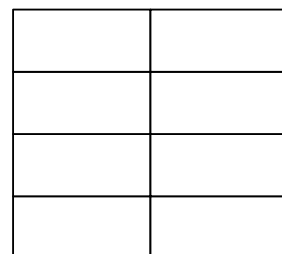
$$\frac{1}{3}$$



$$\frac{2}{6}$$



$$\frac{1}{4}$$



$$\frac{2}{8}$$

Guktie jis akten vielen aejkien juekebe?

Mijjeh edtjebe vaffelem juekedh.

$\frac{4}{4}$

$\frac{2}{4}$

$\frac{1}{4}$ $\frac{1}{4}$

[.] Juekieh sjokoladem. Tjaelieh bröökide.

$\frac{2}{2}$

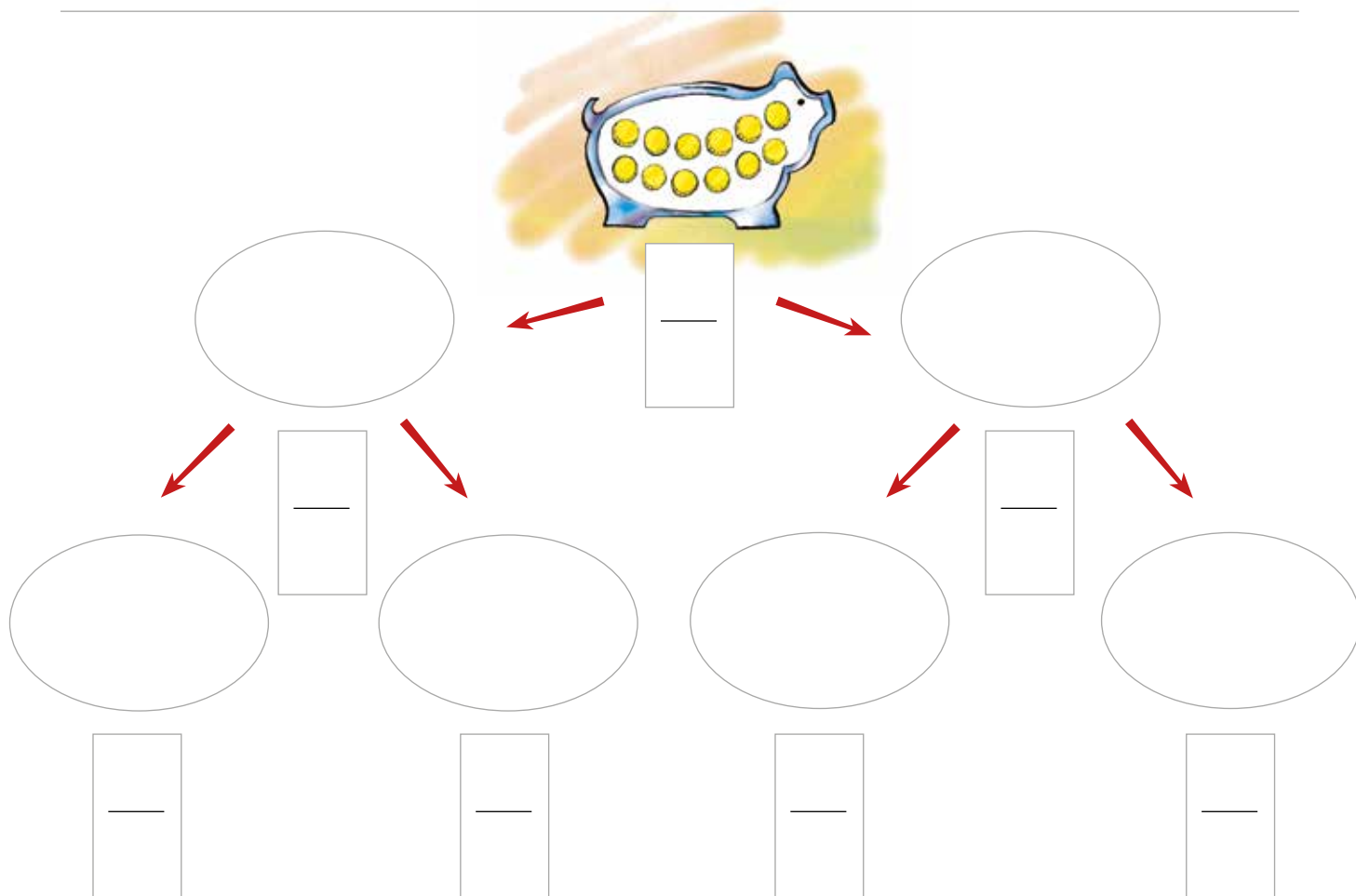
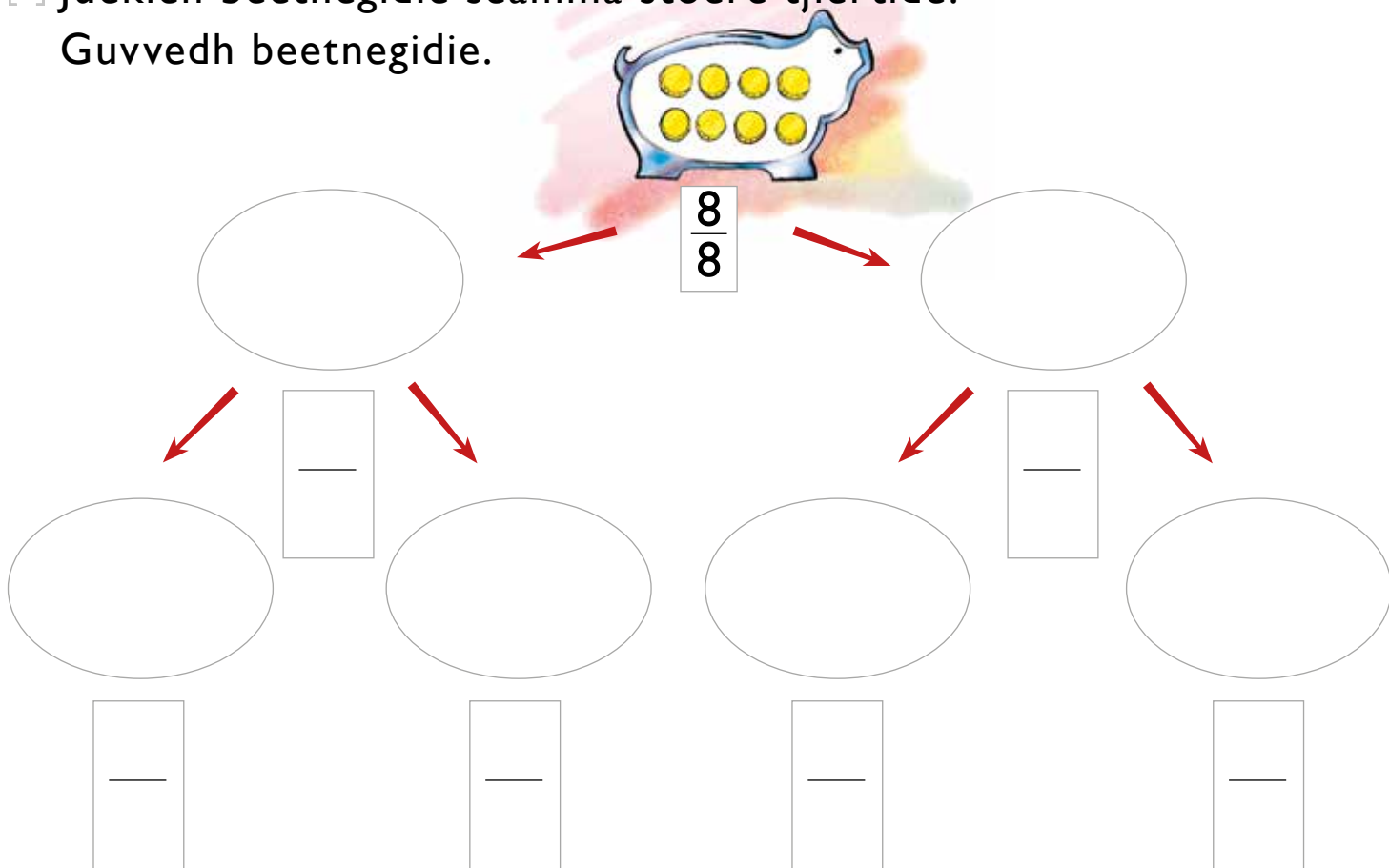
$\frac{1}{2}$

$\frac{1}{4}$ $\frac{1}{4}$


* Soptsestalleme-guvvie gosse seamma stoere biehkide juekedh. Man stoere brööke-biehkje fierhte biehkje abpe vaffelistie sjædta? •• Tjaelieh man stoere brööke-biehkje sjokoladen fierhte biehkje sjædta gosse sjokoladem juakeme.

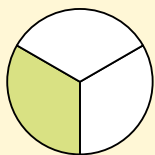
[·] Juekieh beetnegidie seamma stoere tjiertide.

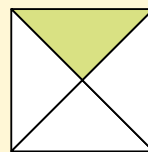
Guvvedh beetnegidie.

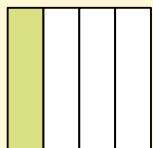


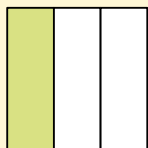
Man stoere biehiem klaeriedamme?

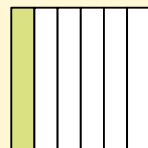


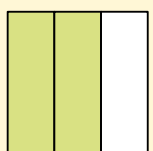


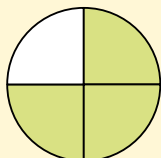


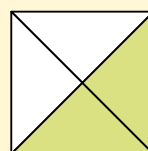




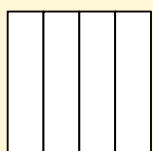




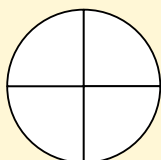




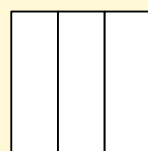
Klaeredh.



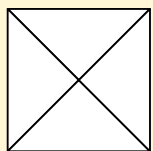
$$\frac{1}{4}$$



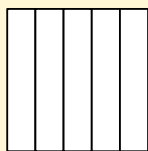
$$\frac{1}{2}$$



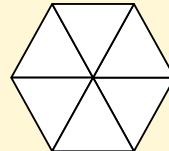
$$\frac{1}{3}$$



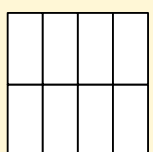
$$\frac{3}{4}$$



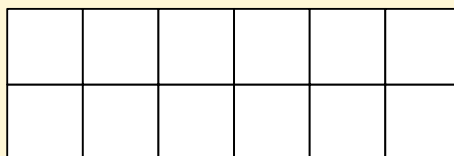
$$\frac{3}{5}$$



$$\frac{2}{6}$$


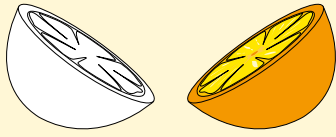




$$\frac{3}{8}$$



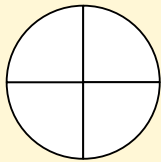
$$\frac{5}{12}$$

Man stoere biehiem klaeriedamme?





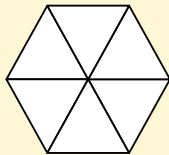
Klaeredh.



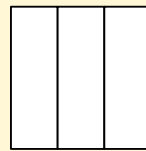
$$\frac{1}{4}$$



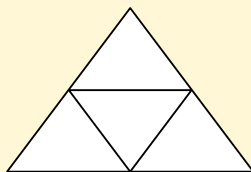
$$\frac{1}{2}$$




$$\frac{1}{6}$$



$$\frac{2}{3}$$

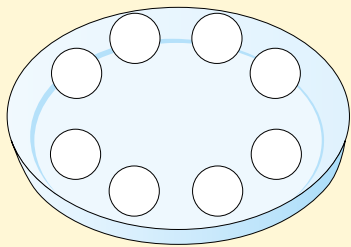


$$\frac{2}{4}$$

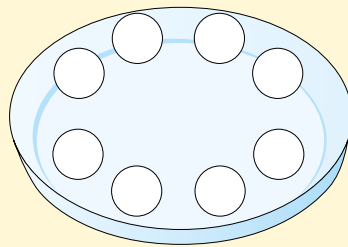


$$\frac{3}{5}$$

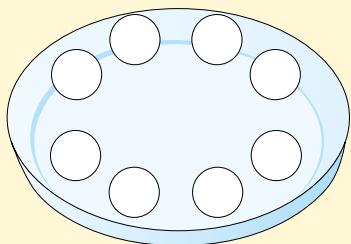
☐ Klaeredh.



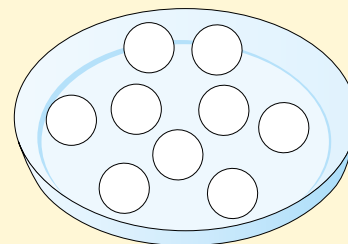
$\frac{1}{2}$



$\frac{1}{4}$




$\frac{3}{4}$




$\frac{1}{3}$

☐ Klaeredh. Tjælieh lãhkoem.




$\frac{1}{2}$




$\frac{1}{4}$

_____ tjååhtjh

_____ tjååhtjh



$\frac{1}{3}$





$\frac{2}{3}$


_____ tjååhtjh


_____ tjååhtjh

□ Klaeredh tjaebpies goerem.


$\frac{1}{2}$ rovhtijste edtjeh
(rööpses) årrodh 


$\frac{1}{4}$ rovhtijste edtjeh
(plaaves) årrodh 


$\frac{1}{4}$ rovhtijste edtjeh
(kruana) årrodh 

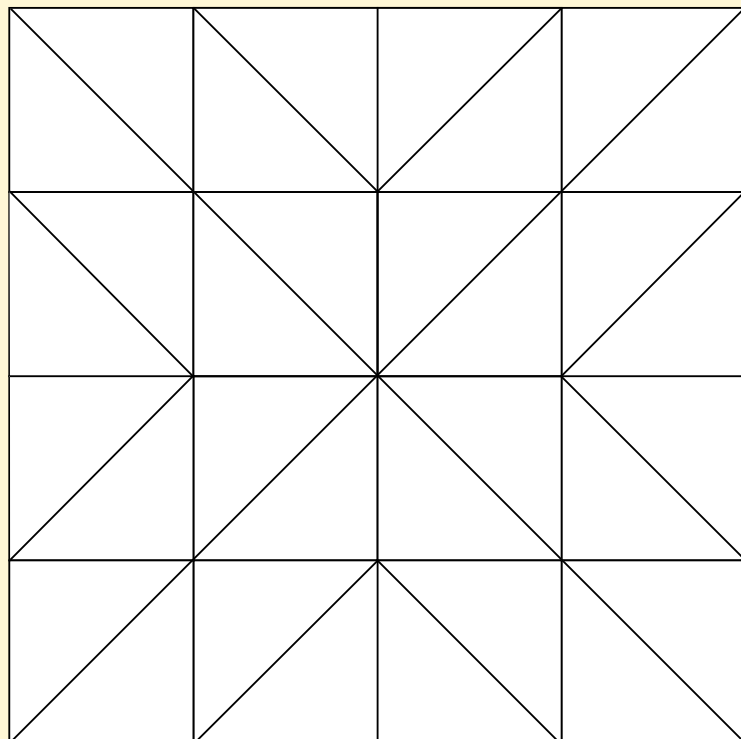


□ Klaeredh tjaebpies goerem.

$\frac{1}{2}$ golmen-borteg-
ijstie edtjeh
(lijla) årrodh 

$\frac{1}{4}$ golmen-borteg-
ijstie edtjeh
(tjöölle) årrodh 

$\frac{1}{4}$ golmen-borteg-
ijstie edtjeh
(rööpses) årrodh 






DYJREGEEHTIJE

Gaahtoem geehtedh, 1 biejjem	10 kr
B'ienjine m'innedh	5 kr
Undulatem geehtedh, 1 biejjem	4 kr
Gaahtoem m'arrehtidh	3 kr
B'ienjem haarjadidh	2 kr

Daesnie golmen
giert h berteme.

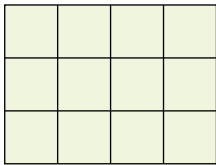


Jih göökte
bertemh.

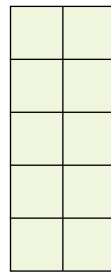


$$2 \cdot 3 = \underline{6}$$


[.] Man gellie?




$$4 \cdot 3 = \underline{\quad}$$




$$\underline{\quad} \cdot \underline{\quad} = \underline{\quad}$$




$$\underline{\quad} \cdot \underline{\quad} = \underline{\quad}$$



$$\underline{\quad} \cdot \underline{\quad} = \underline{\quad}$$

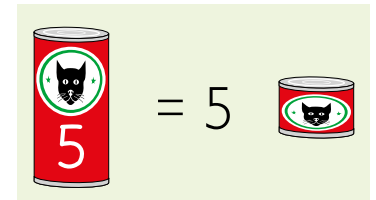


$$\underline{\quad} \cdot \underline{\quad} = \underline{\quad}$$



$$\underline{\quad} \cdot \underline{\quad} = \underline{\quad}$$

[.]



[.] Man gellie borhtjh gaahoe-beapmojne?



3 · 5 = _____



_____ · 5 = _____



_____ · 5 = _____



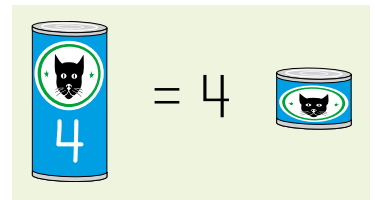
_____ · 5 = _____



_____ · 5 = _____



_____ · 5 = _____



[.] Man gellie borhtjh?



2 · 4 = _____



_____ · 4 = _____



_____ · 4 = _____



_____ · 4 = _____

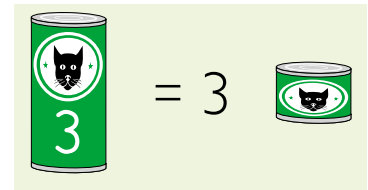


_____ · 4 = _____



_____ · 4 = _____

[·] Man gellie borhtjh gaahtoe-beapmojne?



 $\cdot 3 =$ _____

 $\cdot 3 =$ _____


 $\cdot 3 =$ _____

 $\cdot 3 =$ _____

 $\cdot 3 =$ _____

 $\cdot 3 =$ _____

[··] Man gellie borhtjh?




 $\cdot 10 =$ _____

 $\cdot 10 =$ _____

 $\cdot 10 =$ _____

 $\cdot 10 =$ _____







 $\cdot 10 =$ _____

 $\cdot 10 =$ _____

 $\cdot 10 =$ _____

 $\cdot 10 =$ _____

[.] Man gellie rovht fierhte guvvie gaptja?

6		<input type="text"/>	
<input type="text"/>			
<input type="text"/>			
<input type="text"/>	<input type="text"/>		

[·] Darjoeh ovmesseie rektangeelh riektes lähkoe rovhtigujmie.

Daan rektangeelen
12 rovth.

12


12


16


16


24

[·] Man gellie bieljih kanininie ektesne?



$$2 + 2 + 2 = 3 \cdot 2 = \underline{6}$$


$$2 + 2 + 2 + 2 + 2 = \underline{\quad} \cdot 2 = \underline{\quad}$$

















$$2 + 2 = \underline{\quad} \cdot 2 = \underline{\quad}$$


$$2 + 2 + 2 + 2 = \underline{\quad} \cdot 2 = \underline{\quad}$$

[·] Tjaelieh taalide 2-geartoeh timmesne.

2	+	4	=						
---	---	---	---	--	--	--	--	--	--


[·] Mij taalide balvi duekesne?


$3 \cdot 2 =$ 	$7 \cdot 2 =$ 	$3 \cdot$  $= 6$
 $\cdot 2 = 20$	 $\cdot 2 = 2$	 $\cdot 2 = 8$
 $\cdot 2 = 4$	$8 \cdot 2 =$ 	 $\cdot 2 = 12$
$4 \cdot 2 =$ 	$5 \cdot 2 =$ 	 $\cdot 2 = 14$
 $\cdot 2 = 6$	 $\cdot 2 = 18$	$10 \cdot 2 =$ 


• Tjaelieh geartoeh timmie-boelkine jih ryöknedh. •• Jærhkieh taale-bääresem 2-geartoeh timmesne.
 ••• Tjaelieh taalide mah fäätesieh, guktie ryöknedimmie-boelkhk riektes sjidieh.


[·] Man gellie gaengerh sygkelinie ektesne?




 $3 + 3 + 3 + 3 = 4 \cdot 3 = \underline{12}$


 $3 + 3 = \underline{\quad} \cdot 3 = \underline{\quad}$


 $3 + 3 + 3 = \underline{\quad} \cdot 3 = \underline{\quad}$


 $3 + 3 + 3 + 3 + 3 = \underline{\quad} \cdot 3 = \underline{\quad}$

[·] Tjælieh taalide 3-geartoehthimmesne.

3
6

[·] Guvvedh maam joem mij ryöknedimmie-boelhkide sjeahta.

$3 \cdot 3$	$5 \cdot 3$
-------------	-------------

[·] Klaeredh taalide 2-gear-toehtimmesne. Mejtie goerem vuajnah?


1	2	3	4	5	6	7	8	9	10
11	12	13	14	15	16	17	18	19	20
21	22	23	24	25	26	27	28	29	30
31	32	33	34	35	36	37	38	39	40


[··] Klaeredh taalide 3-gear-toehtimmesne. Mejtie goerem vuajnah?


1	2	3	4	5	6	7	8	9	10
11	12	13	14	15	16	17	18	19	20
21	22	23	24	25	26	27	28	29	30
31	32	33	34	35	36	37	38	39	40


[···] Mij taalide dovne 2-gear-toehtimmesne jñh 3-gear-toehtimmesne.


[.] Man gellie gaameh-paarrh? Man gellie gaamegh?



3 paarrh
 $3 \cdot 2 = 6$ gaamegh



_____ paarrh
_____ $\cdot 2 =$ _____ gaamegh



_____ paarrh
_____ $\cdot 2 =$ _____ gaamegh


_____ paarrh
_____ $\cdot 2 =$ _____ gaamegh



_____ paarrh
_____ $\cdot 2 =$ _____ gaamegh



_____ paarrh
_____ $\cdot 2 =$ _____ gaamegh



_____ paarrh
_____ $\cdot 2 =$ _____ gaamegh



_____ paarrh
_____ $\cdot 2 =$ _____ gaamegh


[.] Man gellie golme-koersh? Man gellie lasth?



2 golme-koersh
 $2 \cdot 3 = 6$ lasth



_____ golme-koersh
_____ $\cdot 3 =$ _____ lasth



_____ golme-koersh
_____ $\cdot 3 =$ _____ lasth


_____ golme-koersh
_____ $\cdot 3 =$ _____ lasth


_____ golme-koersh
_____ $\cdot 3 =$ _____ lasth






_____ golme-koersh
_____ $\cdot 3 =$ _____ lasth


_____ golme-koersh
_____ $\cdot 3 =$ _____ lasth


_____ golme-koersh
_____ $\cdot 3 =$ _____ lasth

[·] Man gellie juelkieh hierkine ektesne?


















 $4 + 4 = 2 \cdot 4 = \underline{8}$	 $4 + 4 + 4 + 4 + 4 = \underline{\quad} \cdot 4 = \underline{\quad}$
 $4 + 4 + 4 + 4 = \underline{\quad} \cdot 4 = \underline{\quad}$	 $4 + 4 + 4 = \underline{\quad} \cdot 4 = \underline{\quad}$

[·] Tjaelieh taalide 4-geartoehthimmesne.





4									
---	--	--	--	--	--	--	--	--	--

[·] Mij taalide balvi duekesne?

$3 \cdot 4 =$ 	 $\cdot 4 = 32$	 $\cdot 4 = 36$
 $\cdot 4 = 20$	$7 \cdot 4 =$ 	$10 \cdot$  $= 40$
$10 \cdot 4 =$ 	 $\cdot 4 = 24$	 $\cdot 4 = 12$
 $\cdot 4 = 4$	$5 \cdot 4 =$ 	 $\cdot 4 = 28$
$4 \cdot 4 =$ 	 $\cdot 4 = 8$	$8 \cdot 4 =$ 

• Tjaelieh geartoehthimmie-boelhkine jih ryöknedh. •• Jærhkieh taale-bååresem taaligujmie 4-geartoehthimmesne.
 •• Tjaelieh taalide mah fååtesieh, guktie ryöknedimmie-boelhkh riektes sjidtieh.

[·] Man gellie treblieh treblie-snjieblie ektesne?

 $5 + 5 + 5 = 3 \cdot 5 = \underline{15}$	 $5 + 5 + 5 + 5 = \underline{\quad} \cdot 5 = \underline{\quad}$
 $5 + 5 = \underline{\quad} \cdot 5 = \underline{\quad}$	 $5 + 5 + 5 + 5 + 5 = \underline{\quad} \cdot 5 = \underline{\quad}$

[·] Tjaelieh taalide 5-geartoeh timmesne.

5									
---	--	--	--	--	--	--	--	--	--

[·] Guvvedh maam joem mij ryöknedimmie-boelhkide sjeahta.





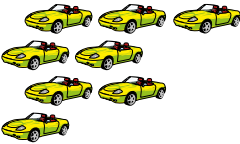

2 · 5	4 · 5
-------	-------

[·] Klaeredh taalide 4-geartoehtimmesne viskes.
 Klaeredh taalide 5-geartoehtimmesne rööpses.







1	2	3	4	5	6	7	8	9	10
11	12	13	14	15	16	17	18	19	20
21	22	23	24	25	26	27	28	29	30
31	32	33	34	35	36	37	38	39	40
41	42	43	44	45	46	47	48	49	50

[·] Mij taalide dovne 4-geartoehtimmesne jih 5-geartoehtimmesne?

[·] Man gellie bijlh?
 Man gellie gaengerh bijline ektesne?

 <p>2 bijlh</p> <p>$2 \cdot 4 = 8$ gaengerh</p>	 <p>_____ bijlh</p> <p>_____ $\cdot 4 =$ _____ gaengerh</p>
 <p>_____ bijlh</p> <p>_____ $\cdot 4 =$ _____ gaengerh</p>	 <p>_____ bijlh</p> <p>_____ $\cdot 4 =$ _____ gaengerh</p>
 <p>_____ bijlh</p> <p>_____ $\cdot 4 =$ _____ gaengerh</p>	 <p>_____ bijlh</p> <p>_____ $\cdot 4 =$ _____ gaengerh</p>

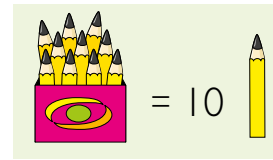
[·] Man gellie gieth? Man gellie soermh?


 $3 \cdot 5 = \underline{15}$ 3 gieth 15 soermh	 $\underline{\quad} \cdot 5 = \underline{\quad}$ _____ gieth _____ soermh
 $\underline{\quad} \cdot 5 = \underline{\quad}$ _____ gieth _____ soermh	 $\underline{\quad} \cdot 5 = \underline{\quad}$ _____ gieth _____ soermh
 $\underline{\quad} \cdot 5 = \underline{\quad}$ _____ gieth _____ soermh	 $\underline{\quad} \cdot 5 = \underline{\quad}$ _____ gieth _____ soermh


[··] Ryöknedh.


$4 \cdot 2 = \underline{8}$	$3 \cdot 3 = \underline{\quad}$	$5 \cdot 4 = \underline{\quad}$
$2 \cdot 5 = \underline{\quad}$	$1 \cdot 4 = \underline{\quad}$	$7 \cdot 3 = \underline{\quad}$
$6 \cdot 4 = \underline{\quad}$	$3 \cdot 2 = \underline{\quad}$	$7 \cdot 5 = \underline{\quad}$
$3 \cdot 5 = \underline{\quad}$	$6 \cdot 5 = \underline{\quad}$	$6 \cdot 2 = \underline{\quad}$
$9 \cdot 4 = \underline{\quad}$	$4 \cdot 4 = \underline{\quad}$	$3 \cdot 4 = \underline{\quad}$
$8 \cdot 3 = \underline{\quad}$	$7 \cdot 2 = \underline{\quad}$	$5 \cdot 5 = \underline{\quad}$
$7 \cdot 4 = \underline{\quad}$	$8 \cdot 5 = \underline{\quad}$	$9 \cdot 3 = \underline{\quad}$
$10 \cdot 5 = \underline{\quad}$	$8 \cdot 4 = \underline{\quad}$	$9 \cdot 5 = \underline{\quad}$


[·] Man gellie plæjjohkh?




 $10 + 10 + 10 + 10 =$
 $4 \cdot 10 = \underline{40}$


 $10 + 10 + 10 =$
 $\underline{\quad} \cdot 10 = \underline{\quad}$



 $10 + 10 + 10 + 10 + 10 + 10 =$
 $\underline{\quad} \cdot 10 = \underline{\quad}$



 $10 + 10 + 10 + 10 + 10 =$
 $\underline{\quad} \cdot 10 = \underline{\quad}$


[·] Tjælieh taalide 10-geartoehtimmesne.



10 — 20 — — — — — — — —



[∴] Man gellie lækkeh? Man gellie kråvnah?



 **3 lækkeh**
 $3 \cdot 10 = \underline{30}$ kråvnah



 _____ lækkeh
 $\underline{\quad} \cdot 10 = \underline{\quad}$ kråvnah



 _____ lækkeh
 $\underline{\quad} \cdot 10 = \underline{\quad}$ kråvnah


 _____ lækkeh
 $\underline{\quad} \cdot 10 = \underline{\quad}$ kråvnah


 _____ lækkeh
 $\underline{\quad} \cdot 10 = \underline{\quad}$ kråvnah


 _____ lækkeh
 $\underline{\quad} \cdot 10 = \underline{\quad}$ kråvnah


 _____ lækkeh
 $\underline{\quad} \cdot 10 = \underline{\quad}$ kråvnah


 _____ lækkeh
 $\underline{\quad} \cdot 10 = \underline{\quad}$ kråvnah

* Gaavnh man gellie plæjjohkh. Tjælieh geartoehtimmie-boelhkine jih ryöknedh. ** Jærhkieh taale-bååresem taaligujmie 10-geartoehtimmesne. *** Ryöknh man gellie lækkeh. Tjælieh geartoehtimmie-boelhkine, jih tjælieh man gellie kråvnah sjidtieh.

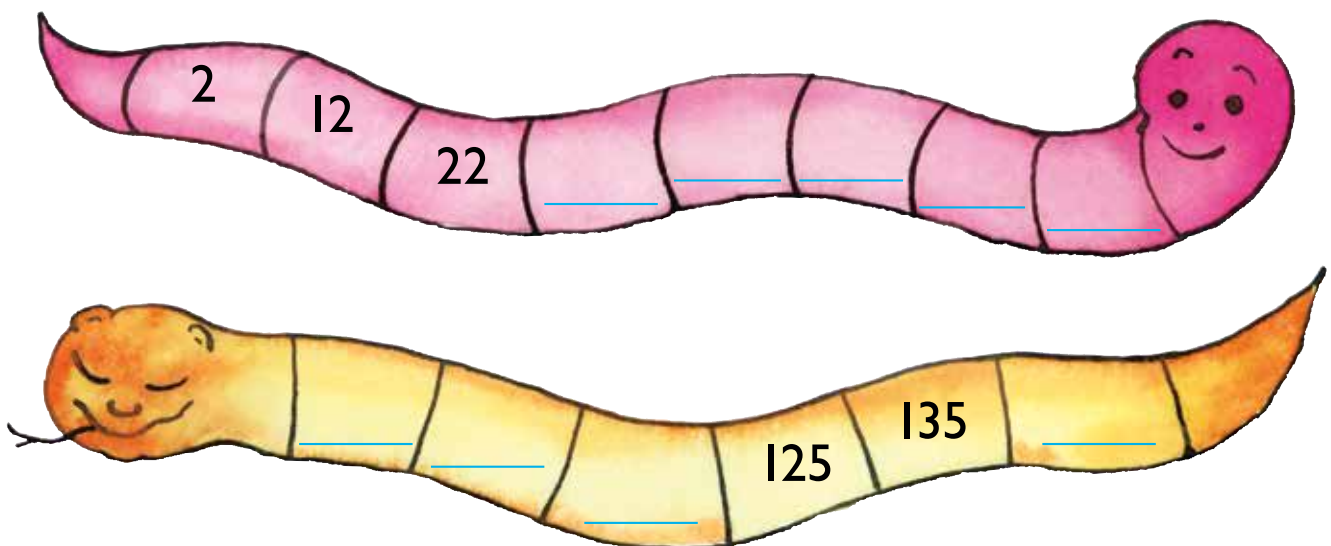
[·] Klaeredh taalide 10-geartoehtimmesne.

1	2	3	4	5	6	7	8	9	10
11	12	13	14	15	16	17	18	19	20
21	22	23	24	25	26	27	28	29	30
31	32	33	34	35	36	37	38	39	40
41	42	43	44	45	46	47	48	49	50
51	52	53	54	55	56	57	58	59	60
61	62	63	64	65	66	67	68	69	70
71	72	73	74	75	76	77	78	79	80
81	82	83	84	85	86	87	88	89	90
91	92	93	94	95	96	97	98	99	100

[··] Ryöknedh.

$2 \cdot 10 = \underline{\hspace{2cm}}$	$1 \cdot 10 = \underline{\hspace{2cm}}$	$4 \cdot 10 = \underline{\hspace{2cm}}$
$7 \cdot 10 = \underline{\hspace{2cm}}$	$6 \cdot 10 = \underline{\hspace{2cm}}$	$9 \cdot 10 = \underline{\hspace{2cm}}$
$10 \cdot 10 = \underline{\hspace{2cm}}$	$5 \cdot 10 = \underline{\hspace{2cm}}$	$8 \cdot 10 = \underline{\hspace{2cm}}$

[··] Tjaelieh taalide mah fååtesieh.



[.] SPIELE: Geartoehtimmie-bingo



SPIELE-NJOELKEDASSH

Tjaelieh taalh 3-geartoehtimmesne rovhte-vearman. Tjetskieh aktem tjelmie-skaavhtegem jih geartohth taaline 3. Biejh kroessem jis vaastoe rovhte-viermesne gååvnese. Dihte gie kroessh gaajhkide rovhtide åådtje, vitnie.

3-geartoehtimmie

[.] SPIELE: Geartoehtimmie-bingo

4-geartoehtimmie

SPIELE-NJOELKEDASSH

Tjaelieh taalh 4-geartoehtimmesne rovhte-vearman. Tjetskieh aktem tjelmie-skaavhtegem jih geartohth taaline 4. Biejh kroessem jis vaastoe rovhte-viermesne gååvnese. Dihte gie kroessh gaajhkide rovhtide åådtje, vitnie.

[·] SPIELE: Voestemes taalese tjuetie



SPIELE-NJOELKEDASSH

Spealadidie gööktesh jallh gellebh. Tjetskieh göökte tjelmie-skaavtegh. Geartoht tjelmiej lähkojde sinsitnine. Biejh vaastoem dan taalese mejtie aerebe åtnah. Tjetskieh tjelmie-skaavhtegem dan gellien aejkien guktie sijhth. VUARTESJH! Jis aktem aktegem åadtjoeh, dellie gaajhkide tjæegkide daennie vâarosne dassh. Vitnije dîhte gie voestemes 100 tjæegkieh åadtje.

[·] Man gellie tjelmieh tjelmie-skaavhteginie?

$$\begin{array}{c} \square \\ \square \end{array} \quad 2 \cdot 2 = \underline{\quad}$$

$$\begin{array}{ccc} \square & \square & \square \\ \square & \square & \square \end{array} \quad 6 \cdot 2 = \underline{\quad}$$

$$\begin{array}{ccc} \square & \square & \square \\ \square & \square & \end{array} \quad 5 \cdot 3 = \underline{\quad}$$

$$\begin{array}{cccc} \square & \square & \square & \square \\ \square & \square & \square & \square \end{array} \quad 9 \cdot 2 = \underline{\quad}$$

$$\begin{array}{ccc} \square & \square & \square \end{array} \quad 3 \cdot 3 = \underline{\quad}$$

$$\begin{array}{cccc} \square & \square & \square & \square \\ \square & \square & \square & \end{array} \quad 7 \cdot 3 = \underline{\quad}$$

$$\begin{array}{cc} \square & \square \end{array} \quad 2 \cdot 4 = \underline{\quad}$$

$$\begin{array}{cc} \square & \square \\ \square & \square \end{array} \quad 4 \cdot 4 = \underline{\quad}$$

$$\begin{array}{cccc} \square & \square & \square & \square \\ \square & \square & \square & \square \end{array} \quad 8 \cdot 4 = \underline{\quad}$$

$$\begin{array}{cccc} \square & \square & \square & \square \\ \square & \square & \square & \square \end{array} \quad 9 \cdot 4 = \underline{\quad}$$


$$\begin{array}{ccc} \square & \square & \square \\ \square & \square & \end{array} \quad 5 \cdot 5 = \underline{\quad}$$

$$\begin{array}{cccc} \square & \square & \square & \square \\ \square & \square & \square & \end{array} \quad 7 \cdot 5 = \underline{\quad}$$

☐ Man gellie viskes-roehtsh ektesne?
Tjaelieh geartoehtimmie-boelhkine.



$$4 \cdot 2 = \underline{\quad}$$



$$\underline{\quad} \cdot \underline{\quad} = \underline{\quad}$$

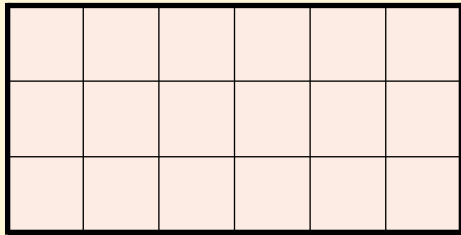


$$\underline{\quad} \cdot \underline{\quad} = \underline{\quad}$$

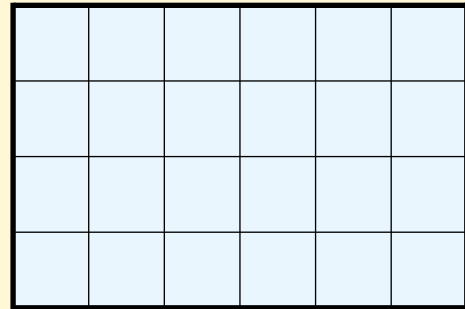


$$\underline{\quad} \cdot \underline{\quad} = \underline{\quad}$$

☐☐ Man gellie rovhth fierhten rektangeelisnie?
Tjaelieh geartoehtimmie-boelhkine.



$$\underline{\quad} \cdot \underline{\quad} = \underline{\quad}$$



$$\underline{\quad} \cdot \underline{\quad} = \underline{\quad}$$

☐☐ Ryöknedh.

$$3 \cdot 2 = \underline{\quad}$$

$$6 \cdot 2 = \underline{\quad}$$

$$1 \cdot 3 = \underline{\quad}$$

$$4 \cdot 4 = \underline{\quad}$$

$$5 \cdot 5 = \underline{\quad}$$

$$7 \cdot 2 = \underline{\quad}$$

$$8 \cdot 5 = \underline{\quad}$$

$$10 \cdot 3 = \underline{\quad}$$







$$6 \cdot 10 = \underline{\quad}$$

$$5 \cdot 3 = \underline{\quad}$$


$$3 \cdot 4 = \underline{\quad}$$

$$4 \cdot 5 = \underline{\quad}$$





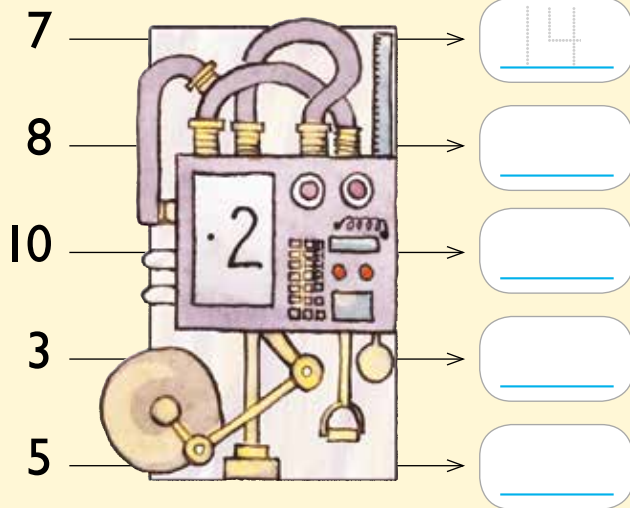
□ Tjaelieh ryöknedimmie-boelkhk mah passide laajpetjigumie sjehtieh.

 <p>5 passah</p> <p>$5 \cdot 2 = \underline{\quad}$ laajpetjh</p>	 <p>$\underline{\quad}$ passah</p> <p>$\underline{\quad} \cdot 2 = \underline{\quad}$ laajpetjh</p>
 <p>$\underline{\quad}$ passah</p> <p>$\underline{\quad} \cdot 2 = \underline{\quad}$ laajpetjh</p>	 <p>$\underline{\quad}$ passah</p> <p>$\underline{\quad} \cdot 2 = \underline{\quad}$ laajpetjh</p>
 <p>$\underline{\quad}$ passah</p> <p>$\underline{\quad} \cdot 3 = \underline{\quad}$ laajpetjh</p>	 <p>$\underline{\quad}$ passah</p> <p>$\underline{\quad} \cdot 3 = \underline{\quad}$ laajpetjh</p>

□ Guvvedh passah laajpetjigumie mah daejtie geartoehtimmie-boelhkide sjehtieh. Man gellie laajpetjh passaj sisnie?

<p>$2 \cdot 3$</p>  <p>$\underline{\quad}$ laajpetjh</p>	<p>$6 \cdot 2$</p> <p>$\underline{\quad}$ laajpetjh</p>
<p>$5 \cdot 3$</p> <p>$\underline{\quad}$ laajpetjh</p>	<p>$4 \cdot 5$</p> <p>$\underline{\quad}$ laajpetjh</p>

Ryöknedh.



■ SPĪELE: Bigkh kvadraath

SPĪELE-NJOELKEDASSH

Spiele gööktide. Darjoeh sievem göökte trebliej gaskem sinsitnien baalte mubpien fierhten aejkien. Dichte gie buektehte aktem ryöknedimmie-boelhkem geerelidh, edtja vaastoem disse ryöknedh. Jis riektes vaastoe, spielije dam kvadraatem klaerede. Jis baahtode, idtji guhte dam kvadraatem aadtjoeh. Dan gien minngemes jeenemes kvadraath, vitnie.

•	•	•	•	•	•
1 · 3	6 · 4	2 · 2	7 · 3	5 · 4	
•	•	•	•	•	•
5 · 2	6 · 5	9 · 4	5 · 5	6 · 3	
•	•	•	•	•	•
7 · 4	3 · 3	7 · 5	8 · 4	1 · 2	
•	•	•	•	•	•
2 · 3	4 · 4	3 · 5	4 · 3	9 · 2	
•	•	•	•	•	•

15 RYÖKNEDIDH

GAEVNIE-MAARHNA

Prühtjhgäetie

Prühtjhgäetie
prühtjhgäetie
sietieslaajpetjh
vaffelh
laajpetjh
prühtjege
njaalke-jovkemes

170 kr

205 kr

250 kr

215 kr

320 kr



1 gærja 10 kr
4 gærjah 30 kr

1 CD 20 kr

75 kr

30 kr

30 kr

30 kr

30 kr


999 kr

5 kr




[·] Tjælieh åaside gævnjieruktien mietie. Gaavnh joekehtassem dan dovremes vaaroen åvteste dan aelpemes vaaroste.


Mij dihte aelpemes?




250 kr




205 kr




215 kr



320 kr




Daate dovremes.




320

$$320 - \underline{\hspace{2cm}} = \underline{\hspace{2cm}} \text{ kr}$$


170 kr




140 kr



240 kr




420 kr




$$\underline{\hspace{2cm}} - \underline{\hspace{2cm}} = \underline{\hspace{2cm}} \text{ kr}$$

[·] Gaavnh åasam fierhten sjære vaaroen åvteste. Tjælieh åaside gævnjieruktien mietie.


30 kr fierhteste



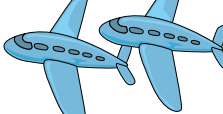
30 kr 4 gærjaj åvteste



20 kr fierhteste



75 kr fierhteste



[·] Man dovres?

170 kr




140 kr



_____ kr

320 kr



420 kr



170 kr

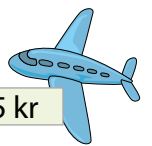


_____ kr

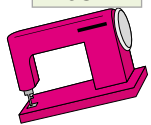
30 kr fierhteste



75 kr



205 kr



_____ kr

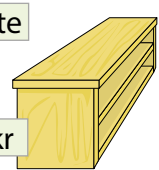
30 kr 4 gærjaj
åvteste



20 kr fierhteste



170 kr




_____ kr

[·] Man gellie aajmojne?

Dov leah:



Datne aastah:

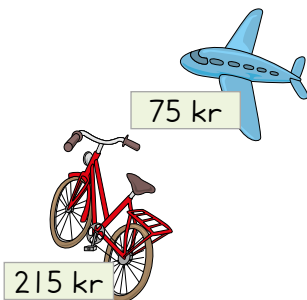


_____ kr

Dov leah:



Datne aastah:




_____ kr

Dov leah:



Datne aastah:



_____ kr

[·] Biejh seamma jeenh gærjah fierhten passese.

Man gellie gærja fierhten passese sjidtieh?




$$12 : 3 = \underline{\quad}$$




$$18 : \underline{\quad} = \underline{\quad}$$



$$10 : 2 = \underline{\quad}$$



$$16 : \underline{\quad} = \underline{\quad}$$



$$14 : \underline{\quad} = \underline{\quad}$$



$$24 : \underline{\quad} = \underline{\quad}$$

[·] Man gellie daagkerh guvvieraajroe-plaerieh mahtah beetnegi åvteste åstedh?



$$15 : 5 = \underline{\quad}$$



$$\underline{\quad} : \underline{\quad} = \underline{\quad}$$



$$\underline{\quad} : 5 = \underline{\quad}$$



$$\underline{\quad} : \underline{\quad} = \underline{\quad}$$



$$\underline{\quad} : \underline{\quad} = \underline{\quad}$$



$$\underline{\quad} : \underline{\quad} = \underline{\quad}$$



$$\underline{\quad} : \underline{\quad} = \underline{\quad}$$



$$\underline{\quad} : \underline{\quad} = \underline{\quad}$$

[·] Kim laajpetjh b  hkesje. D hte golme laajpetjh fierhten passan sijse beaja. Man gellie passah daarpesje?



$$6 : 3 = \underline{\quad}$$



$$\underline{\quad} : \underline{\quad} = \underline{\quad}$$



$$\underline{\quad} : 3 = \underline{\quad}$$



$$\underline{\quad} : \underline{\quad} = \underline{\quad}$$



$$\underline{\quad} : \underline{\quad} = \underline{\quad}$$



$$\underline{\quad} : \underline{\quad} = \underline{\quad}$$

[·] Andrea aaj laajpetjh b  hkesje. D hte njieljje laajpetjh fierhten passese beaja. Man gellie passah daarpesje?



$$12 : 4 = \underline{\quad}$$



$$\underline{\quad} : \underline{\quad} = \underline{\quad}$$



$$\underline{\quad} : 4 = \underline{\quad}$$



$$\underline{\quad} : \underline{\quad} = \underline{\quad}$$



$$\underline{\quad} : \underline{\quad} = \underline{\quad}$$



$$\underline{\quad} : \underline{\quad} = \underline{\quad}$$

[.] Anna krávnah lãhkagidie tsööpkie.

Man gellie lãhkegh åådtje?



30 kr	$30 : 10 = \underline{\quad}$	50 kr	$\underline{\quad} : \underline{\quad} = \underline{\quad}$
20 kr	$\underline{\quad} : 10 = \underline{\quad}$	70 kr	$\underline{\quad} : \underline{\quad} = \underline{\quad}$
40 kr	$\underline{\quad} : \underline{\quad} = \underline{\quad}$	120 kr	$\underline{\quad} : \underline{\quad} = \underline{\quad}$
80 kr	$\underline{\quad} : \underline{\quad} = \underline{\quad}$	90 kr	$\underline{\quad} : \underline{\quad} = \underline{\quad}$
100 kr	$\underline{\quad} : \underline{\quad} = \underline{\quad}$	200 kr	$\underline{\quad} : \underline{\quad} = \underline{\quad}$

[.] Darjoeh guvviem ryöknedimmie-boelhkese jìh ryöknedh.

$12 : 2 = \underline{\quad}$	$20 : 2 = \underline{\quad}$
$18 : 2 = \underline{\quad}$	$12 : 3 = \underline{\quad}$

[.] Ryöknedh.

$4 : 4 = \underline{\quad}$	$32 : 4 = \underline{\quad}$	$20 : 5 = \underline{\quad}$
$21 : 3 = \underline{\quad}$	$35 : 5 = \underline{\quad}$	$60 : 10 = \underline{\quad}$

[·] IIIh tabellide.

: 2

Manne taaline 2 juakam.



8	16	24	32	40
4	8			
2				

: 3

Daesnie taaline 3 juakam.



9	18	27	36	45
3	6			
1				

: 5

25	50	75	100
5			
1			



- [·] Klaassesne 3A, 22 learohkh jih klaassesne 3B jis 26.
Dah eejehtimmie-minudth ektesne utnieh.
Man gellie learohkh dellie ålkone stååkedeminie? _____

- [·] Gaektsie learohkh sijhtieh spiejeme-tjenkerem
spealadidh. Barre gööktesh maehtieh ektesne
aktene tsegkesne spealadidh. Man gellie
spiejeme-tjengkerh learohkh tjuerieh viedtjedh
jis gaajhkesch edtjeh seamman aejkien
spealadidh. _____



- [·] Golme niejth kastanje-nöodterh tjöönghkieh.
Ektesne leah 36 nöodterh tjöönghkeme.
Gaajhkesch seamma jeenem tjöönghkeme.
Man gellie fiere guhte tjöönghkeme? _____

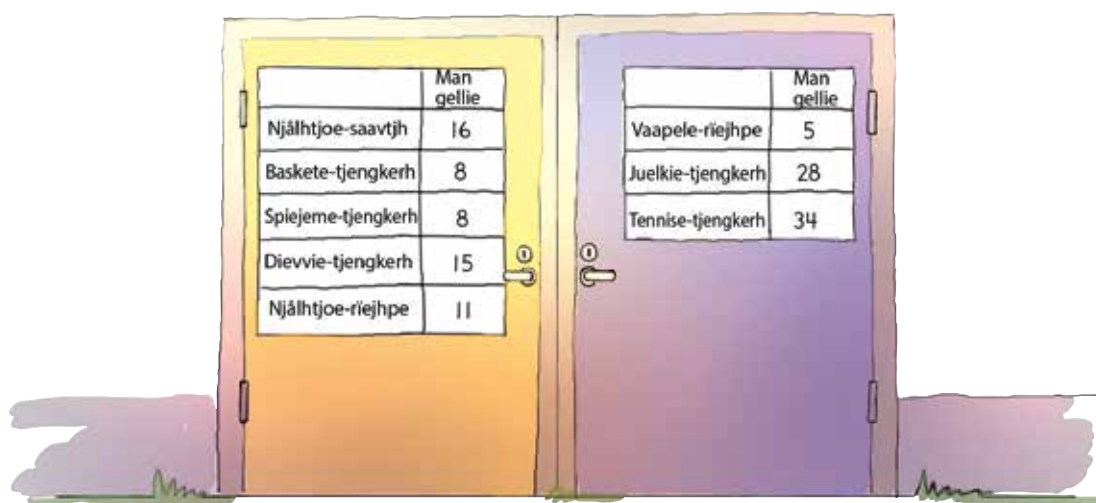
Niejth sijhtieh 240 kastanje-nöodterh
tjöönghkedh. Man gellie fååtesieh? _____



- [.] Vitnedimmie-tæjmosne gaajhkh learohkh klaassine 3A jöh 3B juelkie-tjengkerem edtjeh spealadidh. Fierhtene guejmesne gaektsie learohkh.

Man gellie guejmieh sjidtieh? _____

- [.] Man gellie tjengkerh dennie skæhtjosne gosse gaajhkh tjengkeridie sjökeme vitnedimmie-tæjmoen mænngan. _____



	Man gellie
Njälhtjoe-saavtjh	16
Baskete-tjengkerh	8
Spiejeme-tjengkerh	8
Dievvie-tjengkerh	15
Njälhtjoe-riejhpe	11


	Man gellie
Vaapele-riejhpe	5
Juelkie-tjengkerh	28
Tennise-tjengkerh	34

- [.] Skuvle vijhte orre njälhtjoe-saavtjh aasteme. Fierhte saavtje 10 kr maaksa. Man jeenem skuvle tjura maeksedh dej orre saavtijste? _____


- [.] Dennie sovkedahkesne golme learohkh tjaakanieh. Man gellie sovkedahkh skuvle daarpesje jis 12 learohkh edtjeh seamma aejkien sovkedh? _____



Man dovres?




_____ kr



_____ kr

Odden leah 400 kr. Dihte ruevtie-raajroem 240 krávnijste áasta. Man jeenem aajmojne dellie átna?



_____ kr

Man gellie fiere guhtese?



$$12 : 3 = \underline{\hspace{2cm}}$$



$$\underline{\hspace{2cm}} : \underline{\hspace{2cm}} = \underline{\hspace{2cm}} \text{ kr}$$

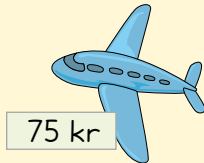
Hilde, Tove jìh Aanta laajpetjìh bààhkesjeminie. Fiere guhte gaektsie laajpetjìh bààhkesje. Man gellie laajpetjìh ektesne bààhkesjìeh?

_____ laajpetjìh


• Man dovres?



320 kr



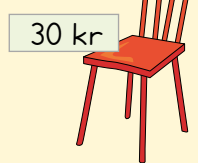
75 kr



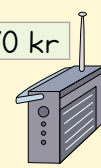
_____ kr




30 kr



30 kr



170 kr



_____ kr


•• Man jeene aajmojne?

Dov leah:



200

200



Datne aastah:



215 kr

_____ kr

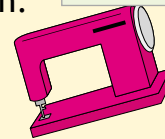
Dov leah:



500

Datne aastah:


205 kr




_____ kr

•• Ryöknedh.


$340 + 210$




$592 + 106$



$527 - 315$



$759 - 158$



▣ Ryöknedh.

$692 + 107 = \underline{\hspace{2cm}}$

$278 + 526 = \underline{\hspace{2cm}}$

$497 + 53 = \underline{\hspace{2cm}}$

$347 + 605 = \underline{\hspace{2cm}}$

$746 + 36 = \underline{\hspace{2cm}}$

$559 + 104 = \underline{\hspace{2cm}}$

$618 - 306 = \underline{\hspace{2cm}}$

$949 - 712 = \underline{\hspace{2cm}}$

$800 - 498 = \underline{\hspace{2cm}}$

$727 - 316 = \underline{\hspace{2cm}}$

$845 - 233 = \underline{\hspace{2cm}}$

$650 - 642 = \underline{\hspace{2cm}}$

- ▣ Ulrik 16 passah laajpetjigujmie åasta. Lehkje passine göökte laajpetjh, dennie mubpie lehkesne golme laajpetjh.



Man gellie laajpetjh Ulrik ektesne åasta? laajpetjh

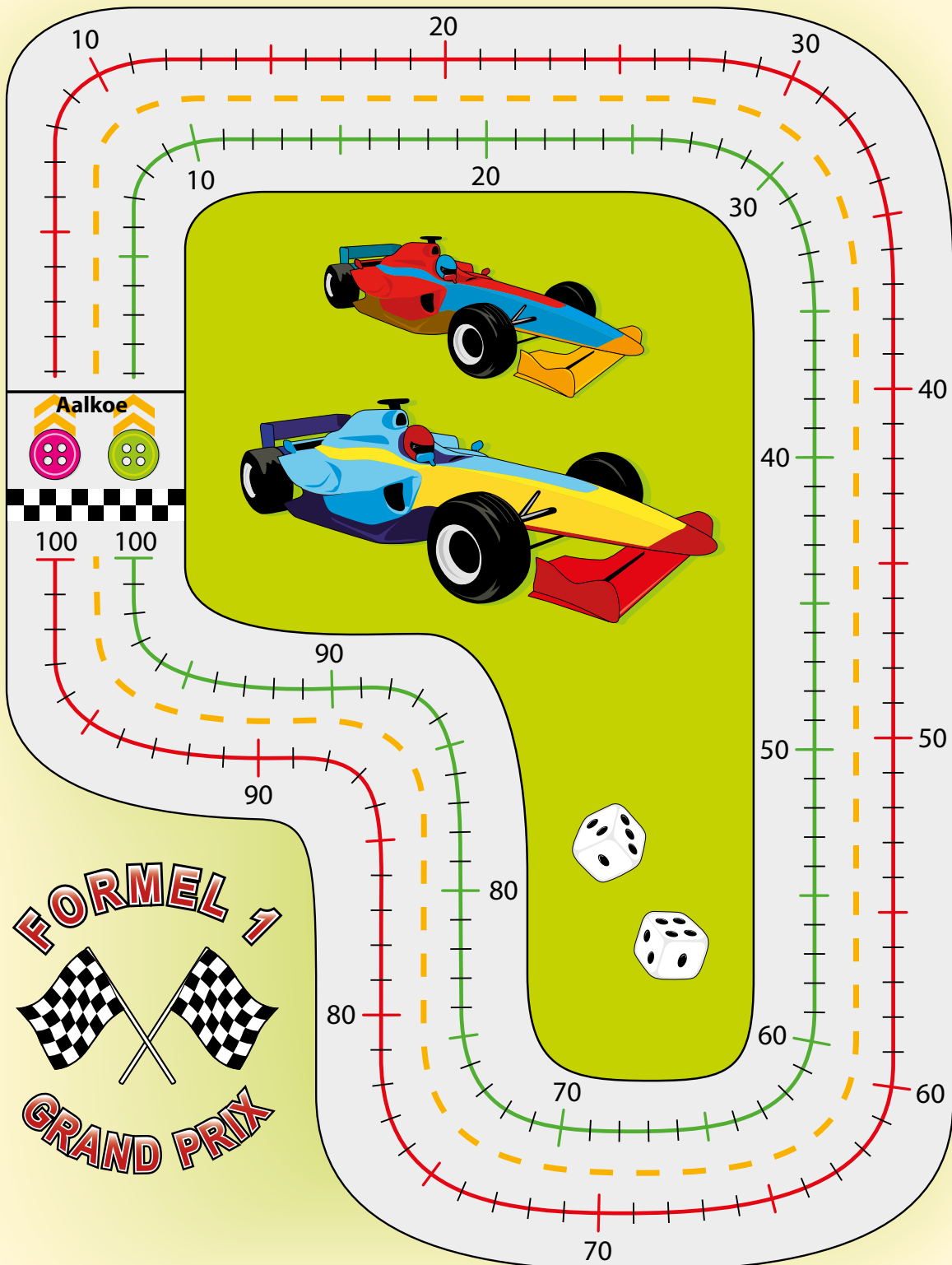
- ▣ Spiele-käärhtine 52 kårhth. Muvhtijste maaniijste sijhtieh kårhte-spielem spealadidh gusnie fiere guhte spjelije luhkie kårhtigujmie aalka.

Man gallesh maehtieh meatan årrodh spealadidh?


■ SPIELE: Gie voestegh golmen aejkien bijre jaksa?

SPIELE-NJOELKEDASSH

Spiele gööktide. Tjetskieh tjelmie-skaavtegh. Geartoht tjelmiej lähkojde sinsitnine. Juhtieh jovhtem dan gähkese åvtese taale-sievesne guktie vaastoe maam åadtjoejih. Vitnije dihte gie voestemes måålem jaksa.



16 ROVHTE-VEARMAN SJËHTESJIDH




[.] Gaavnh skaehtiem.
Dåeredh njoelide
jih guvvedh baalkam.



A
A
L
K
O
E

4 → | 1 ↑ | 3 → | 6 ↓ | 2 ← | 3 ↑ | 3 →




[..] Nænnoestidie gusnie
skaehtie edtja årrodh.

--	--	--	--	--	--	--	--

DarjoeH goerem
njoeligumie guktie baalka
aalkoste vuesehte dan
skaehtien gâajkoe.



A
A
L
K
O
E



[·] Gaavnh skaehtide. Gievledh daagkoe bijre gusnie Leah.



AALKOE

AALKOE



4 N (= noerhte)

2 L (= luvlie)

2 Å (= åarjel)

5 L (= luvlie)

4 N (= noerhte)

5 J (= jillie)

2 N (= noerhte)



2 N (= noerhte)

4 J (= jillie)

2 N (= noerhte)

1 J (= jillie)

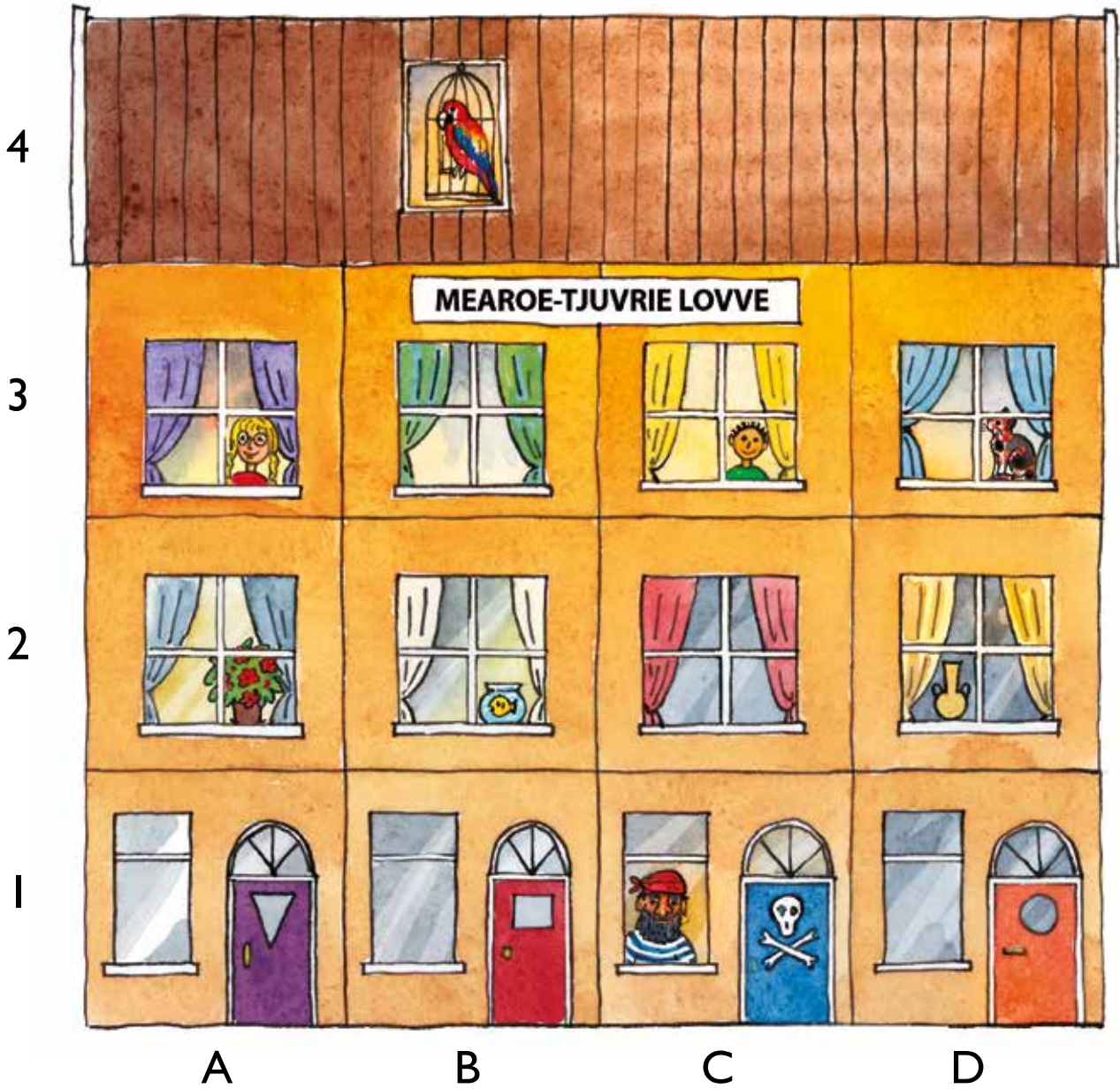
2 N (= noerhte)

3 L (= luvlie)





1 Å (= åarjel)



• Darjoeh göökte baalkah rovhte-vearman, aktem fierhtede vinhtseste skaehtiej gääjkoe. Dãeredh otrjege-bihkedasside maam kapteejne bihkede.































[·] Gusnie årroeh?







 C I	 _____	 _____	 _____
-----------------------------------------------------------------------------------------	-------------------------------------------------------------------------------------------	-------------------------------------------------------------------------------------------	---------------------------------------------------------------------------------------------

[··] Guvvedh dam maam rovhtine vuajnah.

A2	C3	D2
----	----	----

6						
5						
4						
3						
2						
1						
	A	B	C	D	E	F

[·] Gaavnh kaarhtesne.

[··] Guvvedh dam maam daej rovhtine gaavnh.


D6	C4	F2
----	----	----


[·] Klaeredh rovhtide. Provhkh klaerie-riektide daagkoe vuelege.

8							
7							
6							
5							
4							
3							
2							
1							
	A	B	C	D	E	F	G


	D6	B4	B7	E8	C1	F4	C4	C7
C8	D1	C3	D5	E7	B6	F6	D8	E1
E3	D3	E4	B5	F5	D4	D7	F7	





	C5	E5	C6	E2	C2	D2	E6
-------------------------------------------------------------------------------------	----	----	----	----	----	----	----

	G7	A3	F2	B8	G2	A6	G6	A8
B1	B3	A4	F1	A2	G4	A7	F8	G1
B2	G3	F3	G5	A5	A1	G8		



☐ Gogkoe kanone-tjäähtjh dievviedin?



			
_____	_____	_____	_____

☐ Guvvedh kanone-tjäähtjh daej rovhtide guvvesne.

G7	D6	E5	B1
----	----	----	----

• Tjælieh vuesiehtimmiem fierhten tjäähtje-raajkan guvvesne. •• Guvvedh kanone-tjäähtjh dej rovhtide misse vuesiehtimmiem guvvesne vuesehte.

▣ Guvvedh baalkam skaentie-såålese. Dåeredh njoelide.

4 → 2 ↓ 3 → 3 ↓ 6 ← 2 ↑ 3 →

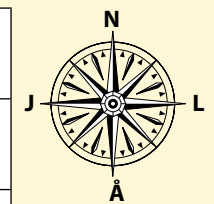
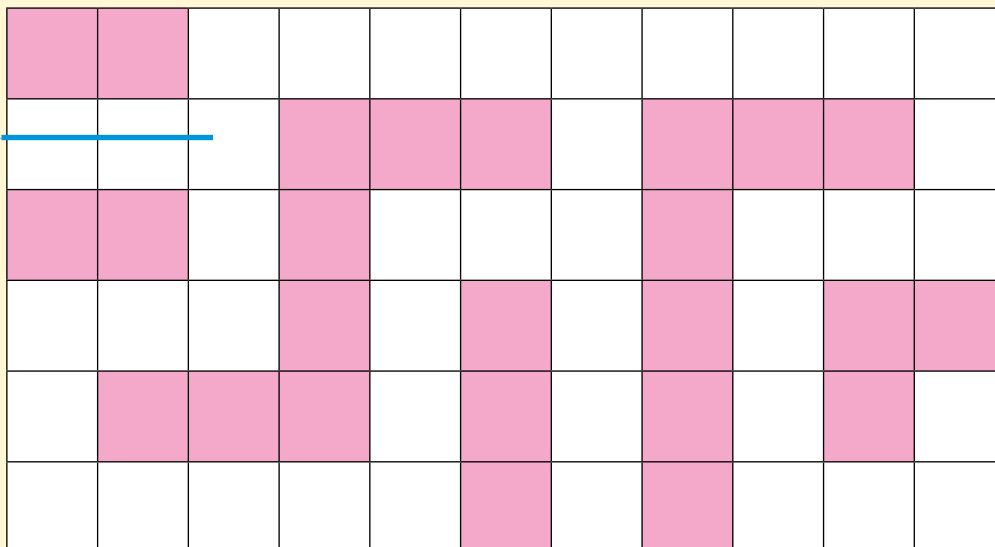
Aalkoe 



▣ Guvvedh baalkam labyrinten tjirrh.

Provhkh elmie-otnjegem gosse baalkam bihkedidh.

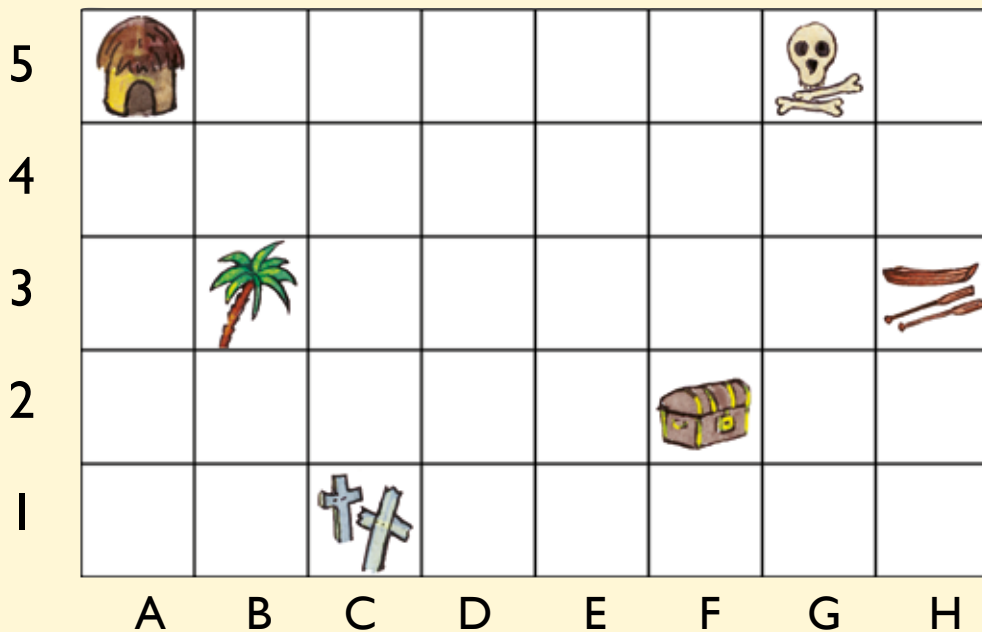

Sijse 



 Olkese

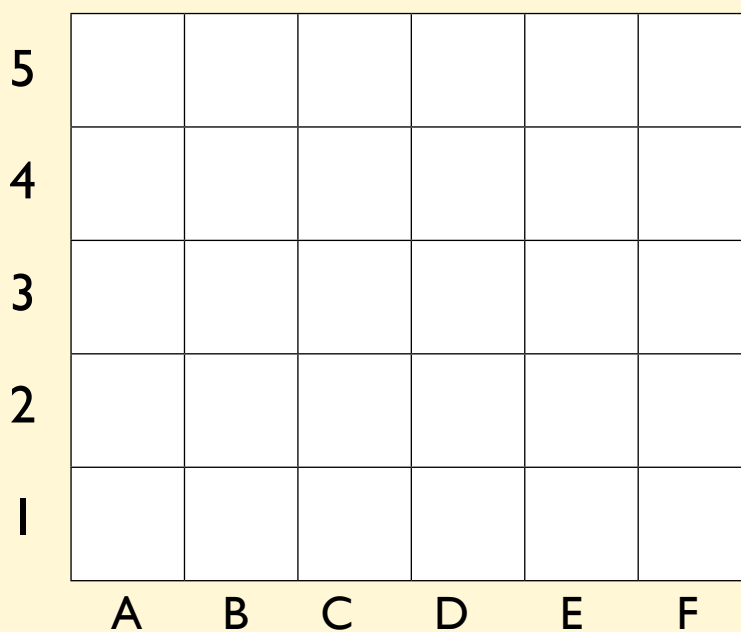
3L -

■ Gaavnh kaarhtesne.



■ Biejh kaarhtese.

↑	A3
○	B1
✕	E5
☆	F2
▶	C4



Tjeakoes bievnese.

8	L	A	V	U	P	D	V	S
7	X	T	N	E	I	K	Z	J
6	F	E	C	H	U	Y	K	L
5	R	K	N	T	O	B	T	Æ
4	N	T	K	N	M	ï	Ö	K
3	A	M	G	E	K	R	E	Å
2	W	E	R	G	Q	R	R	O
1	O	L	E	F	E	S	I	Y
	A	B	C	D	E	F	G	H

--	--	--	--	--	--	--

G8 AI B6 D5 H7 EI FI

--	--	--

H7 F4 D6

--	--	--	--	--

A8 H2 C8 F2 D6

--	--	--	--	--	--	--	--

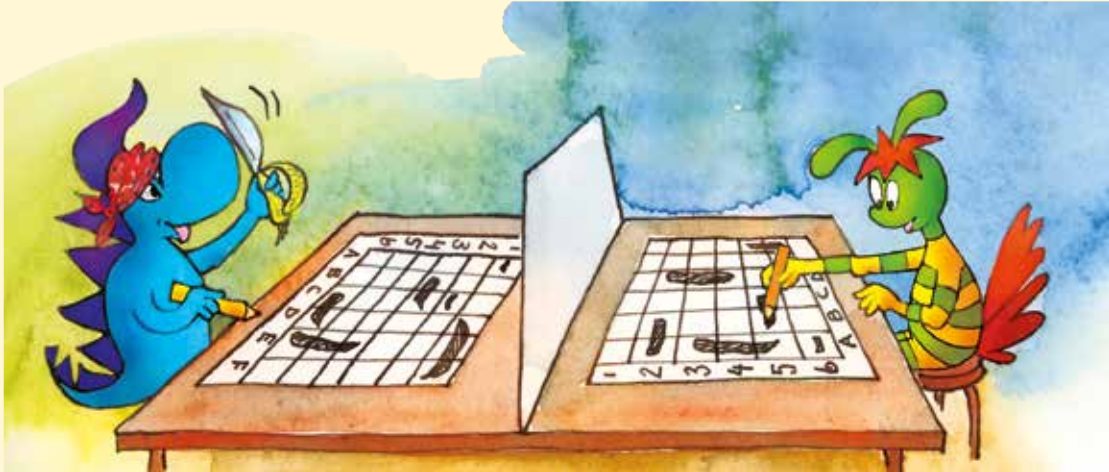
FI C4 B8 D3 D6 B4 GI B2

--	--	--	--	--	--

F8 E5 BI H6 D7 A4

LIEREHTIMMIEGÆRJA B. 119-120

■ SPIELE: Våajohth mearoetjuvrie-skîhpide



SPIELE-NJOELKEDASSH

Spiele gööktide.

Fierhte spieliye gaajkhk skîhpide jîjtse daablose guvvede.

Idtji vuestie-spieliye edtjh vuejnedh gogkoe skîhpide beajeme. Spielihj våaroej mietie aktem rovhtem soptsestieh. Vuestie-spieliye kroessem dan rovhtese beaja.

Ulmie lea gaajhkide rovhtide dievviedidh gusnie akte skîhpe. Dîhte gie voestemes gaajhkide vuestie-spielijen skîhpide dievviedamme vitneme.



6						
5						
4						
3						
2						
1						
	A	B	C	D	E	F

6						
5						
4						
3						
2						
1						
	A	B	C	D	E	F



Multi

Matematihke maanadaltessasse

Multi fleksibiliteetem matematihke-lohkehtæmman vadta gosse lohkehtæjjide däärje jih nuepiem vadta måedtie lohkehtimmie vuekieh provhkedh. MULTI eadtjaldávva, buerie mielem vadta jih lustes baalka matematihkese.

Multise vihkeles:

- Måedtie iedtjh gosse vueptiestidh, goerehtidh jih eadtjohkelaakan barkedh
- Lohkehtimmie mejtie sjiehtesjamme lohkehtimmie-ektievökosne
- Veele maahtoe-ulmide learoesejkesjen mietie vuartasjidh
- Buerielaakan faagine kapihtelistie kapihtelidie barkedh jaepijste jaepide
- Vijries jih eensie learohkevierhtiedimmie maam lohkehtimmesne sjiehtesje

Multi eeremes:

- Teorijem jih iedtjide ektede
- Vuartesje guktie åvtese barkedh; fierhtene aamhtesinie eensilaakan jih guhkies boelhkine vuesehte guktie barkedh
- Ånehks jih aelhie teksth åtna
- Lohkehtimmie learoehkidie sjiehtesje sjiere faagi daltesinie
- Buerie jih tjielke gærjam Læreren bok
- Dejtie learoesejkesjen ulmide fierhtene kapihtelisnie vuesehte

Multin åejviekomponenth fierhten daltesasse:

- Maadthgærja A jih B
- Lieretimmiegærja
- Gaskeviermiesijje www.lagadus.org/multi

ČállidLágádus

ISBN 978-82-8263-079-5



9 788282 630795