

Bjørnar Alseth
Ann-Christin Arnås
Henrik Kirkegaard
Mona Røsselund

Multi



2. LÄHKOE

ÅARJELSAEMIEN

2b

MAADTHGÆRJA

Matematihke
maanadaltesasse



$$35 + 22 =$$

ČállidLágádus

SISVEGE

8 SYMMETRIJE	2
9 GEARTODH JÏH BIELIEDIDH – PAARRE-TAALH JÏH ODDE-TAALH	14
10 RYÖKNEDIDH TAALESE 100	36
11 AREAAL	66
12 RYÖKNEDIDH	80
13 GELLIEN-BORTEGH JÏH GIEVLIEH	108
14 TJAEKEDS HAMMOEH	120

Baakoelæstoe

akte-raeresne gå opp (f.eks. om oppgave)

baakoe bokstav

betnie-hammoe bunnform

bieliedidh halvere

bieliedimmie halvering

bæjjan til overs

daabloe brett

dåvretje bamse

ektiedamme satt sammen

fuemtie drage

geartome dobling

gellien-bortege mangelkant

golme-dimensjonaale tredimensjonal

golmenborth-haemie trekantfigur

guejmie lag

guektien giërth dobbel, dobbelt, dobbelte

guektien giërth stuerebe dobbelt så stort

guelmiedidh speilvende

guelmiedihks speilvendt

juelkietjengkere-kåarhte fotballkort

kioske kiosk

lahtese utsagn

lehkie halv (f.eks. om mengde)

lovhtje dam

lutniestidh løse

læssanidh øke

njiejienborth-haemie firkantfigur

odde-taale oddetall

paarre-taale partall

posisjovne-systeeme posisjonssystem

prijredh brette ut

prisme prisme

pyramijde pyramide

ryöknedimmie-lahtese regneuttrykk

sievestahke linjal

skiblie-dyjrj skalledyr

sliejhtedh stryke (forkaste)

syliindere sylinder

symmetrije-sieve symmetrilinje

symmetriske symmetrisk

tekste-lierehtimmie tekstoppagave

terrasse terrasse

tjaatsestidh peke på

tjaekeds hammoe romlig form

tjaste is

tseegkeldahke byggverk

tsiehkesjimmie markering

ussjedidh her: regne i hodet

vaananidh minke

væjsastalledh IV tenke lurt

Daate lea Multi-raajroen vuoestes versjovdne åarjelsaemiengielese. Berteme ja Saemiedigkie utnijh vaajteliéh raerieh/ bihkedassh buektedh juktie mubpien aejkien goh trygkesåvva daejtie maahta dåvvodh. Seedth raerieh dan e-påastese: poasta@lagadus.org

© ČálliidLágádus – ForfatternesForlag – Authors'Publisher
Pb 140, NO-9735 Kárášjohka-Karasjok
Fanasjeddi, NO-9845 Deatnu-Tana

Gærjabovre gaskeviermesne: www.lagadus.org

Redaktööre Gyldendal: Thor-Atle Refsdal
Redaktööre saemien, ČálliidLágádus: Svein Nordsletta
Design jñh layout, originaale: Anne Tryti
Layout, saemien: Britt Hansen
Jarkoestamme: Sig-Britt Persson, Karin Rensberg Ripa, Elin Fjellheim

Bijjjebieliedesign: Hanne Dahl
Bijjjebielieguvvie: Børre Holth

Guvvije: Anne Tryti
Dataguvvije: Børre Holth

Gærja åndsverk-laakeste vaarjelåvva. Ij Leah luhpie kopijem gærjeste vaeltedh jis ij luhpiem utnieh dejstie mejstie gærjam buakteme jallh tjaelijste. Jis kopijem læjhkan dan vuestie vaalta, iehciem dorjeme jñh maahta bysvehts böötine jallh faangke-gåetine åadtjodh.


© ČálliidLágádus 2017
Originaale reaktoe-aajhtere: Gyldendal Norsk Forlag AS 2006, 2. låhkoe
Gærja dehtie matematihkelearoeverhteste Multi 1-7.
Trygkesovveme: Waasa Graphics Oy, Vaasa
ISBN 978-82-8263-075-7

Multi 2. LÄHKE

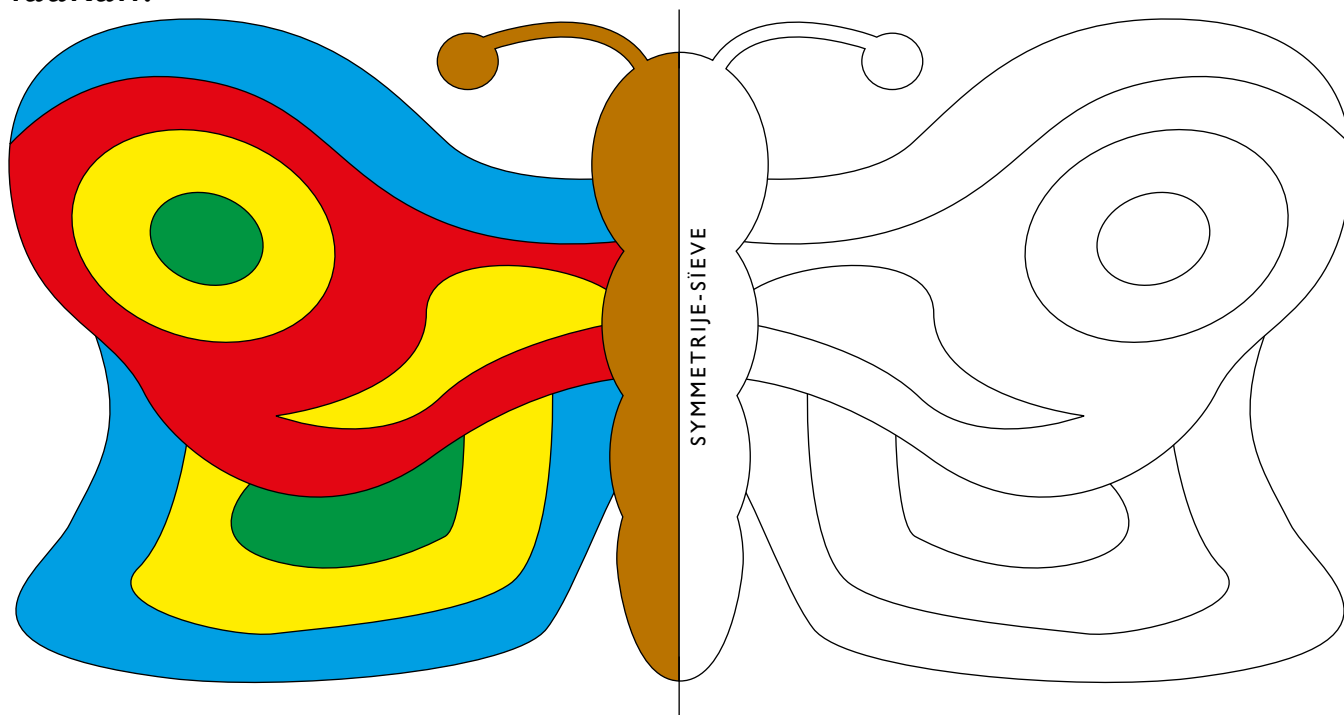
2b

MAADTHGÆRJA
Matematigke maanadaltesasse

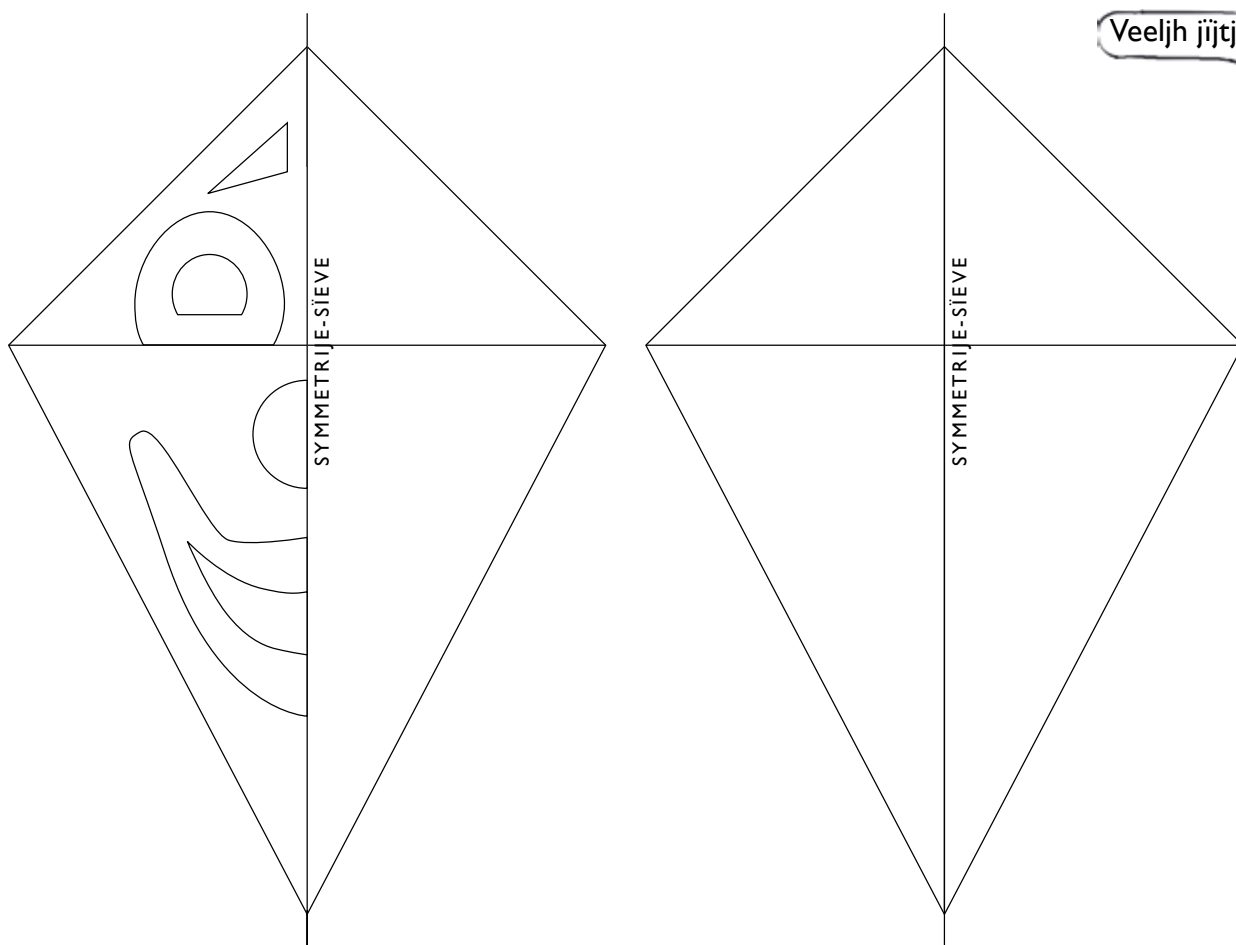
8 SYMMETRIJE



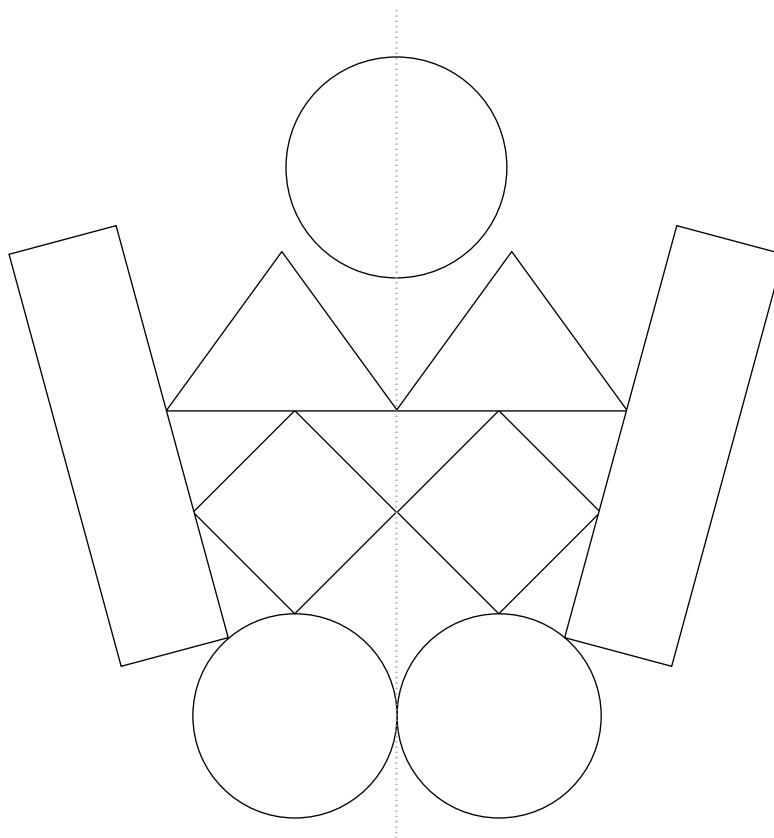
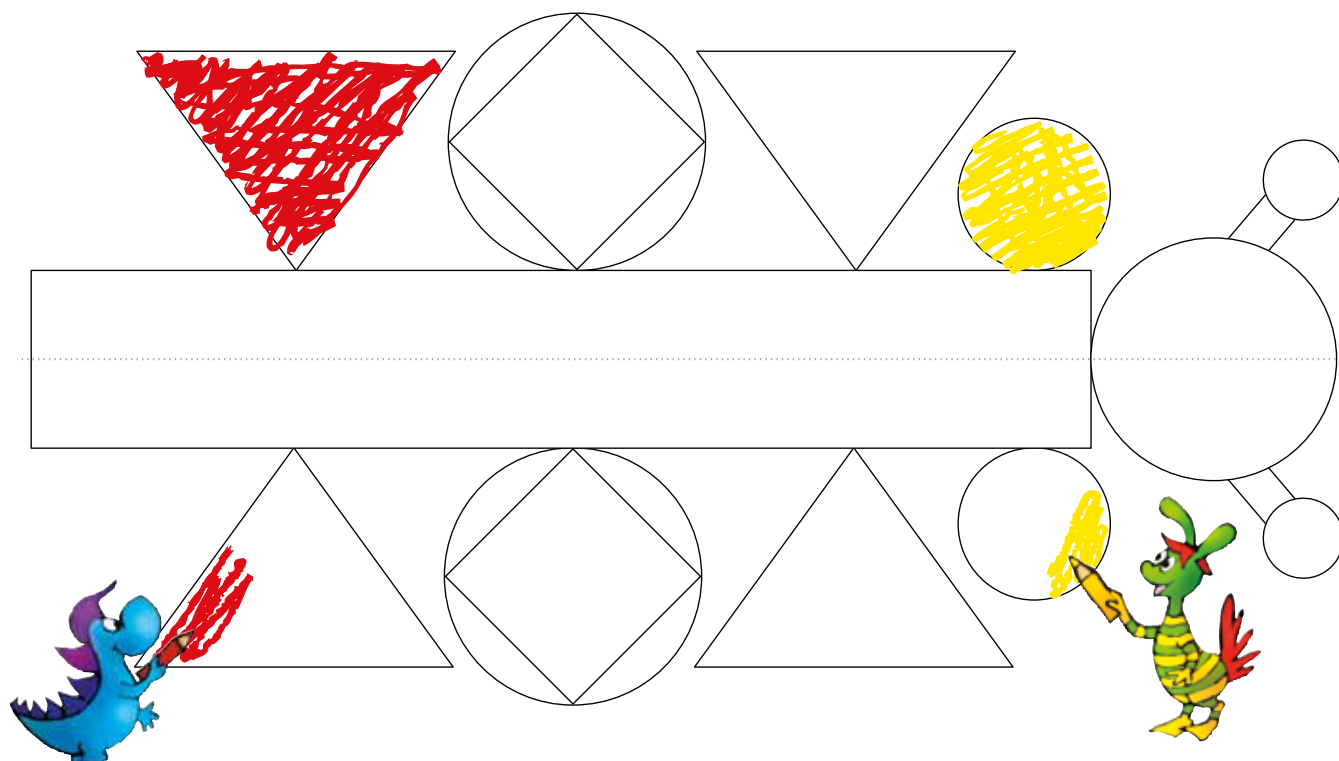
[.] Klaeredh symmetrije-sieven gääpatjahkide bielide seamma-laakan.



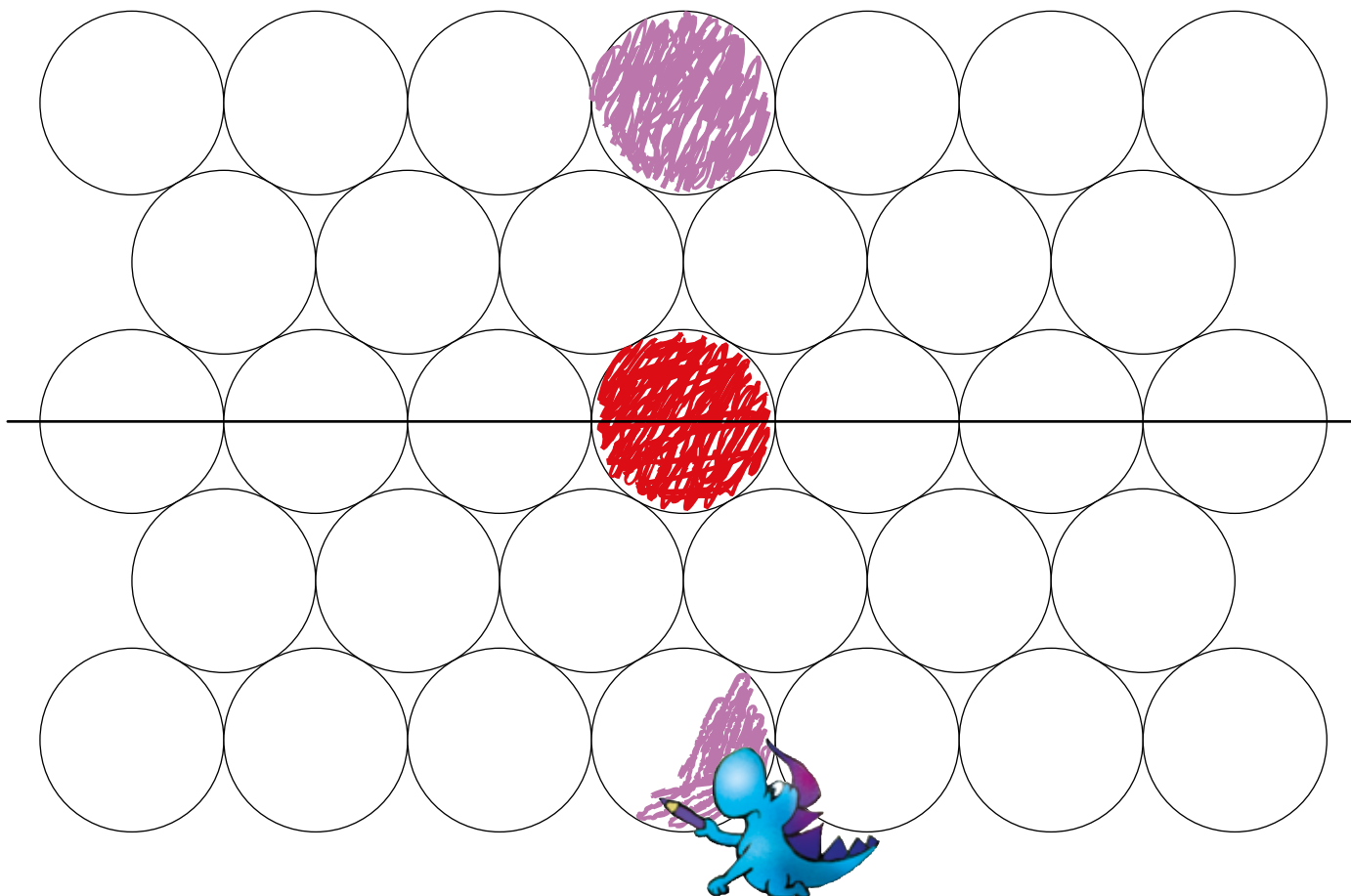

[.] Guvvedh jñh klaeredh symmetrije-sieven gääpatjahkide bielide seamma-laakan.







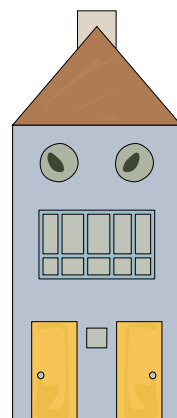




[.] Darjoeh symmetrije-sievem jñh klaeredh symmetriske.



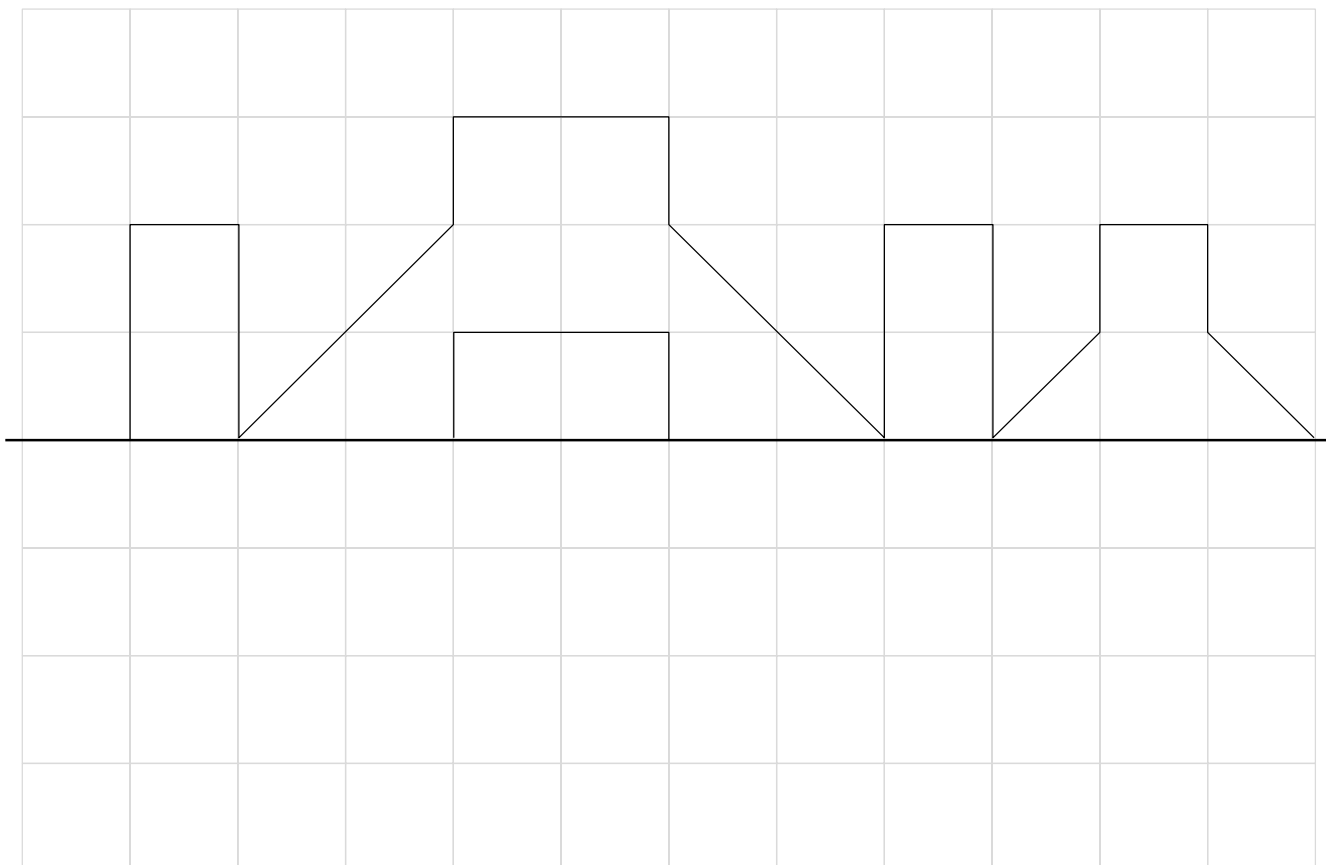
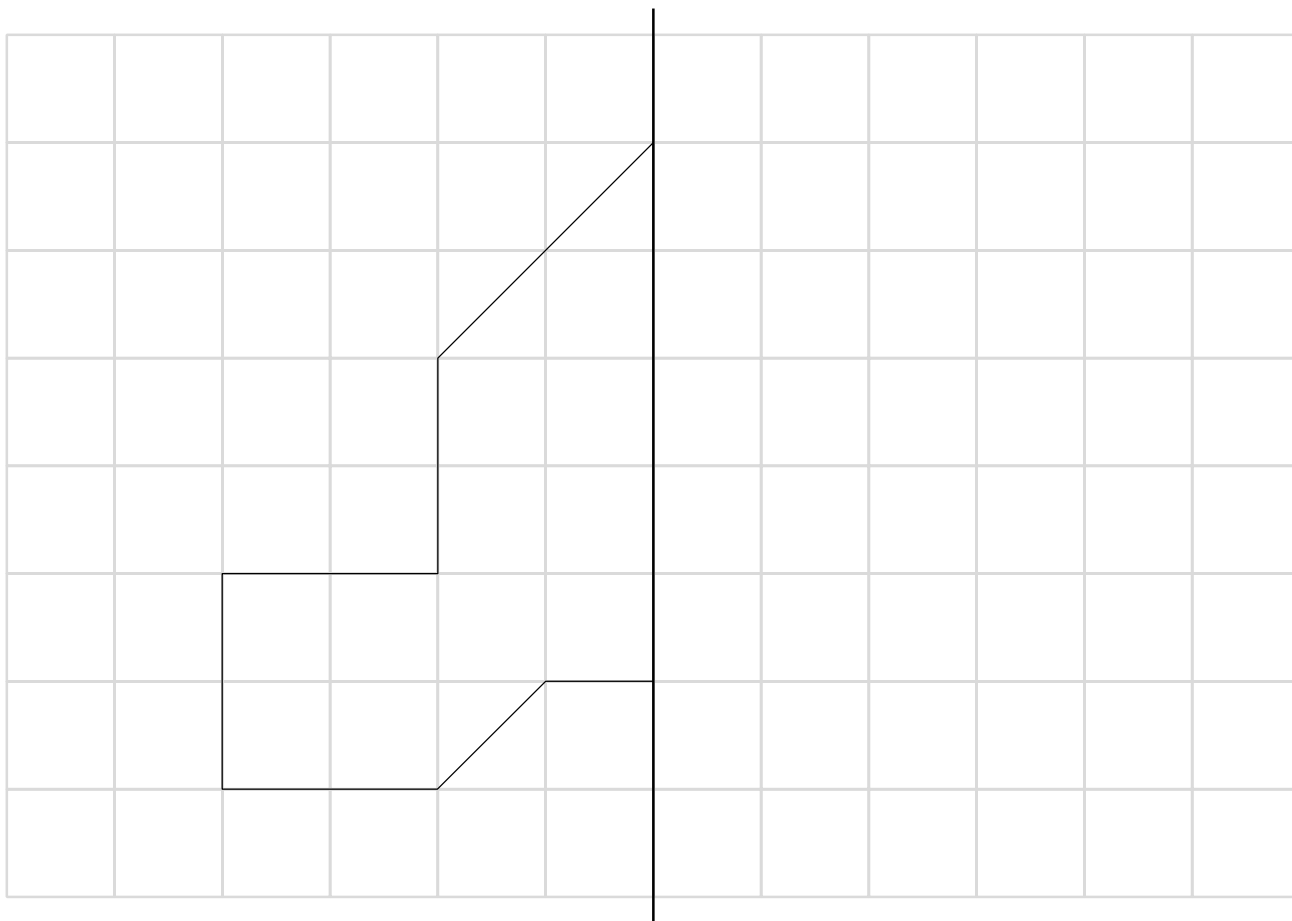
[.] Darjoeh guvviem mij symmetriske sieven g abpatjahkine bieline sj edta.



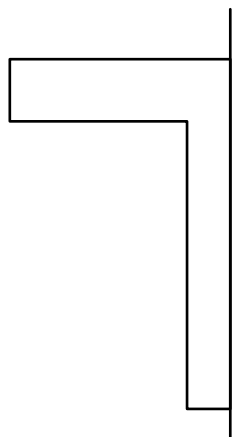
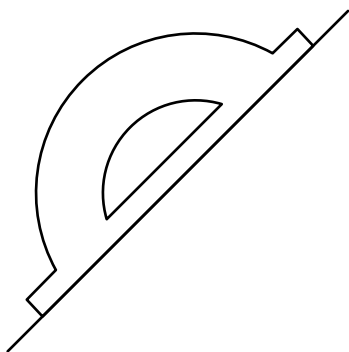
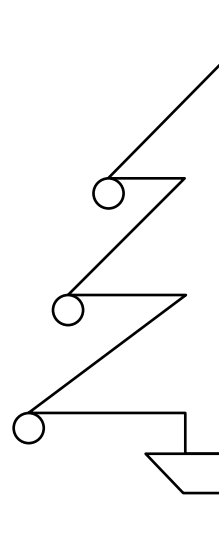
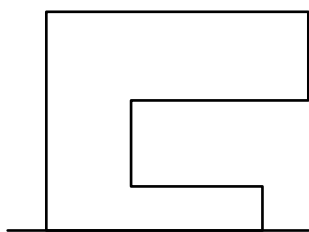
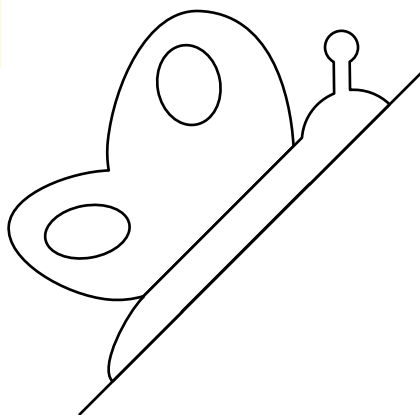


[·] Guvvedh symmetrije-sievh.



[·] Darjoeh symmetriske guvviem jñh klaeredh.



[.] Guvvedh jih geervehth haemide.






[.] Darjoeh symmetrijem trebliejgumie.
 Man gellie treblieh fierhten treblie-snjieble átna?

Daelie vijhtesh fierhten bielesne.


5

Guektien giérth taaleste 5 lea 10.

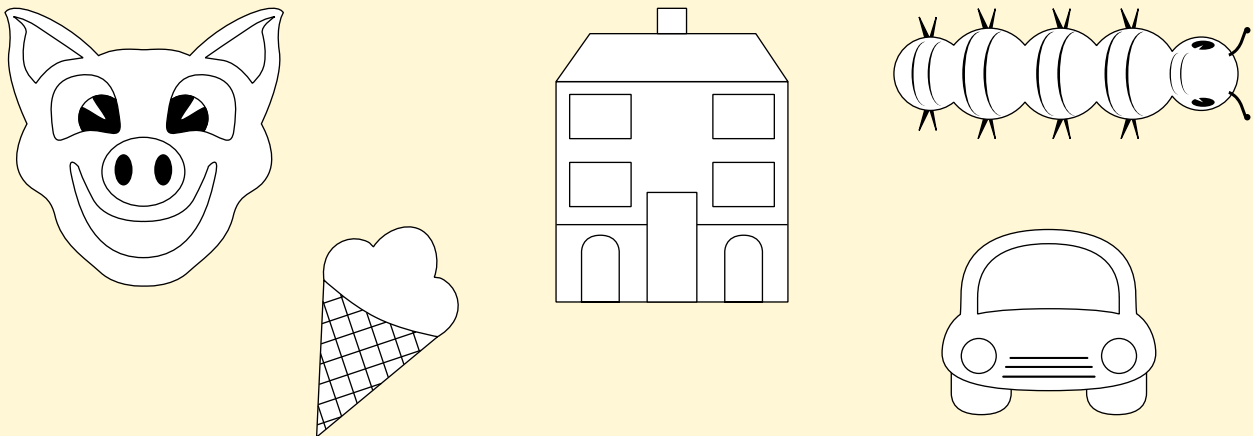
10



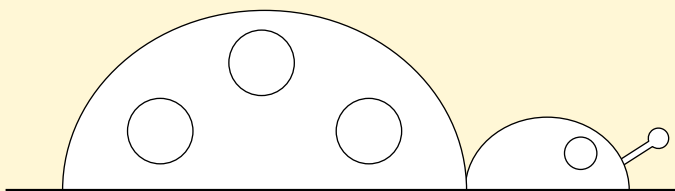
■ Darjoeh symmetriske guvviem.



■ Guvvedh symmetrije-sievh.



■ Guvvedh jih geervehth haemide.



• Mij baakojde symmetriske? Guvvedh symmetrije-sievide.

A B C D E
 F G H I J K
 L M N O P

• Mij taalide symmetriske? Guvvedh symmetrije-sievide.

0 1 2 3 4
 5 6 7 8 9

■ Darjoeh aktem symmetriske guvviem.
Man gellie rovth fierhten guvviem?

Daelie govhtesh (6)
fierhten bielesne.

6

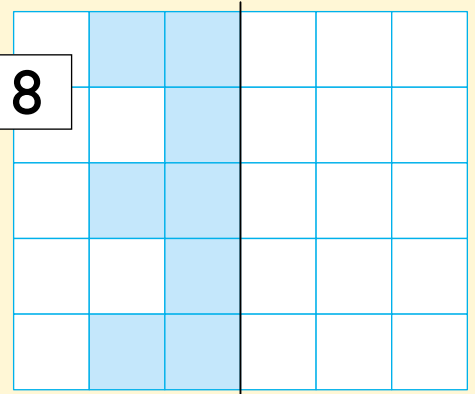


Guektien giert
taaleste 6 lea 12.

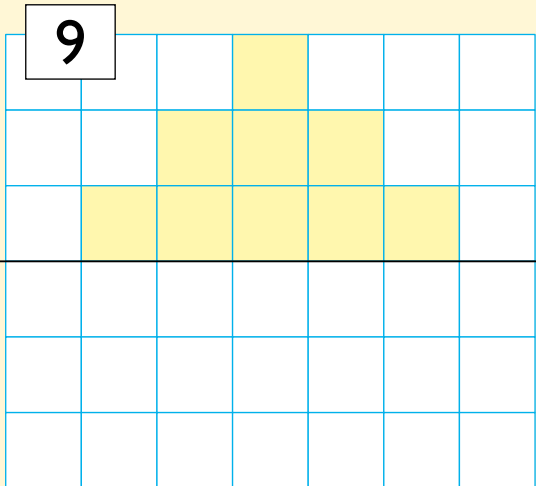
12



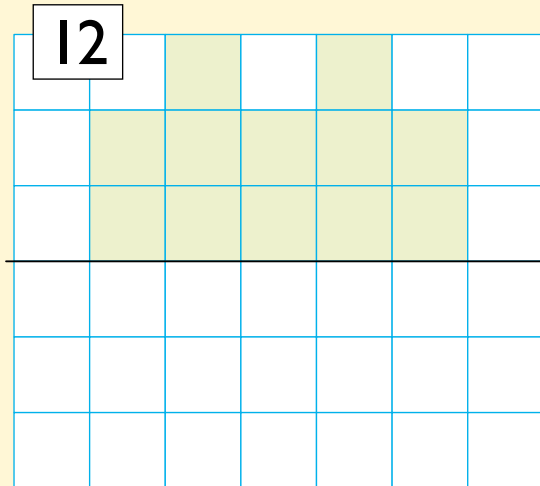
8



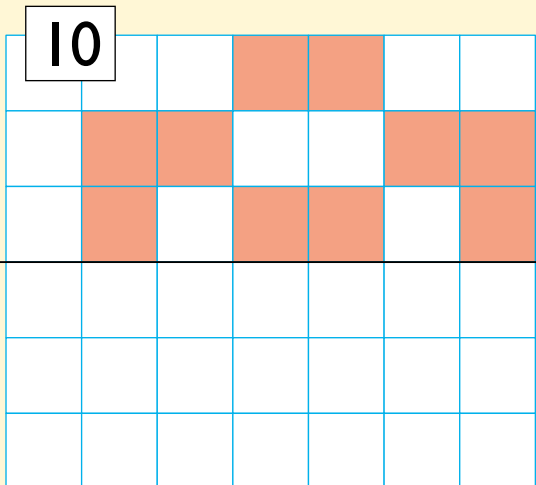
9



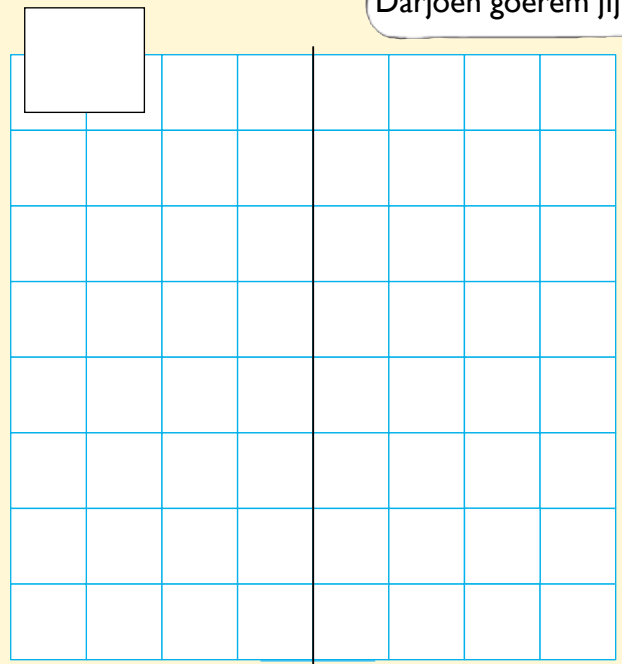
12



10



Darjoeh goerem jijtje.



■ Gaavnh haemide mejtie gārroeh bielen aarhkijste bietskedovveme. Tjaelieh reaktoe baakoem fierhten haemien baaktoe.



A			_____		_____
B			_____		
C			_____		
D			_____		_____
E			_____		_____
F			_____		
G			_____		_____

GEARTODH JÏH BIELIEDIDH – PAARRE-TAALH JÏH ODDE-TAALH




Manne guktien giertij bijre gievledamme.

Daesnie nijeljje dävretjij.

4

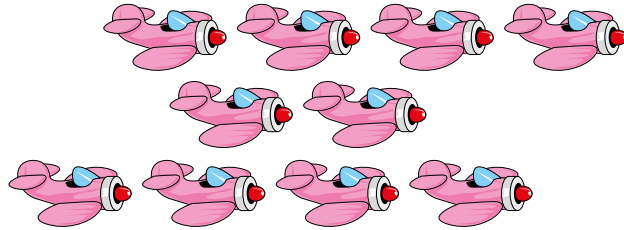
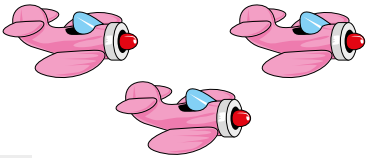


8





[.] Gievledh guektien giertij bijre.



3





5



7



10



[·] Klaeredh guektien giërth rovthh. Tjælieh lãhkoem.

6 12

7 _____

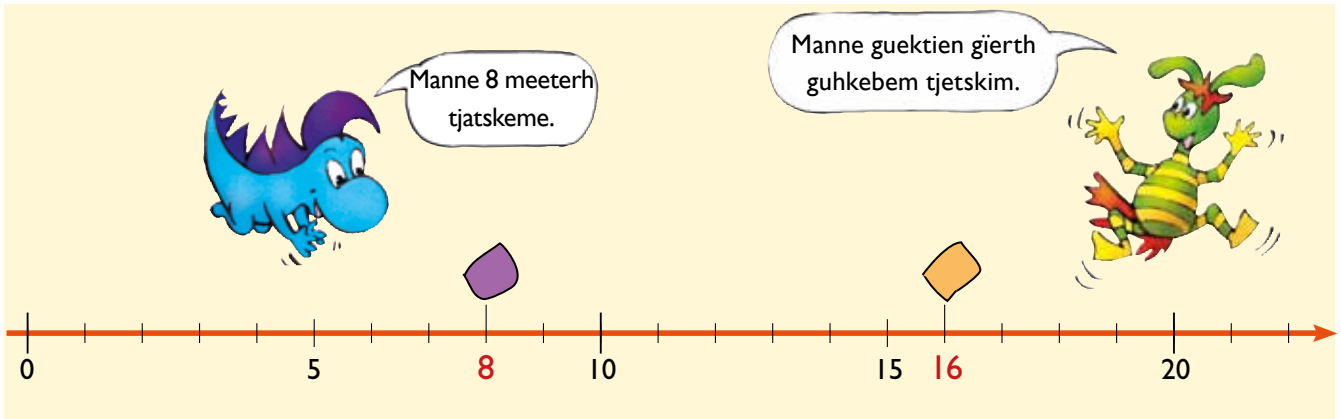
9 _____

12 _____

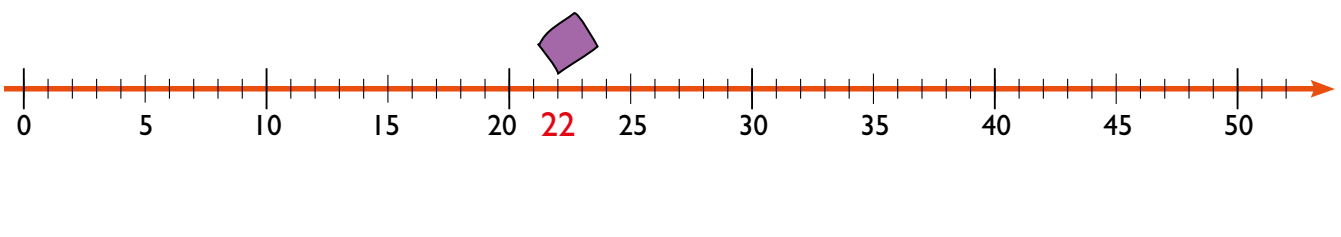
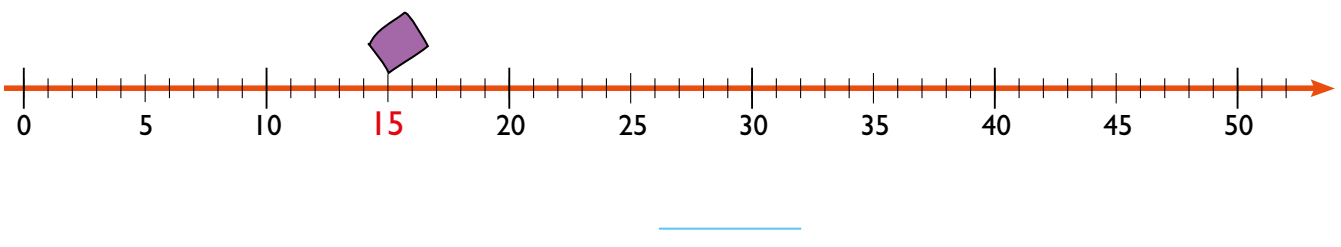
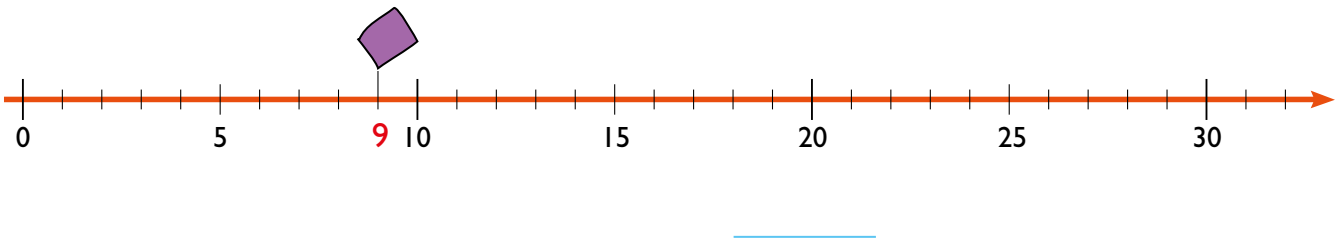
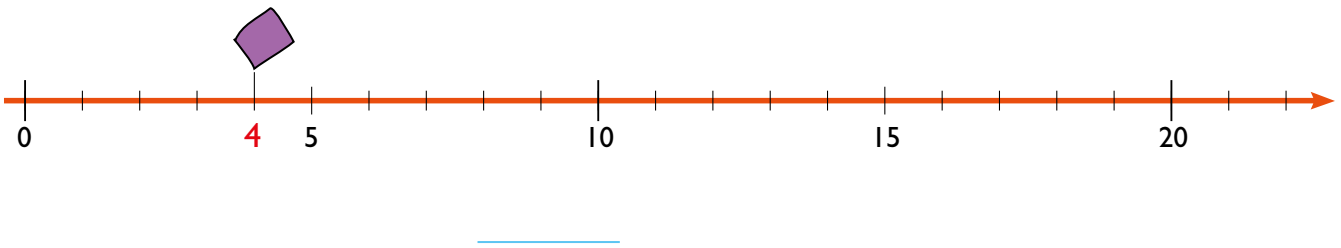
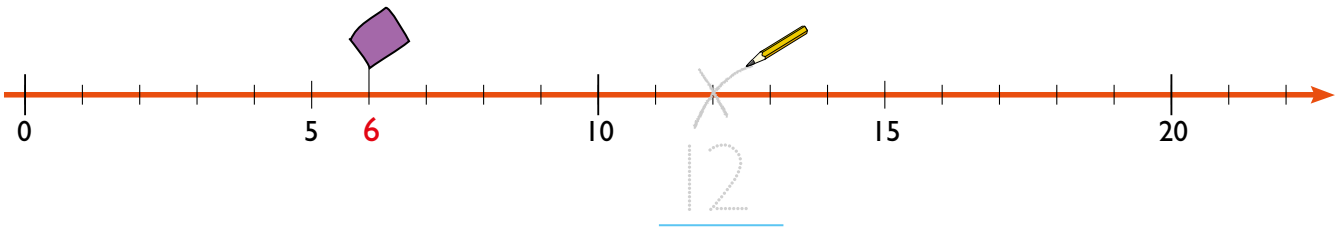
18 _____

24 _____

[.]



[.] Guvvedh guektien giert h gáhkóem.



[.]

Mov leah 17 krávnah.



Mov leah guektien giérth jeenebem.



[.] Gaavnh guektien giérth.


	<input type="text"/> kr
--	-------------------------

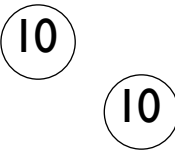
	<input type="text"/> kr
--	-------------------------

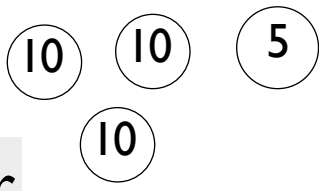
	<input type="text"/> kr
--	-------------------------

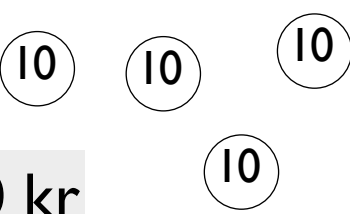
	<input type="text"/> kr
--	-------------------------


[·] Gaavnh guektien giërth.

 30 kr	<input type="text"/> kr
--	-------------------------

 20 kr	<input type="text"/> kr
--	-------------------------

 35 kr	<input type="text"/> kr
---	-------------------------

 40 kr	<input type="text"/> kr
--	-------------------------

 55 kr	<input type="text"/> kr
--	-------------------------

[·] Gievledh lehkien bijre. Tjaelieh vaastoem.

12

6

10

14

6

18

[.]

20



Daelie lehkiem
klaeriedamme.



0

10

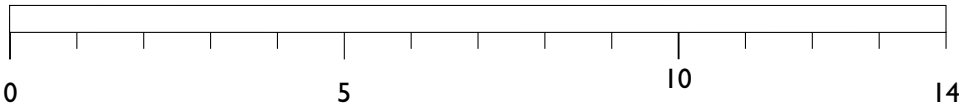
15

20

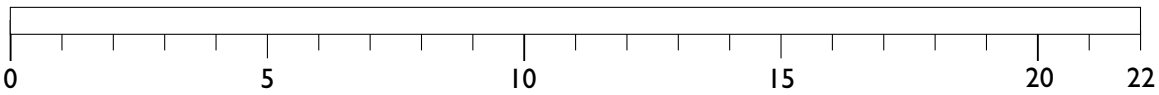
10

[..] Klaeredh lehkiem.

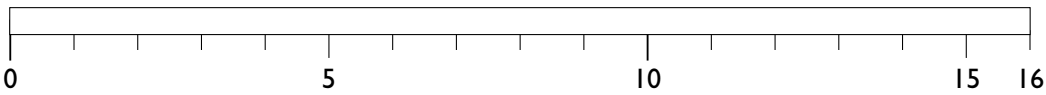
14



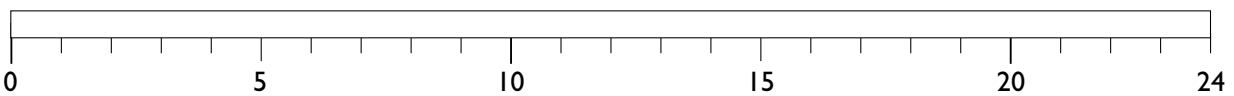
22



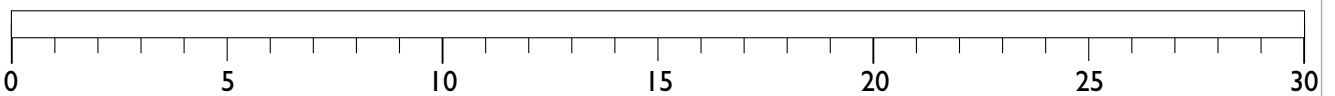
16



24



30



[.] Juekieh beetnegidie guktie seamma jeene spåareme-snurhkine sjædta.

24 kr

10

12 kr 12 kr

60 kr

_____ kr _____ kr

42 kr

_____ kr _____ kr

28 kr

_____ kr _____ kr

100 kr

_____ kr _____ kr

[·] Gaavnh lehkiem.

24 kr

12 kr

80 kr

_____ kr

40 kr

_____ kr

84 kr

_____ kr

62 kr

_____ kr

48 kr

_____ kr

Guktie daejtie göök-
tide lutniestidh?



[··] 70 kr

_____ kr


96 kr

_____ kr

[.] Paarre-taalh jih odde-taalh.



[.] Tjaelieh nommerh gæetide.





[.] Juekieh 2 guajman. Klaeredh bæjngolds-vaarjojde.

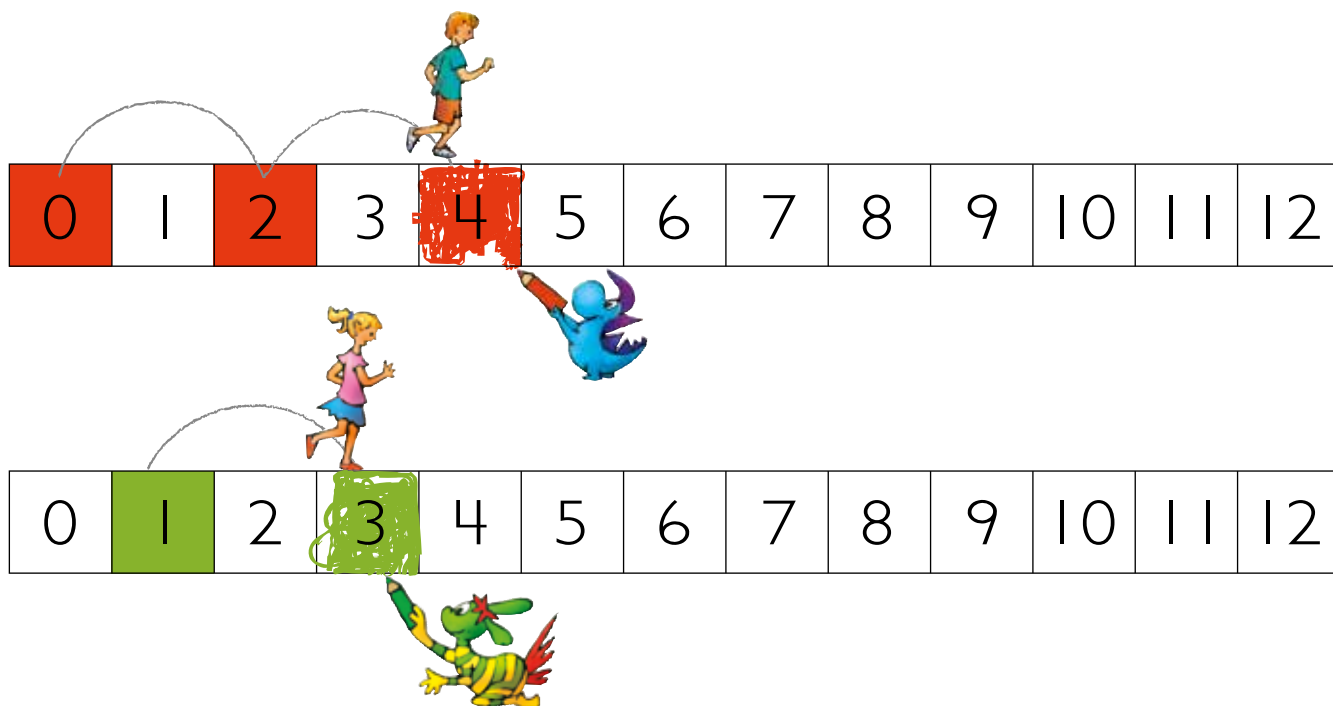




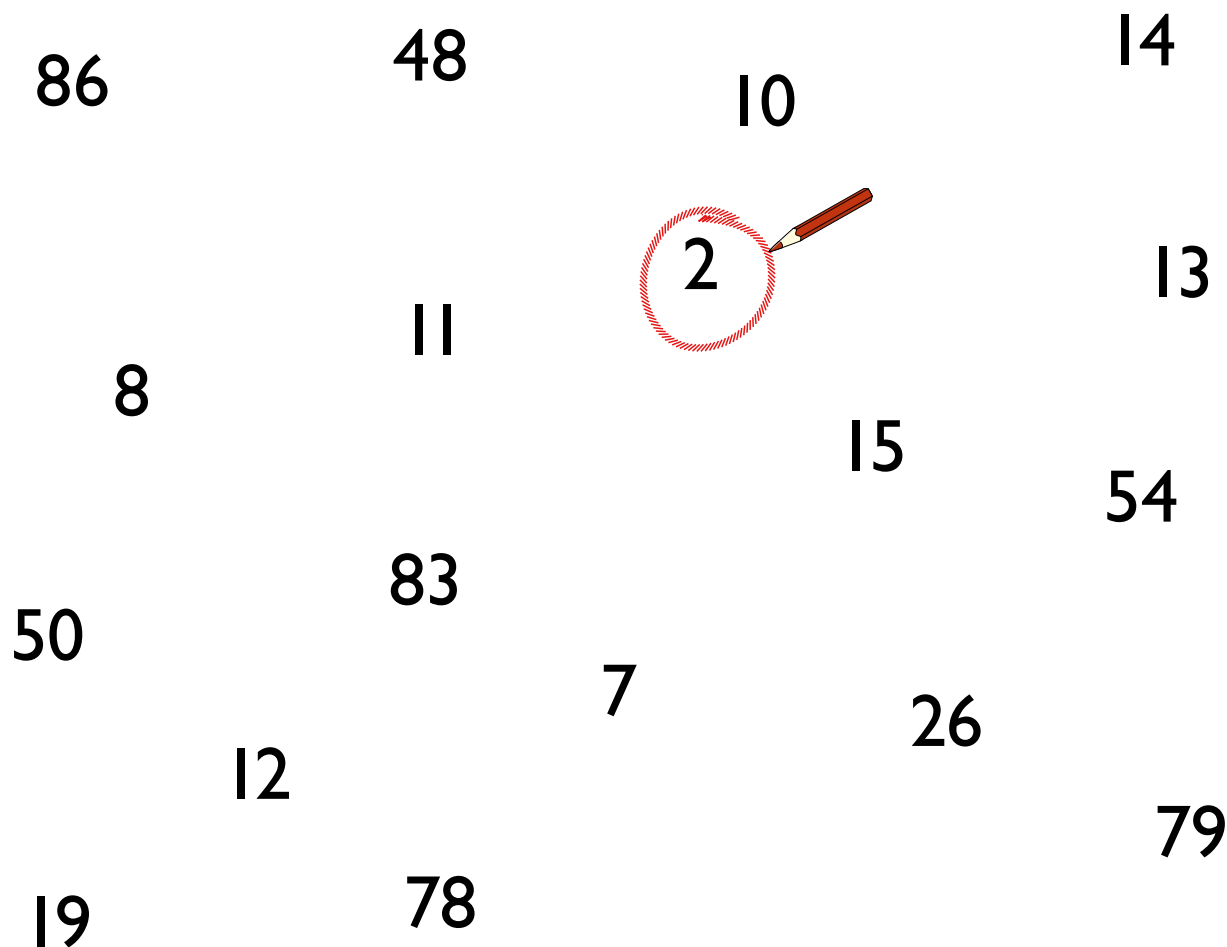
[.] Maahtah 2 seamma jolle tãarnh klaeriedidh?

<p>6</p> <p>Dah seamma jolle sjïdtin.</p> <p>6 lea paarre-taale/odde-taale</p>	<p>5</p> <p>Eah dah seamma jolle sjïdtin.</p> <p>5 lea paarre-taale/odde-taale</p>	<p>8</p> <p>8 lea paarre-taale/odde-taale</p>
<p>7</p> <p>7 lea paarre-taale/odde-taale</p>	<p>10</p> <p>10 lea paarre-taale/odde-taale</p>	<p>14</p> <p>14 lea paarre-taale/odde-taale</p>
<p>18</p> <p>18 lea paarre-taale/odde-taale</p>	<p>17</p> <p>17 lea paarre-taale/odde-taale</p>	<p>11</p> <p>11 lea paarre-taale/odde-taale</p>

[·] Njulhtjh 2 fierhtene vâarosne.



[··] Gievledh rööpses klaerine paarre-taali bijre jîh kruana klaerine odde-taali bijre.



[·] SPIELE: Paarre-taalh jih odde-taalh

Manne paarre-taalh veeljem

Manne odde-taalh veeljem.

P

**A
A
L
K
O
E**

L

← paarre-taalh

odde-taalh →

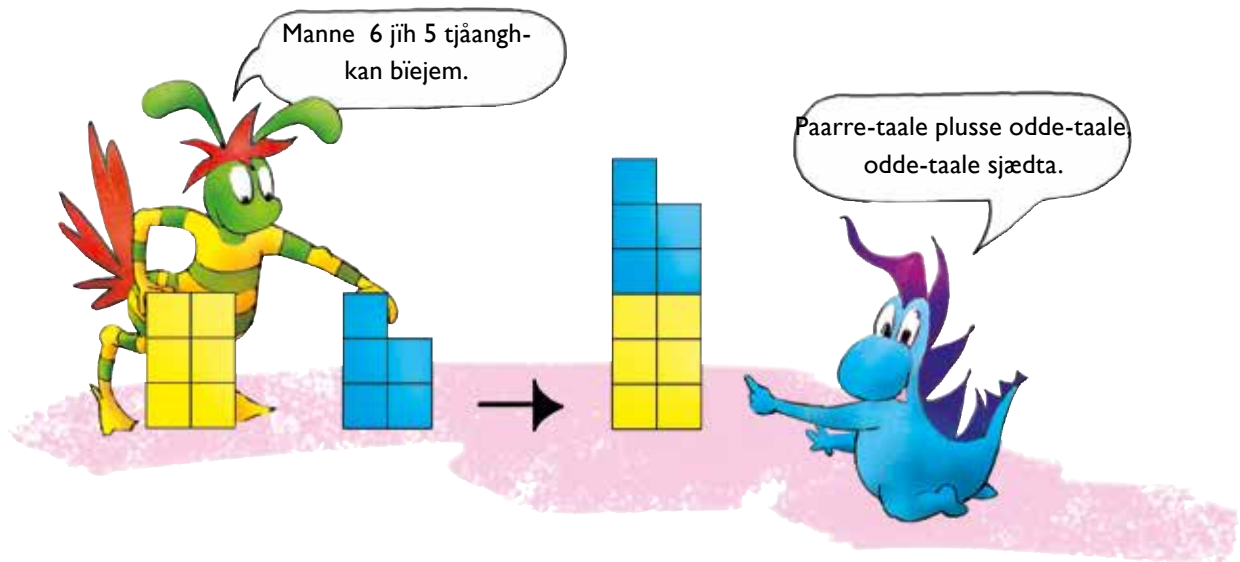
SPIELE-NJOELKEDASSH

Spealadidie gööktesh jih gööktesh. Dichte akte, paarre-taalh veeljie jih mubpie odde-taalh. Biejh jovhtem AALKOE sæjjan. Tjetskiah göökte tjelmie-skaavhtegh fiere guhten aejkien. Jis tjængkie paarre-taale sjædta, jovhtem aktem rovhtem P sæjjan juhtieh. Jis tjængkie odde-taale sjædta, jovhtem aktem rovhtem O sæjjan juhtieh. Dichte gie jovhtem voestegh jijtse gierese åådtje, vitneme.

[·] Klaeredh paarre-taalide rööpses.




1	9	11	28	12	15	5	29
13	20	46	2	50	18	34	19
82	3	81	6	54	17	77	34
25	21	66	78	22	38	7	83
13	75	90	48	70	72	25	99
44	81	71	16	74	83	19	56
43	22	68	32	24	38	96	77
29	3	47	70	94	57	23	85



[.] Goerh mejtie tjãenghkie paarre-taale jallh odde-taale.

$4 + 3$ $4 + 3$ <p>paarre-taale/odde-taale</p>	$8 + 4$ $8 + 4$ <p>paarre-taale/odde-taale</p>	$6 + 7$ $6 + 7$ <p>paarre-taale/odde-taale</p>
$7 + 3$ $7 + 3$ <p>paarre-taale/odde-taale</p>	$6 + 9$ $6 + 9$ <p>paarre-taale/odde-taale</p>	$5 + 11$ $5 + 11$ <p>paarre-taale/odde-taale</p>

[.]



[..] Ryöknedh.

$4 + 4 = \underline{\hspace{2cm}}$

$4 + 5 = \underline{\hspace{2cm}}$

$4 + 3 = \underline{\hspace{2cm}}$

$7 + 7 = \underline{\hspace{2cm}}$

$7 + 8 = \underline{\hspace{2cm}}$

$7 + 6 = \underline{\hspace{2cm}}$

$10 + 10 = \underline{\hspace{2cm}}$

$10 + 11 = \underline{\hspace{2cm}}$

$10 + 9 = \underline{\hspace{2cm}}$

$30 + 30 = \underline{\hspace{2cm}}$

$30 + 31 = \underline{\hspace{2cm}}$

$30 + 29 = \underline{\hspace{2cm}}$

$6 + 6 = \underline{\hspace{2cm}}$

$6 + 7 = \underline{\hspace{2cm}}$

$6 + 5 = \underline{\hspace{2cm}}$

$9 + 9 = \underline{\hspace{2cm}}$

$9 + 10 = \underline{\hspace{2cm}}$

$9 + 8 = \underline{\hspace{2cm}}$

$8 + 8 = \underline{\hspace{2cm}}$

$8 + 9 = \underline{\hspace{2cm}}$

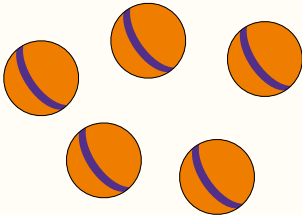
$8 + 7 = \underline{\hspace{2cm}}$

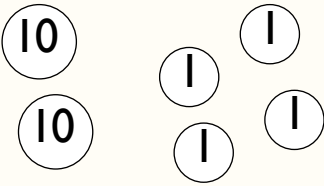
$20 + 20 = \underline{\hspace{2cm}}$

$20 + 21 = \underline{\hspace{2cm}}$


$20 + 19 = \underline{\hspace{2cm}}$


■ Gaavnh guektien giérth.


5 


24 

⦿ Gievledh lehkien bijre. Tjaelieh vaastoem.

8 

12 

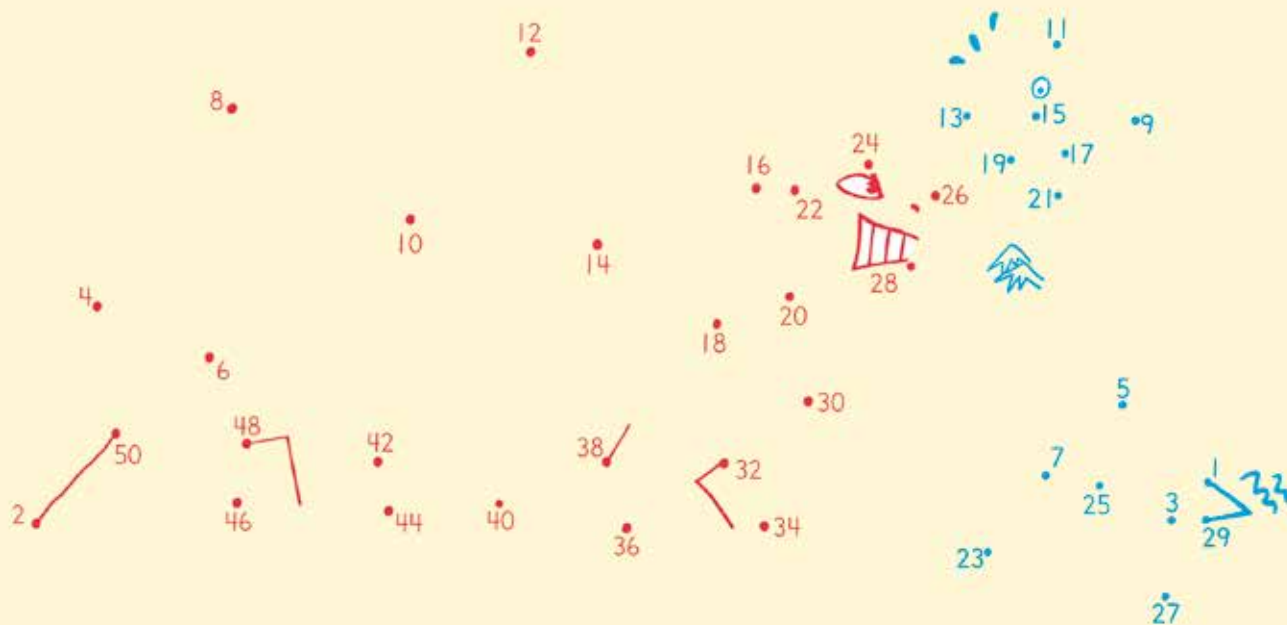
26 

40 

⦿ Gievledh odde-taali bijre.

18 7 22 6 52
13 9 96 11 75


• Darjoeh sievh trebleste trablan.



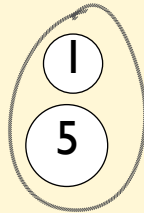

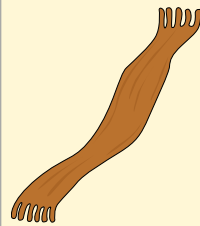

• Maahtah 2 seamma jolle tårnh klaeriedidh?

<p>4</p> <p>4 paarre-taale/ odde-taale</p>	<p>11</p> <p>11 paarre-taale/ odde-taale</p>	<p>10</p> <p>10 paarre-taale/ odde-taale</p>
<p>15</p> <p>15 paarre-taale/ odde-taale</p>	<p>19</p> <p>19 paarre-taale/ odde-taale</p>	<p>16</p> <p>16 paarre-taale/ odde-taale</p>

LÏEREHTIMMIEGÆRJA S. 68–74



▣ Guvvedh beetnegidie. Gaavnh åasan lehkiem.

   	
_____ kr	_____ kr
	
_____ kr	_____ kr
	
_____ kr	_____ kr
	
_____ kr	_____ kr



SPİELE

SPİELENJOLKEDASSH

Spïelijh 2-4.

Spïelijh daablojde aalkoe sæjjan bieieh jïh tjelmie-skaavhtegem fiere guhten våaroen mietie tjetskïeh. Dïhte gie tjatska, jovhtem jåhta jïh låhkoem daej njo-elkedassi mietie juhtehte:

+ Bïejh tjelmïeh tjelmie-skaavhtegisnie dïsse.

- Tramhkelh tjelmïeh tjelmie-skaavhtegisnie destie.

D Bïejh guektien giërth tjelmïeh tjelmie-skaavhtegisnie dïsse.

0 Ij naan tjåegkie.


Bööremes dejtïe tjåegkïde pæhpïerasse jallh gærjese tjæledh. Spïele nåhka gosse voestes learohke måålem jakseme. Dïhte vitnie gie jeenemes tjåegkïeh åtna.

AALKOE			+	+	+		
	+	+	D			D	
						+	
	+	+	+	0		0	
	+				+	D	+
	D						
	+	+	0	D	-	-	
						-	
	+	+	D	D		+	
	+				D	+	0
	-						
	+		+	+	D	D	
	+	+	D				-
							MÅÅLE

10 RYÖKNEDIDH TAALESE 100



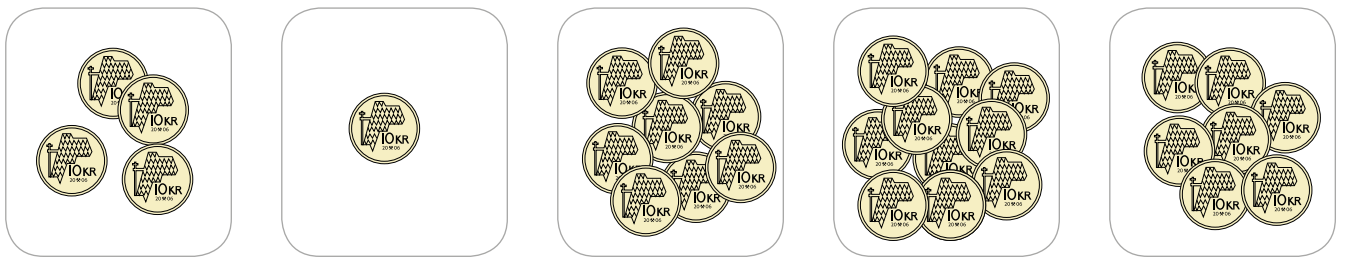
[.] Darjoeh sievh.



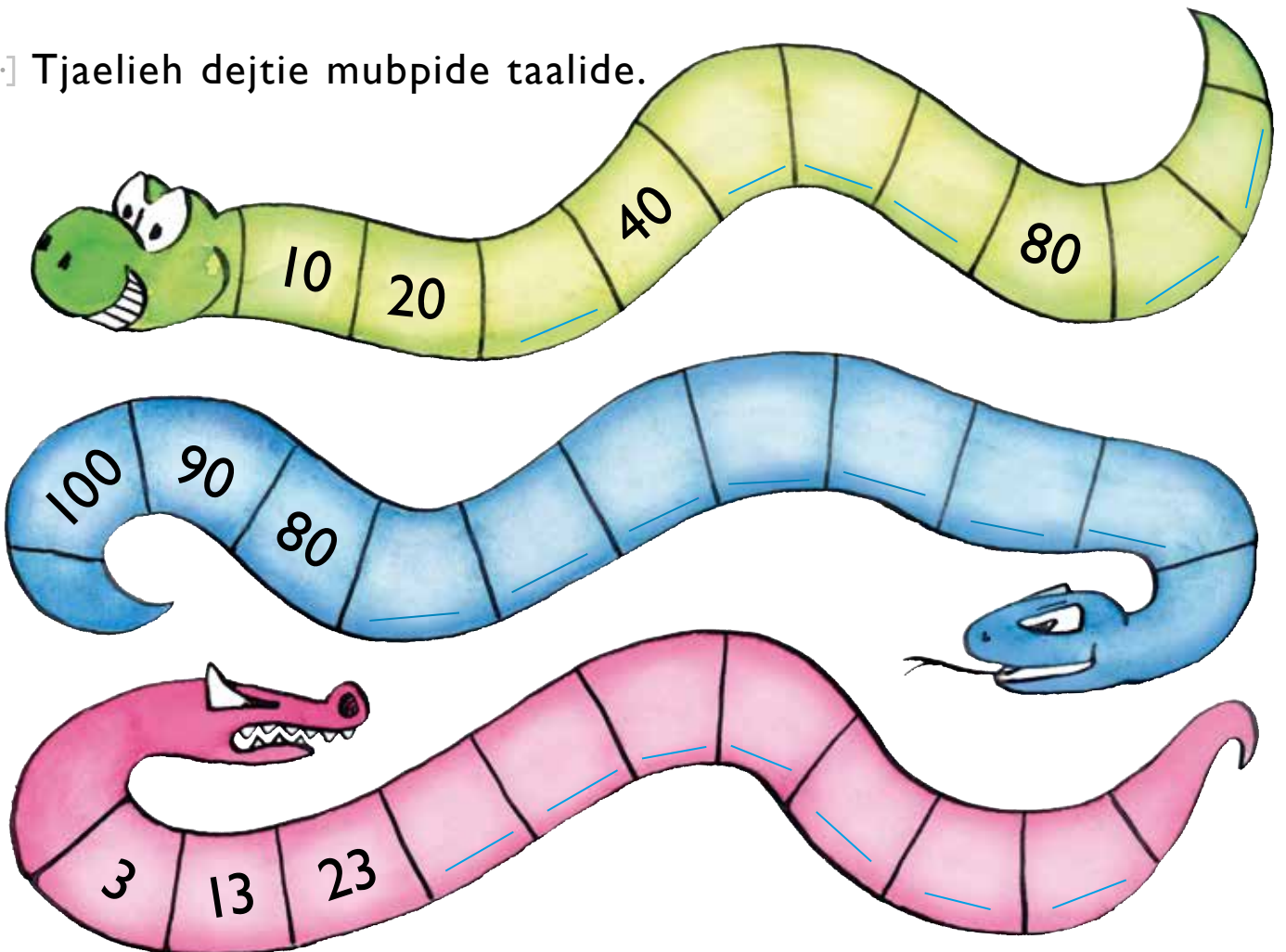
[.] Man gellie krávnah?

<p>70 kr</p>	<p>_____ kr</p>	<p>_____ kr</p>
<p>_____ kr</p>	<p>_____ kr</p>	<p>_____ kr</p>

[·] Darjoeh sievem taale-sievese.




[··] Tjaelieh dejtie mubpide taalide.



[·] Man gellie krávnah ektesne?

$30 + 30 =$



$= \underline{60} \text{ kr}$

$10 + 10 =$

$= \underline{\quad} \text{ kr}$

$20 + 10 =$

$= \underline{\quad} \text{ kr}$

$30 + 20 =$

$= \underline{\quad} \text{ kr}$

$20 + 40 =$

$= \underline{\quad} \text{ kr}$

$50 + 30 =$

$= \underline{\quad} \text{ kr}$

$20 + 60 =$

$= \underline{\quad} \text{ kr}$

[··] Ryöknedh.

$40 + 10 = \underline{\quad}$

$30 + 20 = \underline{\quad}$

$70 + 30 = \underline{\quad}$

$80 + 20 = \underline{\quad}$

$40 + 30 = \underline{\quad}$

$50 + 40 = \underline{\quad}$

$70 + 20 = \underline{\quad}$


$60 + 40 = \underline{\quad}$

$90 + 10 = \underline{\quad}$

$30 + 60 = \underline{\quad}$

$50 + 50 = \underline{\quad}$

$40 + 40 = \underline{\quad}$



Mijjen barre
lähkegh jih aktegh.




[·] Guvvedh beetnegidie jih tjaelieh taalem.

21 kr



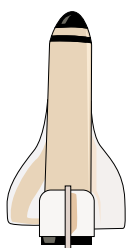
_____ kr




_____ kr



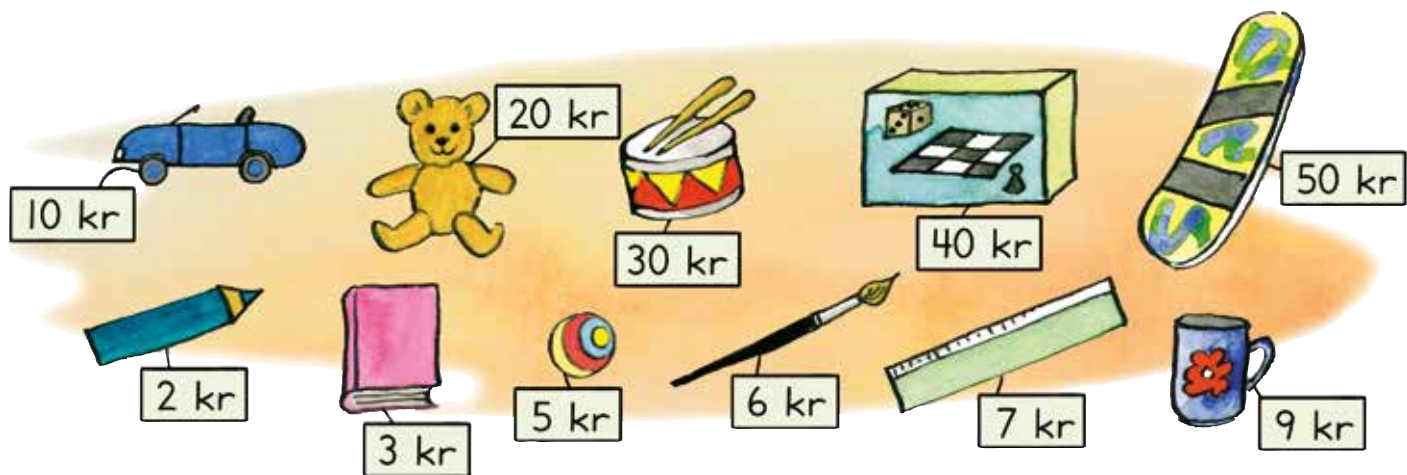
_____ kr



_____ kr



_____ kr



[·] Guvvedh beetnegidie jih tjaelieh taalem.

$10 + 7 = \underline{17} \text{ kr}$

$\underline{\quad} + \underline{\quad} = \underline{\quad} \text{ kr}$

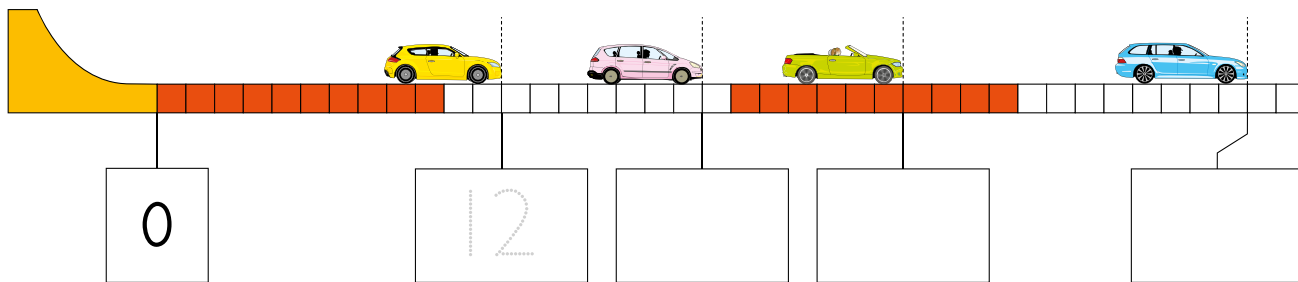
$\underline{\quad} + \underline{\quad} = \underline{\quad} \text{ kr}$

$\underline{\quad} + \underline{\quad} = \underline{\quad} \text{ kr}$

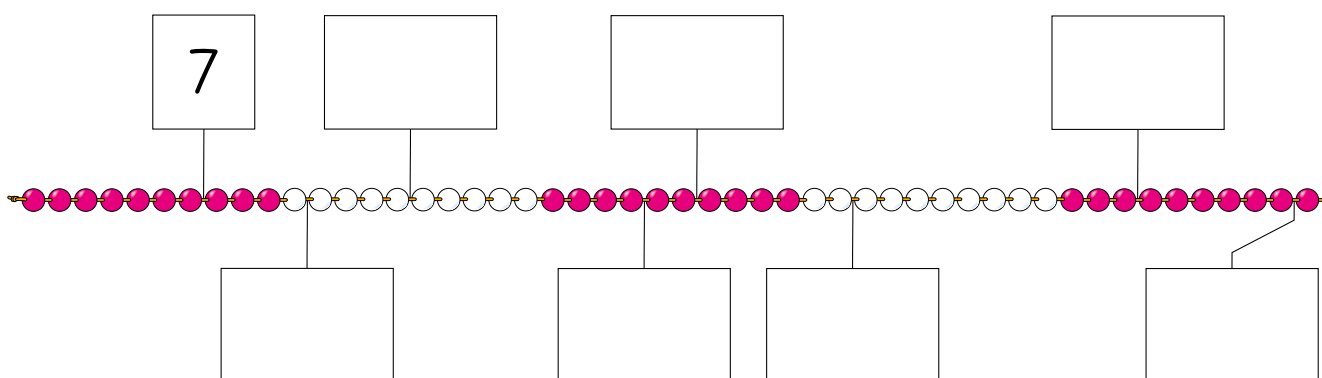
$\underline{\quad} + \underline{\quad} = \underline{\quad} \text{ kr}$

$\underline{\quad} + \underline{\quad} = \underline{\quad} \text{ kr}$

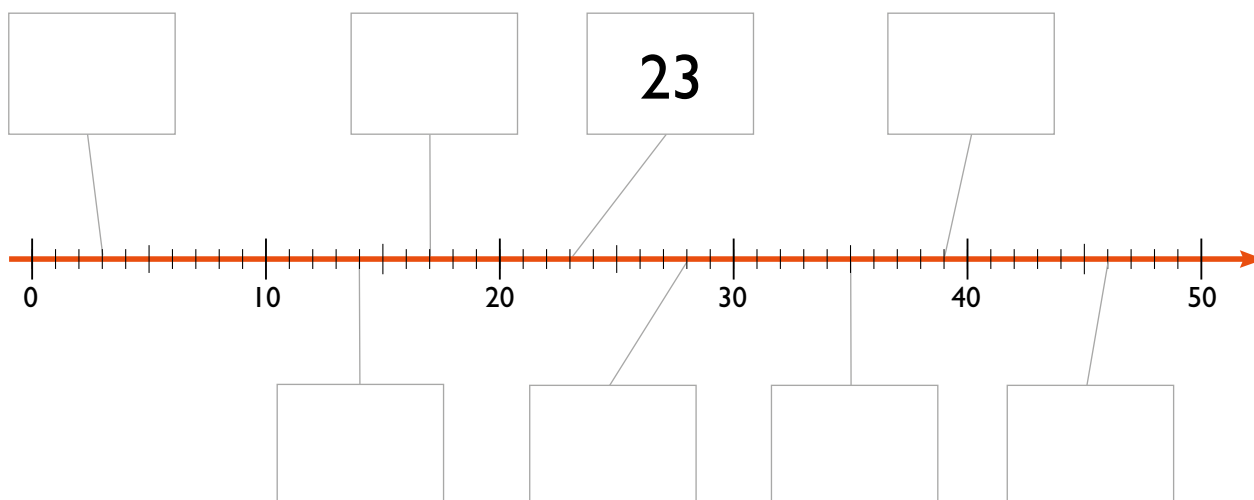
[·] Man gähkese bijlh járrieh?



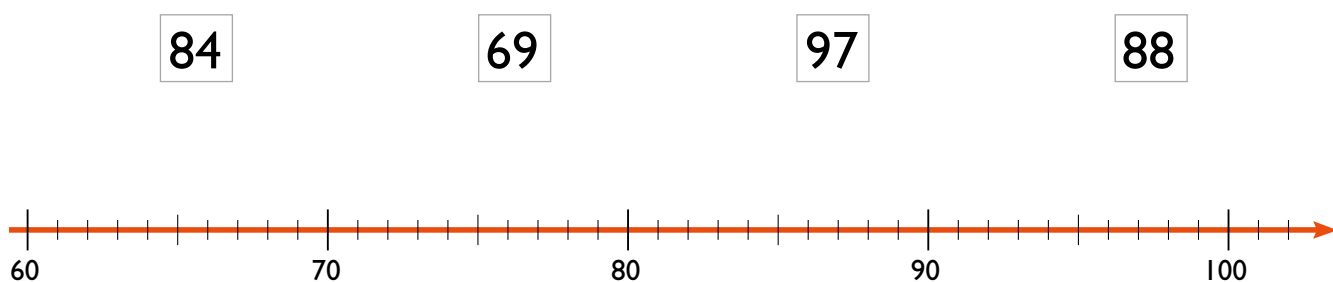
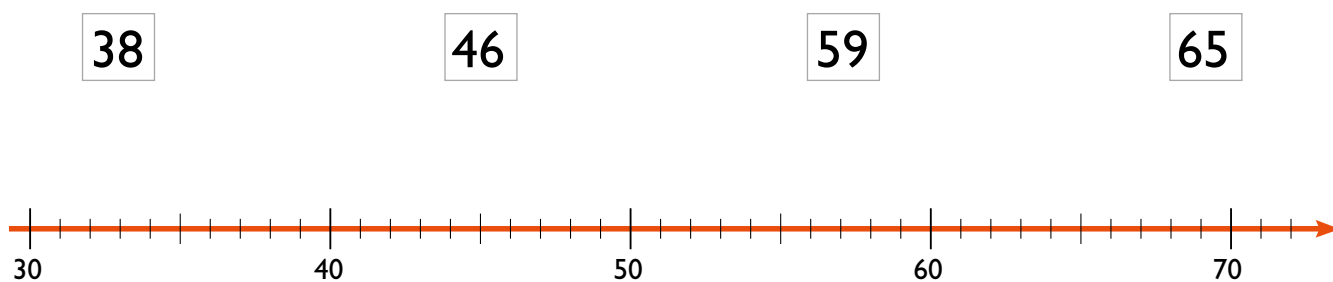
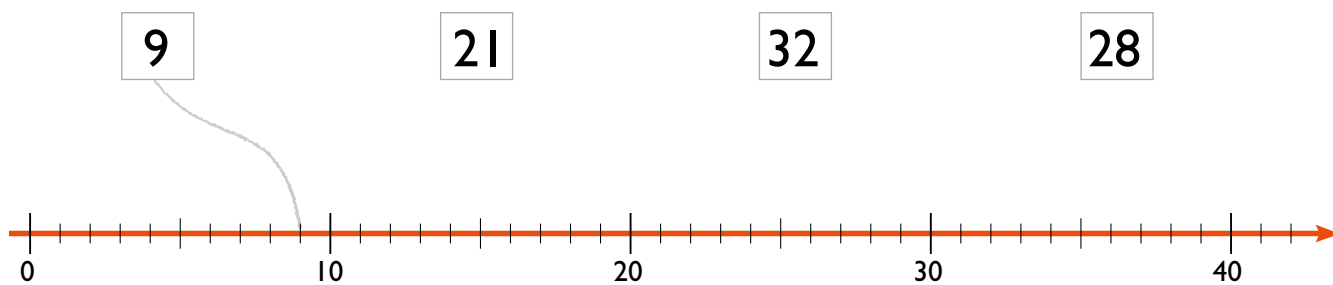
[·] Lohkh værjosne. Tjælieh taalh rovhtide.



[·] Lohkh taale-sievesne.



[·] Darjoeh sievem taale-sievese.



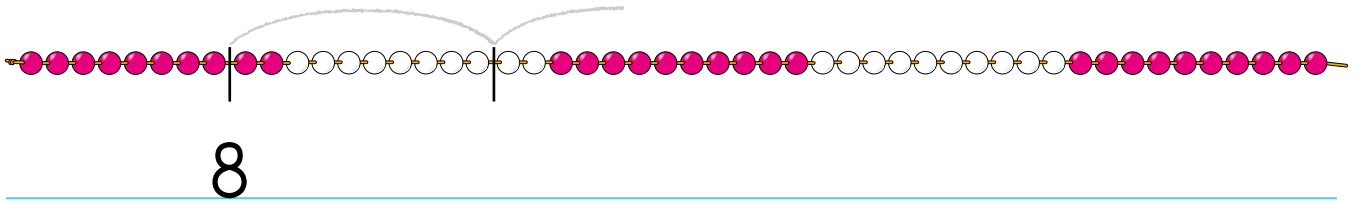
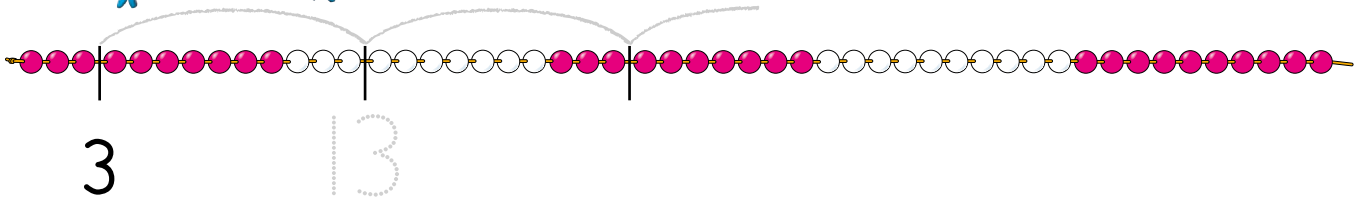
[··] Darjoeh sievh mahte riektes sæjjan taale-sievese.



[·] Njulhtjh taaline 10 fierhten vâarosne.



10 gearketjh fierhten
aejkien.



[·] Lissedh 10 krâvnajujmie fierhten aejkien.



6



16



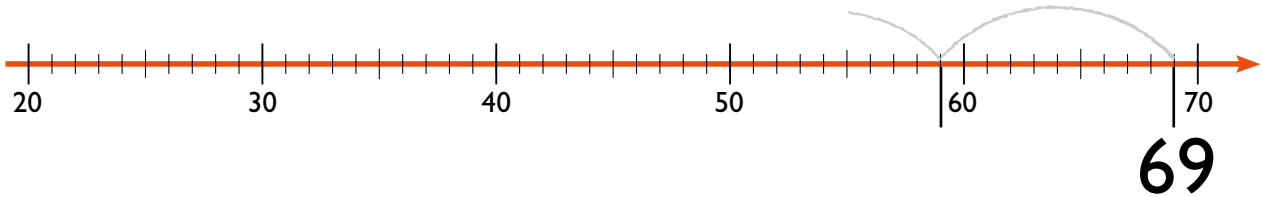
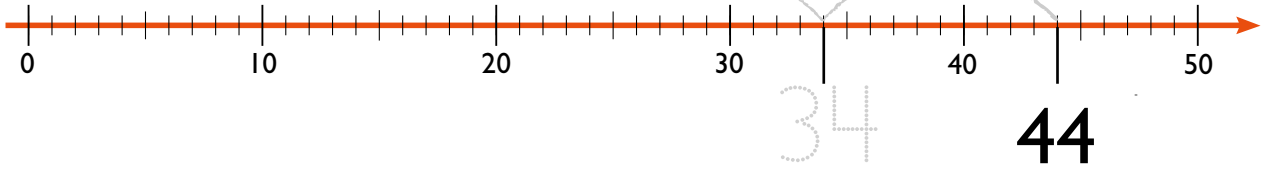
21



47

[·] Njulhtj taaline 10 fierhten aejkien.

Daesnie 10.



[·] Tramhkelh 10 kråvnah fierhten aejkien.




42




32







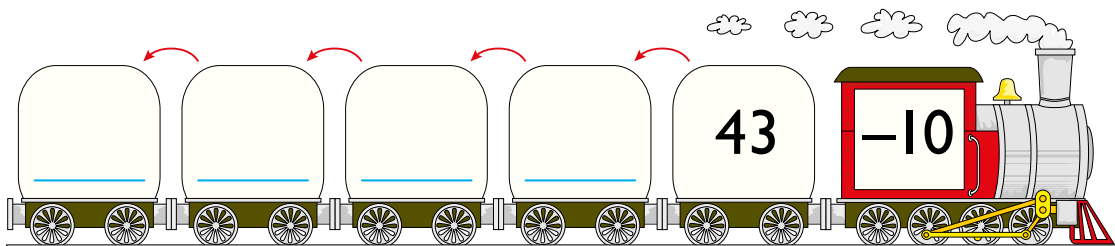
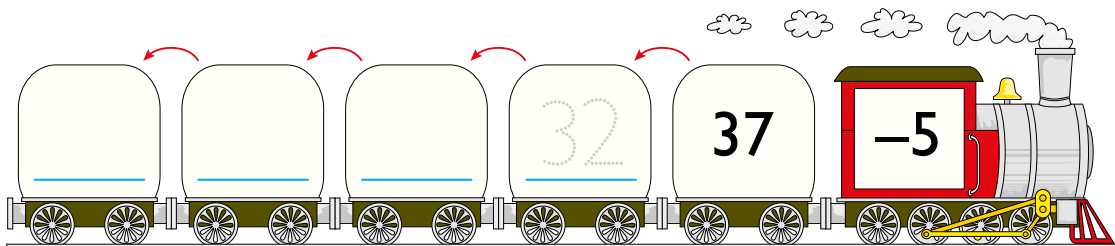
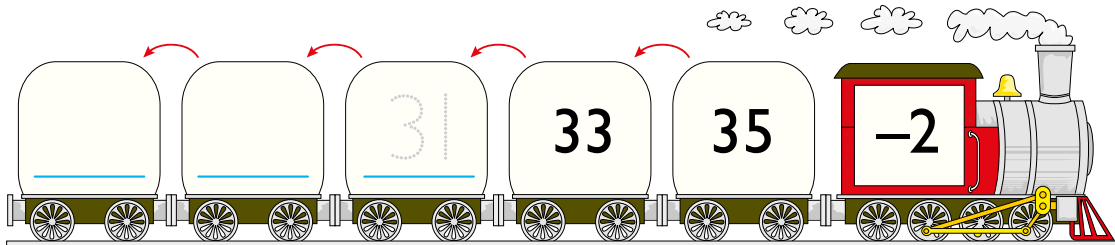
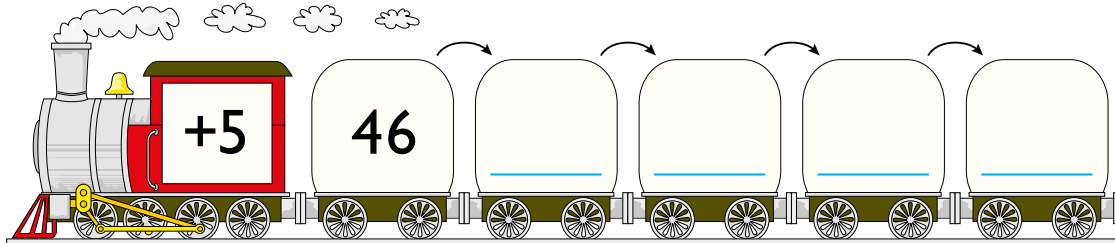
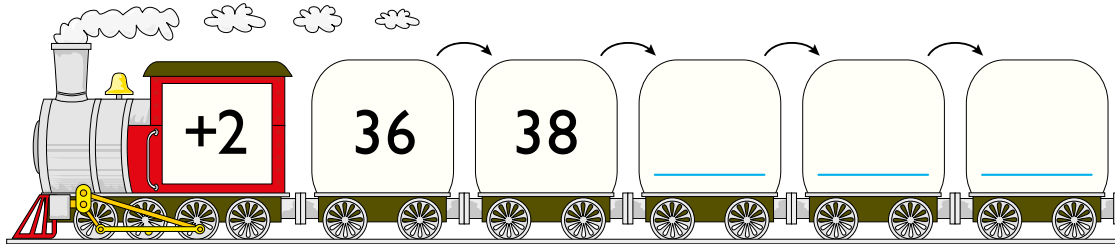
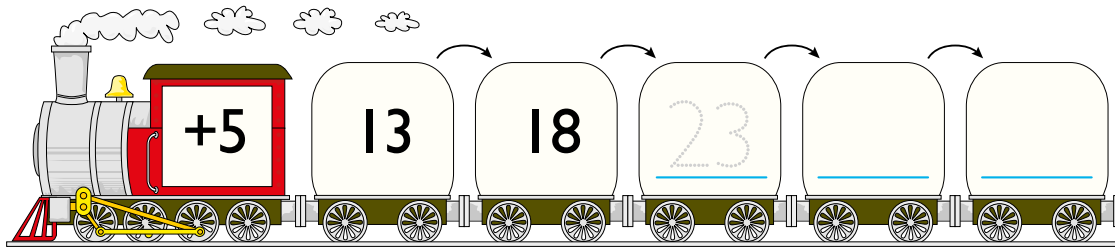
85




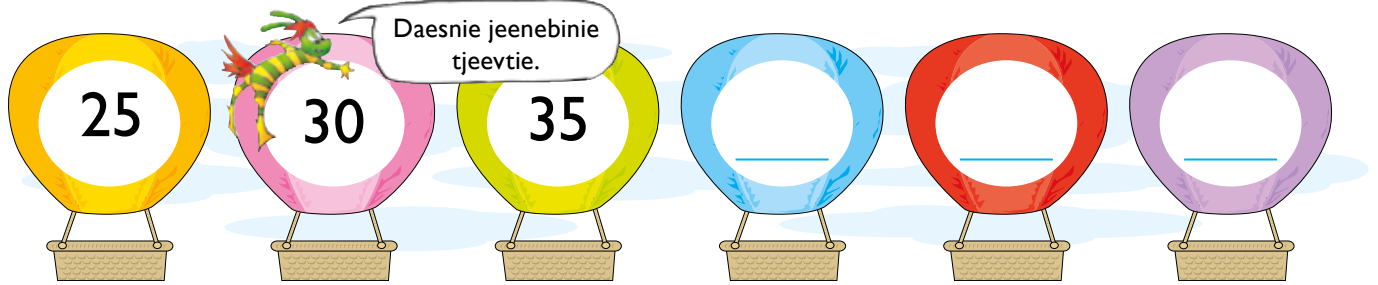


58

[·] Tjaelieh taalide mah fãatesieh.



[·] Gaavnh goerem. Geervehth taale-bååresidie.



[··] Gaavnh goerem. Geervehth taale-bååresidie.

43	_____	_____	_____	51	53	55
_____	_____	_____	47	_____	67	77
_____	_____	_____	_____	78	83	88
_____	_____	61	_____	_____	67	69

[.] SPIELE: gööktelâhkege-voelpebingo

SPIELE-NJOELKEDASSH

Spïelijh 2-4.

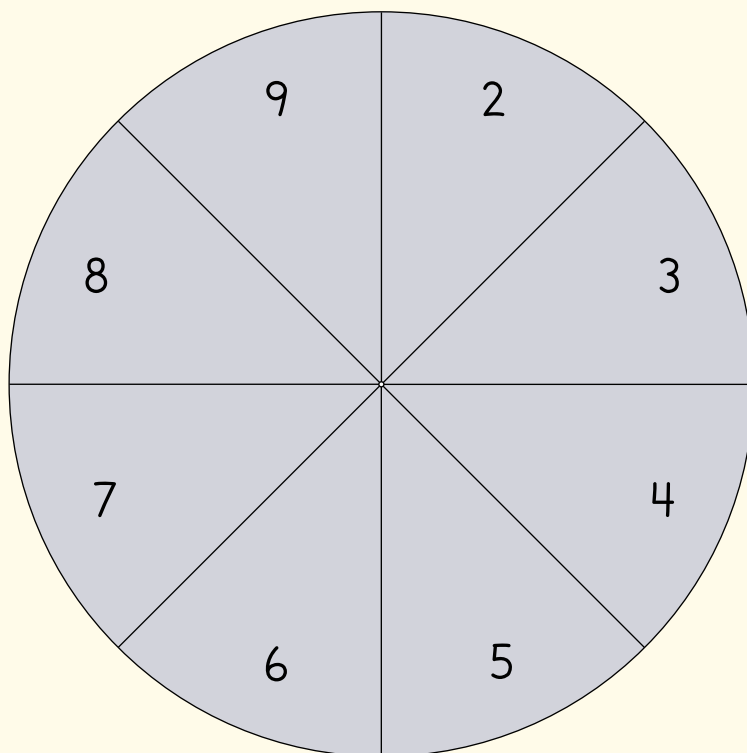
Deerpegh: Baste, plæjjohke.

Fierhten spieliije taalh taaleste 11 taalese 18 rovhte-vearman deavhta. Luhpie seamma taalem gellien aejkien provhkedh. Jårrehth bastem kluehkesne fiere guhten vâaroen mietie. Dîhte gien gööktelâhkege-voelpe taalese gusnie baste tjöödtjeste, kroessem taalese beaja. Luhpie barre aktem kroessem fierhten vâarosne biejedh. Voejhkelh voestegh golme gævnjieruktien mietie åadtjodh jih dan mænngan daabloem dievhtedh. Dîhte gie voestes daabloem deavhta vitneme.

1

2

3



[·] Järrehth bastem bielesne 48 jih darjoeh ryöknedimmie-boelhkh. Juekieh lähkagidie jih aktagidie, jih ryöknedh.

Manne 6 äadtjoejim!

Manne 6 daesnie tjaalam. Vaastoe 29 sjædta.

$$23 + 6 = \underline{29}$$

20 3

$$16 + \underline{\quad} = \underline{\quad}$$

10 6

$$25 + \underline{\quad} = \underline{\quad}$$

○ ○

$$14 + \underline{\quad} = \underline{\quad}$$

○ ○

$$43 + \underline{\quad} = \underline{\quad}$$

○ ○

$$19 + \underline{\quad} = \underline{\quad}$$

○ ○

$$67 + \underline{\quad} = \underline{\quad}$$

○ ○

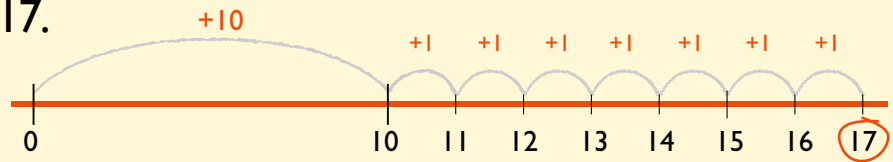
$$28 + \underline{\quad} = \underline{\quad}$$

○ ○

$$75 + \underline{\quad} = \underline{\quad}$$

○ ○

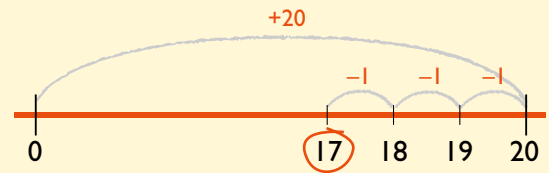
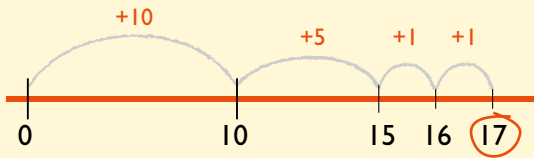
[.] Njulhtjh taalese 17.



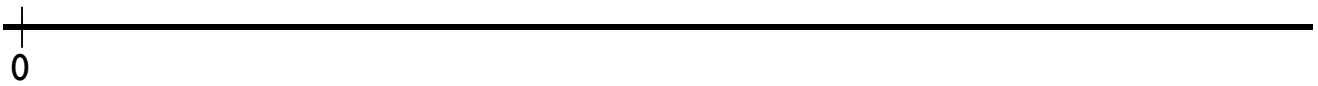
Manne naemhtie njulhtjem!



Manne naemhtie njulhtjem!



[.] Njulhtjh gáaroos taale-sievese. Aelkieh taalesne 0.
Njulhtjh taalese 32.



Njulhtjh taalese 56.



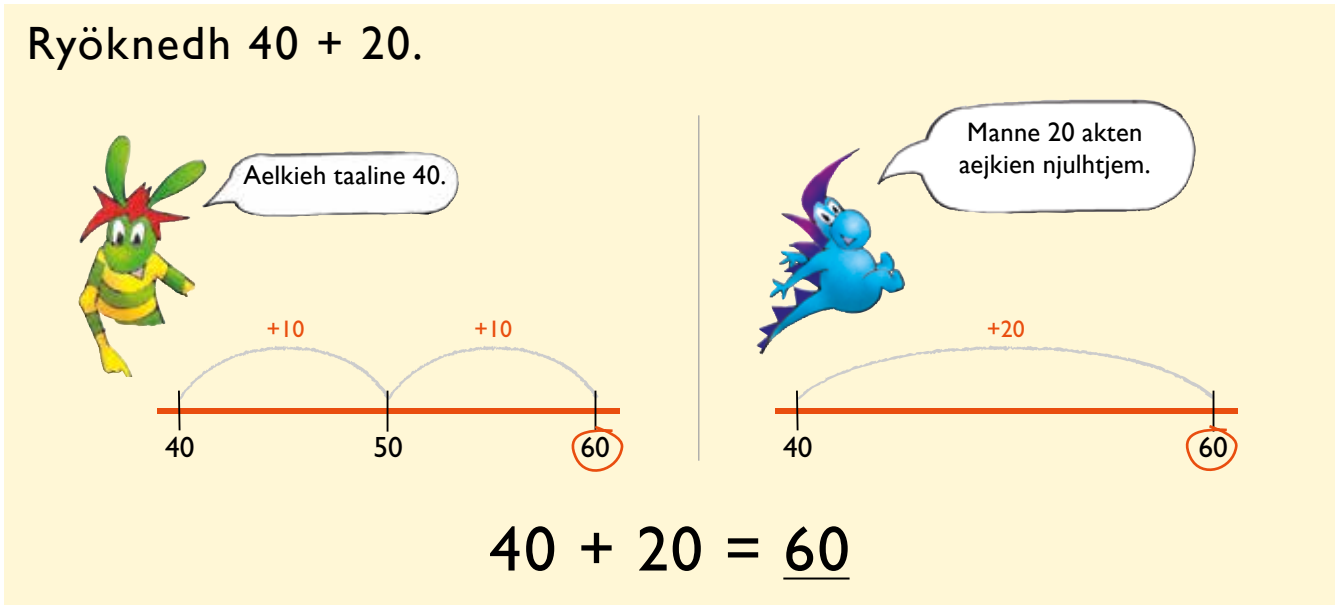
Njulhtjh taalese 49.



Njulhtjh taalese 98.



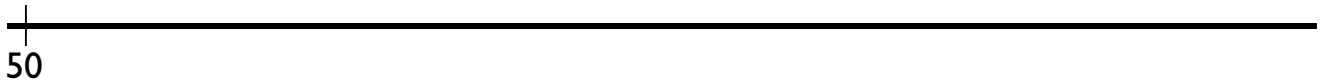
[·] Ryöknedh $40 + 20$.




[·] Biejh tjåanghkan gåaroes taale-sievese. Tjælieh vaastoem.



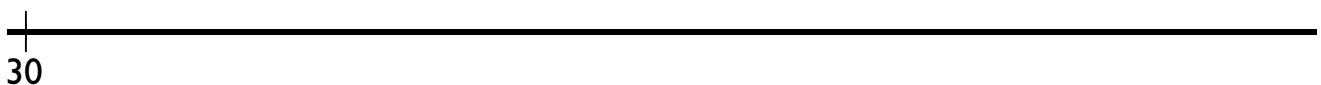
$$20 + 30 = \underline{\quad}$$



$$50 + 40 = \underline{\quad}$$



$$10 + 60 = \underline{\quad}$$



$$30 + 50 = \underline{\quad}$$

[·] Biejh tjāanghkan gāaroes taale-sievese. Tjaelieh vaastoem.



A horizontal number line with a tick mark at 41. A dashed arrow starts at 41 and points to the right, indicating an addition of 20. The number 41 is written below the tick mark.

$$41 + 20 = \underline{\hspace{2cm}}$$

$$\underline{\hspace{2cm}} \quad 33 + 50 = \underline{\hspace{2cm}}$$

$$\underline{\hspace{2cm}} \quad 15 + 40 = \underline{\hspace{2cm}}$$

[··] Ryöknedh.

$$50 + 20 = \underline{\hspace{2cm}}$$

$$60 + 30 = \underline{\hspace{2cm}}$$

$$10 + 70 = \underline{\hspace{2cm}}$$

$$24 + 30 = \underline{\hspace{2cm}}$$

$$7 + 40 = \underline{\hspace{2cm}}$$

$$78 + 20 = \underline{\hspace{2cm}}$$

$$48 + 40 = \underline{\hspace{2cm}}$$

$$61 + 5 = \underline{\hspace{2cm}}$$

$$33 + 6 = \underline{\hspace{2cm}}$$

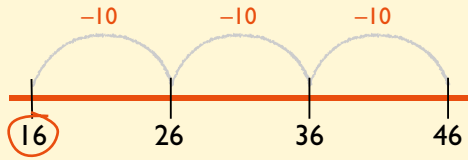
$$35 + 41 = \underline{\hspace{2cm}}$$

$$17 + 31 = \underline{\hspace{2cm}}$$

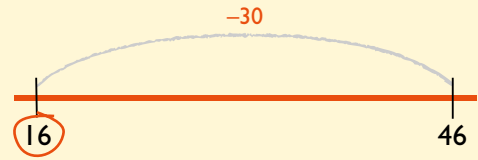
$$43 + 52 = \underline{\hspace{2cm}}$$

[.] Ryöknedh $46 - 30$.

Aelkieh daagkoe taaline 46.



Manne taaline 30 akten aejkien njulhtjem!



$$46 - 30 = \underline{16}$$

[.] Tramhkelh gáaroos taale-sieveste. Tjaelieh vaastoem.

$$60 - 40 = \underline{\quad}$$

$$52 - 20 = \underline{\quad}$$

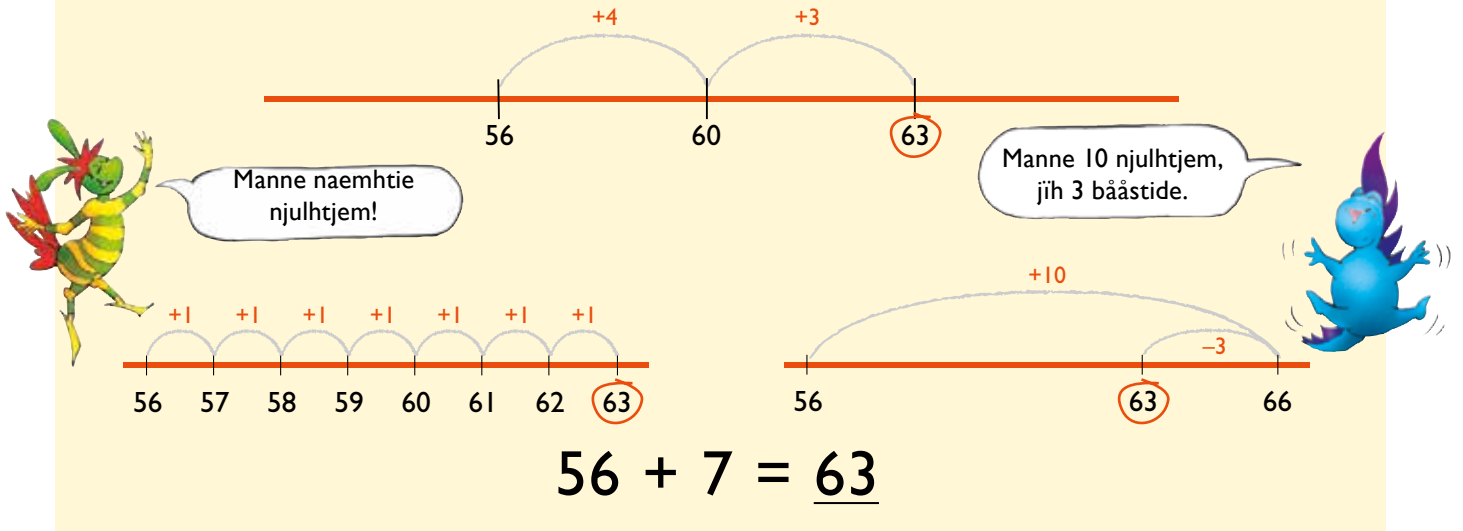
$$83 - 60 = \underline{\quad}$$

Guktie dam lutnesth?



$$40 - 19 = \underline{\quad}$$

[·] Ryöknedh $56 + 7$.



[·] Biejh tjäängghan gääroes taale-sievese. Tjælieh vaastoem.

$45 + 8 = \underline{\hspace{2cm}}$

$38 + 16 = \underline{\hspace{2cm}}$

$54 + 31 = \underline{\hspace{2cm}}$

$27 + 48 = \underline{\hspace{2cm}}$

[·] Tramhkelh gáaroes taale-sieveste. Tjaelieh vaastoem.

$$48 - 9 = \underline{\quad}$$

$$62 - 23 = \underline{\quad}$$


$$88 - 41 = \underline{\quad}$$

$$35 - 18 = \underline{\quad}$$

$$70 - 37 = \underline{\quad}$$

$$53 - 46 = \underline{\quad}$$

[·] Ryöknedh.



$$32 + 16 =$$



40




8

$$= 48$$

[·] Ryöknedh.




$$23 + 15 = 30 + 8 = \underline{\hspace{2cm}}$$



$$54 + 30 = \underline{\hspace{2cm}} + \underline{\hspace{2cm}} = \underline{\hspace{2cm}}$$



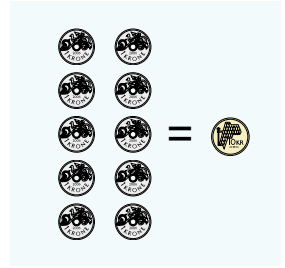
$$21 + 33 = \underline{\hspace{2cm}} + \underline{\hspace{2cm}} = \underline{\hspace{2cm}}$$




$$35 + 40 = \underline{\hspace{2cm}} + \underline{\hspace{2cm}} = \underline{\hspace{2cm}}$$



Mijjeh maehtebe 10 krávnah akten lãhkagasse tsööpkedh.



[·] Ryöknedh.



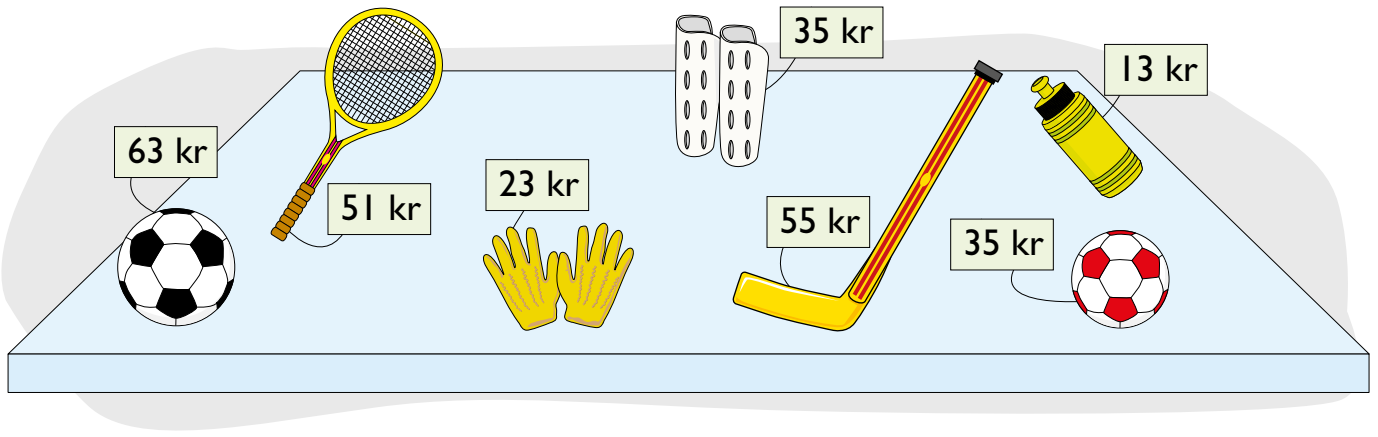
$$26 + 16 = 30 + 12 = \underline{\hspace{2cm}}$$

$$18 + 14 = \underline{\hspace{2cm}} + \underline{\hspace{2cm}} = \underline{\hspace{2cm}}$$

$$32 + 51 = \underline{\hspace{2cm}} + \underline{\hspace{2cm}} = \underline{\hspace{2cm}}$$

$$45 + 27 = \underline{\hspace{2cm}} + \underline{\hspace{2cm}} = \underline{\hspace{2cm}}$$



$$28 + 35 = \underline{\hspace{2cm}} + \underline{\hspace{2cm}} = \underline{\hspace{2cm}}$$






[·] Man jeene aajmojne?





Dov leah:  Datne aastah: 

$$45 - 23 = \underline{22} \text{ kr}$$

Dov leah:  Datne aastah: 


$$53 - 13 = \underline{\quad} \text{ kr}$$

 $66 - 35 = \underline{\quad} \text{ kr}$	  $59 - 55 = \underline{\quad} \text{ kr}$
--	---

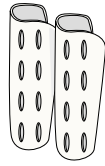
  $67 - 23 = \underline{\quad} \text{ kr}$	  $35 - 13 = \underline{\quad} \text{ kr}$
--	---

[·] Man jeene aajmojne?

Dov leah:



Datne aastah:



$$46 - 35 = \underline{\quad\quad} \text{ kr}$$

Dov leah:



Datne aastah:



$$\underline{\quad\quad} - \underline{\quad\quad} = \underline{\quad\quad} \text{ kr}$$

Dov leah:



Datne aastah:



$$\underline{\quad\quad} - \underline{\quad\quad} = \underline{\quad\quad} \text{ kr}$$

Dov leah:



Datne aastah:



$$\underline{\quad\quad} - \underline{\quad\quad} = \underline{\quad\quad} \text{ kr}$$

[··] Ryöknedh.

$$45 - 23 = \underline{\quad\quad}$$

$$73 - 63 = \underline{\quad\quad}$$

$$84 - 51 = \underline{\quad\quad}$$

$$94 - 63 = \underline{\quad\quad}$$

$$62 - 51 = \underline{\quad\quad}$$

$$47 - 35 = \underline{\quad\quad}$$

$$28 - 13 = \underline{\quad\quad}$$

$$77 - 35 = \underline{\quad\quad}$$

$$94 - 23 = \underline{\quad\quad}$$

$$86 - 55 = \underline{\quad\quad}$$

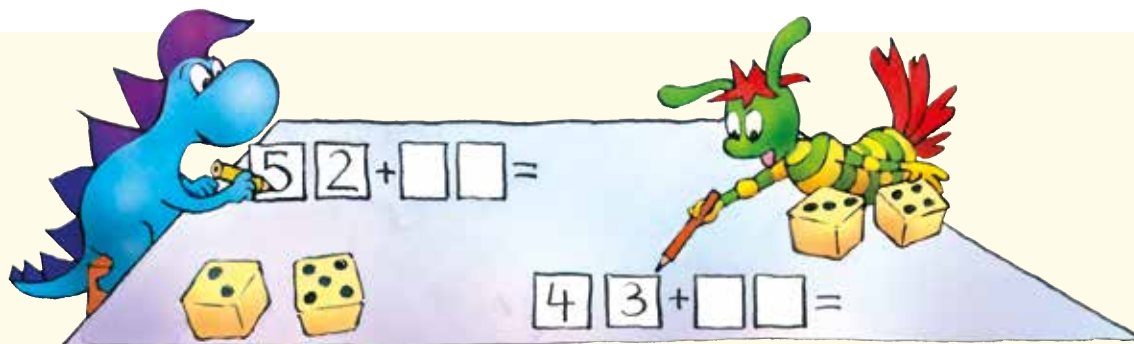
$$65 - 13 = \underline{\quad\quad}$$

$$87 - 35 = \underline{\quad\quad}$$

$$72 - 51 = \underline{\quad\quad}$$

$$95 - 63 = \underline{\quad\quad}$$

[·] SPIELE: Dichte stööremes tjäenghie vitnie.



$$\square \square + \square \square = \underline{\hspace{2cm}}$$

$$\square \square + \square \square = \underline{\hspace{2cm}}$$

$$\square \square + \square \square = \underline{\hspace{2cm}}$$

$$\square \square + \square \square = \underline{\hspace{2cm}}$$

$$\square \square + \square \square = \underline{\hspace{2cm}}$$

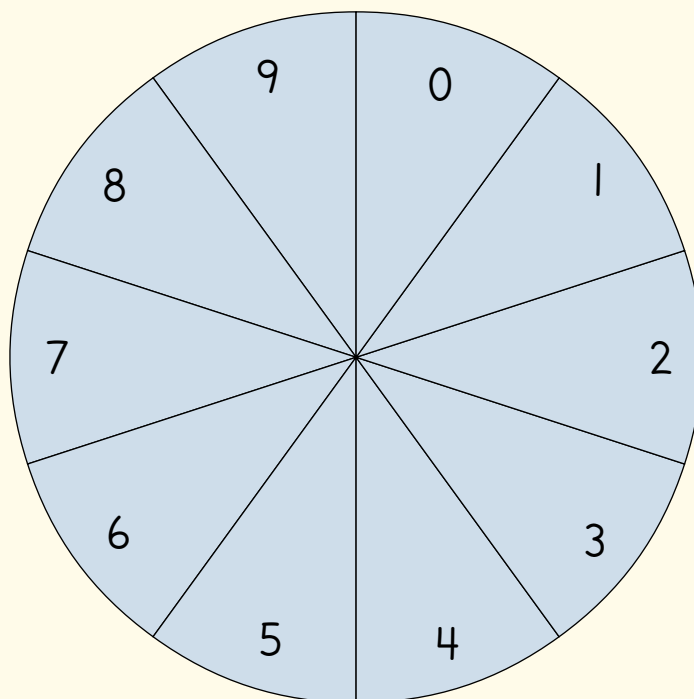
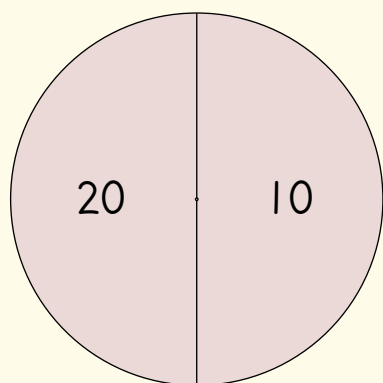
SPIELE-NJOELKEDASSH

Tjetskiah göökte tjelmie-skaavhtegh. Dam maam tjelmieh vuesiehtieh dichte voestes göökte-siffere taale sjædta. Vuesiehtimmiën gaavhtan sjædta ☹️ 😊 53 jallh 35. Veeljh jijtje mij edtja lähkegh jih aktegh årroddh. Tjetskiah tjelmie-skaavhtegidie ikth vielien aejkien jih dam mubpiem göökte-siffere taalem åadtjoeh. Biejh taalide tjäanghan. Dan giën stööremes tjäenghie vitnie. Tjäenghie mahta stuerebe taaleste 100 sjidtedh!

[·] SPIELE: Voestemes taalese 0

SPIELE-NJOELKEDASSH

Spealadidie gööktesh jallh golmesh. Fiere guhte aalka 100 tjäegkiej-gujmie. Järrehth dejtie göökte bastide fiere guhten vâaroen mietie jih biejh illeldahkem tjâanghkan akten taalese gaskem 10 jih 29. Tramhkelh taalem gaajkhk tjäegkijste. Dîhte gie voestemes sov tjäegkide dassa, vitneme.



Ryöknedh daesnie:

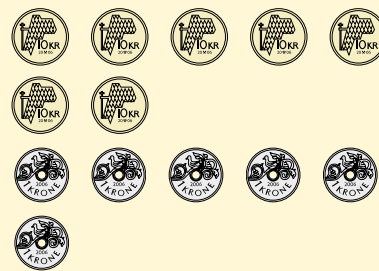
☐ Man gellie krávnah?



_____ kr



_____ kr



_____ kr

☐☐ Njulhtjh taaline 10 fierhten váarosne.

10 20 30 _____

85 75 65 _____

☐☐ Ryöknedh.

$$24 + 32 = \underline{\hspace{2cm}}$$

$$36 - 8 = \underline{\hspace{2cm}}$$

$$63 - 19 = \underline{\hspace{2cm}}$$

• Man gellie krávnah ektesne?



_____ kr

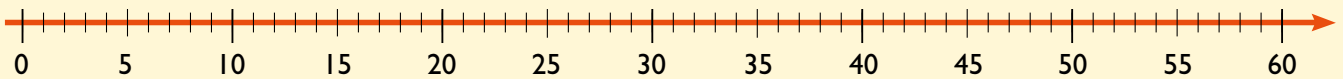
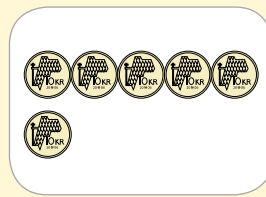




_____ kr



_____ kr

•• Guvvedh sievem taale-sievese.



•• Ryöknedh.

$20 + 30 = \underline{\hspace{2cm}}$

$40 + 40 = \underline{\hspace{2cm}}$

$80 - 30 = \underline{\hspace{2cm}}$

$60 + 30 = \underline{\hspace{2cm}}$

$50 - 20 = \underline{\hspace{2cm}}$

$70 - 50 = \underline{\hspace{2cm}}$

••• Ryöknedh.

$19 + 5 = \underline{\hspace{2cm}}$

$68 + 4 = \underline{\hspace{2cm}}$

$32 - 6 = \underline{\hspace{2cm}}$

$36 + 7 = \underline{\hspace{2cm}}$

$57 + 9 = \underline{\hspace{2cm}}$

$50 - 5 = \underline{\hspace{2cm}}$

▣ Ryöknedh gáaroes taale-sievese. Tjælieh vaastoem.

47

$$47 + 8 = \underline{\quad}$$

$$33 + 19 = \underline{\quad}$$

$$25 + 67 = \underline{\quad}$$

$$83 - 50 = \underline{\quad}$$

$$42 - 18 = \underline{\quad}$$

$$64 - 45 = \underline{\quad}$$

- Erik 60 kr gaajhkh stääkegaevniej ävteste maaksa. Akte bijle 20 kr maaksa. Man dovres akte tjengkere?



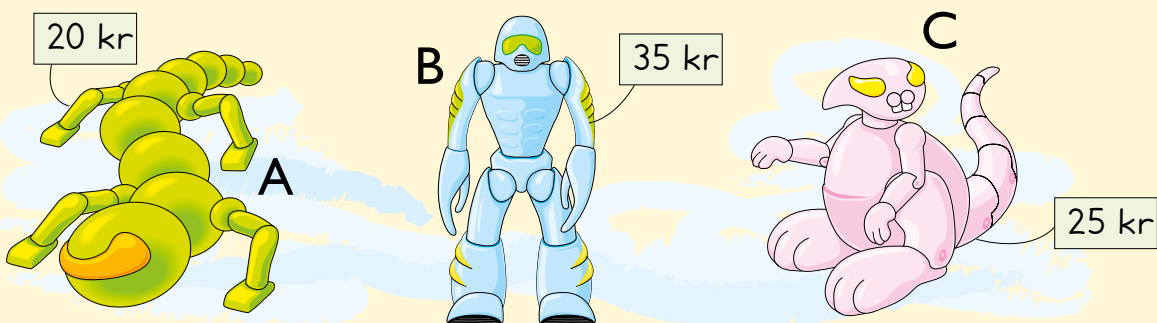
_____ kr

- Tone 60 kr gaajhkh stääkegaevniej ävteste maaksa. Akte dåahka 10 kråvnaah maaksa. Man dovres dåahka-våågne?



_____ kr

- Imad sæjhta robovth 70 kråvnaj ävteste åestedh. Magkerh robovth maahtha åestedh?



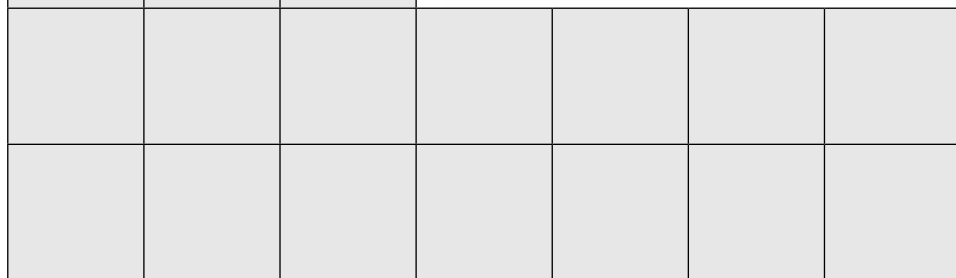
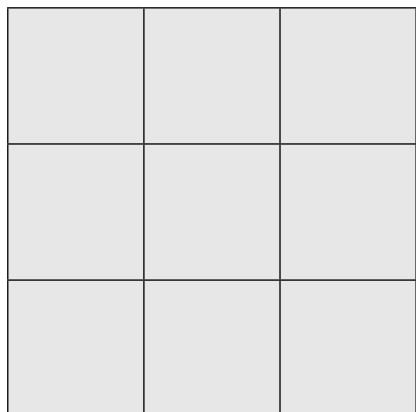
II AREAAL



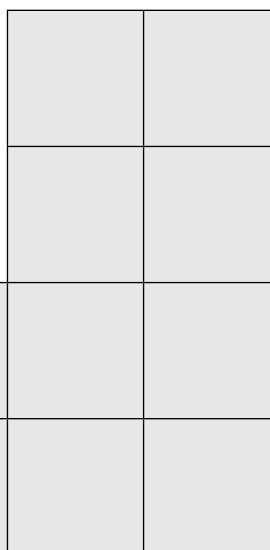
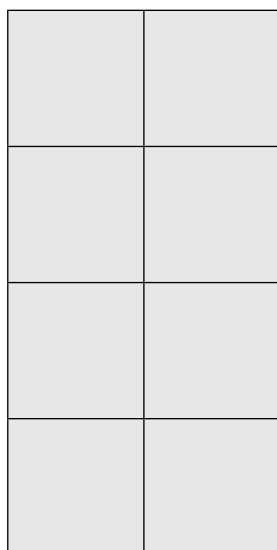
[.] Gie jeenemes laanth 10 tjatskoej mænngan äädtje.



[.] Man stoere dihte terasse?



_____ rovth

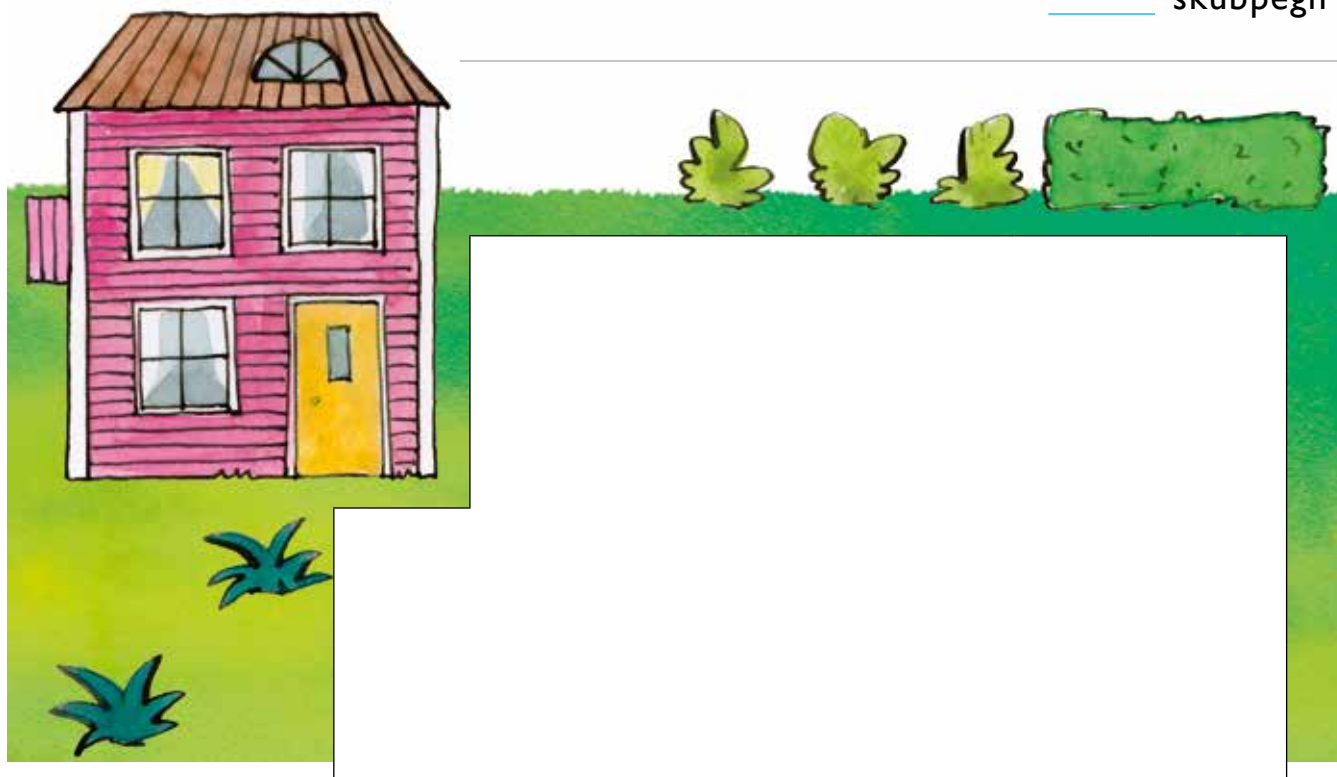


_____ rovth

[·] Mij terasside stööremes? Mïetesth skubpeginie.





_____ skubpegh




_____ skubpegh

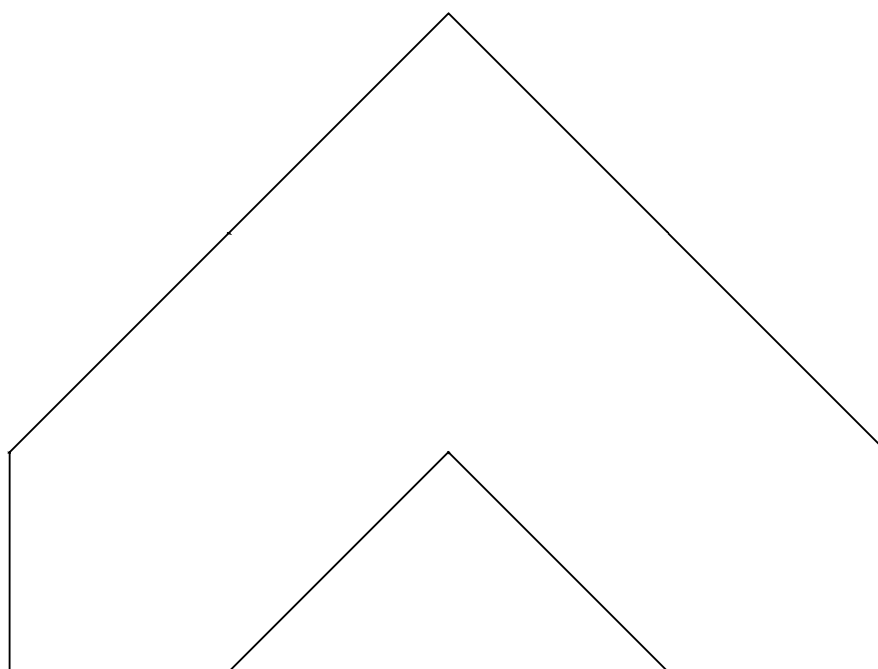
[·] Mïetesth dagkarinie golmen-borteginie.
Man gellie fierhten haaman tjaakanieh?



_____ golmen-bortegh




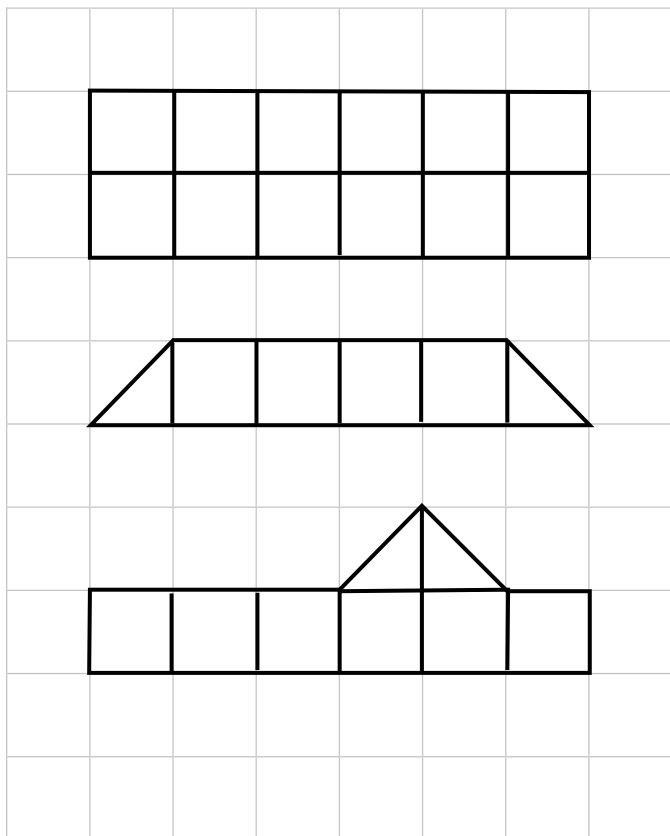
_____ golmen-bortegh




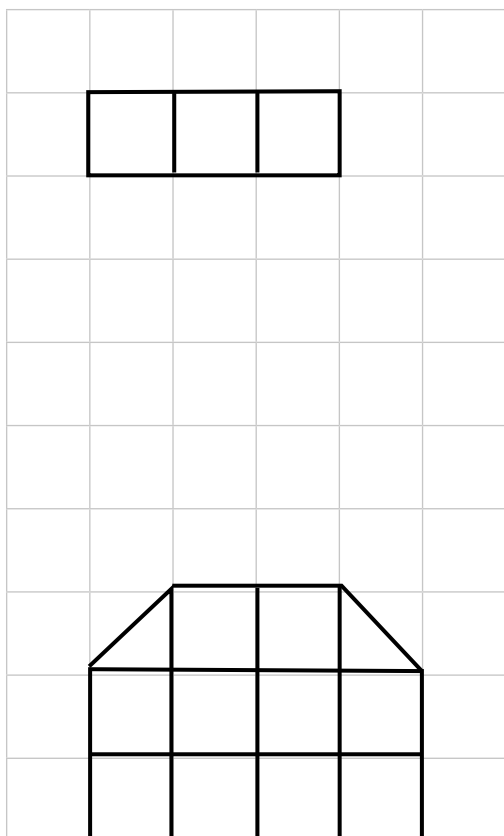
_____ golmen-bortegh

[·] Guvvedh haemieh gusnie areaale lehkje.

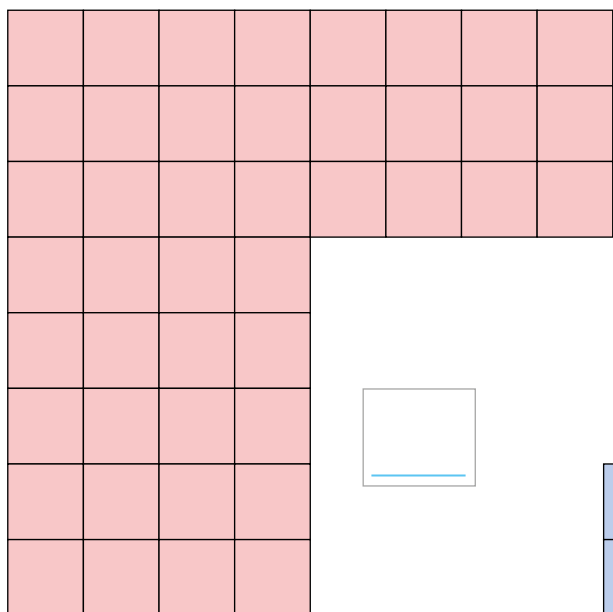
Hammoem
jijtje veeljh.

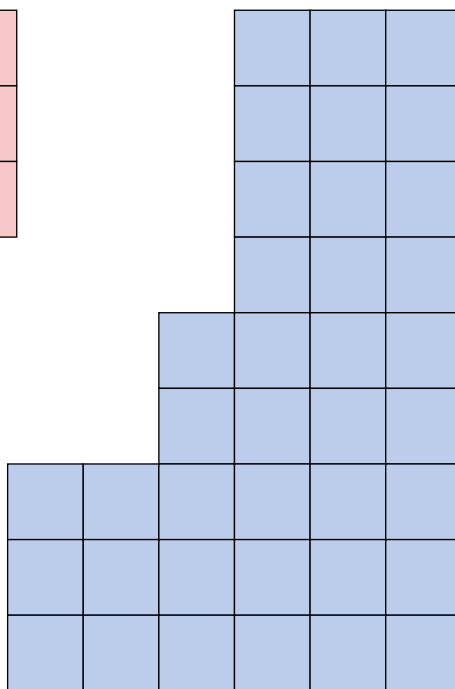


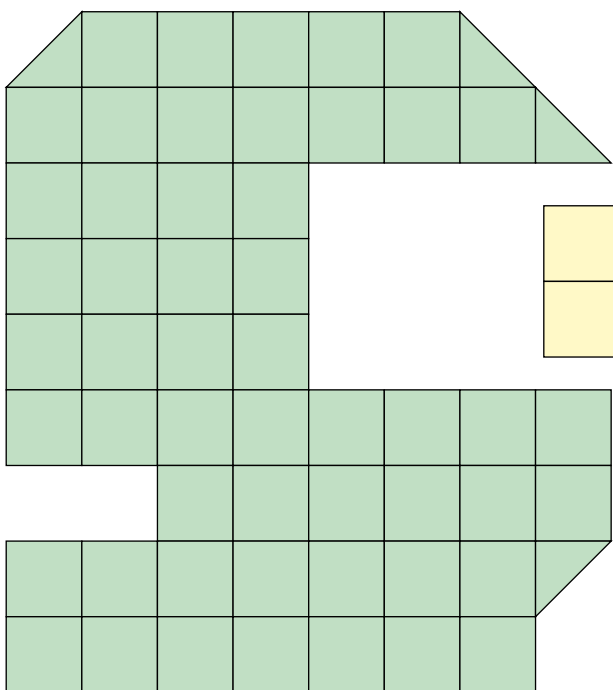
[··] Guvvedh haemieh gusnie areaale guektien giertth stuerebe.

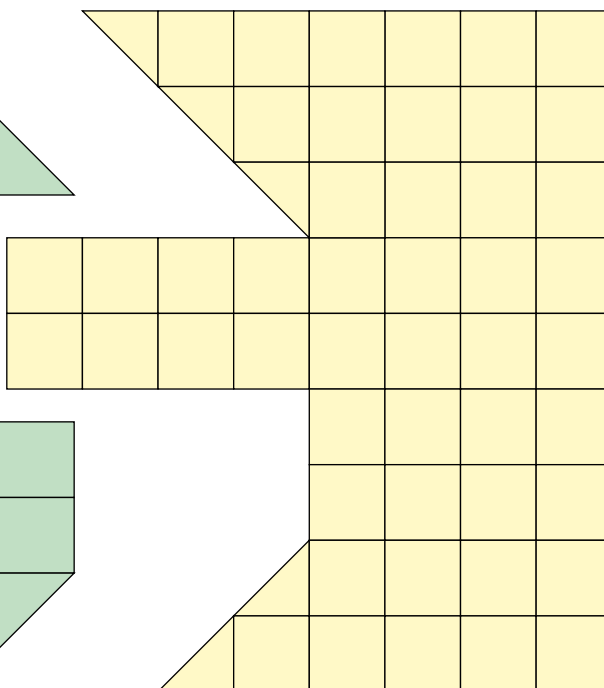


[·] Mij areaalide stööremes? Viertesth dejtie göökte rovhte-
viermide jih biejh kroessem dan stööremes baalte.


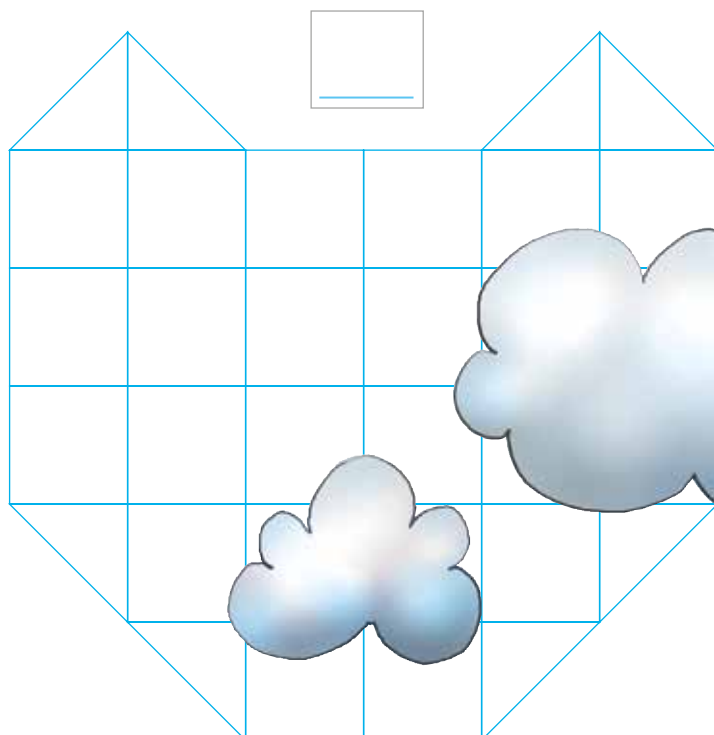

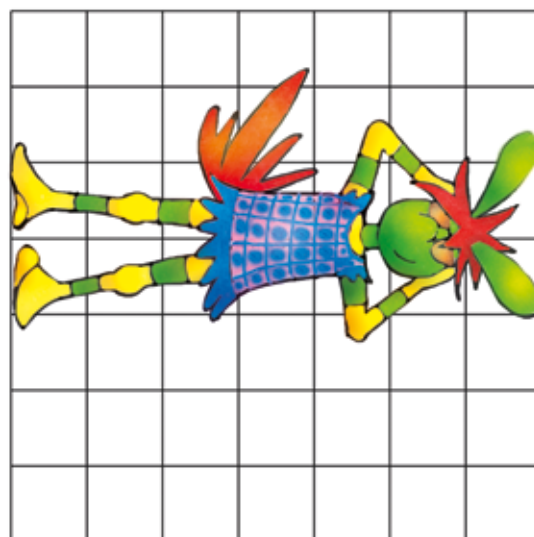










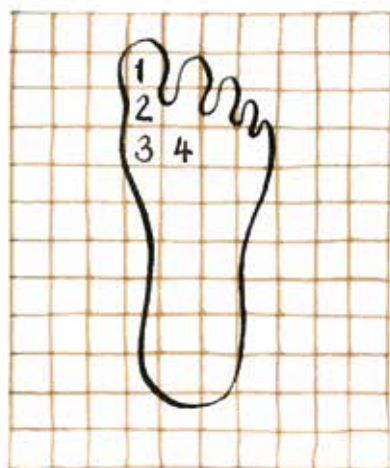
[.] Mij areaalide unnemes? Viertesth dejtie göökte rovhte-
viermide jih biejh kroessem dan unnemes baalte.



[.] Guvvedh dov juelkien ståaroem.



[·] Man gellie rovth dov juelkie?



_____ rovth

[··] Tjaelieh man gellie rovth naan jeatjah learohken juelkie.

Nomme	Man gellie rovth

Nomme	Man gellie rovth

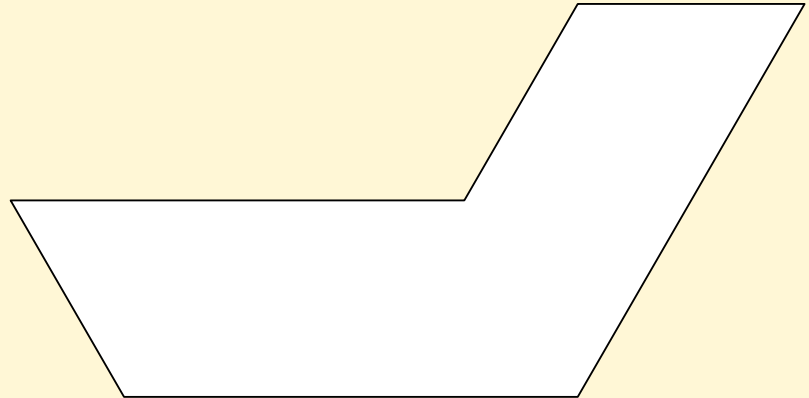
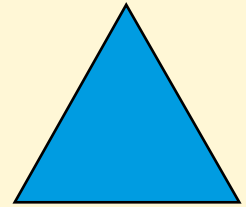


Dihthe stööremes juelkie _____ rovth.



Dihthe unnemes juelkie _____ rovth.

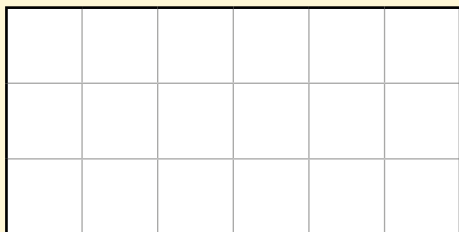
Man gellie golmen-bortegh fierhtene haemesne tjãanghkenieh?




_____ golmen-bortegh

_____ golmen-bortegh

Man stoere dihte rovhte-viermien areaale? Ryöknh rovhtide.



_____ rovhtth





_____ rovhtth

Man stoere dihte rovhte-viermien areaale? Ryöknh rovhtide.

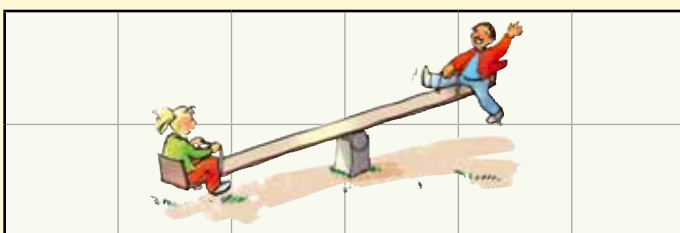



_____ rovht



_____ rovht

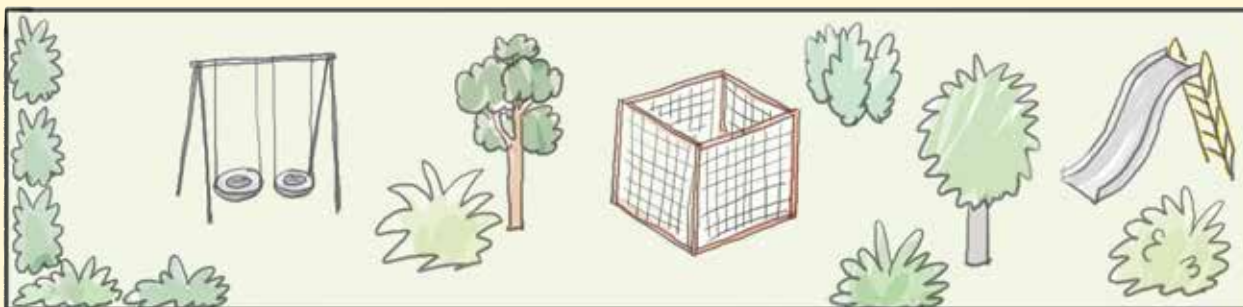
_____ rovht




_____ rovht

_____ rovht

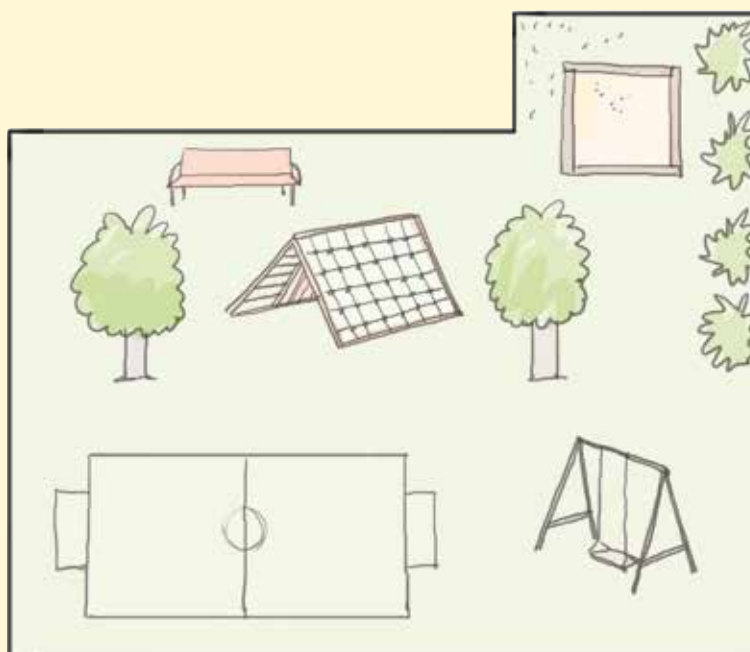
▣ Mïetesth skubpeginie. Mij stâakedimmie-sijjide stööremes?



_____ skubpegh




_____ skubpegh




_____ skubpegh

Man gellie rovtht dinosauri duekesne tjiekedamme?




_____ rovtht



_____ rovtht

12 RYÖKNEDIDH



Njaalke-jovkemes 15 kr
Sohkerespinn 15 kr
Popkorn 20 kr
Tjaste 10 kr

TIVOLIJA

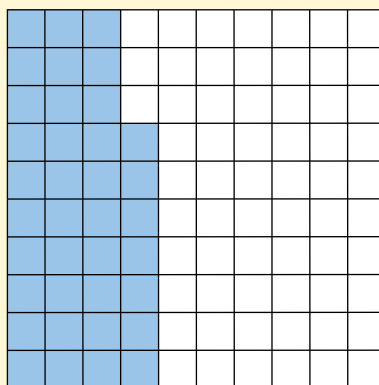
BIETSKIEDIMMIE-KÅARHTH DUEKIEH

	GEERVE ALMETJH	MAANAH
5 minnemh	100 kr	50kr
10 minnemh	160 kr	80 kr
Abpe biejiem	200 kr	


1. PREMJE 50 TJÆEGKIEH
2. PREMJE 40 TJÆEGKIEH
3. PREMJE 30 TJÆEGKIEH
5 njoelh 10 Kr

RIJREDH
3kr


37




[.] Guvvedh l hkegh j h aktegh.



24

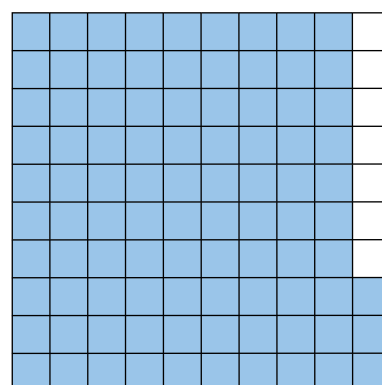
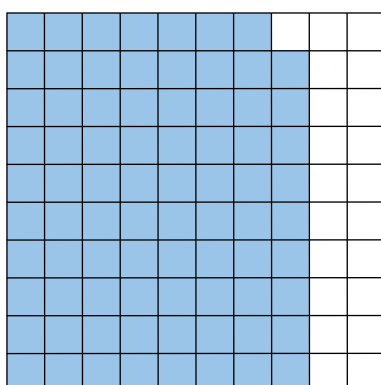
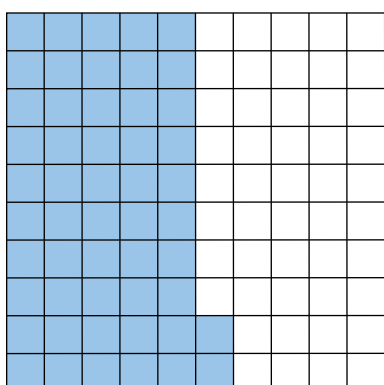


17

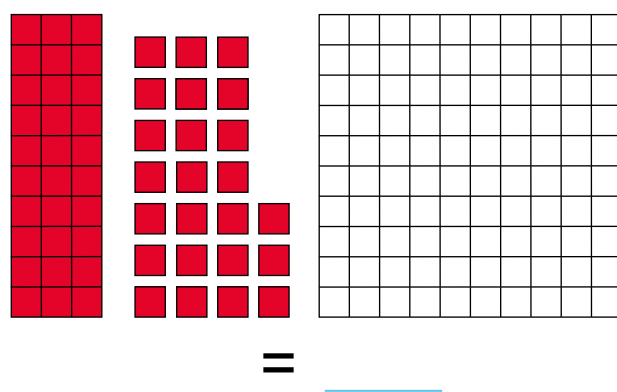
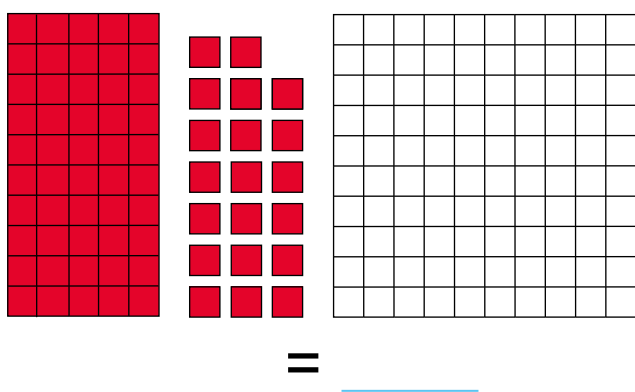
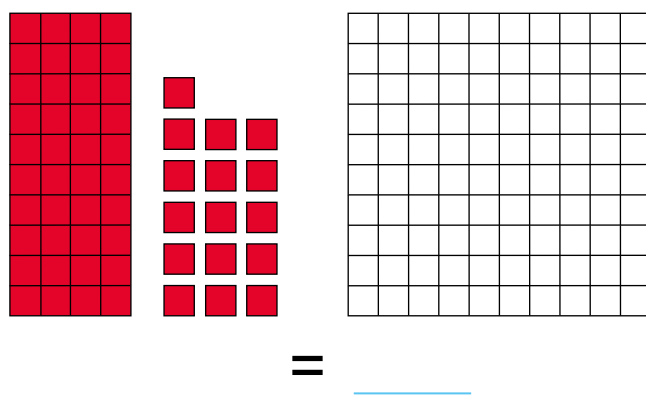
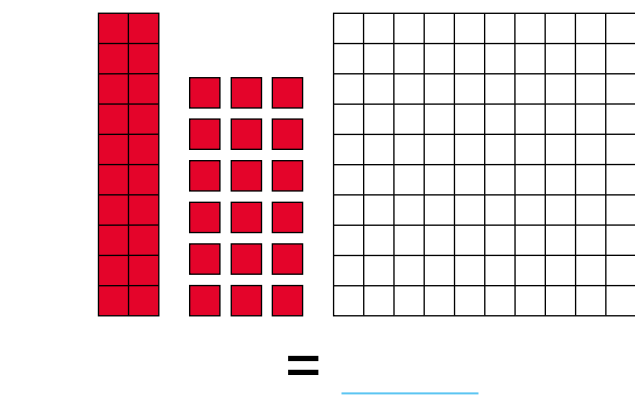
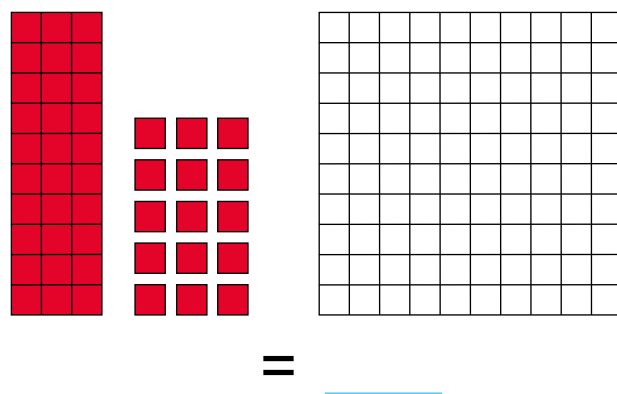




44

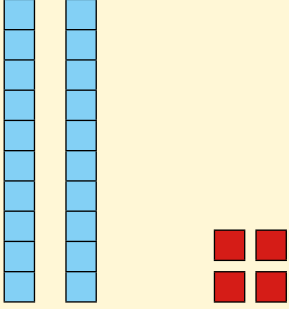
[.] Man gellie l hkegh j h aktegh ektesne?



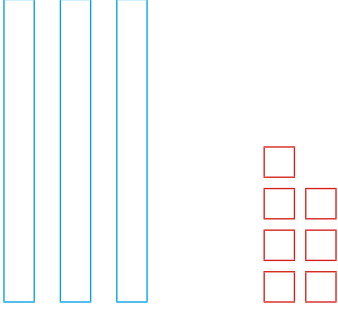
[·] Darjoeh lähkegh.



[·] Man jeene ektesne?



$20 + 4 = \underline{24}$



$30 + 7 = \underline{\quad}$

$20 + 6 = \underline{\quad}$

$40 + 3 = \underline{\quad}$

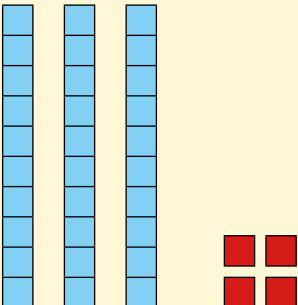
$70 + 9 = \underline{\quad}$

$80 + 7 = \underline{\quad}$

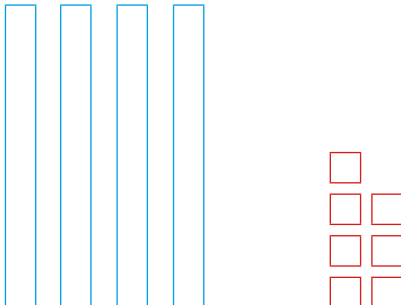
$30 + 5 = \underline{\quad}$

$60 + 8 = \underline{\quad}$

[··] Juekieh lähkegh jih aktegh.

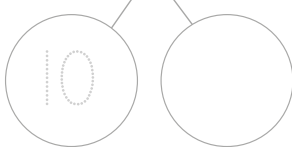


$34 = 30 + 4$

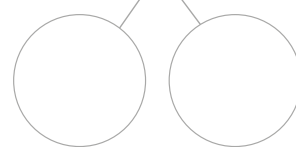


$47 = \underline{\quad} + \underline{\quad}$

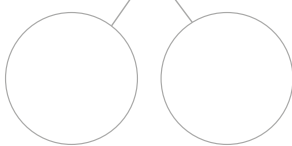
18



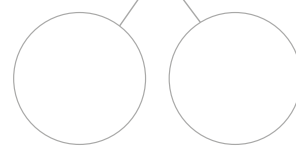
56



62



89



[·] Biejh lähkegh jih aktegh tjäängkan. Ryöknedh.

6 lähkegh ...

... jih 8 aktegh sjidtieh.

42 + 26 = 60 + 8 = 68

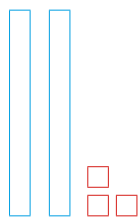
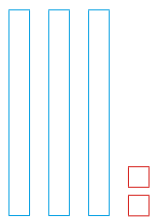
33 + 15 = 40 + 8 = _____

54 + 30 = _____ + _____ = _____


61 + 35 = _____ + _____ = _____

35 + 40 = _____ + _____ = _____


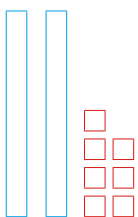
[·] Ryöknedh.



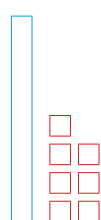

$$32 + 23 = \underline{\quad} + \underline{\quad} = \underline{\quad}$$



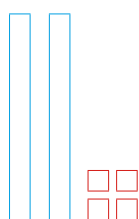

$$12 + 12 = \underline{\quad} + \underline{\quad} = \underline{\quad}$$



$$27 + 22 = \underline{\quad} + \underline{\quad} = \underline{\quad}$$



$$41 + 17 = \underline{\quad} + \underline{\quad} = \underline{\quad}$$



$$63 + 24 = \underline{\quad} + \underline{\quad} = \underline{\quad}$$

$26 + 13 = 30 + 9 = \underline{39}$

(20) (6) (10) (3)

$14 + 14 = 20 + 8 = \underline{\quad}$

(10) (4) (10) (4)

$32 + 51 = \underline{\quad} + \underline{\quad} = \underline{\quad}$

() () () ()

$45 + 23 = \underline{\quad} + \underline{\quad} = \underline{\quad}$

() () () ()

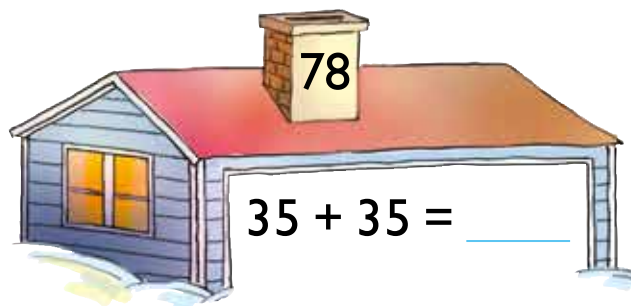
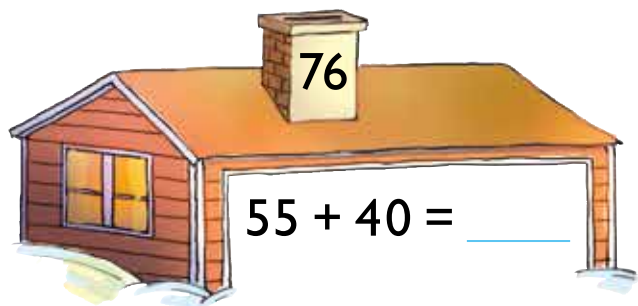
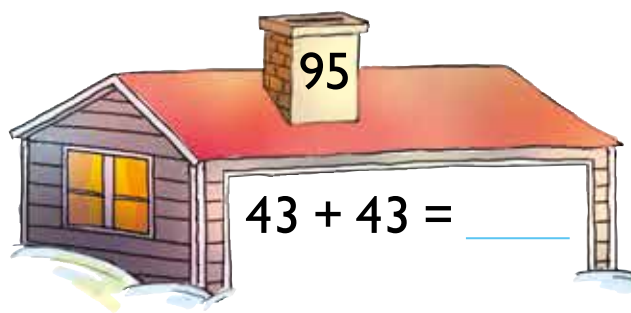
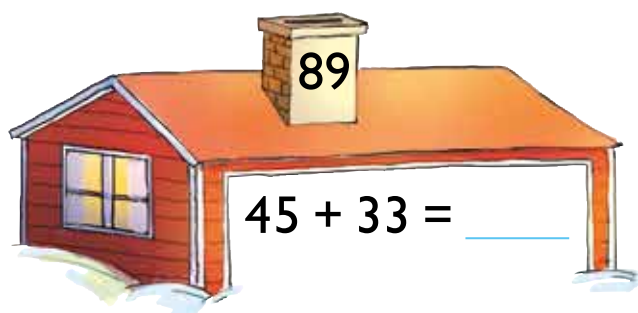
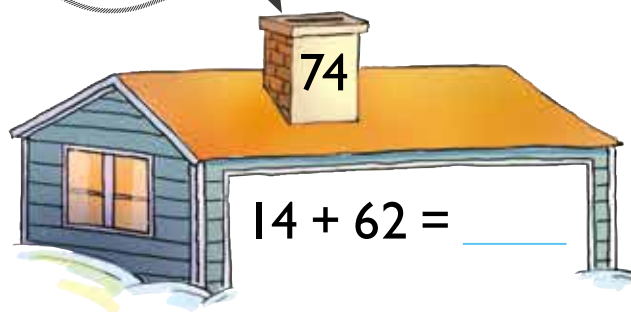
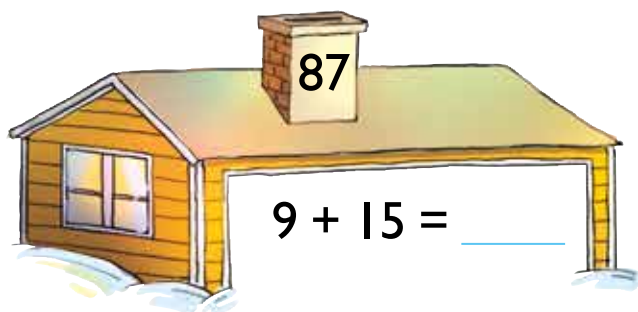
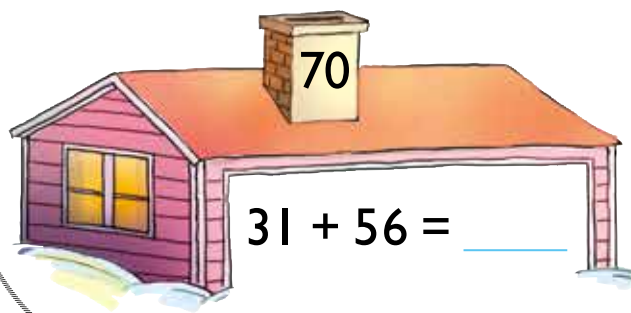
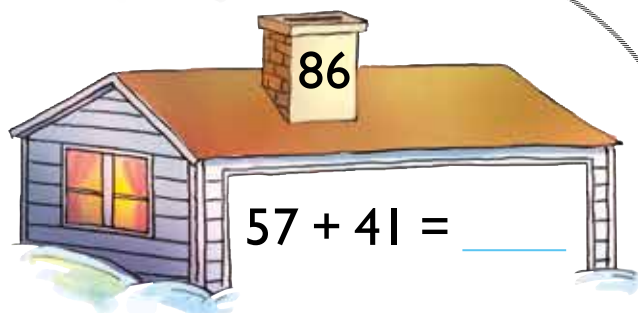
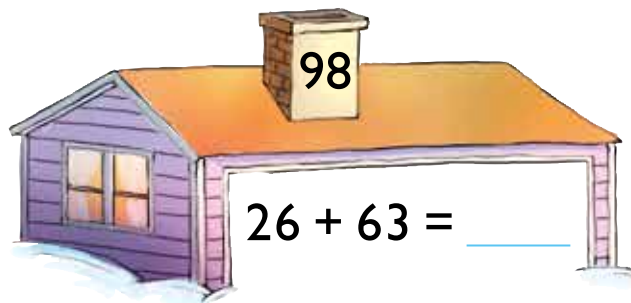
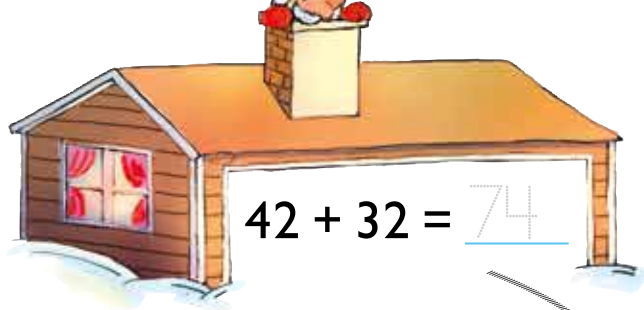
$24 + 72 = \underline{\quad} + \underline{\quad} = \underline{\quad}$

() () () ()

$25 + 40 = \underline{\quad} + \underline{\quad} = \underline{\quad}$

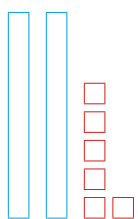
() () () ()

[.] Ryöknedh jih gaavnh guktie jävle-aajja fieleste.



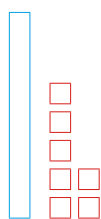


[·] Ryöknedh.



26

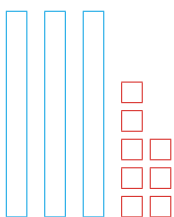
+



17

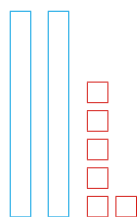
=

= _____



38

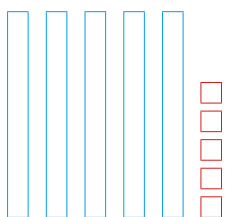
+



26

=

= _____



55

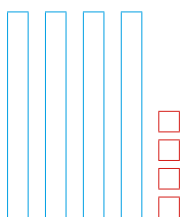
+



9

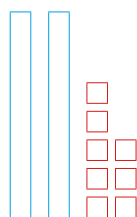
=

= _____



44

+



28

=

= _____

[·] Ryöknedh.

$$\begin{array}{c}
 56 \\
 \swarrow \quad \searrow \\
 \textcircled{50} \quad \textcircled{6}
 \end{array}
 +
 \begin{array}{c}
 28 \\
 \swarrow \quad \searrow \\
 \textcircled{20} \quad \textcircled{8}
 \end{array}
 =
 70 + 14 = \underline{84}$$

$$\begin{array}{c}
 38 \\
 \swarrow \quad \searrow \\
 \textcircled{\quad} \quad \textcircled{\quad}
 \end{array}
 +
 \begin{array}{c}
 15 \\
 \swarrow \quad \searrow \\
 \textcircled{\quad} \quad \textcircled{\quad}
 \end{array}
 =
 \underline{\quad} + \underline{\quad} = \underline{\quad}$$

$$\begin{array}{c}
 24 \\
 \swarrow \quad \searrow \\
 \textcircled{\quad} \quad \textcircled{\quad}
 \end{array}
 +
 \begin{array}{c}
 29 \\
 \swarrow \quad \searrow \\
 \textcircled{\quad} \quad \textcircled{\quad}
 \end{array}
 =
 \underline{\quad} + \underline{\quad} = \underline{\quad}$$

$$\begin{array}{c}
 67 \\
 \swarrow \quad \searrow \\
 \textcircled{\quad} \quad \textcircled{\quad}
 \end{array}
 +
 \begin{array}{c}
 16 \\
 \swarrow \quad \searrow \\
 \textcircled{\quad} \quad \textcircled{\quad}
 \end{array}
 =
 \underline{\quad} + \underline{\quad} = \underline{\quad}$$

$$\begin{array}{c}
 76 \\
 \swarrow \quad \searrow \\
 \textcircled{\quad} \quad \textcircled{\quad}
 \end{array}
 +
 \begin{array}{c}
 8 \\
 \swarrow \quad \searrow \\
 \textcircled{\quad} \quad \textcircled{\quad}
 \end{array}
 =
 \underline{\quad} + \underline{\quad} = \underline{\quad}$$

$$\begin{array}{c}
 39 \\
 \swarrow \quad \searrow \\
 \textcircled{\quad} \quad \textcircled{\quad}
 \end{array}
 +
 \begin{array}{c}
 53 \\
 \swarrow \quad \searrow \\
 \textcircled{\quad} \quad \textcircled{\quad}
 \end{array}
 =
 \underline{\quad} + \underline{\quad} = \underline{\quad}$$



Eddie bovrese mænna.
Dan leah 15 krávnah.
Geajnosne 20 krávnah gaavna.

Man jeenh dellie átna? _____ kr

Gien baaktoe vaadtsa mij aaloem
duaka. Eddie aktem klaasem 7 krávnaj
ávteste áasta.



Man jeenh dellie aajmojne? _____ kr



Dellie aajjem råaka.
Aajjebe 10 krávnah Eddise vadta.

Man jeenh dellie átna? _____ kr

Man jeenh dellie átna? _____ kr

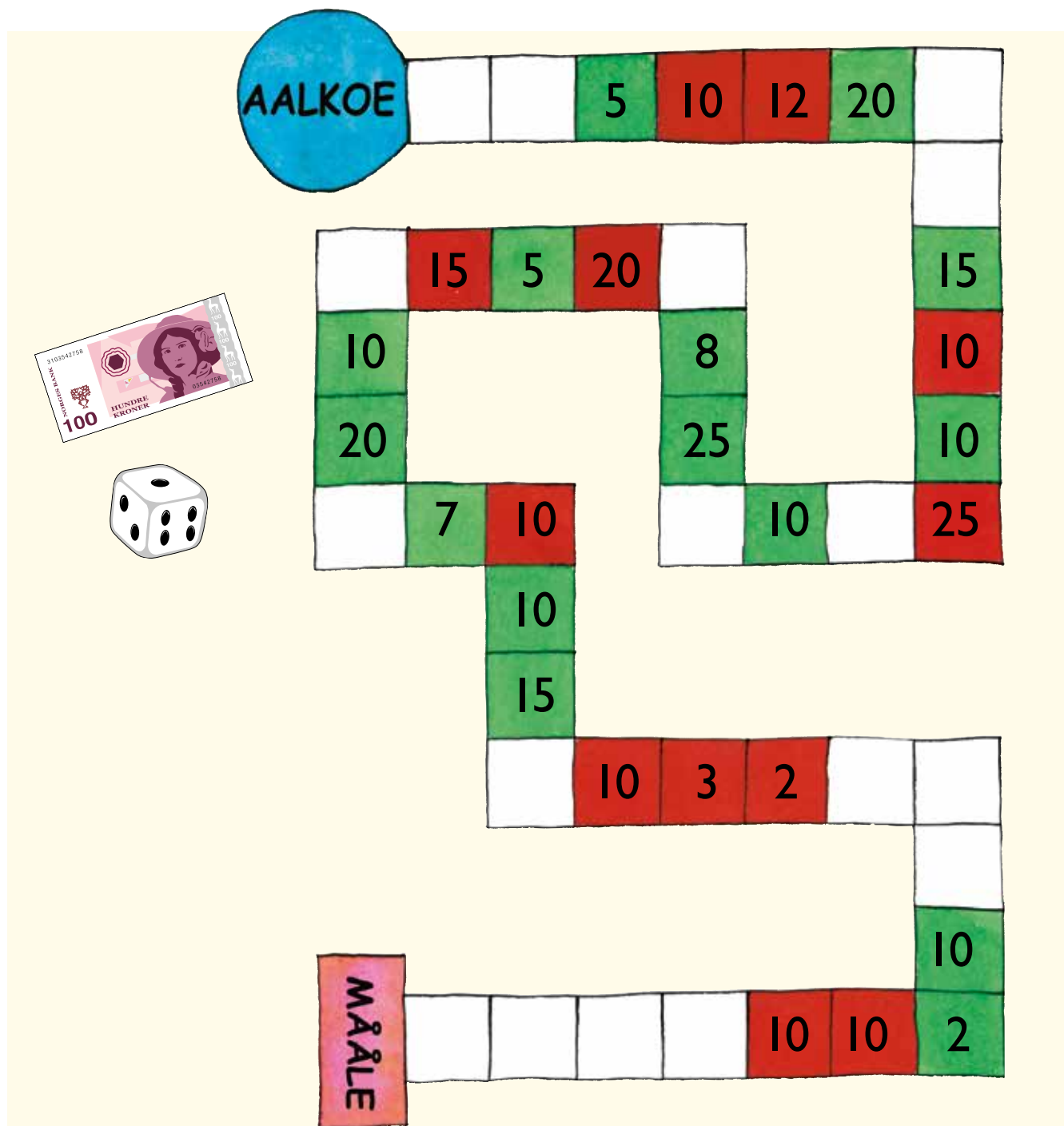


Bovresne Eddie edtja plaeriem ástedh
16 krávnaj ávteste.

Aaj tjastem 10 krávnaj ávteste.

Man jeenh dellie átna? _____ kr

[.] SPIELE: Voestemes määlese

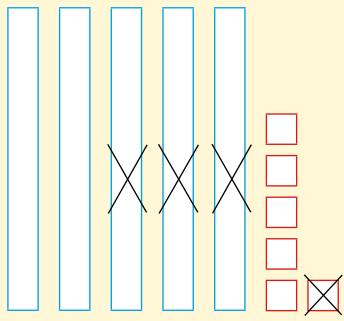


SPIELE-NJOLKEDASSH

Man gellie spielijh: 2.

Fierhten spielije 100 krävnaah äädtje ävtelen AALKOE. Jovhth AALKOE sæjjan biejesuvvieh jih spielijh tjelmie-skaavhtegem tjetskiah fiere guhten váaroen mietie jih jovhtem juhtehte dan gellie rovht guktie tjelmie-skaavhtege vuesehte. Jis jovhte tjöödtjeste ■, dellie beetnegh biejesávva dan beetneh-tjäanghkan maam átna. Jis jovhte tjöödtjeste ■, dellie beetnegh tramhkele dehtie beetneh-tjäanghkeste maam átna. Dan gien jeenemes beetnegh gosse gaajhkesh MÄÅLEM jakseme, vitneme.

[.]



$$56 - 31 = \underline{25}$$

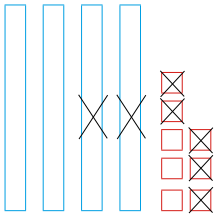
2 lähkegh
sjædta ...



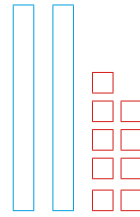
... jïh 5 aktegh.



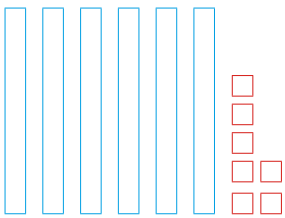
[.] Ryöknedh.



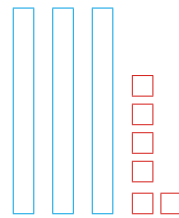
$$48 - 25 = \underline{\quad}$$




$$29 - 4 = \underline{\quad}$$




$$67 - 13 = \underline{\quad}$$



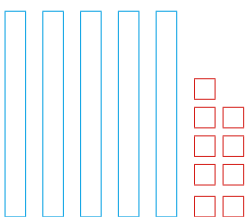
$$36 - 5 = \underline{\quad}$$




$$75 - 41 = \underline{\quad}$$



$$97 - 17 = \underline{\quad}$$

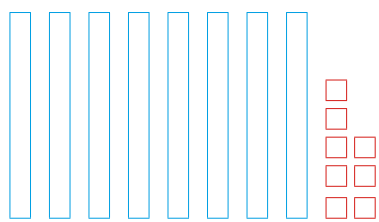


$$59 - 47 = \underline{\quad}$$

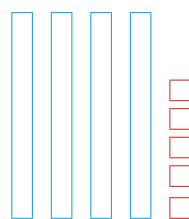


$$84 - 30 = \underline{\quad}$$


[·] Ryöknedh.



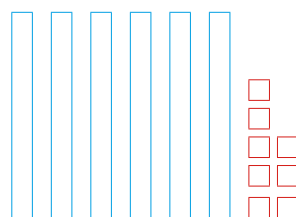
$$88 - 60 = \underline{\hspace{2cm}}$$



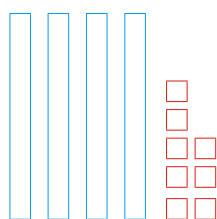
$$45 - 31 = \underline{\hspace{2cm}}$$




$$79 - 7 = \underline{\hspace{2cm}}$$



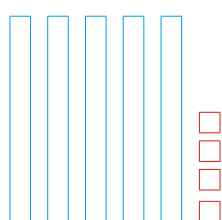
$$68 - 34 = \underline{\hspace{2cm}}$$




$$48 - 17 = \underline{\hspace{2cm}}$$



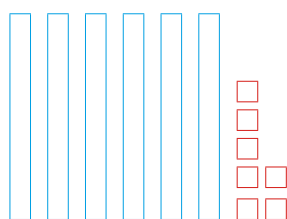
$$76 - 55 = \underline{\hspace{2cm}}$$



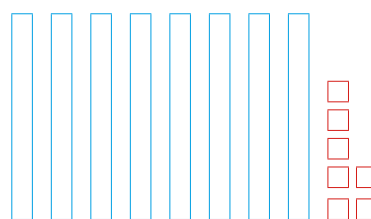
$$54 - 14 = \underline{\hspace{2cm}}$$



$$99 - 22 = \underline{\hspace{2cm}}$$

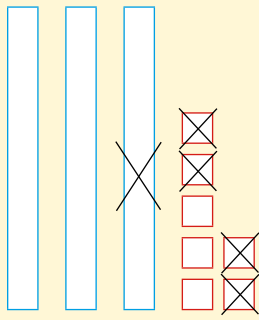


$$67 - 61 = \underline{\hspace{2cm}}$$



$$87 - 76 = \underline{\hspace{2cm}}$$

[·]



$$\begin{array}{r}
 37 \\
 - 14 \\
 \hline
 23
 \end{array}$$

The number 37 is decomposed into a circle containing 30 and a circle containing 7. The number 14 is decomposed into a circle containing 10 and a circle containing 4. The result 23 is underlined.

[·] Ryöknedh.

$$\begin{array}{r}
 45 \\
 - 21 \\
 \hline
 \end{array}$$

The number 45 is decomposed into two circles: one containing 40 and one containing 5. The number 21 is decomposed into two circles: one containing 20 and one containing 1.

$$\begin{array}{r}
 66 \\
 - 34 \\
 \hline
 \end{array}$$

The number 66 is decomposed into two circles: one containing 60 and one containing 6. The number 34 is decomposed into two circles: one containing 30 and one containing 4.

$$\begin{array}{r}
 58 \\
 - 16 \\
 \hline
 \end{array}$$

The number 58 is decomposed into two circles: one containing 50 and one containing 8. The number 16 is decomposed into two circles: one containing 10 and one containing 6.

$$\begin{array}{r}
 49 \\
 - 12 \\
 \hline
 \end{array}$$

The number 49 is decomposed into two circles: one containing 40 and one containing 9. The number 12 is decomposed into two circles: one containing 10 and one containing 2.

$$\begin{array}{r}
 87 \\
 - 53 \\
 \hline
 \end{array}$$

The number 87 is decomposed into two circles: one containing 80 and one containing 7. The number 53 is decomposed into two circles: one containing 50 and one containing 3.

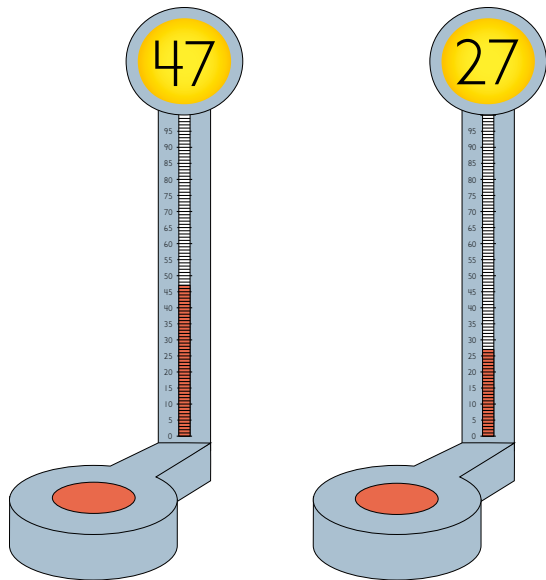
[·] Mij joekehtasse?

Manne taalese 33 jaksim.

Manne taalese 75 jaksim.

$75 - 33 = 42$

100



$$47 - 27 = \underline{\quad}$$

$$39 - 32 = \underline{\quad}$$

$$56 - 50 = \underline{\quad}$$

$$60 - 5 = \underline{\quad}$$

$$81 - 11 = \underline{\quad}$$

$$33 - 22 = \underline{\quad}$$

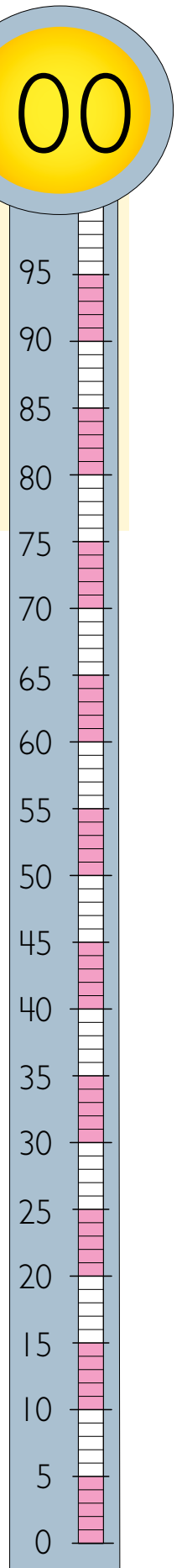
$$25 - 18 = \underline{\quad}$$

$$43 - 30 = \underline{\quad}$$


$$70 - 9 = \underline{\quad}$$

$$40 - 15 = \underline{\quad}$$

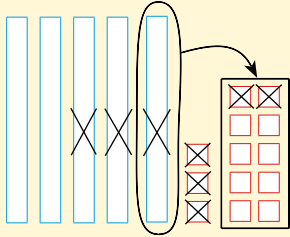
$$52 - 21 = \underline{\quad}$$



[·] Ryöknedh 53 – 25.



Daesnie barre 3 aktegh. Ibie dellie maehtieh 5 destie tramhkelidh!



Manne aktem lähkegem 10 aktagidie tsööpkiem. Dellie maahtam 5 aktegh jäh 2 lähkegh sliejhtedh.



$$53 - 25 = \underline{28}$$

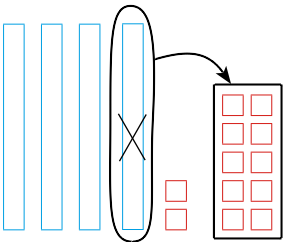
40 13 20 5

$$53 - 25 = \underline{28}$$

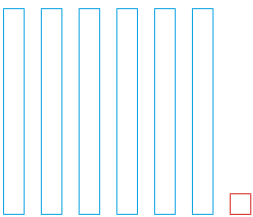


Manne taalem 53 taalide 40 jäh 13 juakam. Dellie maahtam ryöknedh $13 - 5 = 8$

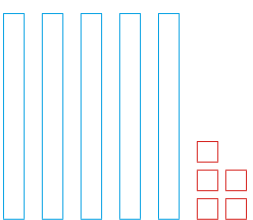
[·] Ryöknedh.



$$42 - 16 = \underline{\hspace{2cm}}$$

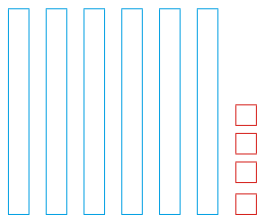


$$61 - 24 = \underline{\hspace{2cm}}$$

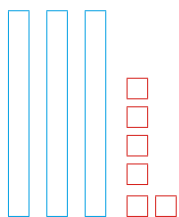


$$55 - 47 = \underline{\hspace{2cm}}$$


[·] Ryöknedh.




$$64 - 19 = \underline{\hspace{2cm}}$$




$$36 - 27 = \underline{\hspace{2cm}}$$



$$81 - 38 = \underline{\hspace{2cm}}$$



$$73 - 55 = \underline{\hspace{2cm}}$$



$$45 - 39 = \underline{\hspace{2cm}}$$

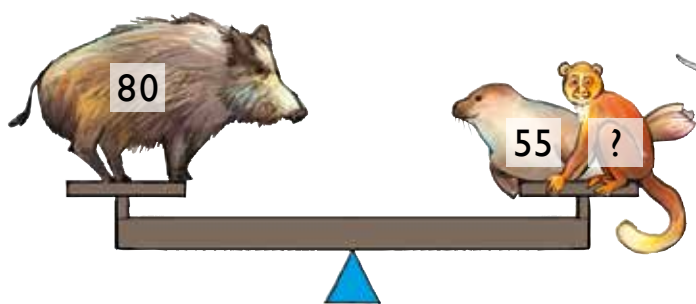
Ryöknedh. Moenedimmie:
Gåessie juelkietjengkere-guejmie
moeren bijjelen haeliehti?



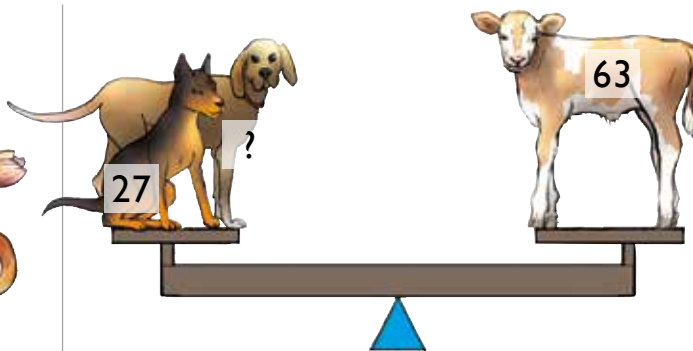
$45 - 13 = 32$	D 23	T 32	F 21	E 33	T
$53 - 29 = \underline{\hspace{2cm}}$	E 36	J 23	S 24	R 14	<u> </u>
$65 - 47 = \underline{\hspace{2cm}}$	Å 18	E 19	M 22	U 28	<u> </u>
$42 - 15 = \underline{\hspace{2cm}}$	S 17	R 33	T 25	A 27	<u> </u>
$93 - 61 = \underline{\hspace{2cm}}$	E 28	T 30	H 32	J 34	<u> </u>
$72 - 46 = \underline{\hspace{2cm}}$	U 34	K 26	I 36	N 28	<u> </u>
$54 - 27 = \underline{\hspace{2cm}}$	E 17	T 33	S 23	A 27	<u> </u>

$81 - 49 = \underline{\hspace{2cm}}$	A 38	G 32	R 31	T 42	<u> </u>
$96 - 17 = \underline{\hspace{2cm}}$	K 81	I 76	N 71	O 79	<u> </u>
$80 - 34 = \underline{\hspace{2cm}}$	V 46	K 44	E 54	N 56	<u> </u>
$63 - 52 = \underline{\hspace{2cm}}$	S 9	B 10	M 21	H 11	<u> </u>
$90 - 69 = \underline{\hspace{2cm}}$	Å 29	T 21	U 39	E 31	<u> </u>
$100 - 33 = \underline{\hspace{2cm}}$	R 77	G 63	E 67	L 73	<u> </u>

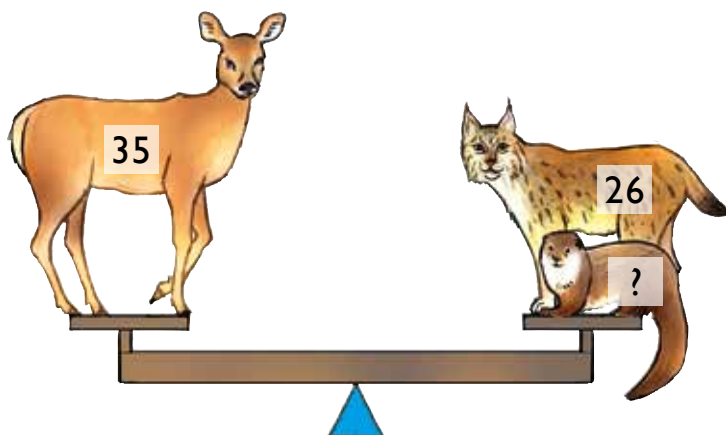
[·] Man lyövlehke dah dyjrh?



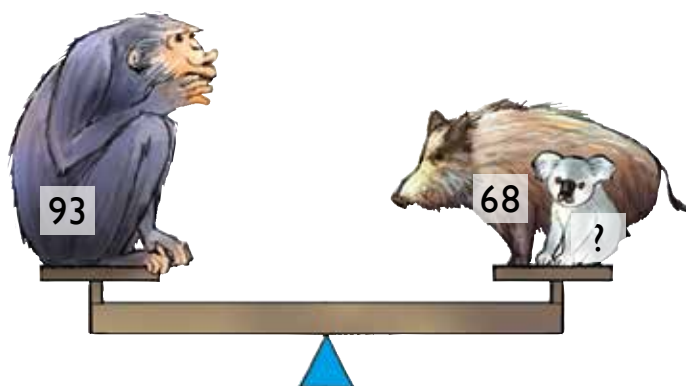
$$80 = 55 + \underline{\quad}$$



$$27 + \underline{\quad} = 63$$




$$35 = \underline{\quad} + 26$$



$$93 = 68 + \underline{\quad}$$

[··] Man lyövlehke dihte bienje?



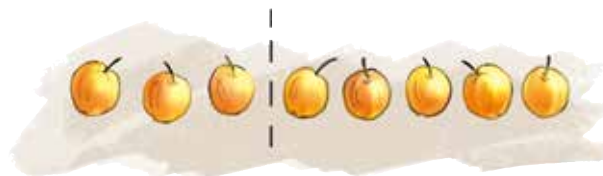
[·] Darjoeh sievem guvvien jñh teksten gaskem mah ektesne.



Pieren leah 8 eahpelh. Læjsa 3 dejstie byöpmede. Man gellie eahpelh Pieren dellie?



Aannan leah 8 eahpelh. Dñhte 5 jeenebh goh Birjen. Man gellie eahpelh Birjen dellie?



Evenen leah 5 eahpelh jñh Eiriken 3 eahpelh. Man gellie ektesne utniejægan?

[·] Tjælieh ryöknedimmie-lahtesh jñh lutnesth lierehtimmiem. Meehten leah 20 juelkietjengkere-käärhth.

8 dejstie dassa. Man gellie aajmojne?


$$20 - 8 = \underline{\hspace{2cm}}$$

Alice 25 stååke-gævnieh borhtjese beaja. Borhtjesne 40 stååke-gævnieh aerebistie. Man gellie stååke-gævnieh borhtjesne daelie?

$$\underline{\hspace{2cm}} = \underline{\hspace{2cm}}$$


[·] Tjælieh ryöknedimmie-lahtesh jïh lutnesth lierehtimmiem.

Ivanen leah 43 krávnah.
Sæjhta stáake-bijlem 51 krávnaj ávteste
ástedh. Man jeenh beetnegh fáåtesieh?




=

Julie 16 ballongh passeste vaalta.
Dellie 28 ballongh passesne aajmojne.
Man gellie ballongh passesne ávteli Julie
muvhth destie veelti?



=

[··] Darjoeh tekste-lierehtimmiem fierhten gávvan.



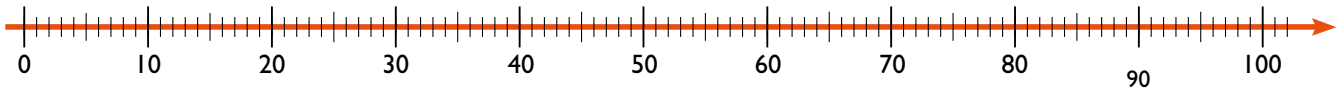
[·] Ryöknedh jih guvvedh sievem taale-sievese.

$25 + 15$

$35 + 35$

$55 + 25$

$75 + 25$



$35 - 25$

$65 - 35$

$75 - 15$

$95 - 25$

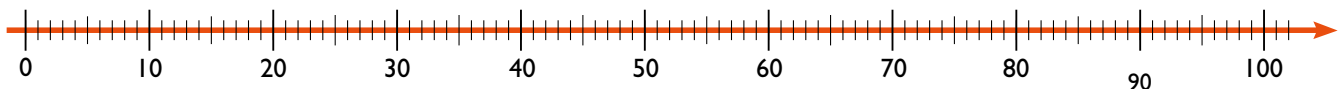
$23 + 20$

$45 + 13$

$39 + 30$

$59 + 21$

$74 + 25$



$24 - 10$

$36 - 16$

$75 - 55$

$73 - 23$

$100 - 23$

[·] SPIELE: Göökte-siffere taalh

SPIELE-NJOELKEDASSH

Man gellie spielijh: 2-4.

Deerpegh 4 tjelmie-skaavhtegh.

Tjetskieh 4 tjelmie-skaavhtegh fiere-guhten vâaroen mietie. Biejh tjelmie-skaavhtegidie tjâanghkan göökte göökte-siffere taalide.

Gaavnh joekehtassem dej göökte taali gaskem.

Dihte spielije gien unnemes joekehtasse dej

göökte taali gaskem fierhtene vâarosne,
















I tjægkiem âadtje. Dihte gie voestegh 10

tjægkieh âadtje, vitneme.

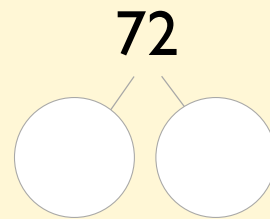
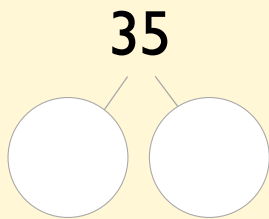
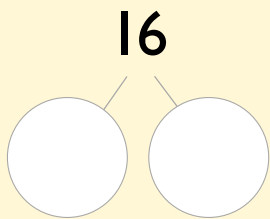
Vuesiehtimmien gaavhtan:



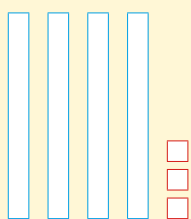
$52 - 46 = 6$

	i			i
i				
				
				
i				
		?		
				

▣ Juekieh lähkagidie jih aktagidie.

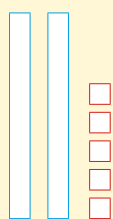


▣ Ryöknedh.



43

+

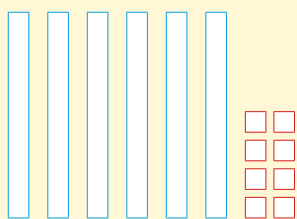


25

=

+

=



68

-

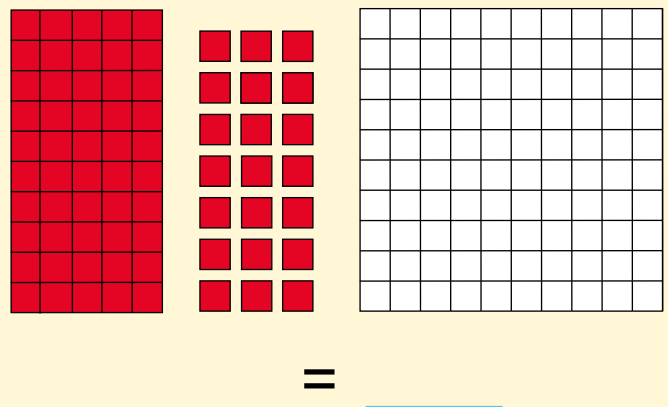
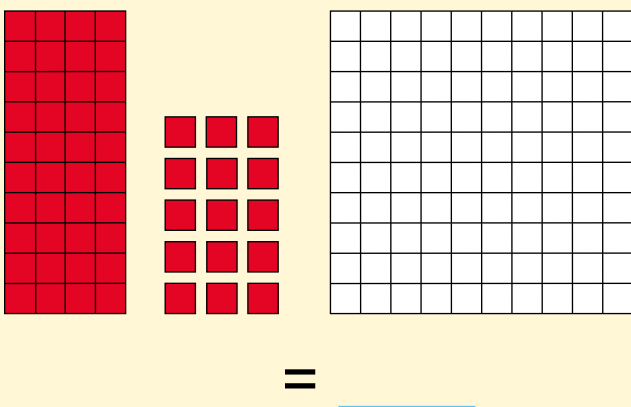
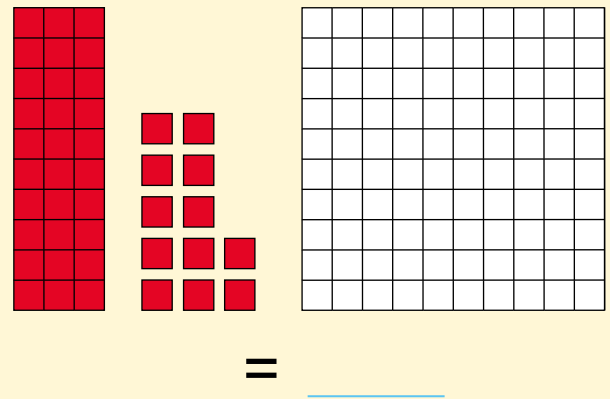
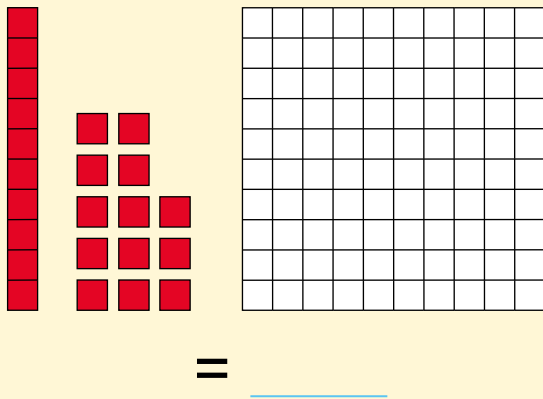
26

=

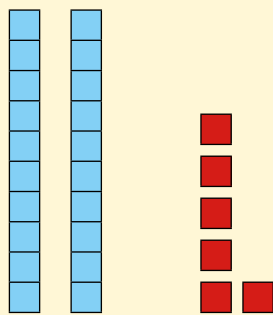
$$37 + 46 = \underline{\hspace{2cm}}$$

$$73 - 45 = \underline{\hspace{2cm}}$$

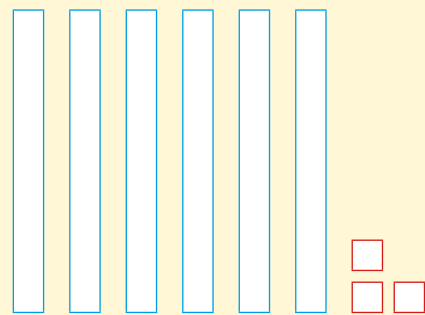
• Darjoeh l hkegh.



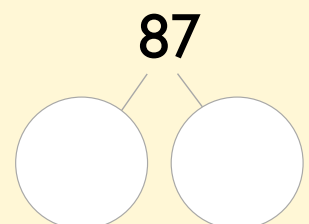
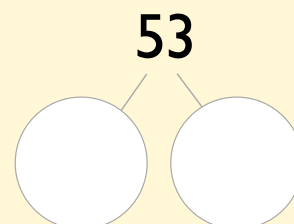
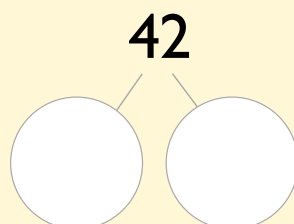
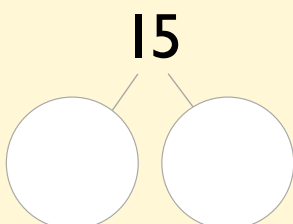
•• Juekieh l hkegi j h aktegi mietie.



26 = _____ + _____



63 = _____ + _____



LIEREHTIMMIEGÆRJA S. 94–99

Ryöknedh.

$24 + 53 = \underline{\hspace{2cm}}$

$47 + 18 = \underline{\hspace{2cm}}$


$58 - 34 = \underline{\hspace{2cm}}$

$81 - 65 = \underline{\hspace{2cm}}$

Tjaelieh ryöknedimmie-lahtesh jäh lutnesth lierehtimmiem.

Nora dåahkam 36 krávnaj ávteste áasta jäh gærjam 51 krávnaj ávteste.

Man jeenem maaksa?



$$\underline{\hspace{2cm}} = \underline{\hspace{2cm}}$$

Ove vadtesem 45 krávnaj ávteste áasta. Dichte stoere-tjuetine maaksa. Man jeenh báástide áádtje?



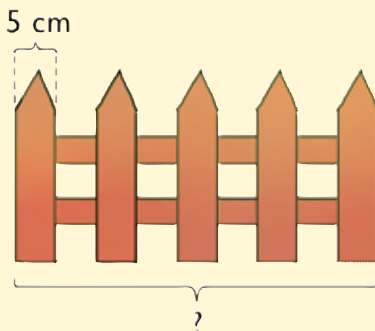
- Lohkh lierehtimmiem jñh gaavnh vaastojde.
 Akten sãafosne 8 bienghkh. Fierhtene bienghkesne
 2 jallh 3 almetjh tjaakanieh. Tjãanghkan 19 almetjh
 bienghkine tjaakanieh. Man gellie bienghkine
 2 almetjh tjaakanigan?




Akten lovhtjesne 10 tsããbph.
 Man gellie juelkieh tsããbph ektesne utnieh?



Daan gierten fealloeh 5 cm gamte.
 Gãhkoe fierhten fealloen gaskem 5 cm.
 Man guhkie daate gierte?

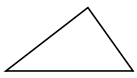




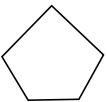
[.] Guvvedh gellien-bortegh jñh gievlie.



Njieljien-bortege



Golmen-bortege




Vijhten-bortege




Gievlieh


[·] Klaeredh haemide.




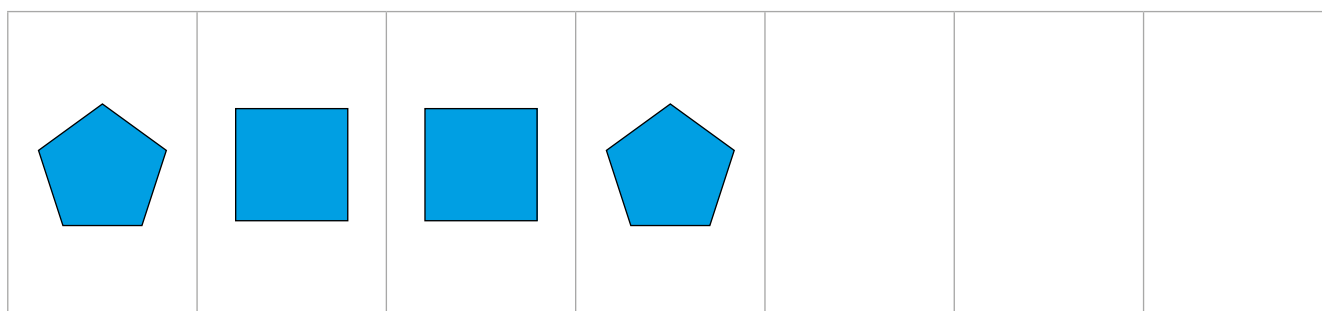
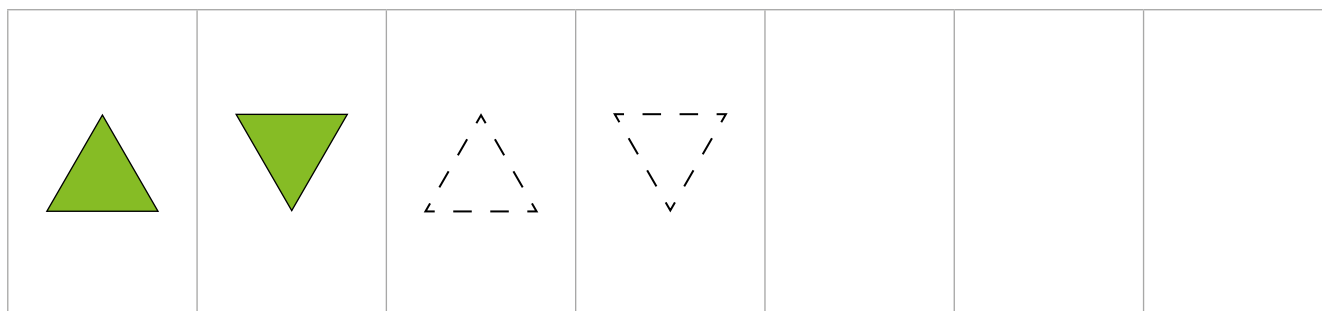
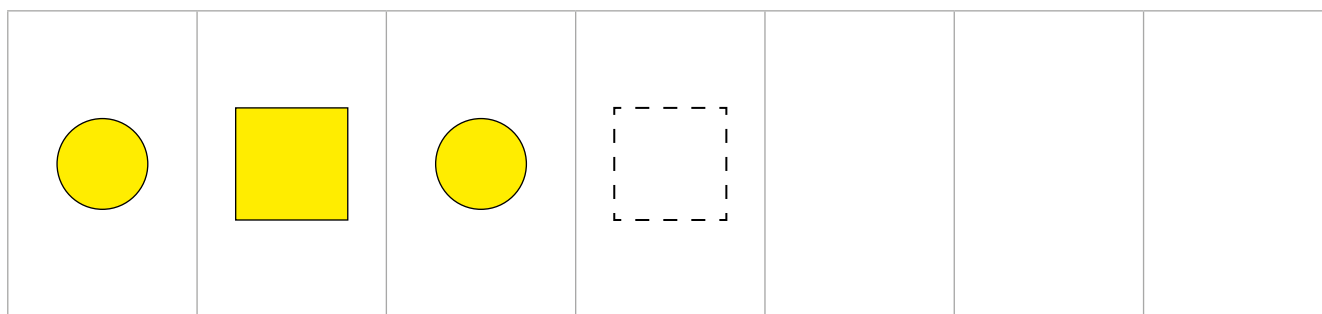
[·] Man gellie gaavnh?




[·] Mij haemide öövre seamma-laaketje?



[·] Goeride jærhkieh.



[··] Darjoeh jijtjene goerem.



[.] SPIELE: Gie voestemes riejrjes?

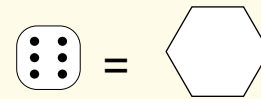
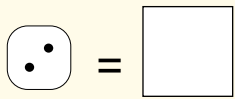
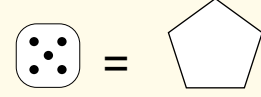
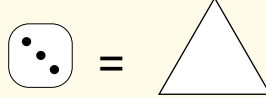
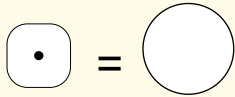
SPIELE-NJOELKEDASSH

Man gellie spëlilh: 2


Deerpegh: tjelmie-skaavhtege, klaerie-plæjj-ohkh. Tjetskieh aktem tjelmie-skaavhtegem fiere guhten æjkien. Klaeredh dam hammo-em dov haaman guktie tjelmie-skaavhtege vuesehte. Gie voestemes riejrjes?




Klaeredh rektangeelem.




A




B





[.] Darjoeh sievem reaktoe haaman.


Mov leah
4 

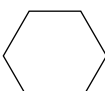



Mov leah
7 



Mov leah
5 




Mov leah
2 




[·] Guvvedh golmen-borth haemim.

Daam manne guvviedamme.



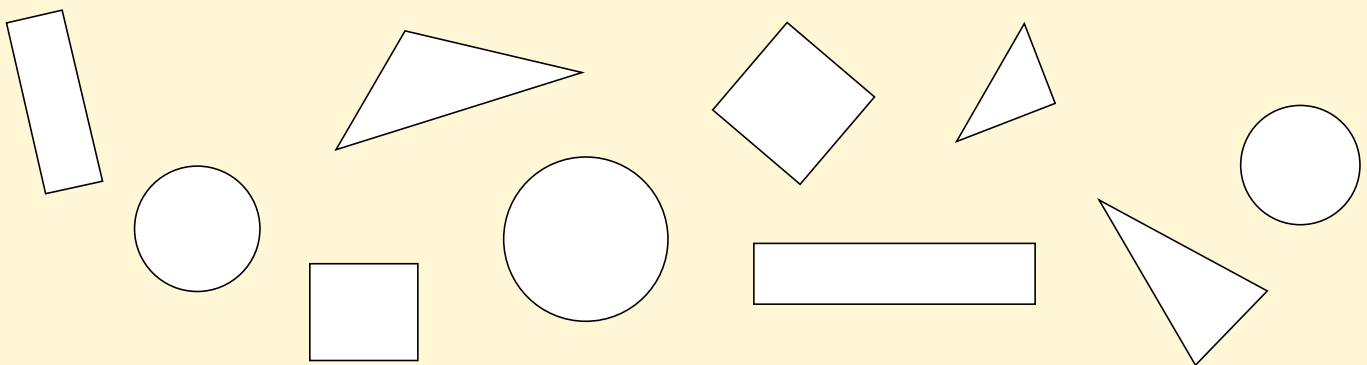
[··] Guvvedh njieljen-borth haemim.

Daam manne guvviedamme.

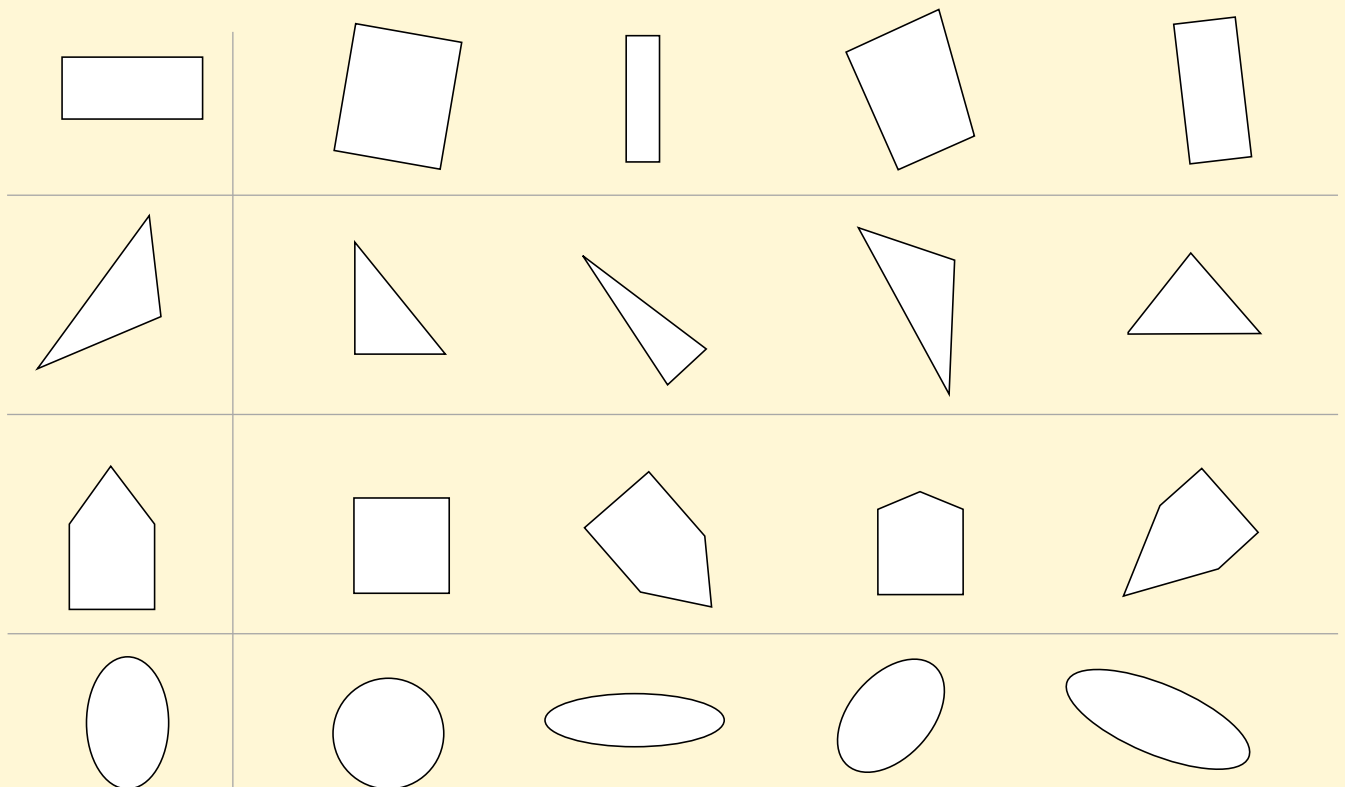




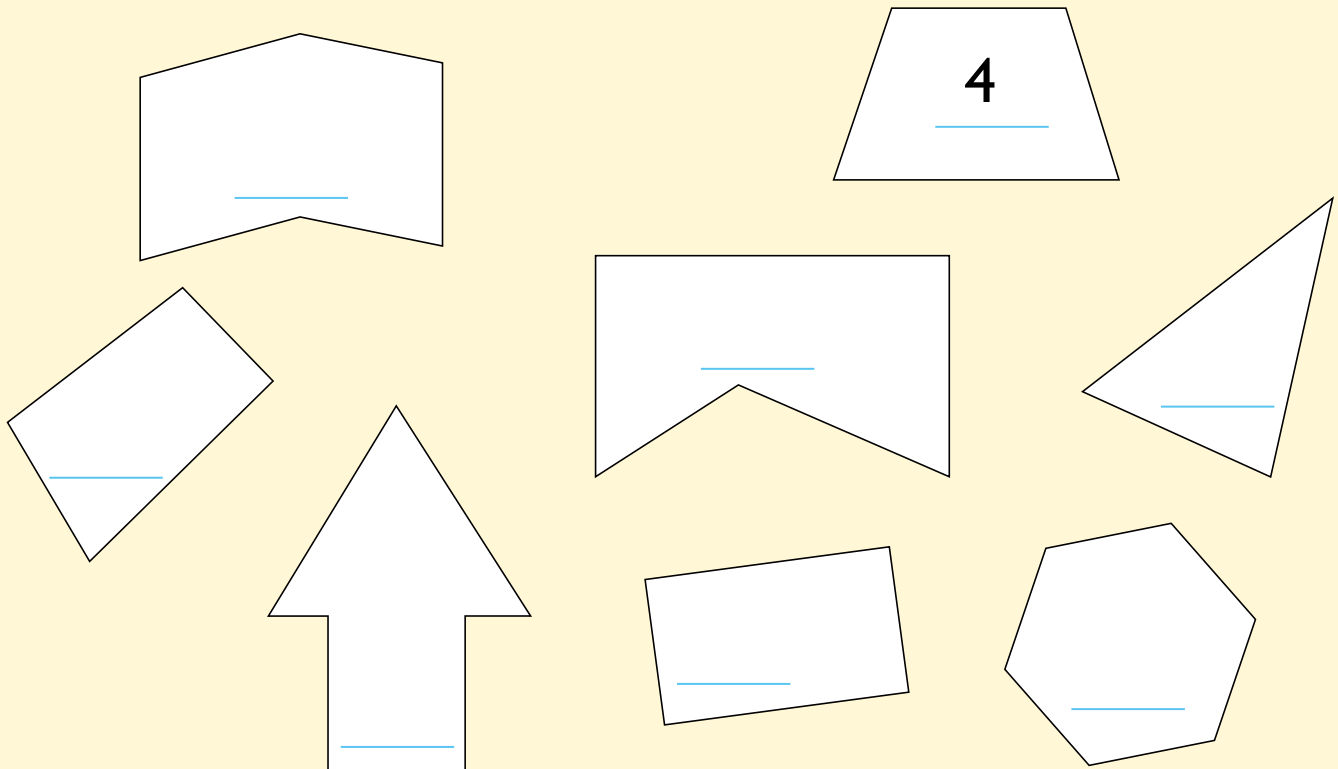
☞ Klaeredh haemide.



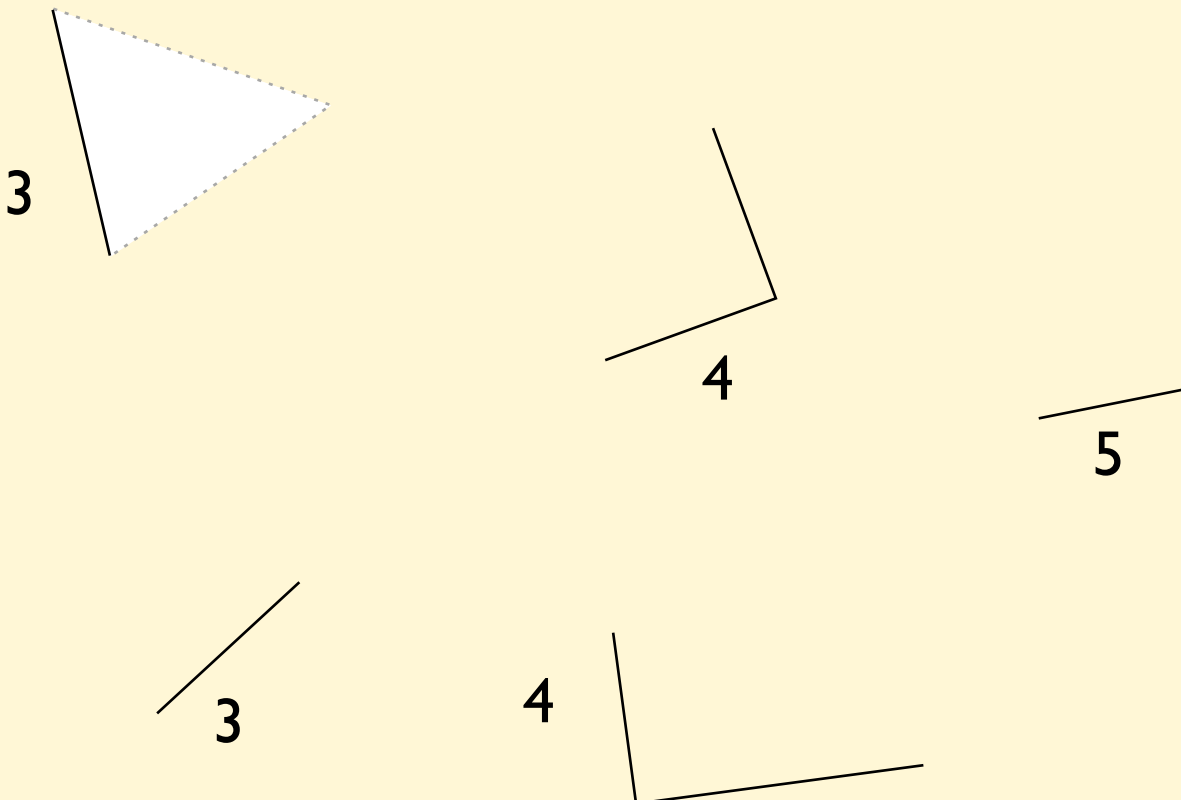
☞ Mij haemide öövre seamma-laaketje?



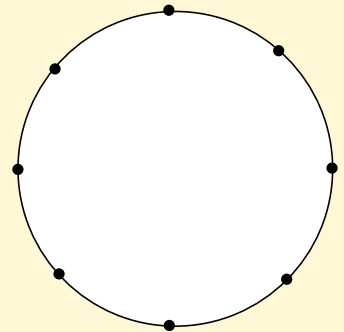
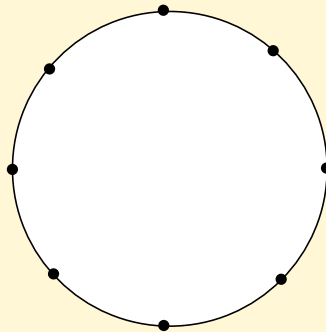
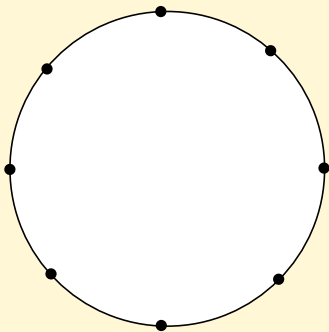
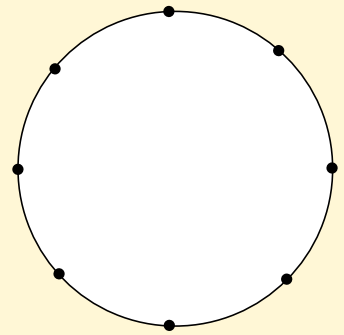
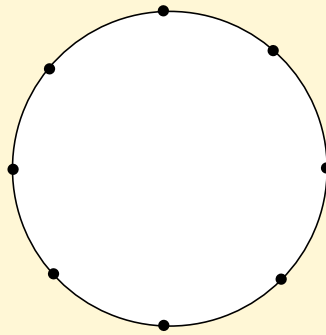
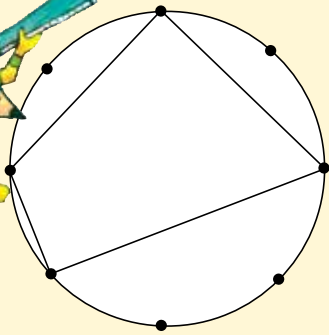
Man gellie bortegeh?



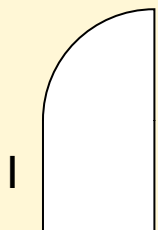
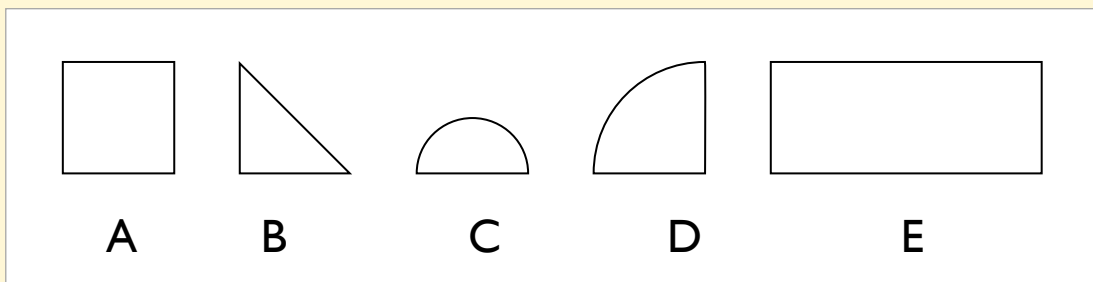
Guvvedh gellien-bortegeh.



▣ Guvvedh ovmesseie gellien-bortegh.




▣ Vöölemes haemide leah göökte hammojste ektiedamme A-E. Goerh mij hammojde provhkeme.



1

jih



2

jih



3

jih

LIEREHTIMMIEGÆRJA B. 110-113

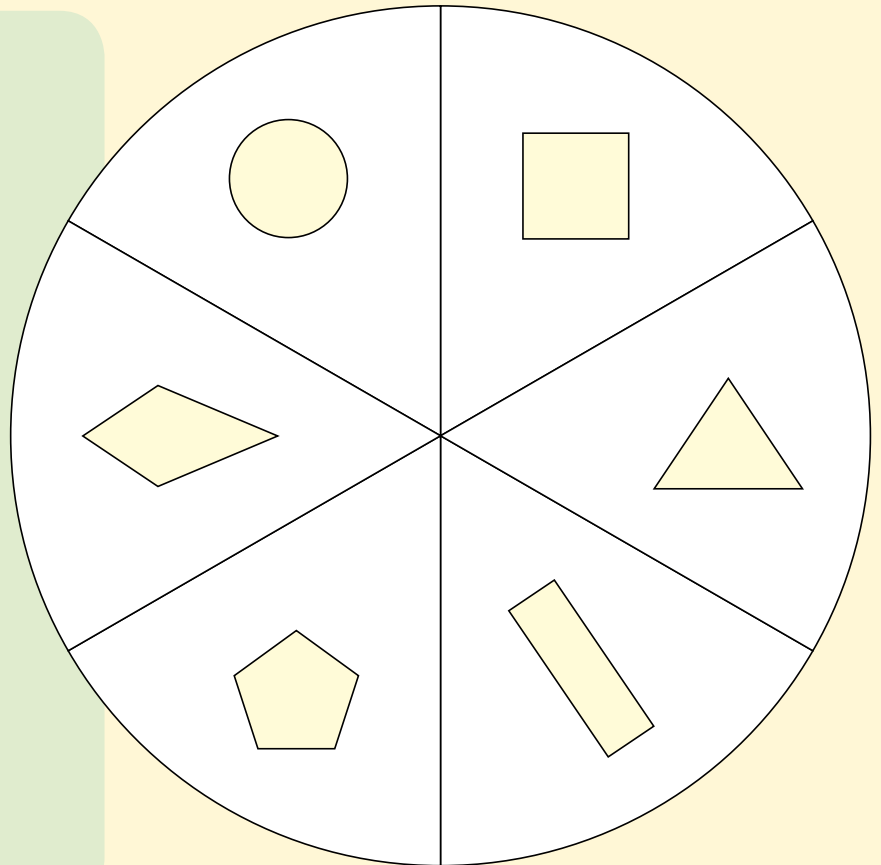
■ SPIELE: Golmesh raajesisnie.



SPIELE-NJOELKEDASSH

Man gellie spielijh: 2-3, jallh abpe tjierte.

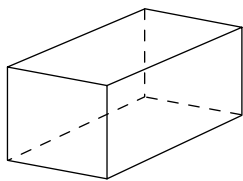
Deerpegh: Basth, plæjjohkh.

Fiere guhte spielije rovhte-viermiem guvviejugumie kluehkeste dievhtieh. Datne maahtah jijtje veeljedh mejtie gellie ovmesseie haemieh sijhth, jallh jis sijhth vuesiehtimmien gaavhtan gellie gievlieh jih vaenesh jallh ij mij jeatjah haemeste. Spielije bastem fiere guhten vaaroen mietie jaarrehte jih kroessem rovhte-vearman beaja haemien bijjelen gusnie baste tjöödtjeste. Barre aktem kroessem åådtje biejedh fierhten vaarosne. Dihte gie voestemes golme kroessh raajesisnie, vitnie.

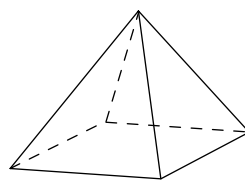




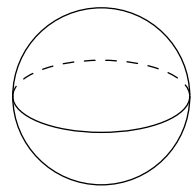
Sylindere



Prisme

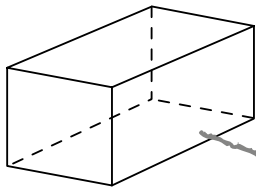


Pyramijde




Tjååhtje

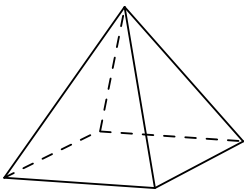
[.] Darjoeh sievh.



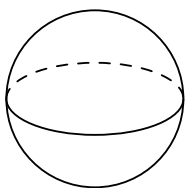
Prisme



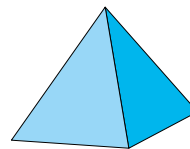

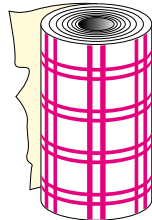


Sylindere




Pyramijde

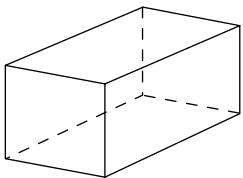


Tjäähtje






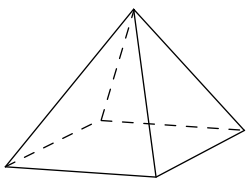
[.] Guvvedh guktie haemieh nuelesne v  jnoeh.



Prisme

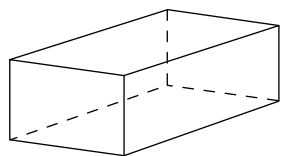


Sylindere




Pyramijde

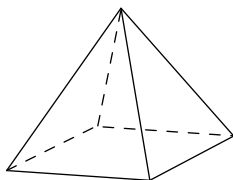
[.] Mij haemide ektesne. Darjoeh sievh.



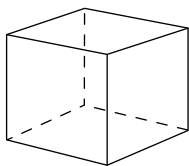
Prisme



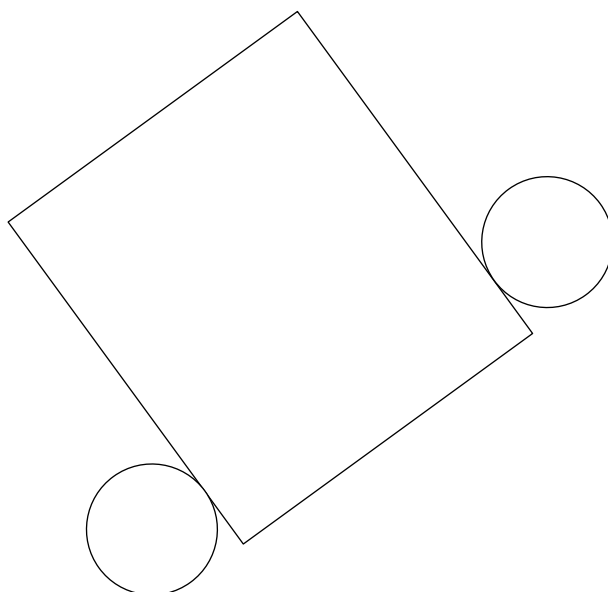
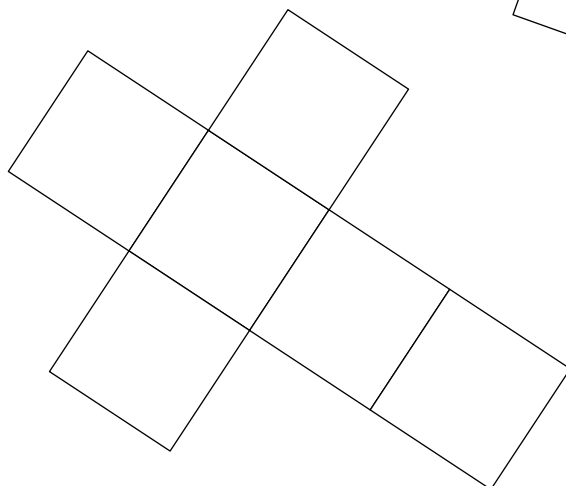
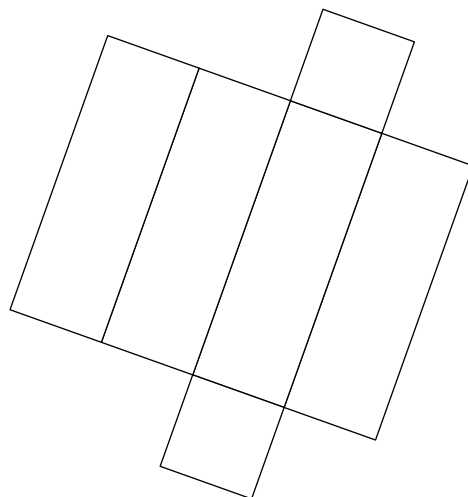
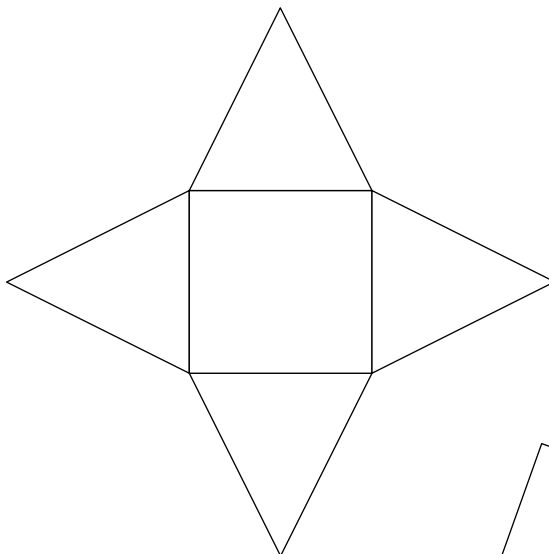
Sylindere




Pyramijde



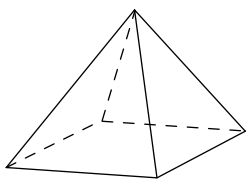
Tjelmie-skaavhtege



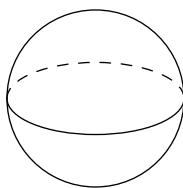


[.] Man gellie?

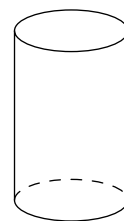
Pyramijdh



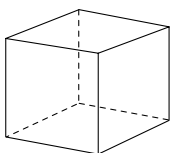
Tjååhtjh



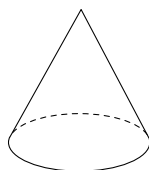
Sylinderh



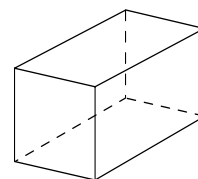
Skaavhtegh




Tjieggh



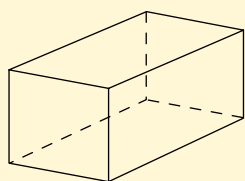
Prismh



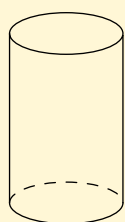
[.] Daate gæerede?



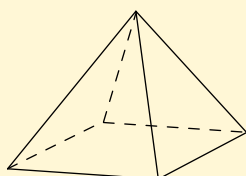
▣ Darjoeh sievh.



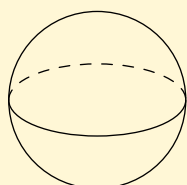
Prisme




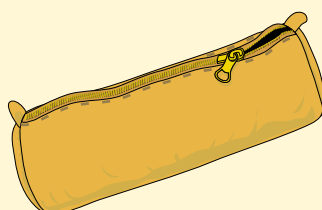



Sylindere




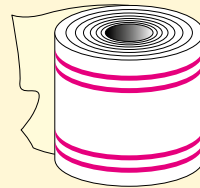



Pyramijde



Tjäähtje




■ Guktie betnie vääjnoe? Darjoeh sievh.



Gievlie



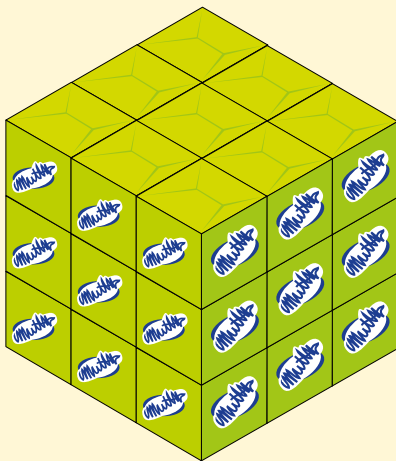


Kvadraate



Rektangeele

Man gellie?



Multi fleksibiliateem matematihke-lohkehtæmman vadta gosse lohkehtæjjide dåårje jìh nuepiem vadta måedtie lohkehtimmie-vuekieh provhkedh. MULTI eadtjaldávva, buerie mielem vadta jìh lustes baalka matematihkese.

Multise vihkeles:

- Måedtie iedtjh gosse vueptiestidh, goerehtidh jìh eadtjohkelaakan barkedh
- Lohkehtimmie mejtie sjiehtesjamme lohkehtimmie-ektievvyökosne
- Veele maahtoe-ulmide learoesoejkesjen mietie vuartasjidh
- Buerielaakan faagine kapihtelistie kapihtelidie barkedh jaepijste jaepide
- Vijries jìh eensì learohkevierhtiedimmie maam lohkehtimmesne sjiehtesje

Multi eeremes:

- Teorijem jìh iedtjide ektede
- Vuartesje guktie åvtese barkedh; fierhtene aamhtesinie eensilaakan jìh guhkies boelhkine vuesehte guktie barkedh
- Ånehks jìh aelhie teksth åtna
- Lohkehtimmiem learoehkidie sjiehtesje sjiere faagi daltesinie
- Buerie jìh tjielke gærjam Lærerens bok
- Dejtie learoesoejkesjen ulmide fierhtene kapihtelisnie vuesehte

Multin åejviekomponenth fierhten daltesasse:

- Maadthgærja A jìh B
- Lierehtimmiegærja
- Gaskeviermiesijjie **www.lagadus.org/multi**