

Bjørnar Alseth
Ann-Christin Arnås
Henrik Kirkegaard
Mona Røsseland

Multi



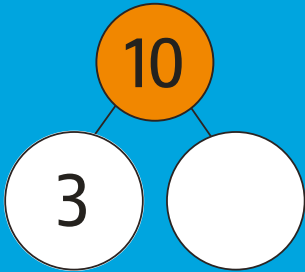
2. lähke

ÅARJELSAEMIEN

2

LĪEREHTIMMIEGÆRJA

Matematiške
maanadaltessesse



$$67 + 16 =$$

ČállidLágádus

SISVEGE

1	TAALH 0–20.....	2
2	PLUSSE JÏH MIJNUSE TAALIGUJMIE TAALESE 20.....	16
3	STATISTIHKE.....	28
4	GÅHKOEH MÏETESTIDH.....	32
5	TAALH TAALESE 100.....	36
6	PLUSSE JÏH MIJNUSE.....	48
7	TÏJJE.....	58
8	SYMMETRIJE.....	64
9	GEARTOME JÏH BIELIEDIMMIE - PAARRE-TAALH JÏH ODDE-TAALH.....	68
10	RYÖKNEDIDH TAALESE 100.....	78
11	AREAAL.....	90
12	RYÖKNEDIDH.....	94
13	GELLIEN-BORTEGH JÏH GIEVLIEH.....	110
14	TJAEKEDS HAMMOEH.....	114

Baakoelæstoe

aarhke ark
aktege-tjengkere enerball
bartele kolonne
bietskeme-käärhte klippekort
gaske-ryöknedimmie mellomregning
guvvie-boelhke tegnestykke
gâhkoe-mïetestimmie lengdemåling
komma-væhta komma
laavkome-bassenge badebasseng
lego-skaavhtege legokloss
legoskaavhtege-gâhkoe legokloss-
lengde
lehkïe halvpart
lâhkege-tjengkere tierball
nommerdidh nummerere
riektie kode
ryöknedimmie-væhta regnetegn
skaadtje klovn
sohkere-gurreme sukkerspinn
spååreme-snurke sparegris
stååke-ruevtieraaïroe leketog

Daate lea Multi-raajroen vuoestes versjovdne åarjelsaemiengïelese. Berteme ja Saemiedigkie utnijh vaajtelieh raerïeh/bïhkedassh buektedh juktie mubpien aeïkïen goh trygkesåvva daeïtie maahta dâvvodh. Seedth raerïeh dan e-påastese: poasta@lagadus.org

© ČállïidLágádus – ForfatternesForlag – Authors’Publisher
Pb 140, NO-9735 Kárášjohka-Karasjok
Fanasïeddi, NO-9845 Deatnu-Tana

Gærjabovre gaskeviermesne: www.lagadus.org

Redaktöore Gyldendal: Thor-Atle Refsdal
Redaktöore saemien, ČállïidLágádus: Svein Nordsletta
Design jïh layout, originaale: Anne Tryti
Layout, saemien: Britt Hansen
Jarkoestamme: Sig-Britt Persson, Karin Rensberg Ripa, Elin Fjellheim

Bijjïebieliesign: Hanne Dahl
Bijjïebielieguvvie: Børre Holt

Guvvïe: Anne Tryti
Dataguvvïe: Børre Holth

Gærja åndsverk-laaken mïetie vaarjelåvva. Ij Leah luhpie kopïjem gærjeste vaeltedh jis ij luhpie dejstie mah gærjam buakteme jallh tjaaleme. Jis kopïjem læjhkan vaalta, dellie iehtiem dorjeme jïh maahta bysvesovvedh böötine jallh faangke-gâetine.

© ČállïidLágádus 2017
Originaale reaktoe-aajhtere: Gyldendal Norsk Forlag AS 2006, 2. lâhkoe
Gærja dehtie matematihkelearoevierhteste Multi 1-7.
Trygkesovveme: Waasa Graphics Oy, Vaasa
ISBN 978-82-8263-076-4

Bjørnar Alseth • Ann-Christin Arnås • Henrik Kirkegaard • Mona Røsseland

Multi 
2. lähke


2

LIEREHTIMMIEGÆRJA

ČálliidLágádus

I TAALH 0–20

[·] Man gellie soermh?




[·] Man gellie pleajmah?









[·] Tjælieh taalide.

1							
2							
3							
4							



[·] Man gellie?

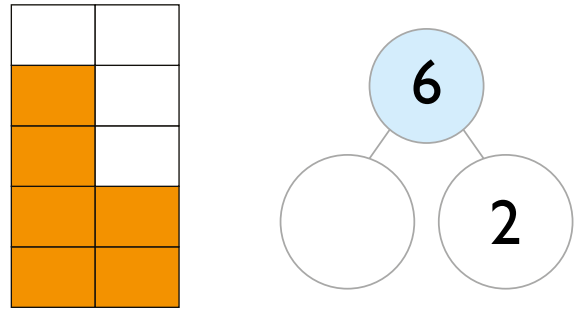
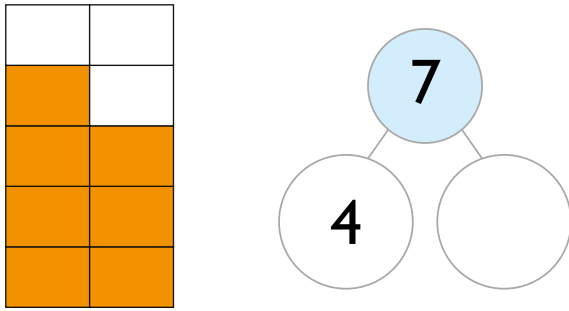
[·] Tjælieh taalide.

8							
8							
9							
9							
10							
10							

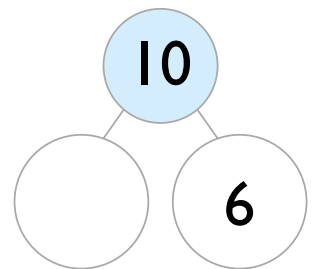
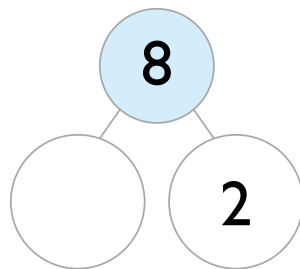
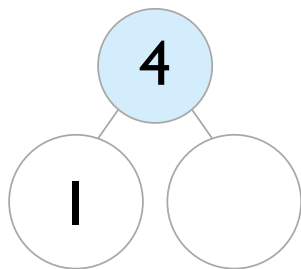
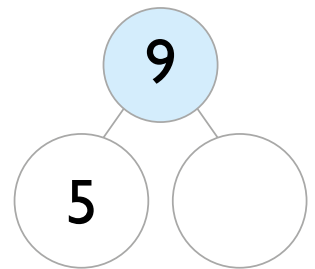
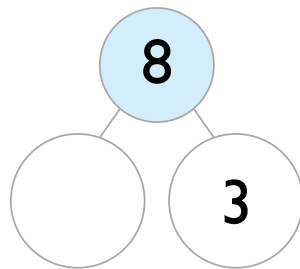
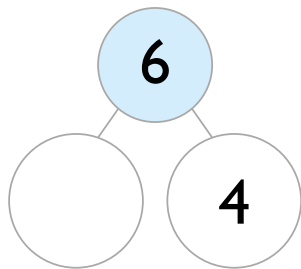
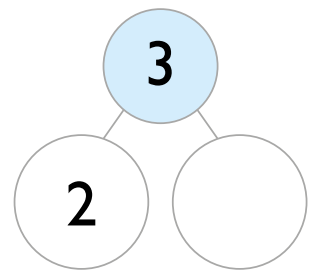
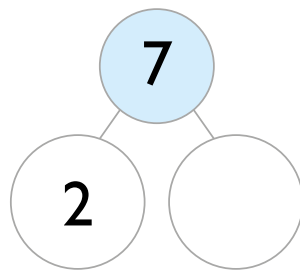
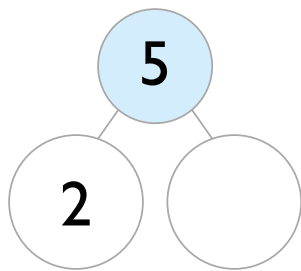
[·] Tjælieh taalide mah fååtesieh.



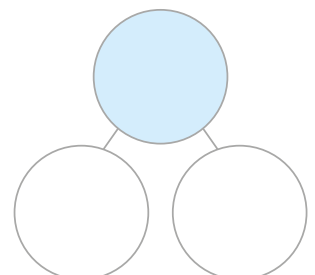
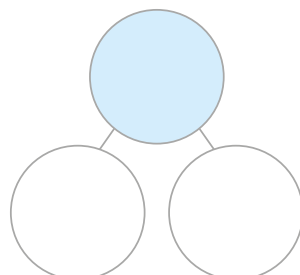
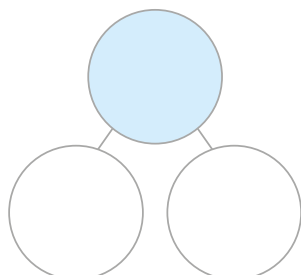
[·] Tjælieh taale-voelpide.



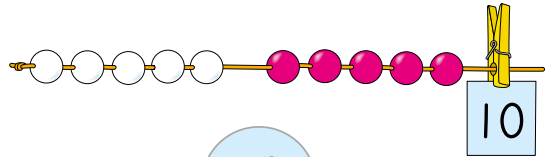
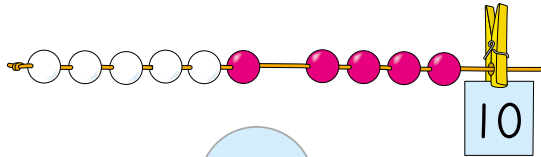
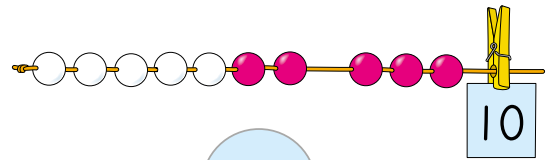
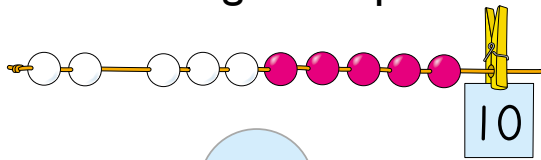
[·] Tjælieh taale-voelpide.



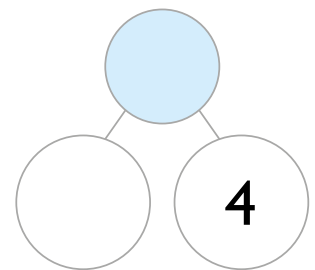
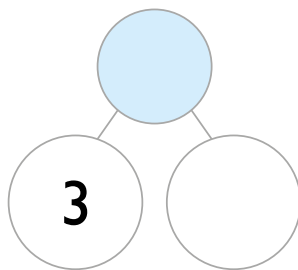
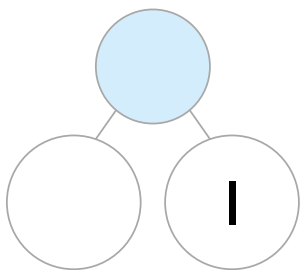
[·] Veeljh taale-voelpide jïjtje.



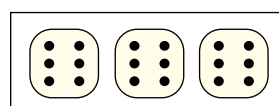
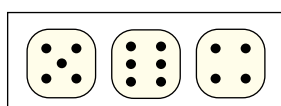
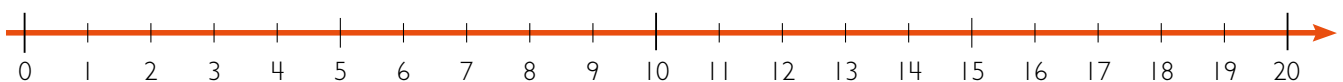
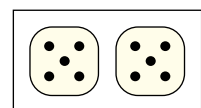
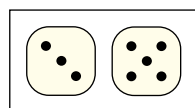
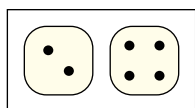
[·] Gaavnh l hkege-voelpide.



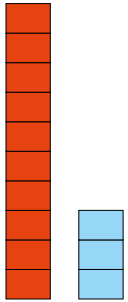
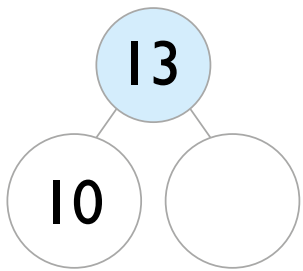
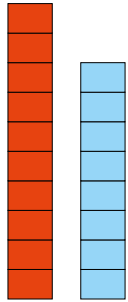
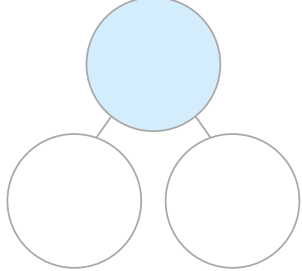
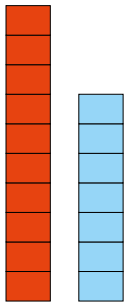
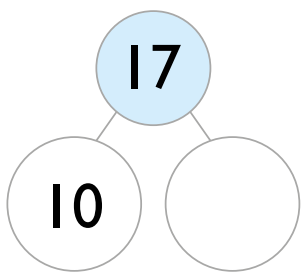
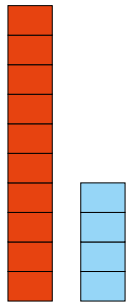
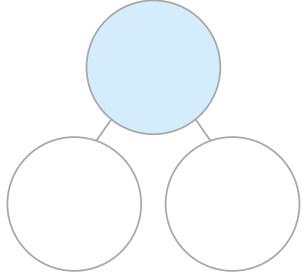
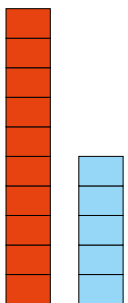
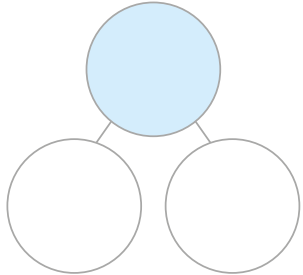
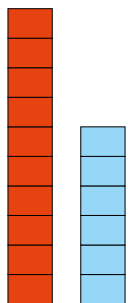
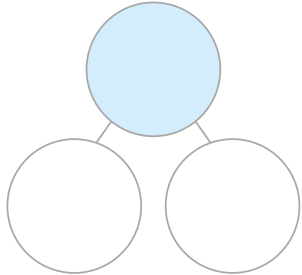
[·] Gaavnh l hkege-voelpide.



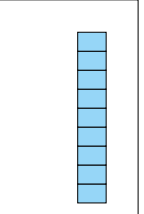
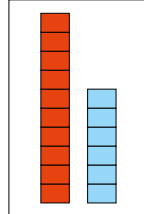
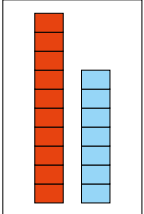
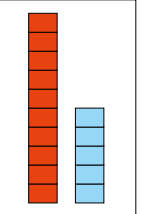


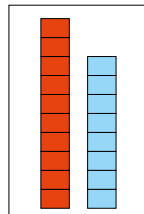
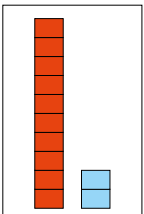
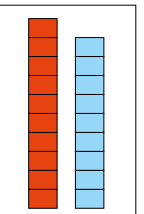
[·] Darjoeh sievh taale-sievese.



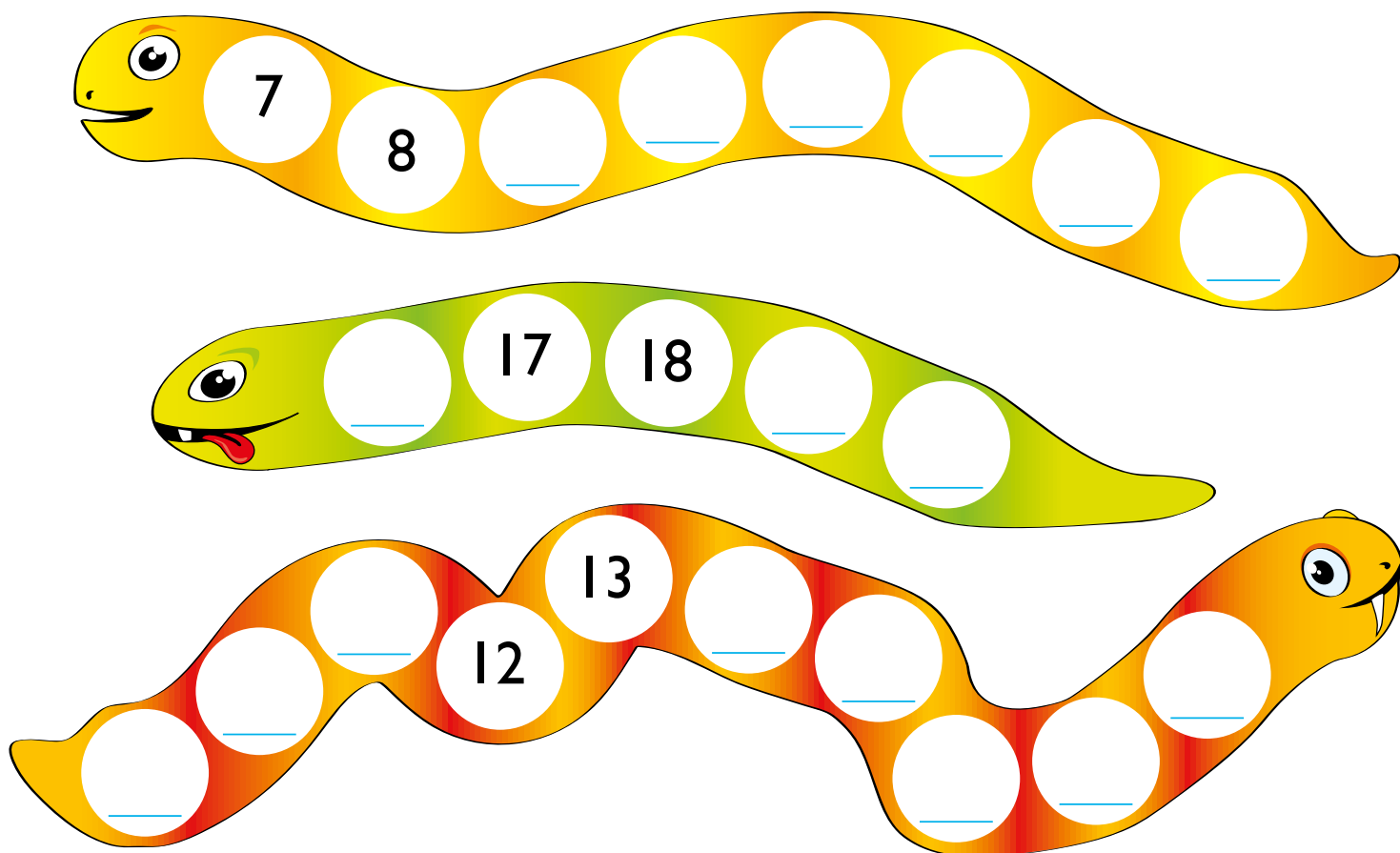
[·] Man gellie? Juekieh lähkegi jñh aktegi mietie.


[·] Guvvedh sievh taale-sieveve.

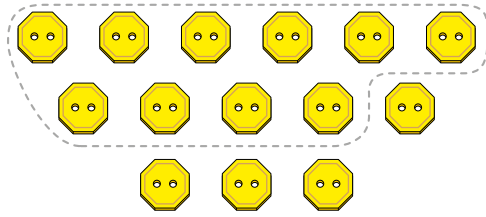
[·] Magkaridie taalide fãatesieh?




[·] Tjaelieh kraanna-taalide.




[.] Darjoeh l hkegh j h gaavnh dejtie mubpide taalide.




_____ = 10 + _____



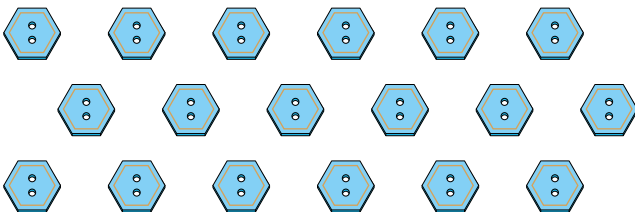
_____ = 10 + _____




_____ = 10 + _____




_____ = 10 + _____



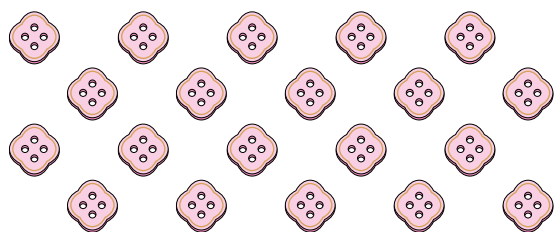
18 = _____ + _____



16 = _____ + _____



19 = _____ + _____

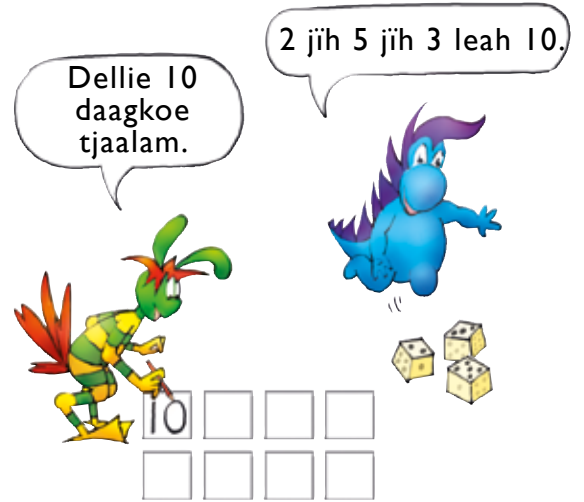


20 = _____ + _____

[.] Man jeenh beetnegh dej Leah?



- [·] Tjetskiah golme tjelmie-skaavhtegh jih biejh tjelmide tjåanghkan. Tjaelieh tjåenghkiem akten rovhtese. Darjoeh dam gaektsien aejkien





- [·] Tjaelieh dejtie gaektsie taalide gaevnjieruktien mietie.

[·] SPIELE

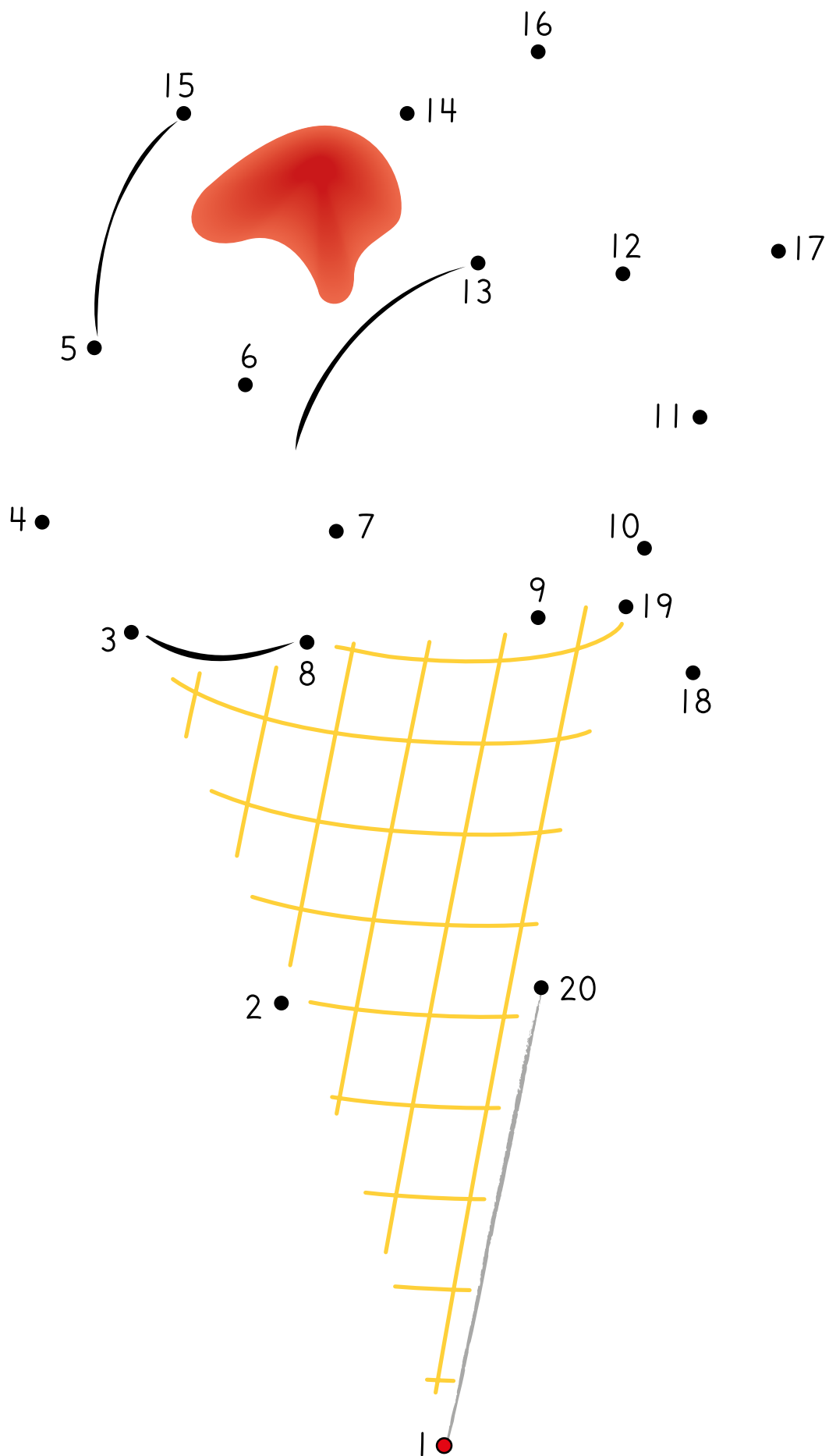
SPİELE-NJOELKEDASSH

Deerpegh: 3 tjelmie-skaavhtegh.

- Tjetskiah tjelmie-skaavhtegidie jih biejh tjelmide tjåanghkan.
- Mubpien aejkien gosse dov varooe, datne seamma-laakan darjoeh.
- Dihte vitnie gie voestegh vijhte taalh raajterasse ådtje.



[·] Darjoeh sievh trebleste trablan. Aelkieh taalesne I.



[·] Man gellie tjåanghkan?

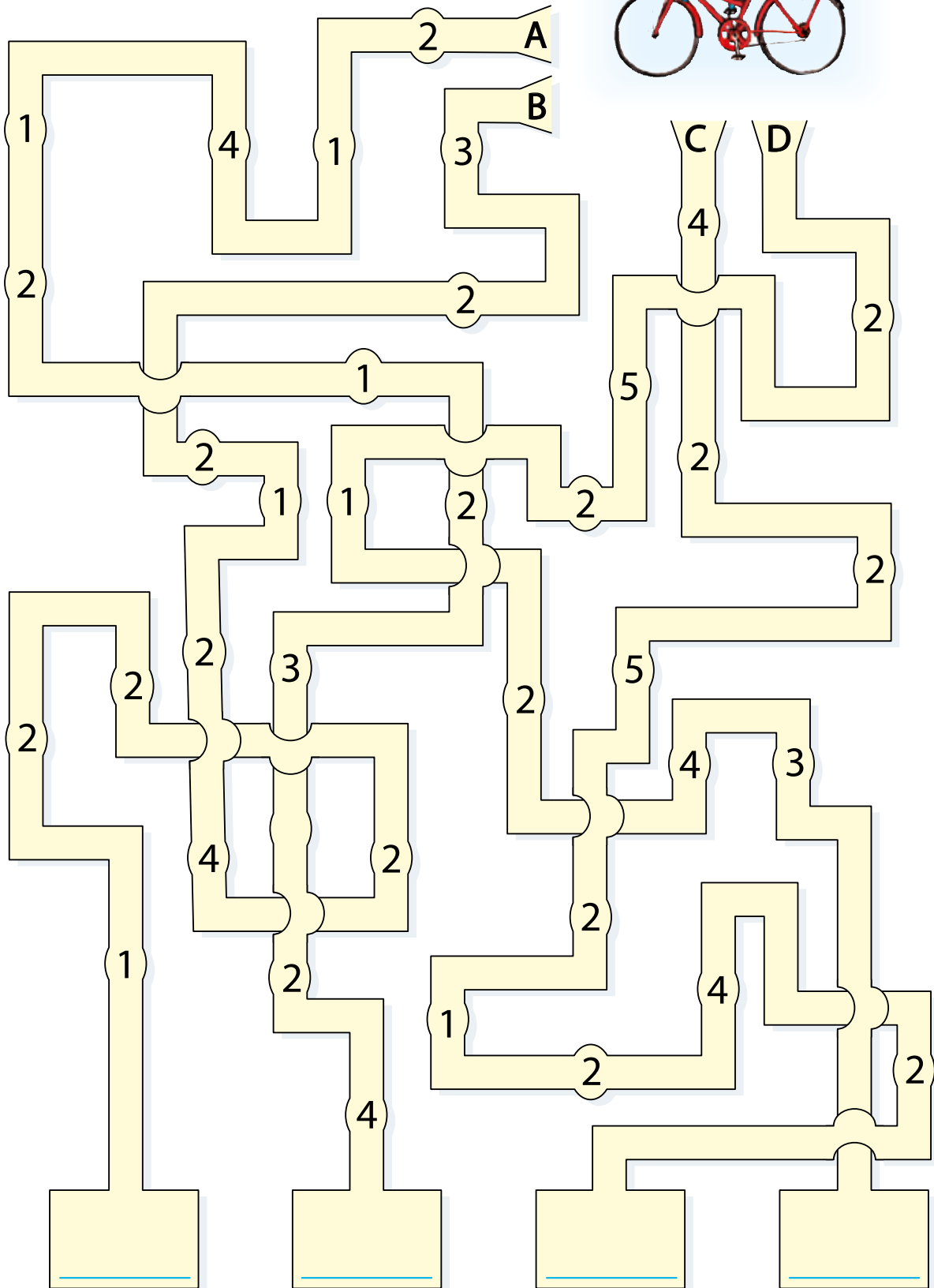
<div style="border: 1px solid black; padding: 5px; display: flex; justify-content: space-between;"> 6 •• </div> <div style="border: 1px solid black; padding: 5px; display: flex; justify-content: space-between;"> 10 •• </div>	<div style="border: 1px solid black; padding: 5px; display: flex; justify-content: space-between;"> 10 •• </div> <div style="border: 1px solid black; padding: 5px; display: flex; justify-content: space-between;"> _____ _____ </div>	<div style="border: 1px solid black; padding: 5px; display: flex; justify-content: space-between;"> 10 ••• </div> <div style="border: 1px solid black; padding: 5px; display: flex; justify-content: space-between;"> _____ _____ </div>
<div style="border: 1px solid black; padding: 5px; display: flex; justify-content: space-between;"> 12 •• </div> <div style="border: 1px solid black; padding: 5px; display: flex; justify-content: space-between;"> _____ _____ </div>	<div style="border: 1px solid black; padding: 5px; display: flex; justify-content: space-between;"> 15 •• </div> <div style="border: 1px solid black; padding: 5px; display: flex; justify-content: space-between;"> _____ _____ </div>	<div style="border: 1px solid black; padding: 5px; display: flex; justify-content: space-between;"> 13 ••• </div> <div style="border: 1px solid black; padding: 5px; display: flex; justify-content: space-between;"> _____ _____ </div>
<div style="border: 1px solid black; padding: 5px; display: flex; justify-content: space-between;"> 9 ••• </div> <div style="border: 1px solid black; padding: 5px; display: flex; justify-content: space-between;"> _____ _____ </div>	<div style="border: 1px solid black; padding: 5px; display: flex; justify-content: space-between;"> 12 ••• </div> <div style="border: 1px solid black; padding: 5px; display: flex; justify-content: space-between;"> _____ _____ </div>	<div style="border: 1px solid black; padding: 5px; display: flex; justify-content: space-between;"> 14 ••• </div> <div style="border: 1px solid black; padding: 5px; display: flex; justify-content: space-between;"> _____ _____ </div>
<div style="border: 1px solid black; padding: 5px; display: flex; justify-content: space-between;"> 11 ••• </div> <div style="border: 1px solid black; padding: 5px; display: flex; justify-content: space-between;"> _____ _____ </div>	<div style="border: 1px solid black; padding: 5px; display: flex; justify-content: space-between;"> 16 •• </div> <div style="border: 1px solid black; padding: 5px; display: flex; justify-content: space-between;"> _____ _____ </div>	<div style="border: 1px solid black; padding: 5px; display: flex; justify-content: space-between;"> 19 •• </div> <div style="border: 1px solid black; padding: 5px; display: flex; justify-content: space-between;"> _____ _____ </div>
<div style="border: 1px solid black; padding: 5px; display: flex; justify-content: space-between;"> 20 •• </div> <div style="border: 1px solid black; padding: 5px; display: flex; justify-content: space-between;"> _____ _____ </div>	<div style="border: 1px solid black; padding: 5px; display: flex; justify-content: space-between;"> 20 ••• </div> <div style="border: 1px solid black; padding: 5px; display: flex; justify-content: space-between;"> _____ _____ </div>	<div style="border: 1px solid black; padding: 5px; display: flex; justify-content: space-between;"> 21 ••• </div> <div style="border: 1px solid black; padding: 5px; display: flex; justify-content: space-between;"> _____ _____ </div>

[·] Veeljh taalh jìh ryöknedh.

<div style="border: 1px solid black; padding: 5px; display: flex; justify-content: space-between;"> _____ •• </div> <div style="border: 1px solid black; padding: 5px; display: flex; justify-content: space-between;"> _____ _____ </div>	<div style="border: 1px solid black; padding: 5px; display: flex; justify-content: space-between;"> _____ ••• </div> <div style="border: 1px solid black; padding: 5px; display: flex; justify-content: space-between;"> _____ _____ </div>	<div style="border: 1px solid black; padding: 5px; display: flex; justify-content: space-between;"> _____ ••• </div> <div style="border: 1px solid black; padding: 5px; display: flex; justify-content: space-between;"> _____ _____ </div>
--	---	---

[·] Mij geajnojde guhkemes?

Biejh geajnoej taalide tjåanghkan.

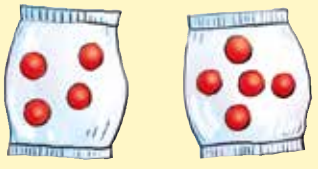







MÅÅLE

2

PLUSSE JIH MIJNUSE TAAALIGUJMIE TAALESE 20

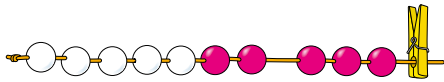
[·] Man gellie tjåanghkan?

 $4 + 5 = \underline{\quad}$	 $\underline{\quad} + \underline{\quad} = \underline{\quad}$
 $\underline{\quad} + \underline{\quad} = \underline{\quad}$	 $\underline{\quad} + \underline{\quad} = \underline{\quad}$
 $\underline{\quad} + \underline{\quad} = \underline{\quad}$	 $\underline{\quad} + \underline{\quad} = \underline{\quad}$

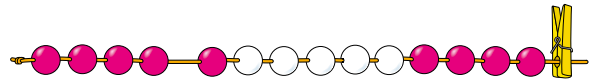
[··] Ryöknedh.

$3 + 2 = \underline{\quad}$	$3 + 7 = \underline{\quad}$	$5 + 5 = \underline{\quad}$
$5 + 3 = \underline{\quad}$	$8 + 2 = \underline{\quad}$	$9 + 1 = \underline{\quad}$
$1 + 7 = \underline{\quad}$	$4 + 5 = \underline{\quad}$	$3 + 8 = \underline{\quad}$

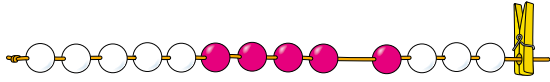
[·] Man gellie?



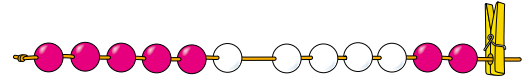
$$7 + \underline{\quad} = 10$$



$$\underline{\quad} + \underline{\quad} = \underline{\quad}$$

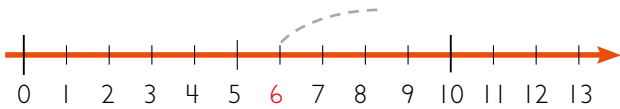


$$\underline{\quad} + \underline{\quad} = \underline{\quad}$$

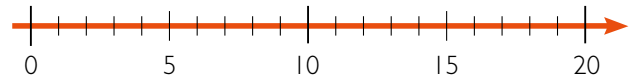


$$\underline{\quad} + \underline{\quad} = \underline{\quad}$$

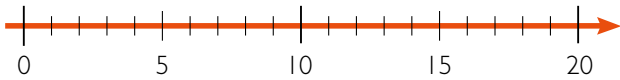
[··] Ryöknedh.



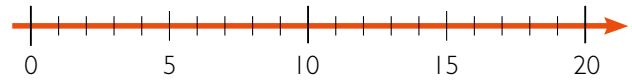
$$6 + 5 = \underline{\quad}$$



$$7 + 9 = \underline{\quad}$$

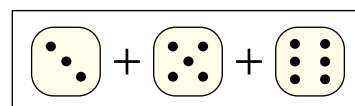
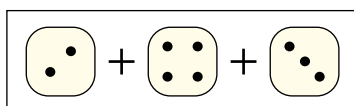
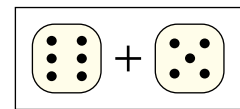
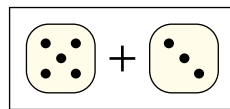
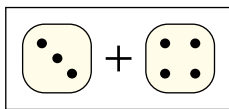


$$8 + 11 = \underline{\quad}$$

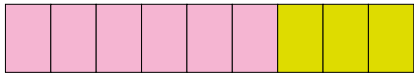


$$11 + 6 = \underline{\quad}$$

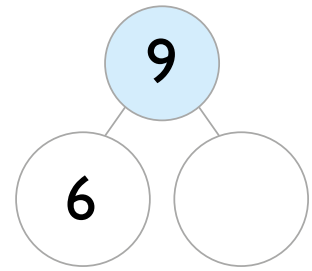
[···] Darjoeh sievh taale-sievese.



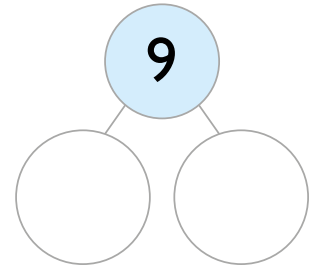
[·] Mij taalide fãatesieh?




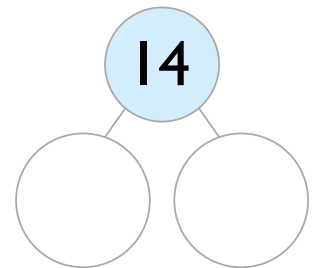
$$9 = 6 + \underline{\quad}$$



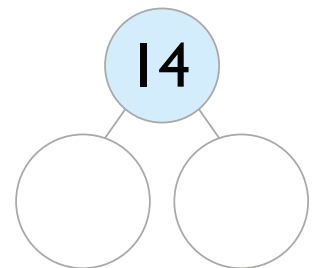
$$9 = \underline{\quad} + \underline{\quad}$$




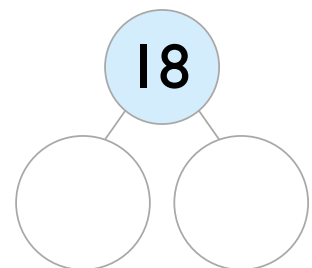
$$14 = \underline{\quad} + \underline{\quad}$$



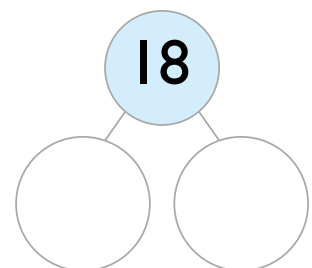
$$14 = \underline{\quad} + \underline{\quad}$$



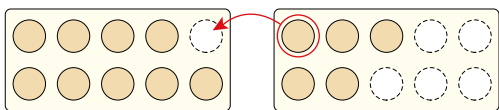
$$18 = \underline{\quad} + \underline{\quad}$$



$$18 = \underline{\quad} + \underline{\quad}$$

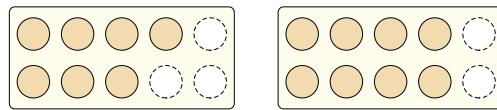


[·] Darjoeh l hkegem j h ry knedh.



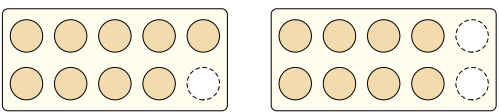
$$9 + 5 =$$

$$10 + 4 = \underline{\quad}$$



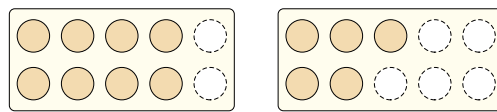
$$7 + 8 =$$

$$10 + \underline{\quad} = \underline{\quad}$$



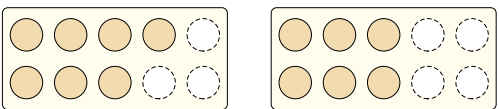
$$9 + 8 =$$

$$10 + \underline{\quad} = \underline{\quad}$$



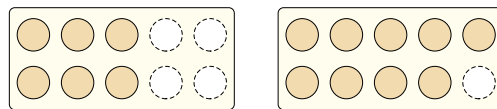
$$8 + 5 =$$

$$10 + \underline{\quad} = \underline{\quad}$$



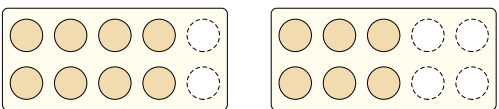
$$7 + 6 =$$

$$\underline{\quad} + \underline{\quad} = \underline{\quad}$$



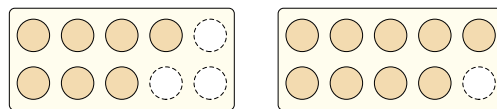
$$6 + 9 =$$

$$\underline{\quad} + \underline{\quad} = \underline{\quad}$$



$$8 + 6 =$$

$$\underline{\quad} + \underline{\quad} = \underline{\quad}$$



$$7 + 9 =$$

$$\underline{\quad} + \underline{\quad} = \underline{\quad}$$

[·] Juekieh lähkegi jñh aktegi mietie. Ryöknedh.

$$14 + 5 = \underline{\quad}$$

10 4

$$15 + 3 = \underline{\quad}$$

10 ○

$$11 + 6 = \underline{\quad}$$

10 1

$$12 + 7 = \underline{\quad}$$

○ ○

$$13 + 3 = \underline{\quad}$$

○ ○

$$16 + 3 = \underline{\quad}$$

○ ○

$$12 + 4 = \underline{\quad}$$

○ ○

$$13 + 2 = \underline{\quad}$$

○ ○

[·] Ryöknedh.

$11 + 5 = \underline{\quad}$

$12 + 5 = \underline{\quad}$

$18 + 2 = \underline{\quad}$

$13 + 4 = \underline{\quad}$

$17 + 2 = \underline{\quad}$


$16 + 5 = \underline{\quad}$

$17 + 3 = \underline{\quad}$

$15 + 4 = \underline{\quad}$

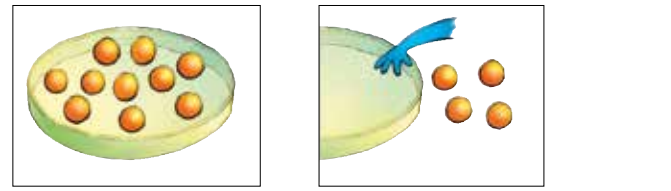
$19 + 4 = \underline{\quad}$

[·] Man gellie aajmojne?

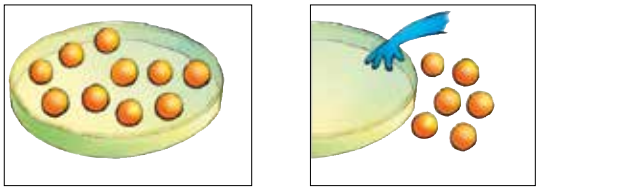


Manne kroessem biejem dej bijjelen maam destie vaalteme.

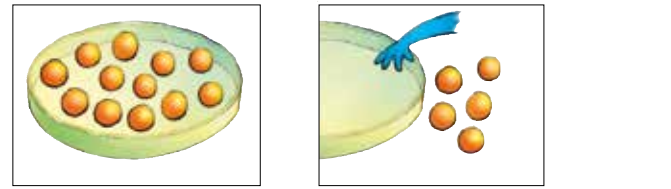
$7 - 3 =$ _____



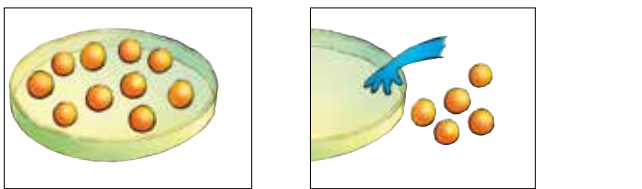
_____ - _____ = _____



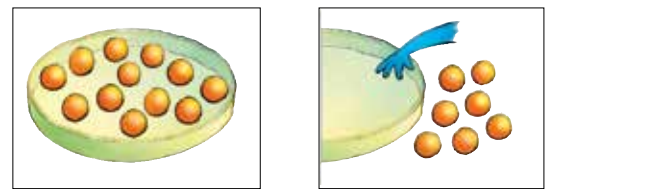
_____ - _____ = _____



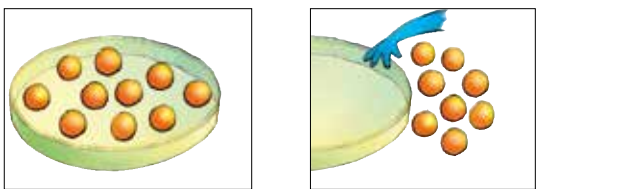
_____ - _____ = _____



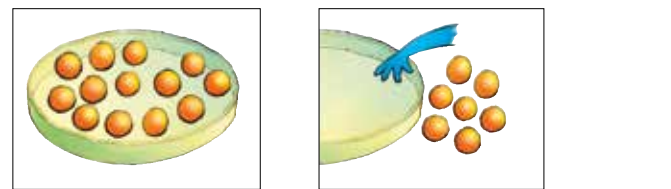
_____ - _____ = _____



_____ - _____ = _____



_____ - _____ = _____



_____ - _____ = _____

[·] Ryöknedh.

$7 - 2 =$ _____

$9 - 6 =$ _____

$5 - 4 =$ _____

$8 - 4 =$ _____

$4 - 3 =$ _____

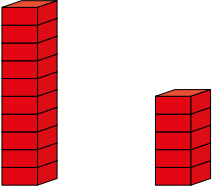
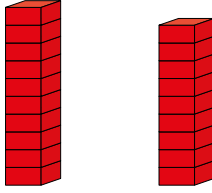
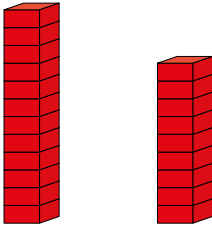
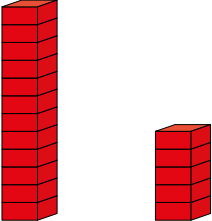
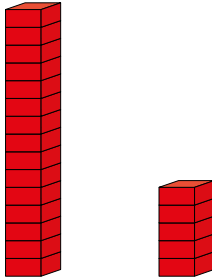

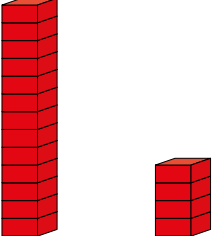
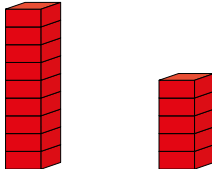
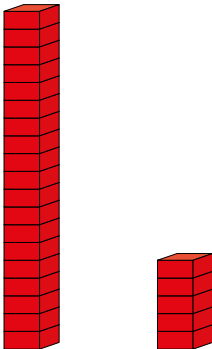
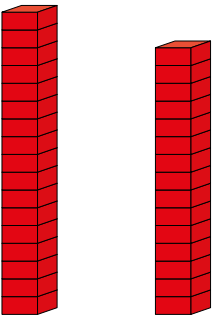
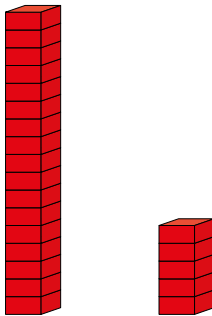

$7 - 5 =$ _____

$5 - 3 =$ _____


$6 - 4 =$ _____

$8 - 5 =$ _____

[·] Mij joekehtasse?

 _____ - _____ = _____	 _____ - _____ = _____	 _____ - _____ = _____
 _____ - _____ = _____	 _____ - _____ = _____	
 _____ - _____ = _____	 _____ - _____ = _____	 _____ - _____ = _____
 _____ - _____ = _____	 _____ - _____ = _____	 _____ - _____ = _____

[.] Mij joekehtasse?



$$\underline{\quad} - \underline{\quad} = \underline{\quad}$$



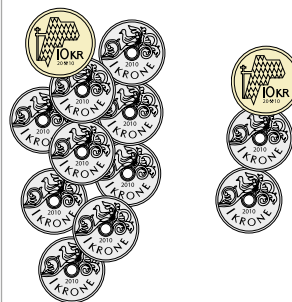
$$\underline{\quad} - \underline{\quad} = \underline{\quad}$$



$$\underline{\quad} - \underline{\quad} = \underline{\quad}$$




$$\underline{\quad} - \underline{\quad} = \underline{\quad}$$



$$\underline{\quad} - \underline{\quad} = \underline{\quad}$$



$$\underline{\quad} - \underline{\quad} = \underline{\quad}$$



$$\underline{\quad} - \underline{\quad} = \underline{\quad}$$



$$\underline{\quad} - \underline{\quad} = \underline{\quad}$$



$$\underline{\quad} - \underline{\quad} = \underline{\quad}$$



$$\underline{\quad} - \underline{\quad} = \underline{\quad}$$



$$\underline{\quad} - \underline{\quad} = \underline{\quad}$$

[·] Juekieh lähkegi jñh aktegi mietie. Ryöknedh.

$$15 - 4 = \underline{\quad}$$

10 5

$$19 - 6 = \underline{\quad}$$

○ ○

$$14 - 2 = \underline{\quad}$$

○ ○

$$17 - 4 = \underline{\quad}$$

○ ○

$$16 - 4 = \underline{\quad}$$

○ ○

$$19 - 7 = \underline{\quad}$$

○ ○

$$13 - 2 = \underline{\quad}$$

○ ○

$$18 - 6 = \underline{\quad}$$

○ ○

[··] Ryöknedh.

$15 - 5 = \underline{\quad}$

$19 - 6 = \underline{\quad}$

$20 - 10 = \underline{\quad}$

$16 - 2 = \underline{\quad}$

$18 - 8 = \underline{\quad}$

$20 - 5 = \underline{\quad}$

$18 - 5 = \underline{\quad}$

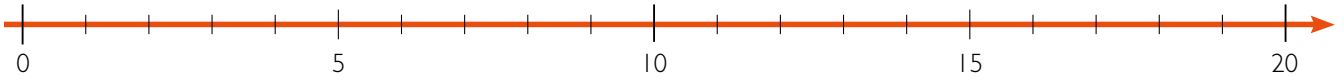
$19 - 5 = \underline{\quad}$

$20 - 7 = \underline{\quad}$

$17 - 6 = \underline{\quad}$

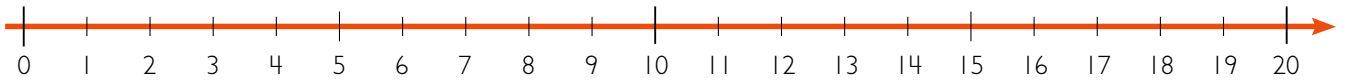
$17 - 5 = \underline{\quad}$

$20 - 11 = \underline{\quad}$

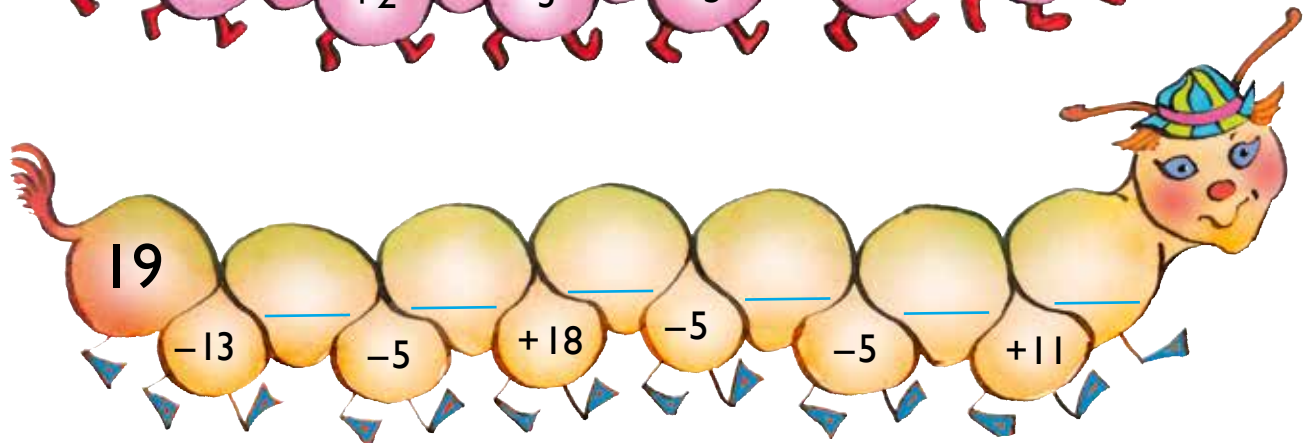
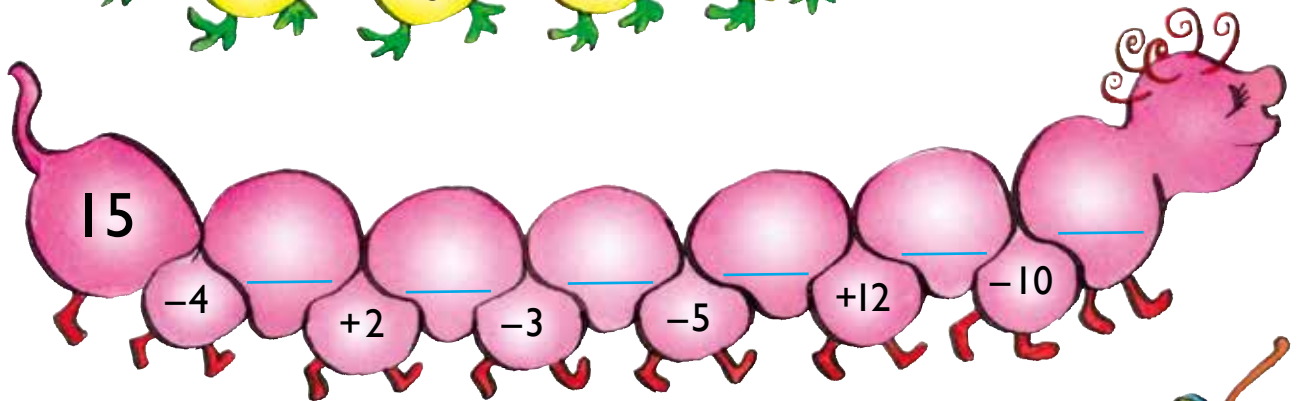
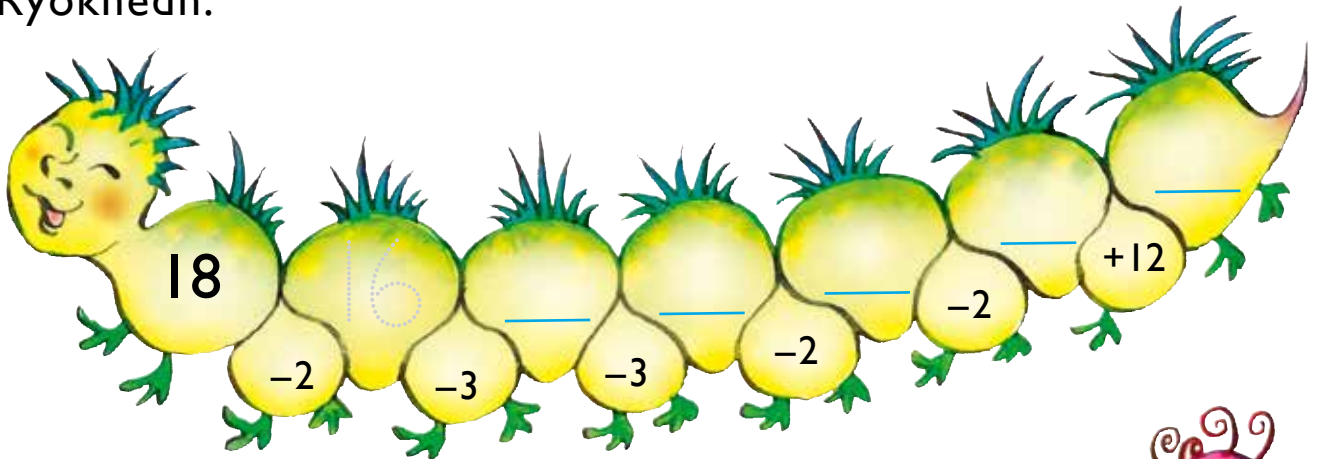


[·] Ryöknedh, jñh darjoeh guvviem.

$2 + 1$	$5 + 2$	$10 + 4$	$13 + 3$	$4 + 1$	$5 + 6$
3	7	14			
$7 + 2$	$5 + 3$	$15 + 5$	$3 + 3$	$8 + 4$	$14 + 5$
$11 + 6$	$6 + 7$	$2 + 2$	$8 + 7$	$6 + 4$	$9 + 9$



[·] Ryöknedh.



[·] Ryöknedh.

$16 - 2 = \underline{\quad}$

$15 - 5 = \underline{\quad}$

$18 - 6 = \underline{\quad}$

$14 + 3 = \underline{\quad}$

$11 + 8 = \underline{\quad}$

$12 + 6 = \underline{\quad}$

$12 + 5 = \underline{\quad}$

$11 - 7 = \underline{\quad}$

$13 + 7 = \underline{\quad}$

[·] Tjælieh + jîh -



$6 \square 2 \square 2 = 6$

$4 \square 4 \square 1 = 7$

$3 \square 4 \square 1 = 8$

$8 \square 6 \square 3 = 5$

$10 \square 2 \square 4 = 4$

$3 \square 2 \square 6 = 7$

$14 \square 4 \square 2 = 8$

$20 \square 10 \square 2 = 12$

$12 \square 2 \square 4 = 18$

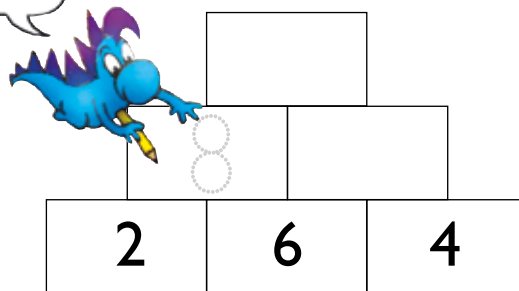
$18 \square 6 \square 2 = 14$

$10 \square 10 \square 5 = 15$

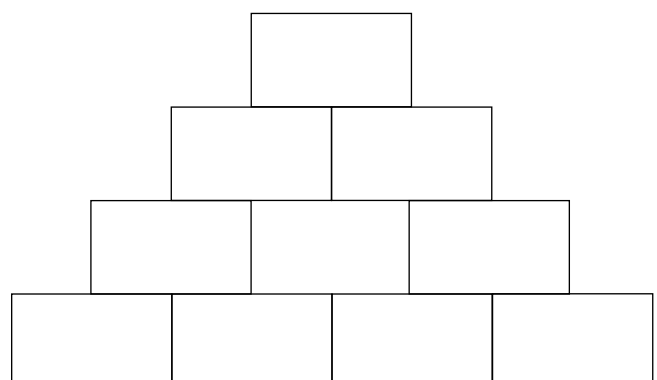
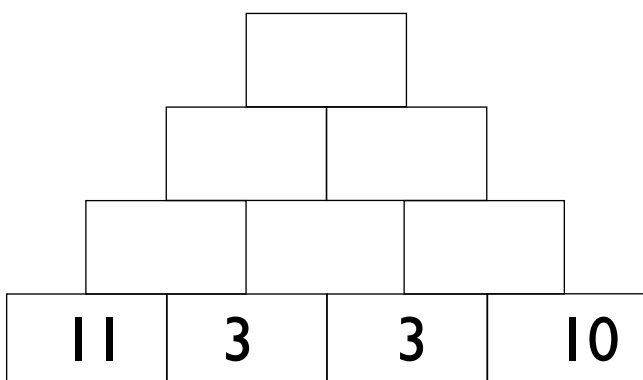
$8 \square 10 \square 2 = 20$

[··] Gaavnh dah gâaroes rovhti taalide.

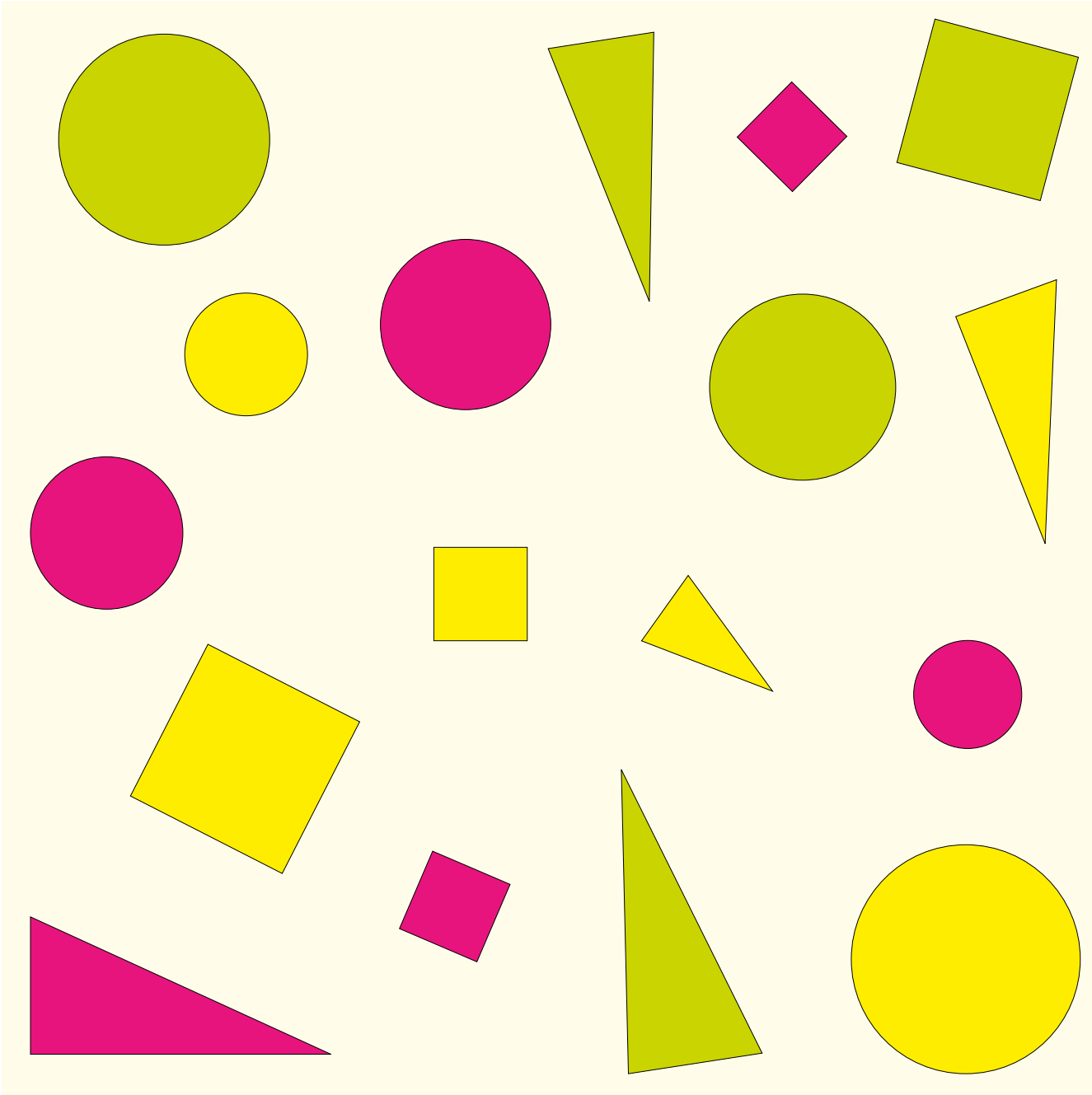
2 + 6 sjædta 8.



Veelijh taalem jîjtje.



3 STATISTIHKE



[·] Man gellie?








[··]

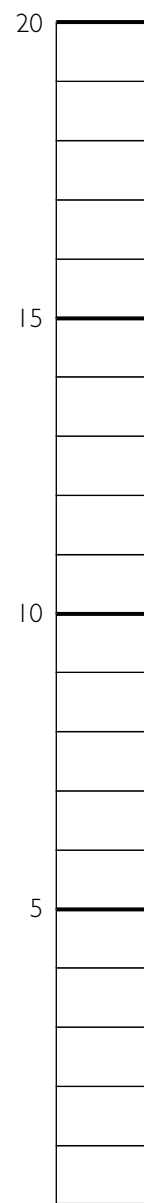
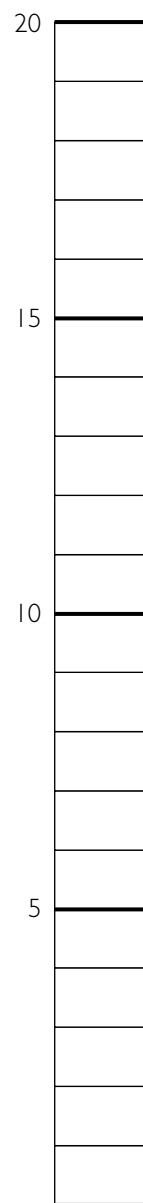
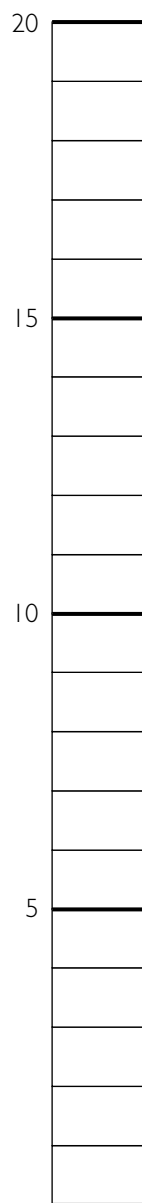
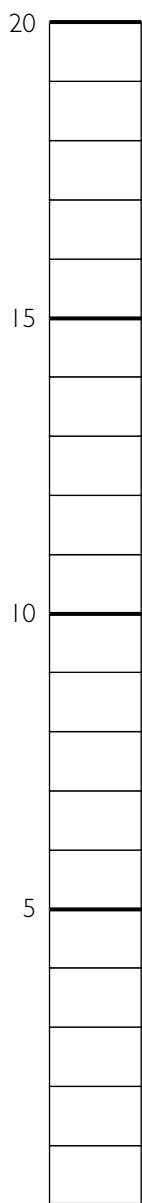




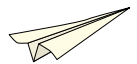
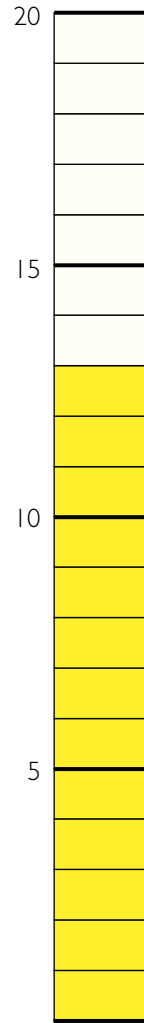

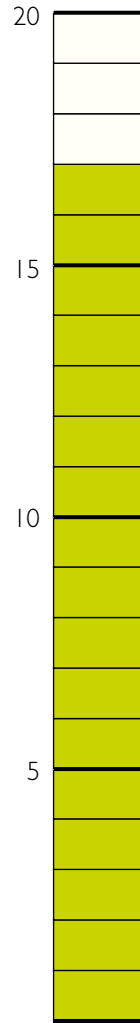
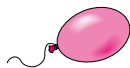
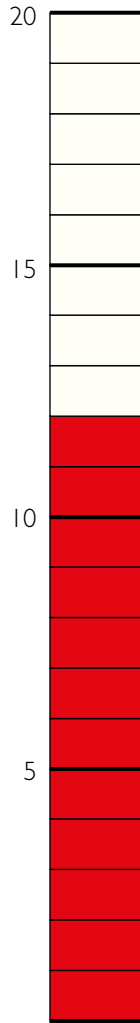
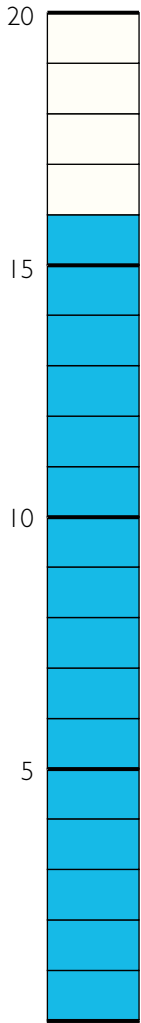




[·] Man gellie?



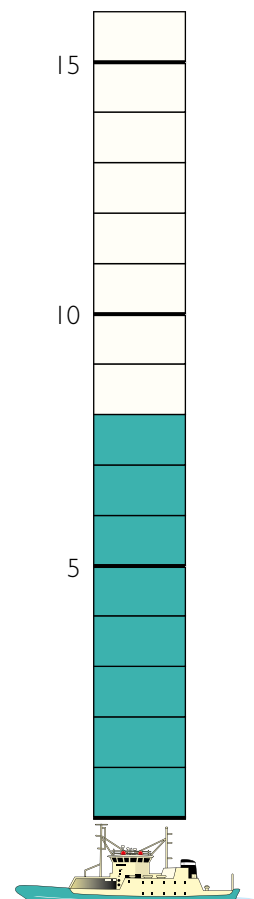

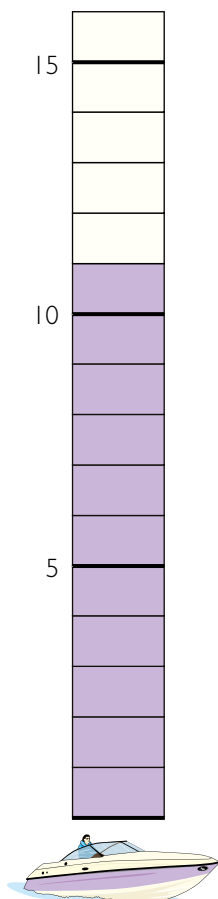
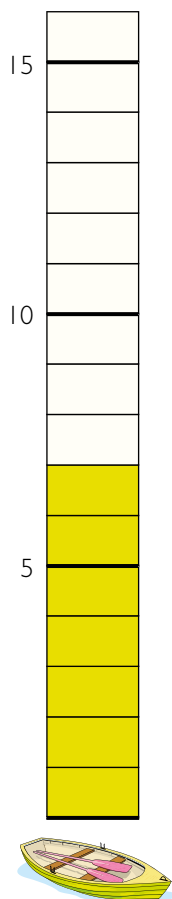
[.] Man gellie? Lohkh.



Mejnie gellemes giehteleminie? _____

Mejnie vaenemes giehteleminie? _____

[·] Man gellie? Lohkh.



Man gellie sigle-vinhtsh? _____

Man gellie vinhtsh Leah motovrh? _____

Man gellie sovkeme-vinhtsh jih sigle-vinhtsh tjaenghkies? _____

Man gellie jeenebh motovre-vinhtsh goh feerjah? _____

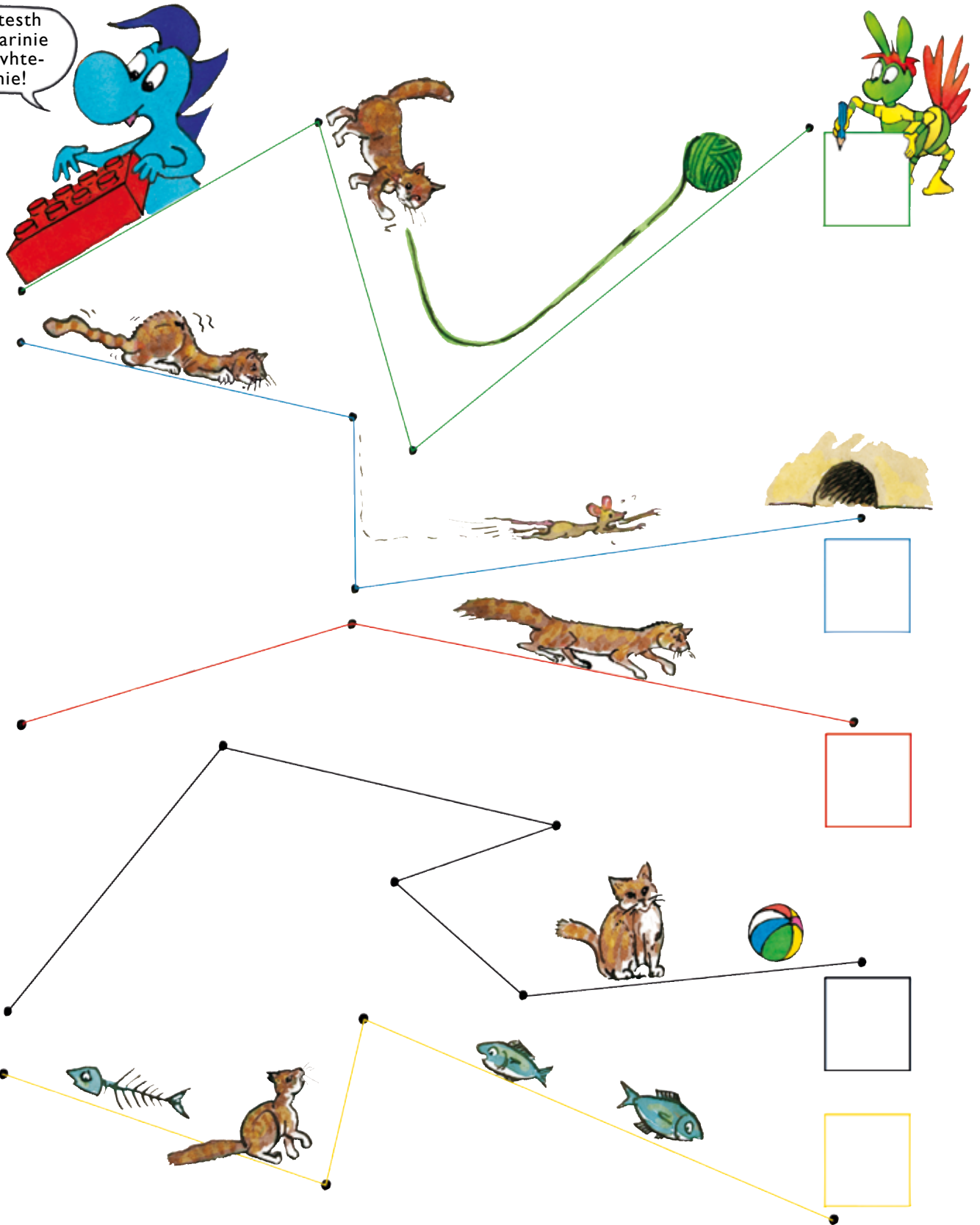
Man gellie vinhtsh tjaenghkies? _____

4


GÄHKOEH MÏETESTIDH

[·] Man gähkese gaahtoe njaaka?

Mïetesth dagkarinie skaavhteginie!




[·] Veeshm gâhkoen mietie.

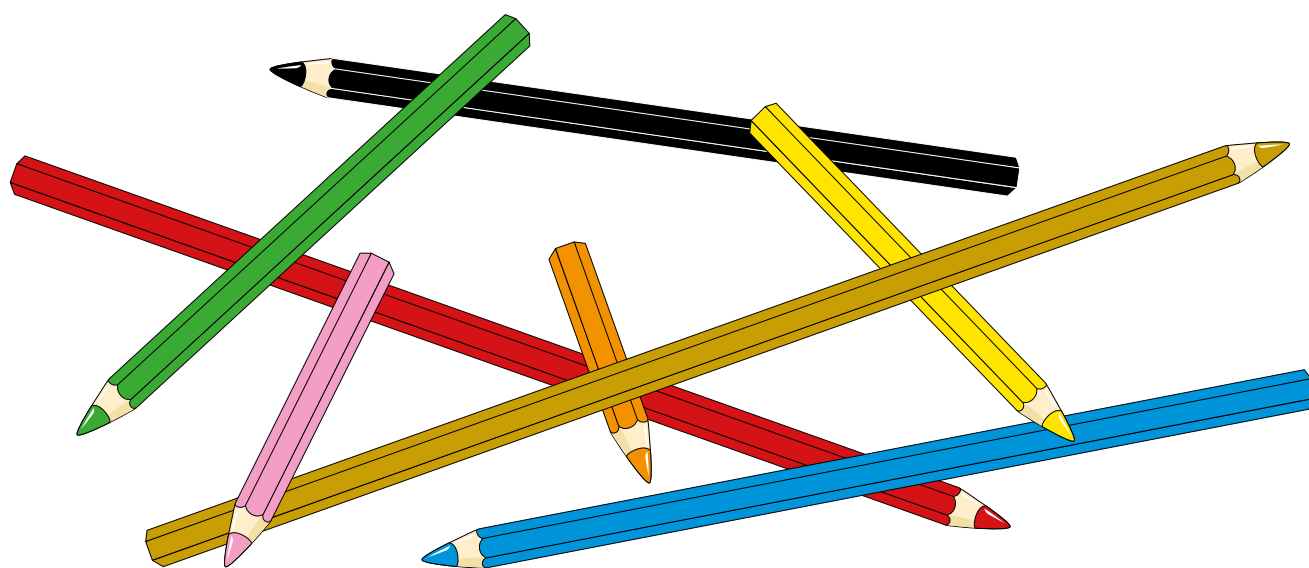


Dihthe kruana mubpie guhkemes.

Dihthe tjeehpes guhkemes.

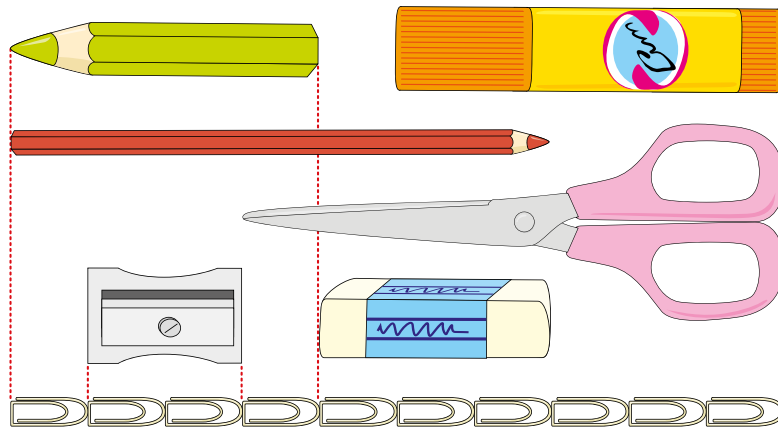


			
1	2	3	4

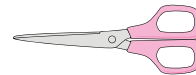



1	2	3	4	5	6	7	8

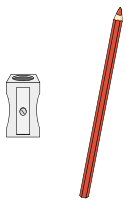
[.] Mïetesth gâhkojde.



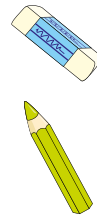
2



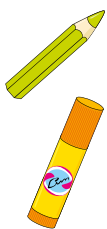
[..] Man guhkie ektesne?



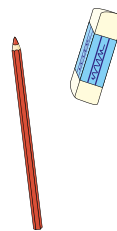
$$2 + \underline{\quad} = \underline{\quad}$$



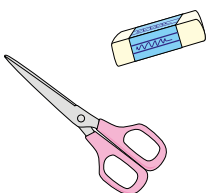
$$\underline{\quad} + \underline{\quad} = \underline{\quad}$$



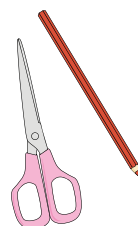
$$\underline{\quad} + \underline{\quad} = \underline{\quad}$$



$$\underline{\quad} + \underline{\quad} = \underline{\quad}$$



$$\underline{\quad} + \underline{\quad} = \underline{\quad}$$



$$\underline{\quad} + \underline{\quad} = \underline{\quad}$$

[·] Dãeredh væhtide jìh guvvedh haemide.
Gaavnh gånkoem haemien bijre.


2↑ 5→ 4↓ 2← 1↓ 3← 3↑

Dihthe minngemes lea golme bæjjese.

Dellie leam riejjies.

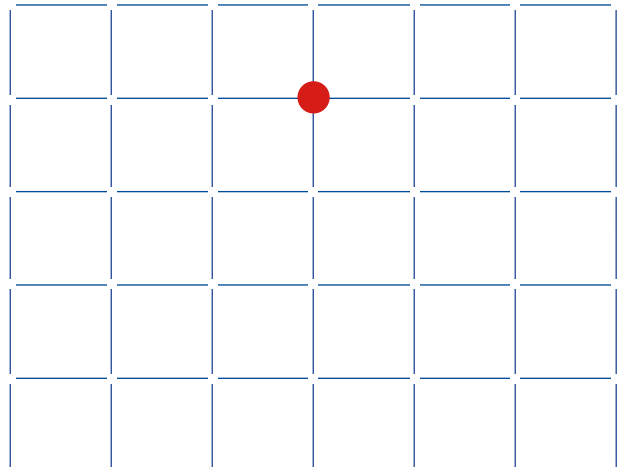
Gånkoe haemien bijre lea 20

3→ 1↓ 2→ 3↓ 5← 4↑



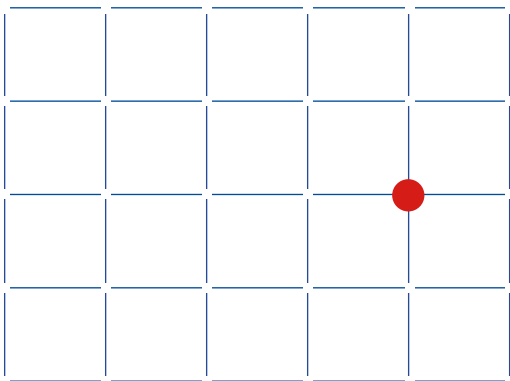
Gånkoe haemien bijre lea _____

3← 2↓ 2→ 2↓ 4→ 5↑ 3← 1↓




Gånkoe haemien bijre lea _____

1→ 2↑ 2← 4↓ 3← 2↑ 4→



Gånkoe haemien bijre lea _____

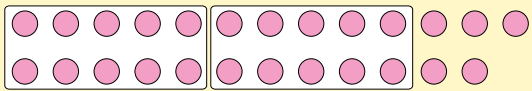
3↓ 6→ 2↑ 2← 2↑ 1→ 1↓ 5←



Gånkoe haemien bijre lea _____

5 TAALH TAALESE 100

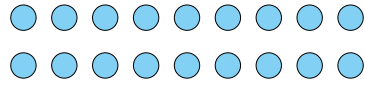
[·] Man gellie? Juekieh lähkaginie jìh aktaginie.




25

20 5

2 lähkegh jìh 5 aktegh




_____ lähkegh jìh _____ aktegh

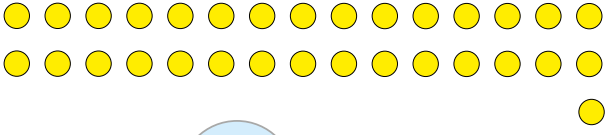


23

_____ lähkegh jìh _____ aktegh




_____ lähkegh jìh _____ aktegh



31

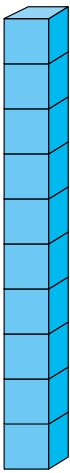
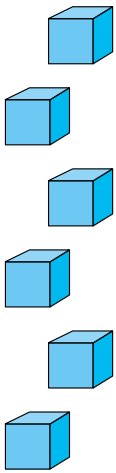
_____ lähkegh jìh _____ aktegh

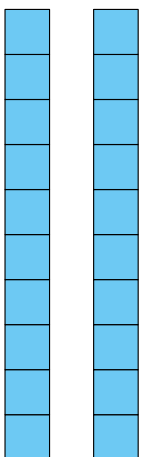
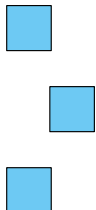


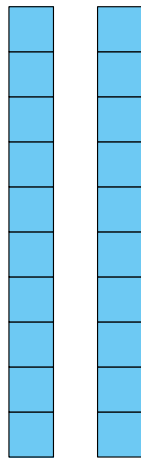
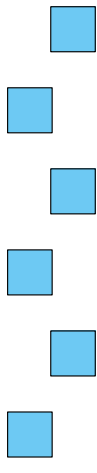
_____ lähkegh jìh _____ aktegh


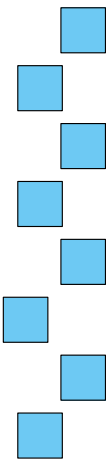
* Gievledh luhkien jìh luhkien bijre. Tjaelieh dellie dam lähkoem dan plaave geavlàn jìh vierhtiem lähkagijstie jìh aktagijstie, dej veelkes gievlide. Ryöknh minngemes man gellie lähkegh jìh aktegh jìh tjaelieh vaastoem dejtie sievide.


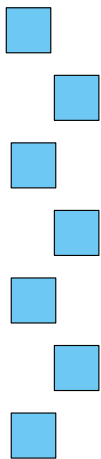
[·] Man gellie l hkegh j h aktegh?


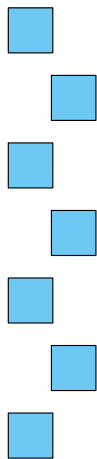
L�hkegh	Aktegh
	
_____	_____

L�hkegh	Aktegh
	
_____	_____

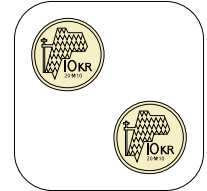

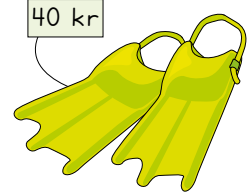
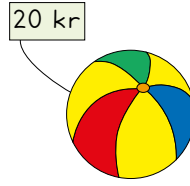
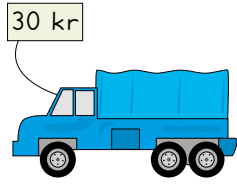
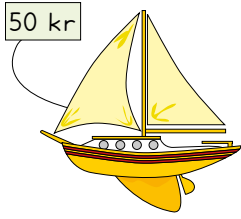
L�hkegh	Aktegh
	
_____	_____

L�hkegh	Aktegh
	
_____	_____

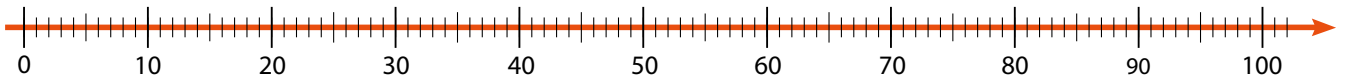
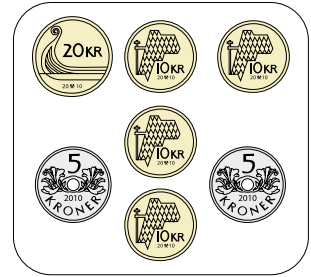
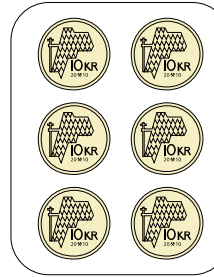
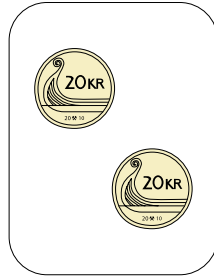

L�hkegh	Aktegh
	
_____	_____

L�hkegh	Aktegh
	
_____	_____

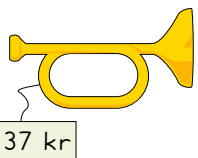
[·] Darjoeh sievh riektes tjåanghkan.




[·] Darjoeh sievh taale-sievese.



[·] Guvvedh beetnegh jìh tjaelieh taalh.

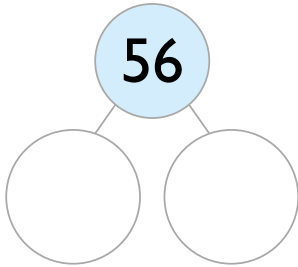


Låhkegh	Aktegh
_____ kr	

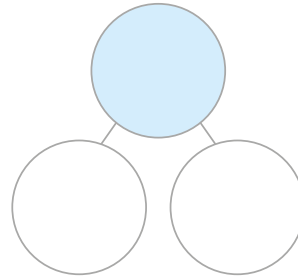


Låhkegh	Aktegh
_____ kr	

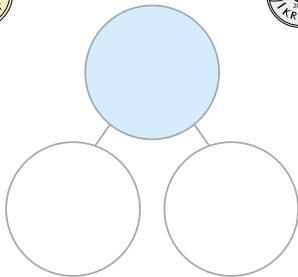
[.] Man gellie krávnah?



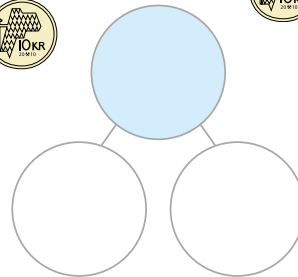

___ l hkegh j h ___ aktegh



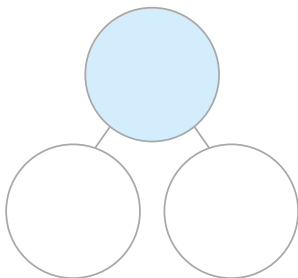
___ l hkegh j h ___ aktegh



___ l hkegh j h ___ aktegh

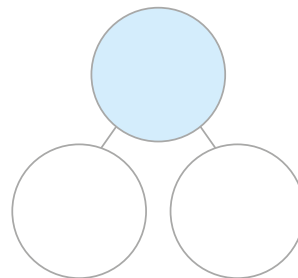


___ l hkegh j h ___ aktegh

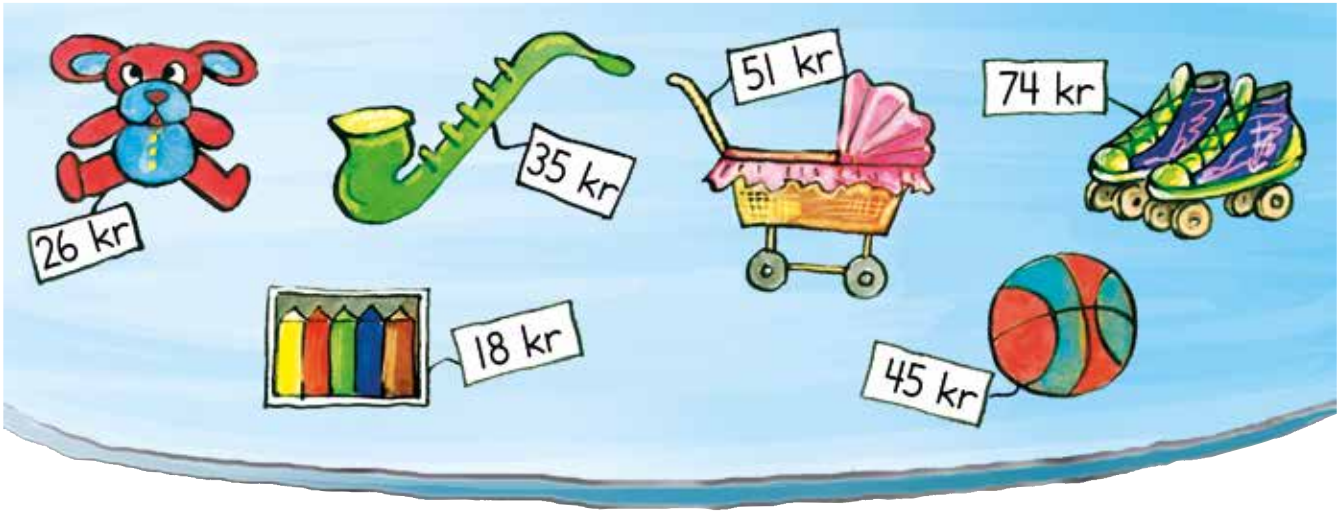


___ l hkegh j h ___ aktegh


Veeljh j jtje.



___ l hkegh j h ___ aktegh



[.] Guvvedh krávnide jñh tjaelieh taalide.



26


20

6


10 1 1

10 1 1


1 1




○




51



○




○





○


[·] Gusnie jeenemes? Gievledh taalen bijre.












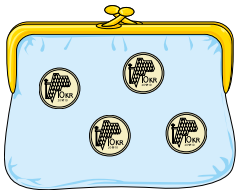






















[·] Man jeene?



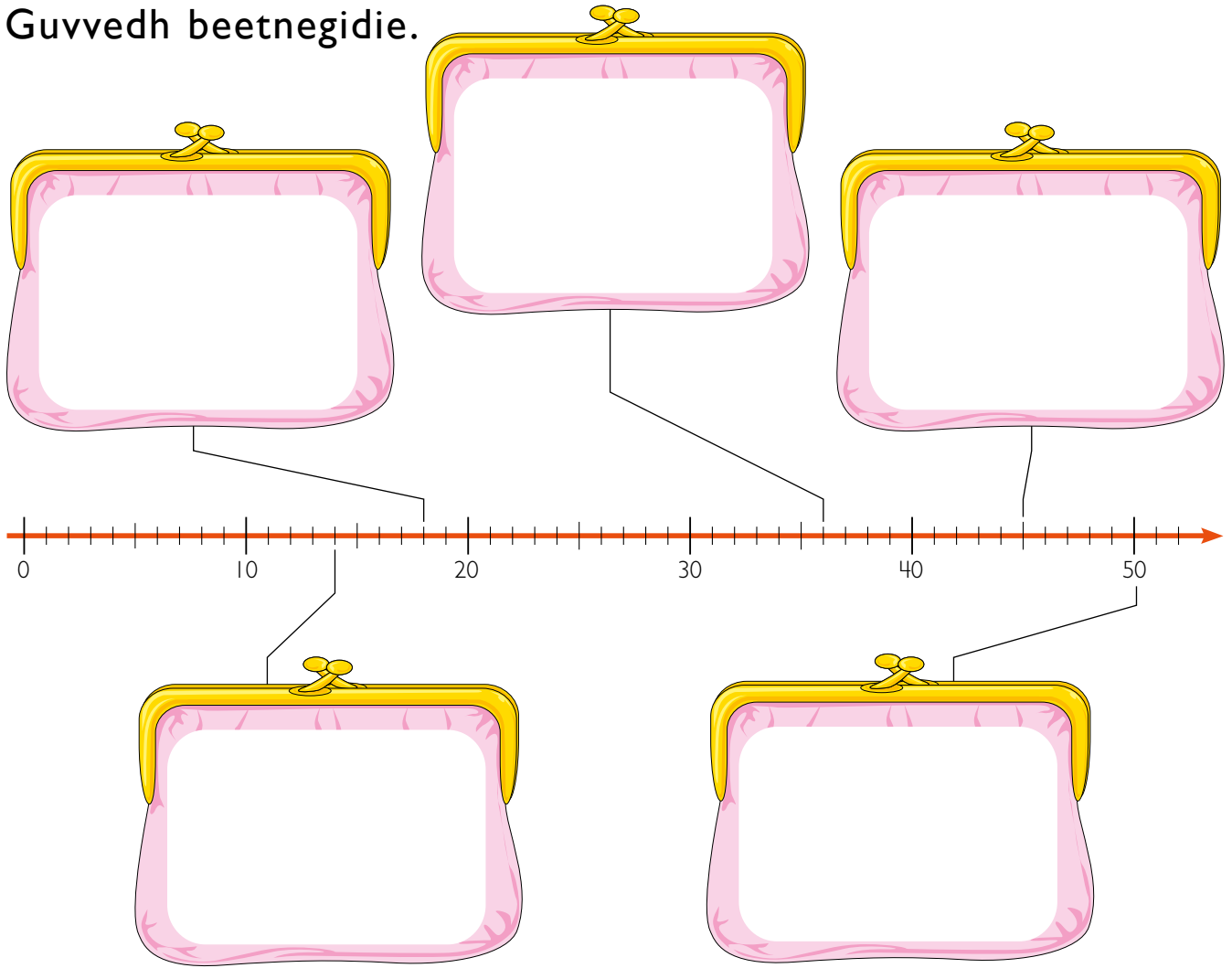




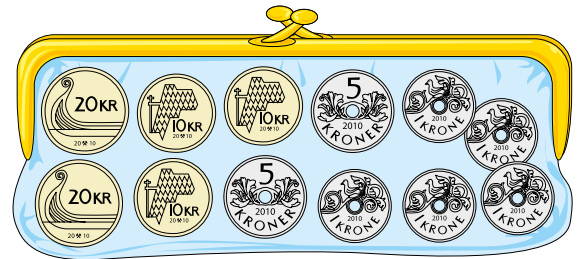


Tjaelieh taalide guktie gaevnjieruktien mietie tjeevtieh.

[.] Guvvedh beetnegidie.



[.] Magkerh kravnajgumie maahtah maeksedh?



40 kr =


40 kr =

40 kr =

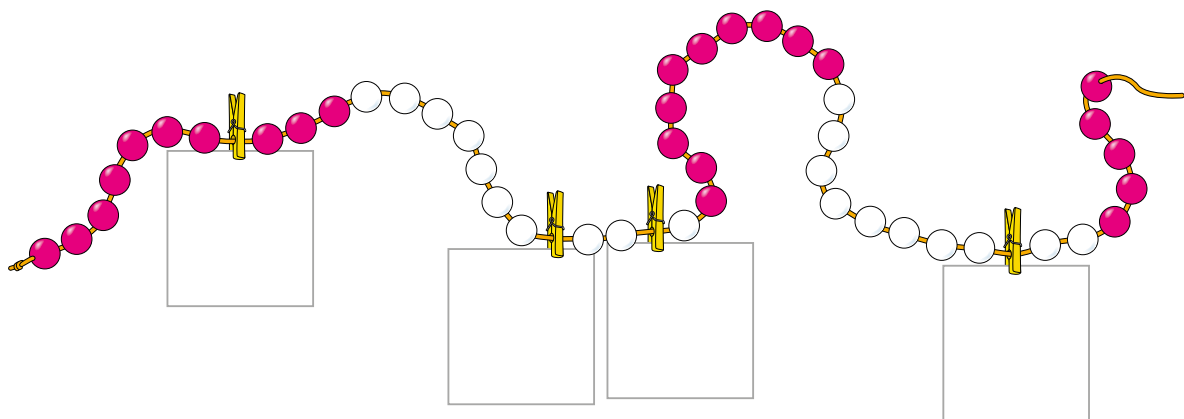
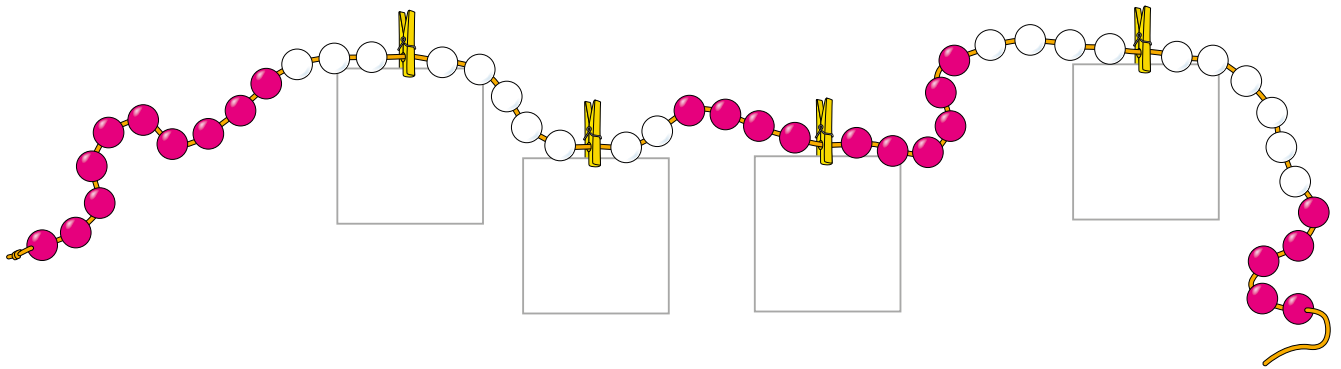
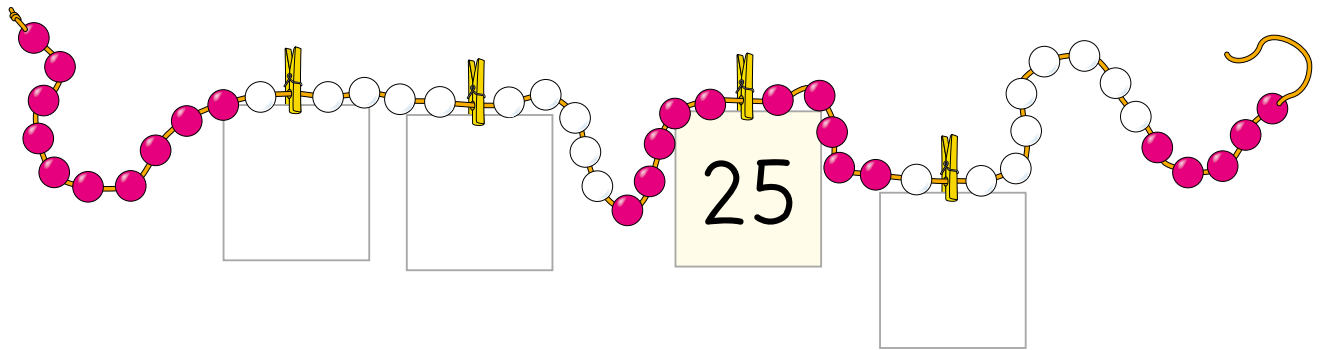
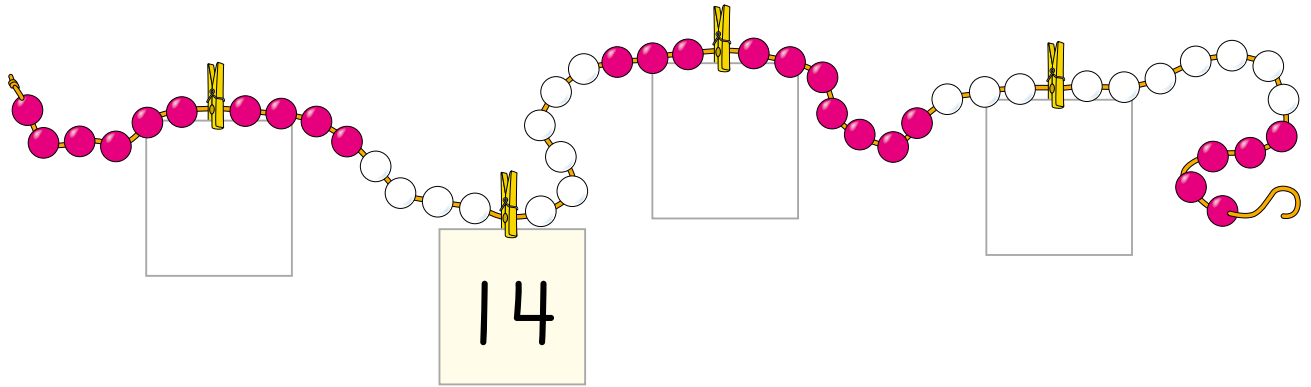
40 kr =

40 kr





[.] Man gellie gearketjh?



[.] Gusnie mahte dah taalh taale-sievesne. Darjoeh sievh.

8

13

32

24



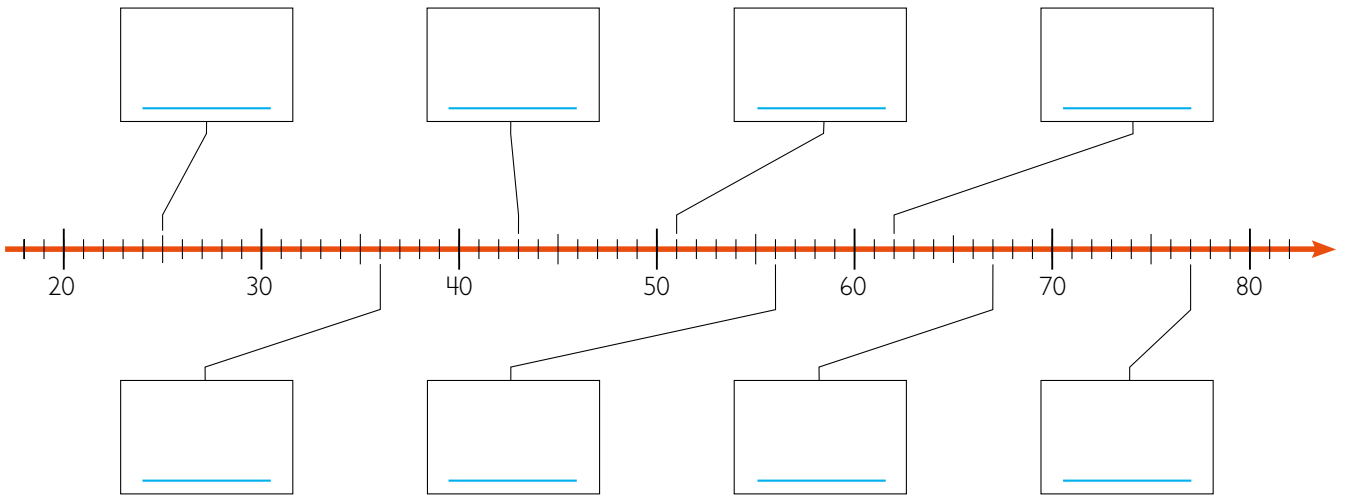
17

2

34

43

[.] Tjaelieh taalide.



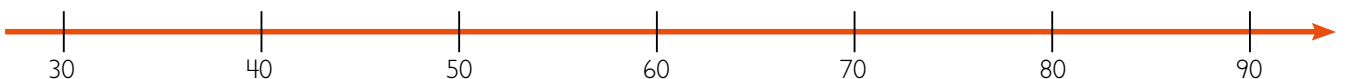
[.] Gusnie mahte dah taalh taale-sievesne. Darjoeh sievh.

35

52

61

69




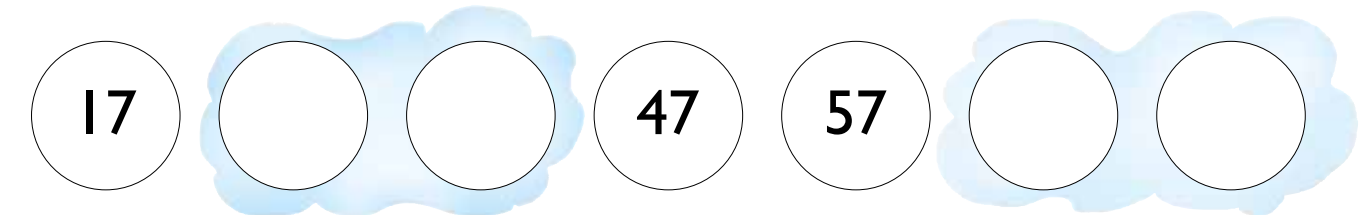



38

44


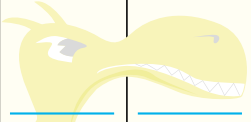

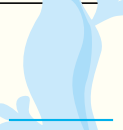




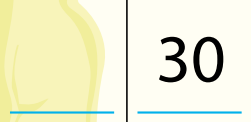

















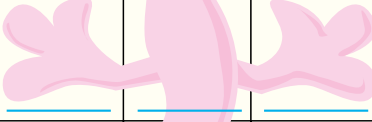






73

85

[.] Tjælieh dejtie mubpide taalide.



[·] Mij taalide haemiej duakan tjiekedamme?

1	2	3	4		6	7	8		
11		13	14		16	17	18		20
21	22		24		27		30		
				35		37			
41	42		44			48	49		
51	52		54	55	56		58	59	
61			64		66		69	70	
71		73			77		79	80	
81		83	84		86	87		89	90
91	92	93	94		96	97	98	99	100

[·] Tjaelieh taalh rovhtide.


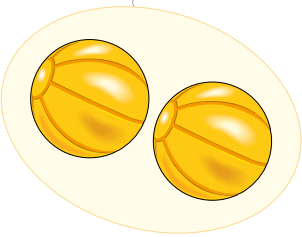

46									
				59		75			

[.] Man dovres stääke-gaevnieh?

30 kr

30 kr

40 kr





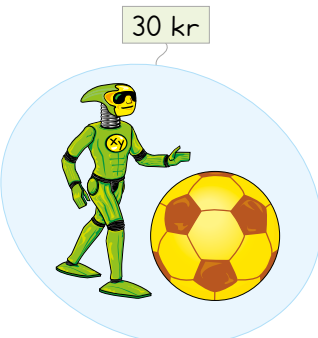




[.] Man dovres stääke-gaevnieh?

30 kr

60 kr

70 kr

50 kr








6 PLUSSE JIH MIJNUSE

[.] Man jeene ektesne?

$$36 + 3 = \underline{\quad}$$

30 6

$$22 + 6 = \underline{\quad}$$

○ ○

$$43 + 6 = \underline{\quad}$$

○ ○

$$94 + 4 = \underline{\quad}$$

○ ○

○ ○

$$64 + 3 = \underline{\quad}$$

○ ○

$$52 + 3 = \underline{\quad}$$

○ ○

$$41 + 5 = \underline{\quad}$$

○ ○

$$37 + 2 = \underline{\quad}$$

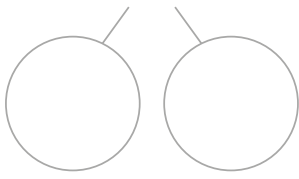
○ ○

$$83 + 4 = \underline{\quad}$$

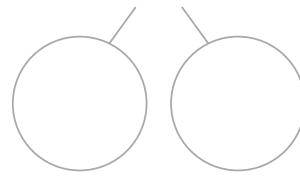
○ ○

[·] Man jeene ektesne?

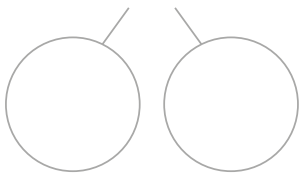
$31 + 6 = \underline{\quad}$



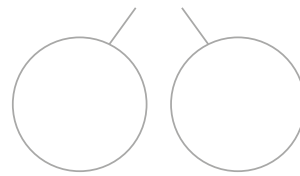
$42 + 7 = \underline{\quad}$



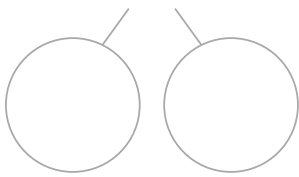
$52 + 5 = \underline{\quad}$



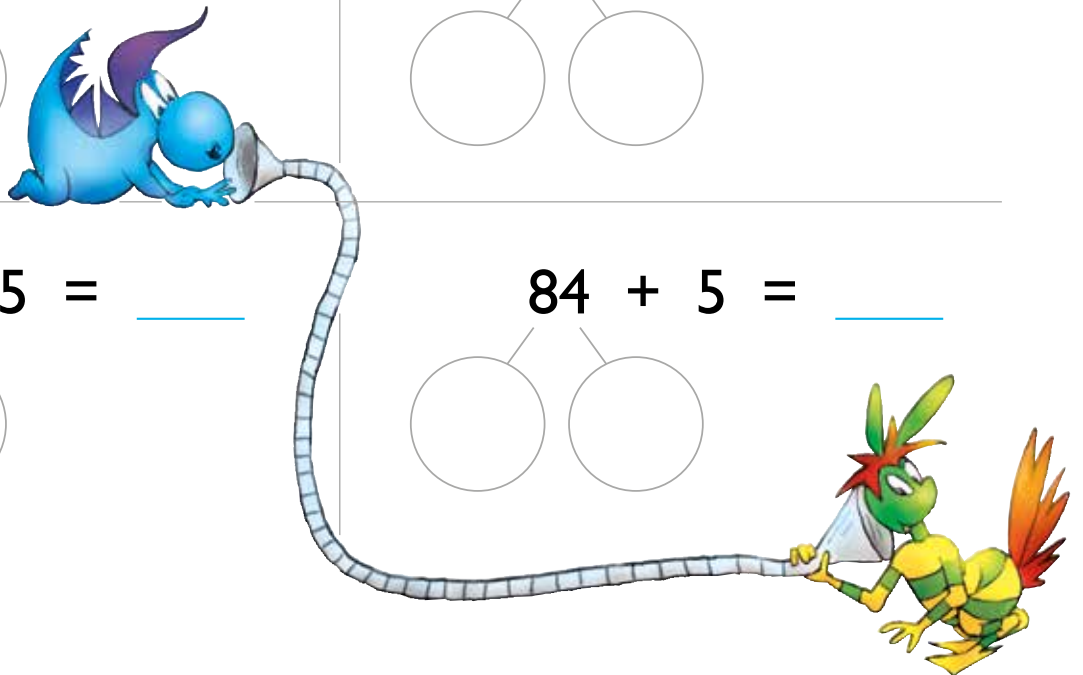
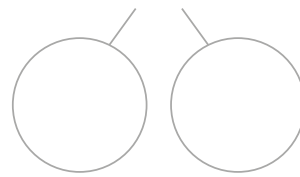
$63 + 3 = \underline{\quad}$



$72 + 5 = \underline{\quad}$



$84 + 5 = \underline{\quad}$



[·] Ryöknedh.

$33 + 5 = \underline{\quad}$

$15 + 2 = \underline{\quad}$

$34 + 4 = \underline{\quad}$

$51 + 4 = \underline{\quad}$

$24 + 5 = \underline{\quad}$

$82 + 6 = \underline{\quad}$

$47 + 2 = \underline{\quad}$

$93 + 6 = \underline{\quad}$

$73 + 5 = \underline{\quad}$

$62 + 5 = \underline{\quad}$

$71 + 7 = \underline{\quad}$

$56 + 3 = \underline{\quad}$

$81 + 8 = \underline{\quad}$

$53 + 4 = \underline{\quad}$

$82 + 7 = \underline{\quad}$

[·] Man jeene ektesne?

$$\begin{array}{r} 25 + 8 = \\ \swarrow \quad \searrow \\ 20 + 5 + 8 = \underline{33} \end{array}$$




Manne 25 juakam.
Dellie $20 + 13 = 33$
åadtjoem.

$$\begin{array}{r} 25 + 8 = \\ \swarrow \quad \searrow \\ 25 + 5 + 3 = \underline{33} \end{array}$$

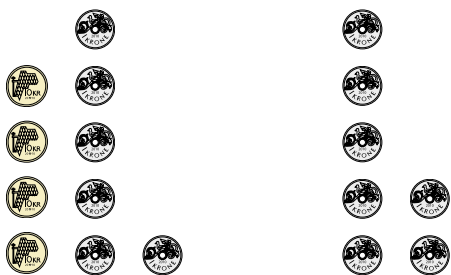


Manne 8 juakam.
Dellie $30 + 3 = 33$
åadtjoem.



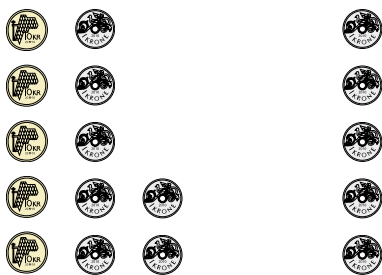
$$49 + 5 =$$

$$\underline{\quad} + \underline{\quad} + \underline{\quad} = \underline{\quad}$$



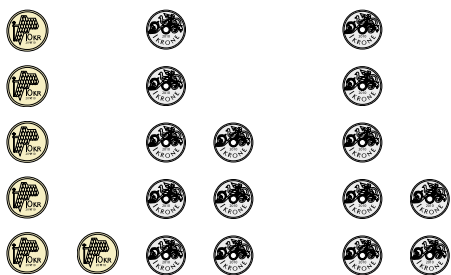
$$46 + 7 =$$

$$\underline{\quad} + \underline{\quad} + \underline{\quad} = \underline{\quad}$$



$$57 + 5 =$$

$$\underline{\quad} + \underline{\quad} + \underline{\quad} = \underline{\quad}$$



$$68 + 7 =$$

$$\underline{\quad} + \underline{\quad} + \underline{\quad} = \underline{\quad}$$

[·] Ryöknedh.

$16 + 8 =$

$\underline{\quad} + \underline{\quad} + \underline{\quad} = \underline{\quad}$

$25 + 7 =$

$\underline{\quad} + \underline{\quad} + \underline{\quad} = \underline{\quad}$

$19 + 9 =$

$\underline{\quad} + \underline{\quad} + \underline{\quad} = \underline{\quad}$

$37 + 7 =$

$\underline{\quad} + \underline{\quad} + \underline{\quad} = \underline{\quad}$

$36 + 7 =$

$\underline{\quad} + \underline{\quad} + \underline{\quad} = \underline{\quad}$

$47 + 5 =$

$\underline{\quad} + \underline{\quad} + \underline{\quad} = \underline{\quad}$

$28 + 8 =$

$\underline{\quad} + \underline{\quad} + \underline{\quad} = \underline{\quad}$

$65 + 9 =$

$\underline{\quad} + \underline{\quad} + \underline{\quad} = \underline{\quad}$

[··] Ryöknedh.

$37 + 8 = \underline{\quad}$

$44 + 8 = \underline{\quad}$

$36 + 5 = \underline{\quad}$

$53 + 9 = \underline{\quad}$

$87 + 5 = \underline{\quad}$

$69 + 7 = \underline{\quad}$

$78 + 8 = \underline{\quad}$

$48 + 7 = \underline{\quad}$

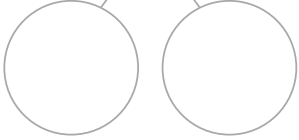
$78 + 5 = \underline{\quad}$

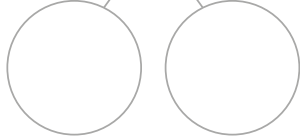
$62 + 9 = \underline{\quad}$

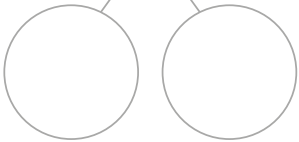
$58 + 3 = \underline{\quad}$

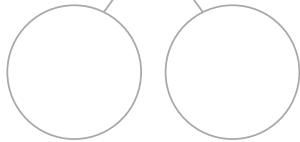
$84 + 8 = \underline{\quad}$

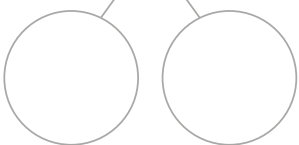
[·] Juekieh lähkegi jìh aktegi mietie. Ryöknedh.

$$36 - 3 = \underline{\quad}$$


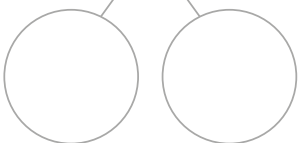
$$55 - 2 = \underline{\quad}$$


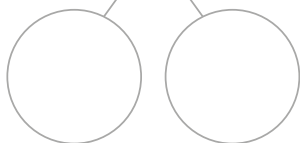
$$64 - 3 = \underline{\quad}$$



$$38 - 4 = \underline{\quad}$$



$$27 - 5 = \underline{\quad}$$




$$19 - 7 = \underline{\quad}$$


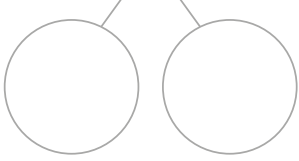
$$48 - 6 = \underline{\quad}$$


$$37 - 3 = \underline{\quad}$$


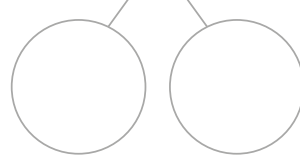
$$69 - 8 = \underline{\quad}$$


[.] Ryöknedh.

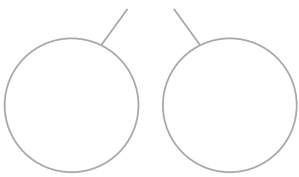
$56 - 4 = \underline{\quad}$



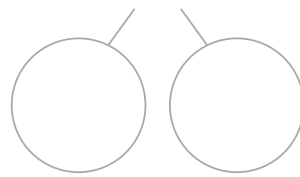
$49 - 6 = \underline{\quad}$



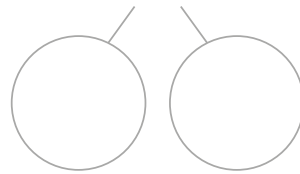
$68 - 6 = \underline{\quad}$



$87 - 7 = \underline{\quad}$



Manne daesnie!



[.] Ryöknedh.

$25 - 3 = \underline{\quad}$

$89 - 4 = \underline{\quad}$

$26 - 6 = \underline{\quad}$

$38 - 4 = \underline{\quad}$

$78 - 6 = \underline{\quad}$

$48 - 7 = \underline{\quad}$

$59 - 6 = \underline{\quad}$

$57 - 4 = \underline{\quad}$

$95 - 5 = \underline{\quad}$

$63 - 2 = \underline{\quad}$

$99 - 5 = \underline{\quad}$

$75 - 5 = \underline{\quad}$

$77 - 5 = \underline{\quad}$

$38 - 7 = \underline{\quad}$

$99 - 9 = \underline{\quad}$


[.] Man jeene aajmojne?



8 kr

$22 - 8 = \underline{14}$


2 6



7 kr

$43 - 7 = \underline{\quad}$


○ ○



9 kr

$35 - 9 = \underline{\quad}$


○ ○



8 kr

$26 - 8 = \underline{\quad}$


○ ○



6 kr

$31 - 6 = \underline{\quad}$


○ ○



7 kr

$44 - 7 = \underline{\quad}$

○ ○



5 kr

$52 - 5 = \underline{\quad}$

○ ○

* Datne edtjh evtiedidh subtraksjovnem ussjedidh akten göökte-siffere taaleste jih akten akte-siffere taaleste orre-låhkaginie Juekieh dam akte-siffere taalem juktie aelhkebe sjædta vaastoem ryöknedh.

[·] Ryöknedh.

$56 - 4 = \underline{\quad}$

$49 - 6 = \underline{\quad}$

$38 - 4 = \underline{\quad}$

$38 - 6 = \underline{\quad}$

$87 - 7 = \underline{\quad}$

$47 - 6 = \underline{\quad}$

$45 - 4 = \underline{\quad}$

$79 - 5 = \underline{\quad}$

$88 - 5 = \underline{\quad}$

[··]

$21 - 4 = \underline{\quad}$

$23 - 7 = \underline{\quad}$

$74 - 9 = \underline{\quad}$

$32 - 5 = \underline{\quad}$

$51 - 3 = \underline{\quad}$

$84 - 7 = \underline{\quad}$

$43 - 6 = \underline{\quad}$

$62 - 8 = \underline{\quad}$

$92 - 7 = \underline{\quad}$

[·:] Ryöknedh. Tjaelieh baakojde rovhtide seamma taaligujmie guktie vaastoe vöölemes daennie bielesne.

$27 + 20 = \underline{\quad}$ E

$52 + 8 = \underline{\quad}$ P

$58 + 8 = \underline{\quad}$ U

$21 + 20 = \underline{\quad}$ M

$18 + 30 = \underline{\quad}$ H

$18 + 60 = \underline{\quad}$ S

$55 + 6 = \underline{\quad}$ L

$27 + 40 = \underline{\quad}$ S

$39 + 10 = \underline{\quad}$ T

$10 + 42 = \underline{\quad}$ A

$49 + 9 = \underline{\quad}$ N

41	52	58	58	47

60	61	66	67	78	47	41

41	52	52	48	49	52	41



[·] Ryöknedh. Darjoeh sievh fierhtede bienjeste riektes aajhterasse.



$$55 - 6 = \underline{\quad}$$



$$43 - 7 = \underline{\quad}$$



$$44 - 5 = \underline{\quad}$$



$$95 - 50 = \underline{\quad}$$



$$89 - 40 = \underline{\quad}$$



$$35 - 6 = \underline{\quad}$$



$$52 - 3 = \underline{\quad}$$



$$89 - 60 = \underline{\quad}$$



$$49 - 4 = \underline{\quad}$$



$$58 - 9 = \underline{\quad}$$



$$86 - 50 = \underline{\quad}$$



$$69 - 30 = \underline{\quad}$$



$$40 - 4 = \underline{\quad}$$



$$47 - 8 = \underline{\quad}$$



$$38 - 9 = \underline{\quad}$$



49



45



39

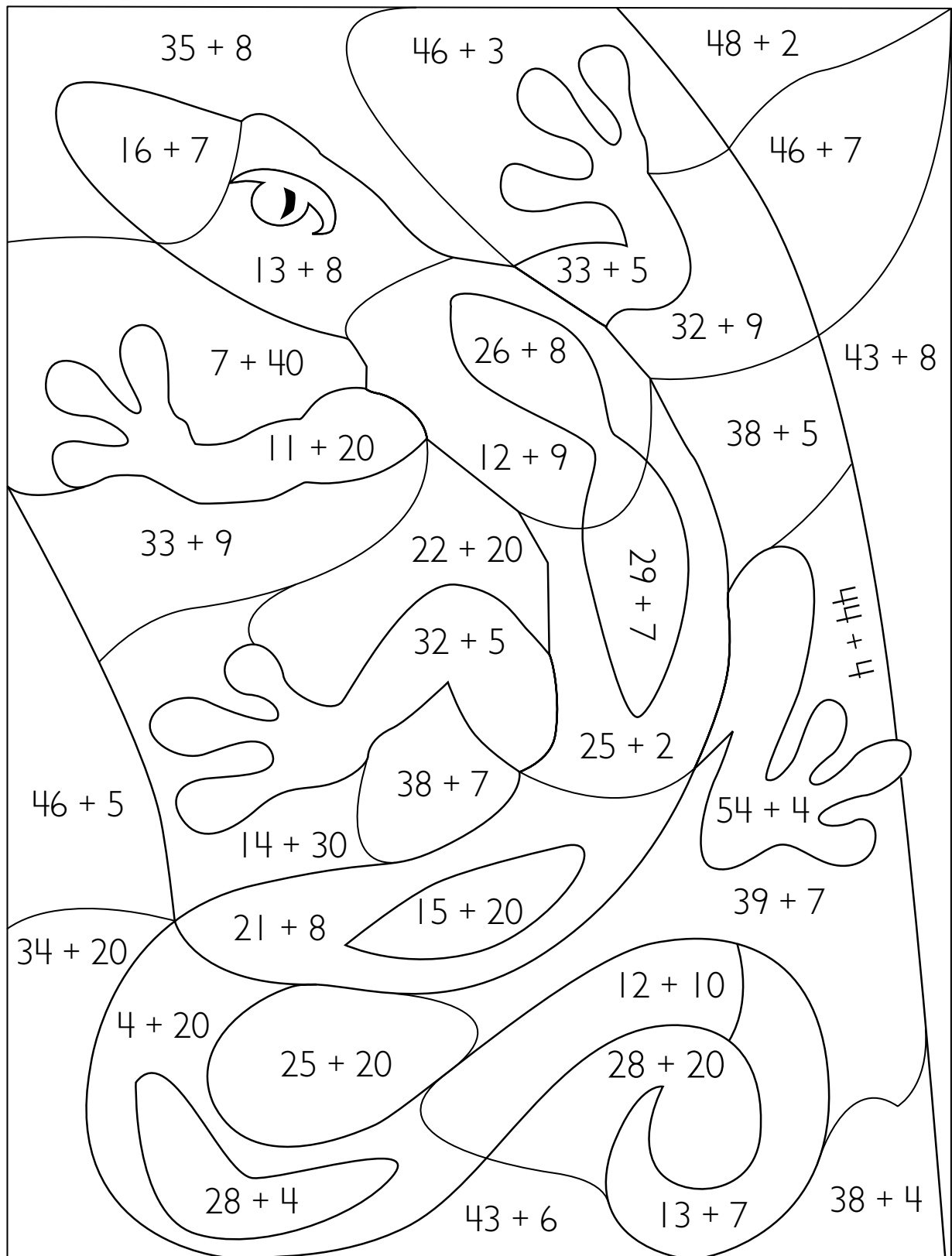


36



29

[·] Ryöknedh. Klaeredh.




20–29


30–39


40–49


50–59

7 TĪJE

[.] Darjoeħ sievh askeste nommerasse.

NJOKTJE

RUFFIE

MIËTSKE

TSĪENGELE

GOEVTE

VOERHTJE

SNALTJE

SUEHPEDE

GOEVE

SKIEREDE

GOLKE

RAHKA

- 1.
- 2.
- 3.
- 4.
- 5.
- 6.
- 7.
- 8.
- 9.
- 10.
- 11.
- 12.

[.] Voerhtje dihte _____ aske.

Ruffie dihte _____ aske.

Suehpede dihte _____ aske.

Golke dihte _____ aske.

Miëtske dihte _____ aske.

Rahka dihte _____ aske.

[·] Tjælieh biejjide riektes gaevnjieruktien mietie.

Daate baahtode
gaevnjieruktie.



GASKEVÅHKOE
AEJLEGE
MÅANTA
BEARJADAHKE
DÆJSTA
LAVVARDAHKE
DUARSTA

Daesnie edtjh måanta tjæledh.







[··] Tjælieh biejjide mah fââtesieh.





Jåktan	Daanbien	Jirreden
DUARSTA		
	DÆJSTA	
	AEJLEGE	
		DUARSTA

[.] Guvvide gaevnjieruktien mietie nommerdahta.


 	 
 	 


[.] Darjoeh sievh riektes tæjmose.


			
<input type="text"/>	<input type="text" value="4"/>	<input type="text"/>	<input type="text" value="9"/>


			
<input type="text" value="bielie 12"/>	<input type="text" value="bielie 9"/>	<input type="text"/>	<input type="text" value="bielie 1"/>


[·] Mennie mieresne tsåahka?























[··] Guvvedh væjserh.



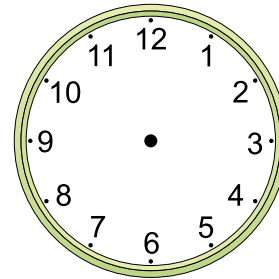
1




8




4




10




bielie 1



bielie 8



bielie 4



bielie 10

[.] Nommerdehtieh guvvide gaevnjieruktien mietie.



[.] Vuartesjh guvvide jih vaestedh gyhtjelasside.

Mij tsåahka bielie 4 heannede? _____





Gusnie gaahtoe tsåahka 5? _____

Maam bienje tsåahka 4 dorje? _____





Maam gaahtoe tsåahka 7 dorje? _____

[.] Guvvedh væjserh jñh tjaelieh tæjmojde.


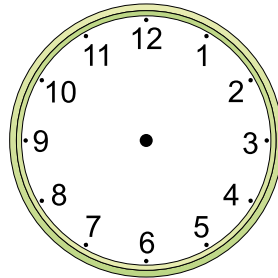


Mennie mieresne tsåahka göökte tæjmosne?







[.] Mennie mieresne tsåahka golme tæjmosne?




[.] Mennie mieresne tsåahka bielie tæjmoen åvtelen?











8 SYMMETRIJE

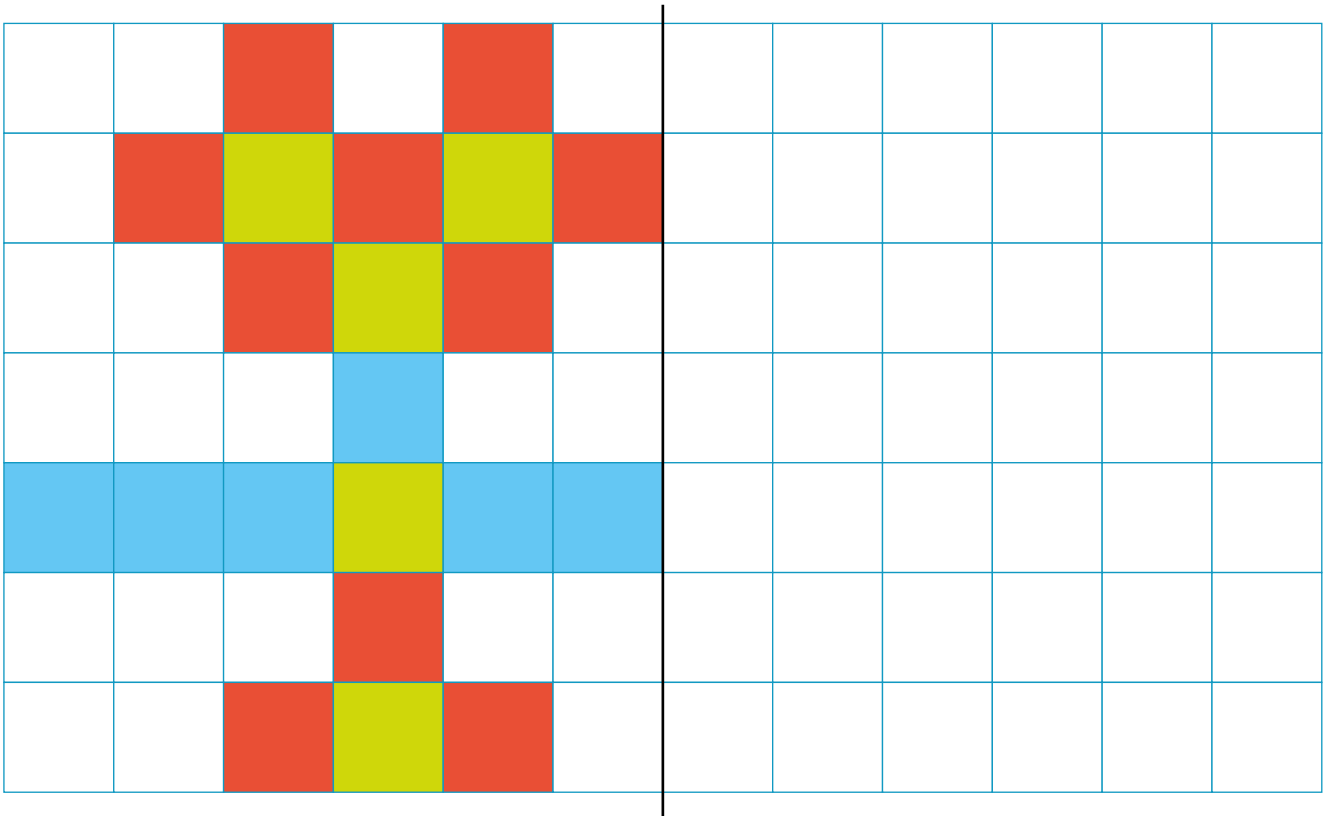
[.] Klaeredh seamma-laakan symmetrije-sieven gáabpatjähkide bielide.




[.] Guvvedh symmetrije-sievh.



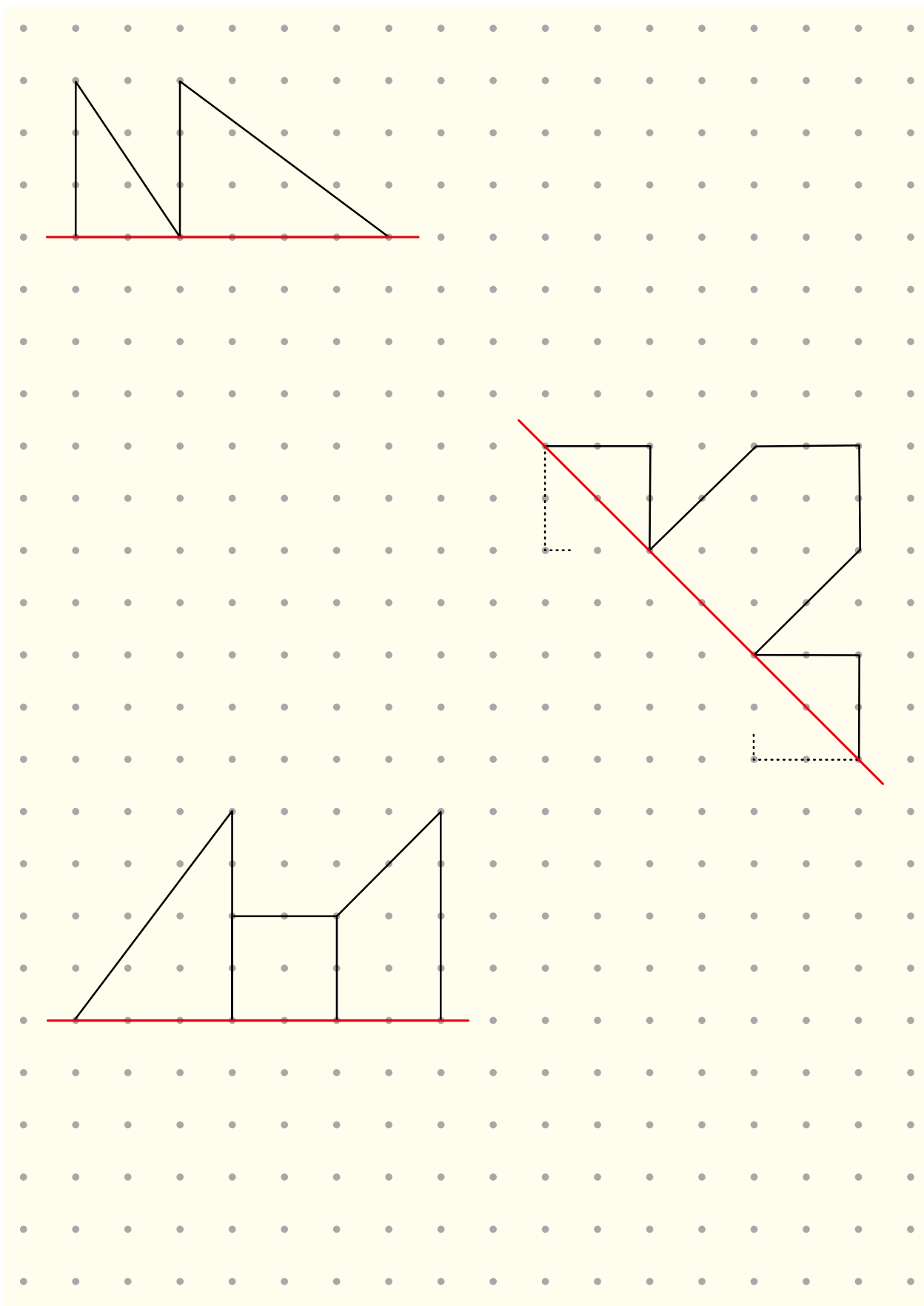
[·] Guelmedh haemim symmetrije-sieven bijre.



[·] Darjoeh jijtjedh goerem.



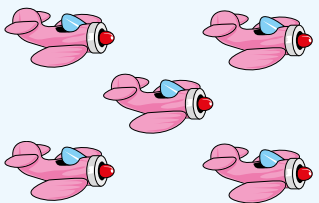
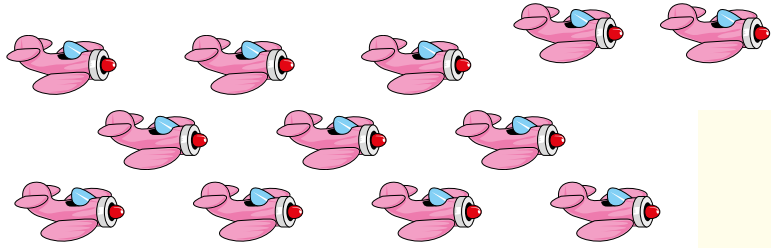
[·] Guelmedh haemide symmetrije-sieven bijre.







9



GEARTOME JÏH BIELIEDIMMIE - PAARRE-TAALH JÏH ODDE-TAALH



[.] Gievledh guektien giërth jeenebi bijre.
Tjælieh vaastoem.

5			_____
---	---	--	-------

8			_____
---	---	---	-------


6			_____
---	---	--	-------

9			_____
---	---	--	-------

30			_____
----	---	--	-------


[·] Gaavnh guektien giërth.

15 kr




_____ kr

25 kr




_____ kr

32 kr




_____ kr

45 kr



_____ kr

60 kr



_____ kr

[·] Juekieh göökten guajman. Klaeredh bæjngolds-vaarjojde.


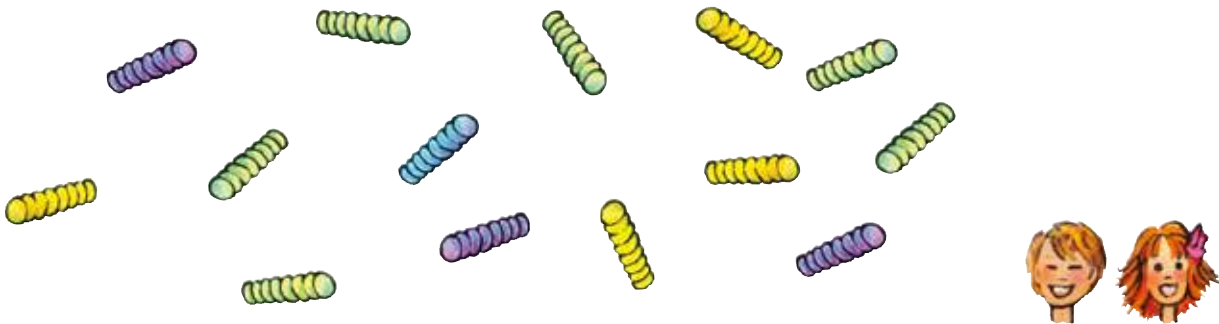


6 spïelijh, _____ fierhtene gujmesne.



12 spïelijh, _____ fierhtene gujmesne.


[·] Man gellie fiere-guhte åådtje?



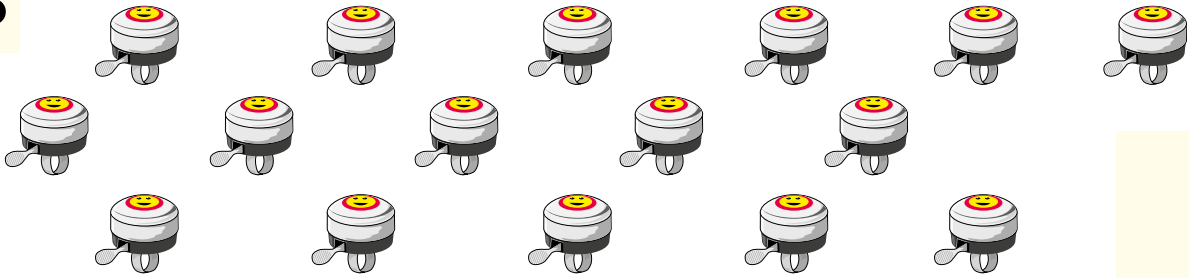
10 gååhtah, _____ fiere-guhtese.

[.] Gievledh lehkien bijre. Tjaelieh vaastoem.


8




16




24



18



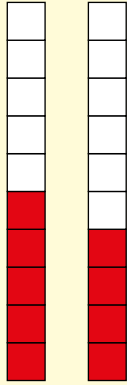
22



Dah
seamma
jolle sjiđtin.

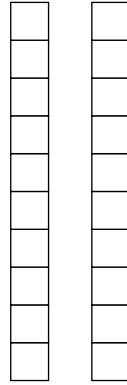


9

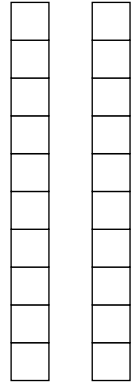


paarre-taalh/odde-taalh

12

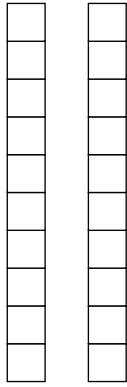


20



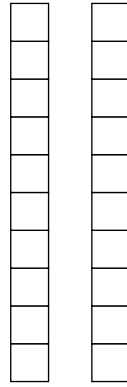
paarre-taalh/odde-taalh

13



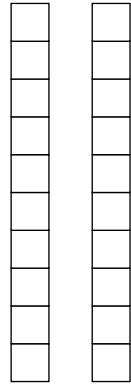
paarre-taalh/odde-taalh

16



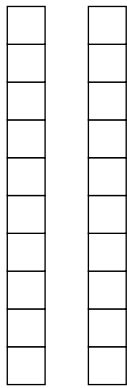
paarre-taalh/odde-taalh

18



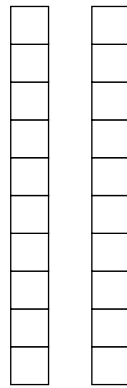
paarre-taalh/odde-taalh

19



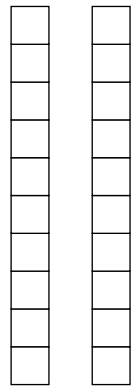
paarre-taalh/odde-taalh

15



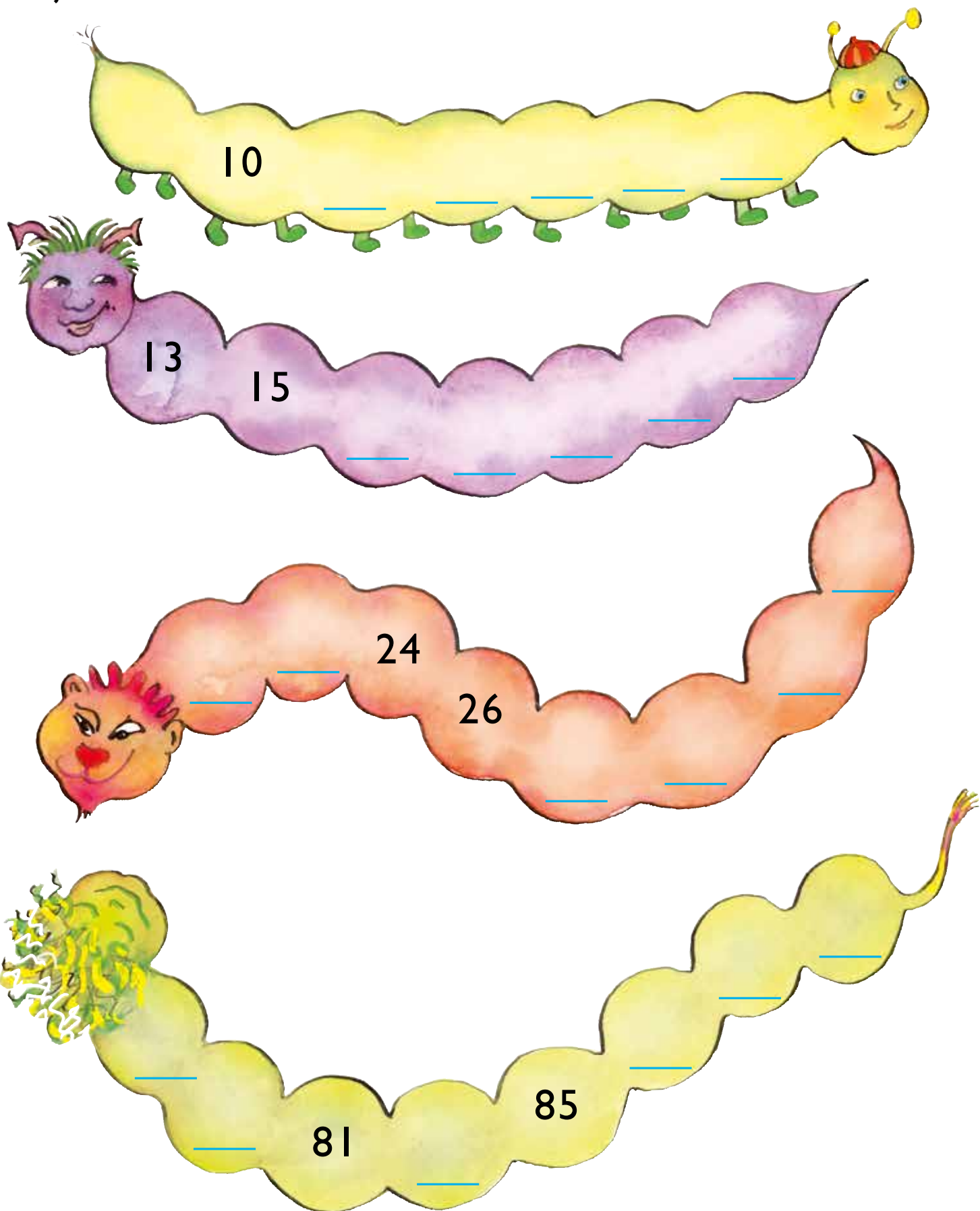
paarre-taalh/odde-taalh

17



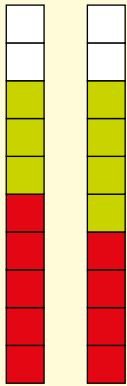
paarre-taalh/odde-taalh

[.] Tjælieh taalide mah fååtesieh.



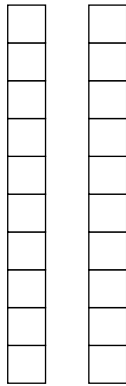
[·] Klaeredh riektes l hcoe rovth.

$$9 + 7 = \underline{16}$$



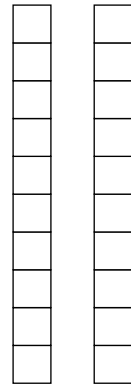
paarre-taalh/odde-taalh

$$10 + 4 = \underline{\quad}$$



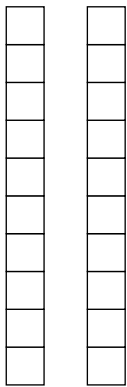
paarre-taalh/odde-taalh

$$8 + 5 = \underline{\quad}$$



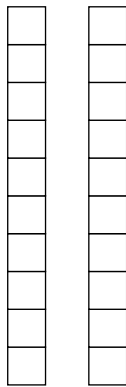
paarre-taalh/odde-taalh

$$6 + 12 = \underline{\quad}$$



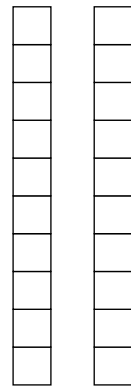
paarre-taalh/odde-taalh

$$8 + 9 = \underline{\quad}$$



paarre-taalh/odde-taalh

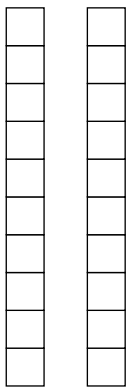
$$5 + 11 = \underline{\quad}$$



paarre-taalh/odde-taalh

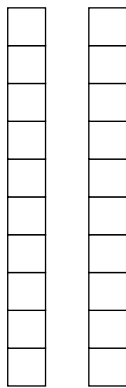
[··] Veeljh taalh jijtje.

$$\underline{\quad} + \underline{\quad} = \underline{\quad}$$



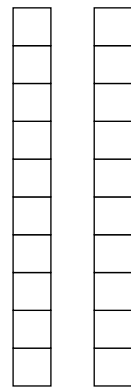
paarre-taalh/odde-taalh

$$\underline{\quad} + \underline{\quad} = \underline{\quad}$$



paarre-taalh/odde-taalh

$$\underline{\quad} + \underline{\quad} = \underline{\quad}$$



paarre-taalh/odde-taalh

[·] Ryöknedh. Mejtie vaastoe paarre-taale jallh odde-taale?

$$11 + 5 = \underline{16}$$

paarre-taalh/odde-taalh

$$32 + 7 = \underline{\quad}$$

paarre-taalh/odde-taalh

$$18 + 4 = \underline{\quad}$$

paarre-taalh/odde-taalh

$$41 + 13 = \underline{\quad}$$

paarre-taalh/odde-taalh

$$23 + 6 = \underline{\quad}$$

paarre-taalh/odde-taalh

$$56 + 31 = \underline{\quad}$$

paarre-taalh/odde-taalh




















$$14 + 21 = \underline{\quad}$$

paarre-taalh/odde-taalh

$$23 + 25 = \underline{\quad}$$

paarre-taalh/odde-taalh

[·] Klaeredh odde-taalide.

		71	17	23	89	41	9	25		
		58	99	29	4	22	72	61	27	
		12	26	3	66	80	10	31	43	
		29	88	98	6	24	64	42	16	
		35	77	24	26	60	38	25	82	
		99	15	57	40	72	16	48	94	
		13	89	21	94	68	72	11	45	
										
		55	17	43	36	14	80	93	27	

[.] Juekieh beetnegidie seamma jeene spååreme-snurhkide.

30 kr

15 kr 15 kr

40 kr

_____ kr _____ kr

50 kr

_____ kr _____ kr

32 kr

_____ kr _____ kr

26 kr

_____ kr _____ kr

[·] Tjaelieh gaajhkh paarre-taalide 30 jñh 50 gaskem.

[··] Tjaelieh gaajhkh odde-taalide 50 jñh 70 gaskem.

[::] Mij guektien giërth?

8 16

22 _____

40 _____

10 _____

25 _____

50 _____

12 _____

14 _____

33 _____

20 _____

30 _____

45 _____

[::] Mij lehkìe?

10 _____

42 _____

46 _____

4 _____

24 _____

62 _____

12 _____

18 _____

82 _____

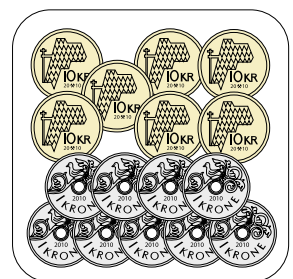

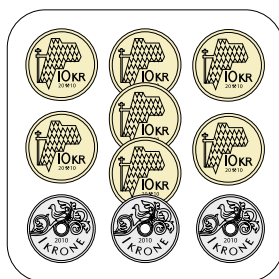
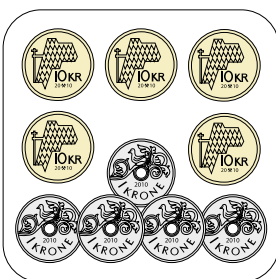
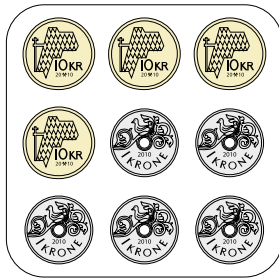
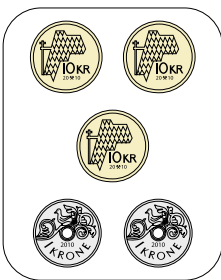
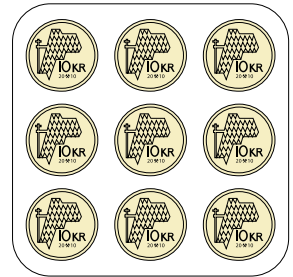
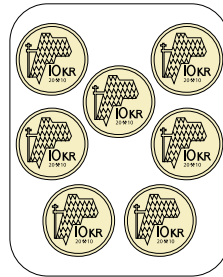
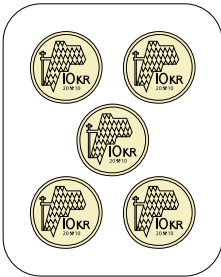
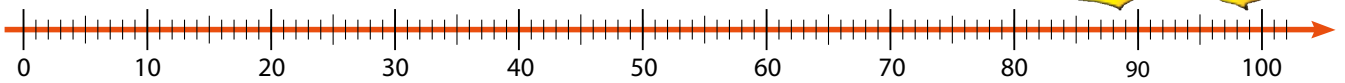
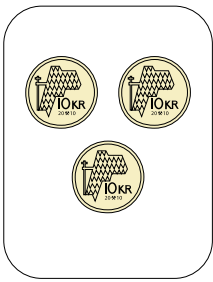
20 _____

30 _____

70 _____

10 RYÖKNEDIDH TAALESE 100

[·] Darjoeh sievh taale-sievese.



[·] Man gellie kråvnah ektesne?

$$50 + 20 = \textcircled{10} \textcircled{10} \textcircled{10} \textcircled{10} \textcircled{10} \quad \textcircled{10} \textcircled{10} = \underline{\hspace{2cm}} \text{ kr}$$

$$30 + 10 = \underline{\hspace{2cm}} = \underline{\hspace{2cm}} \text{ kr}$$

$$40 + 30 = \underline{\hspace{2cm}} = \underline{\hspace{2cm}} \text{ kr}$$

$$20 + 20 = \underline{\hspace{2cm}} = \underline{\hspace{2cm}} \text{ kr}$$

$$30 + 70 = \underline{\hspace{2cm}} = \underline{\hspace{2cm}} \text{ kr}$$

$$30 + 24 = \underline{\hspace{2cm}} = \underline{\hspace{2cm}} \text{ kr}$$

[·] Ryöknedh.

$$20 + 40 = \underline{\hspace{2cm}}$$

$$30 + 30 = \underline{\hspace{2cm}}$$

$$60 + 30 = \underline{\hspace{2cm}}$$

$$40 + 40 = \underline{\hspace{2cm}}$$

$$30 + 20 = \underline{\hspace{2cm}}$$

$$10 + 90 = \underline{\hspace{2cm}}$$

$$40 + 50 = \underline{\hspace{2cm}}$$

$$10 + 80 = \underline{\hspace{2cm}}$$

$$20 + 80 = \underline{\hspace{2cm}}$$

$$40 + 60 = \underline{\hspace{2cm}}$$

$$20 + 70 = \underline{\hspace{2cm}}$$

$$50 + 30 = \underline{\hspace{2cm}}$$

$$20 + 21 = \underline{\hspace{2cm}}$$

$$30 + 15 = \underline{\hspace{2cm}}$$

$$30 + 43 = \underline{\hspace{2cm}}$$

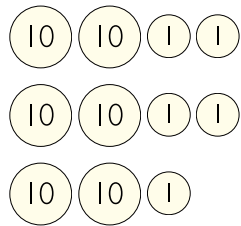
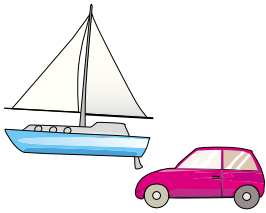
$$30 + 22 = \underline{\hspace{2cm}}$$

$$20 + 41 = \underline{\hspace{2cm}}$$


$$40 + 54 = \underline{\hspace{2cm}}$$



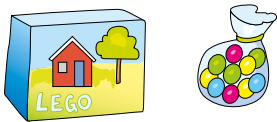
[·] Guvvedh beetnegidie jñh ryöknedh.



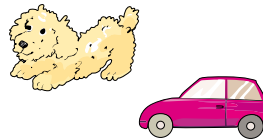
_____ + _____ = _____ kr




_____ + _____ = _____ kr




_____ + _____ = _____ kr



_____ + _____ = _____ kr

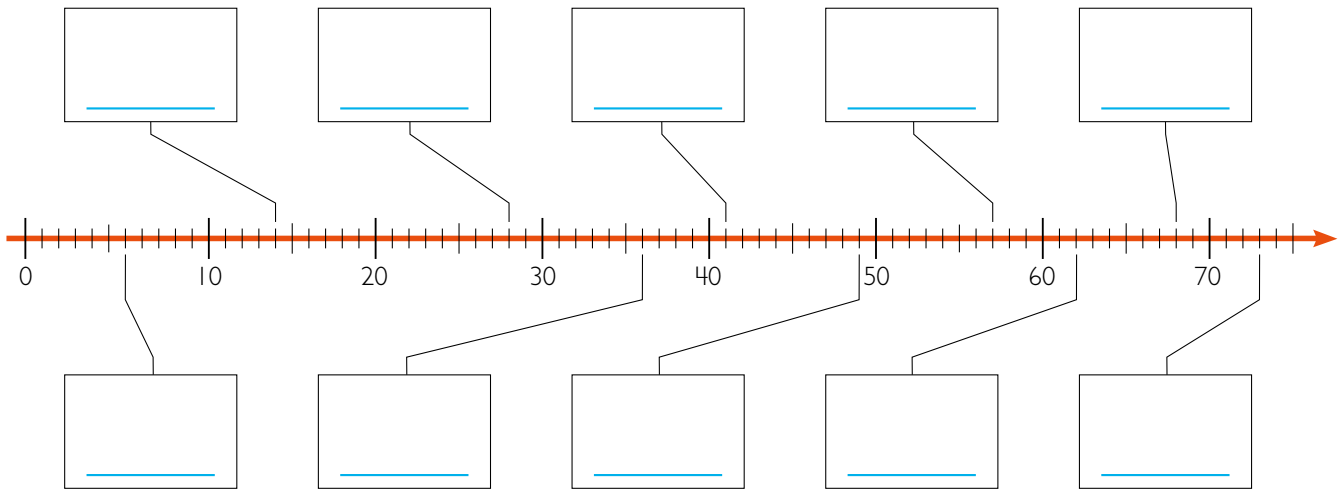


_____ kr



_____ + _____ = _____ kr

[·] Lohkh taale-sievem.



[··] Darjoeh sievh taale-sievese.

42 49 63 74 89



37 58 77 99 92

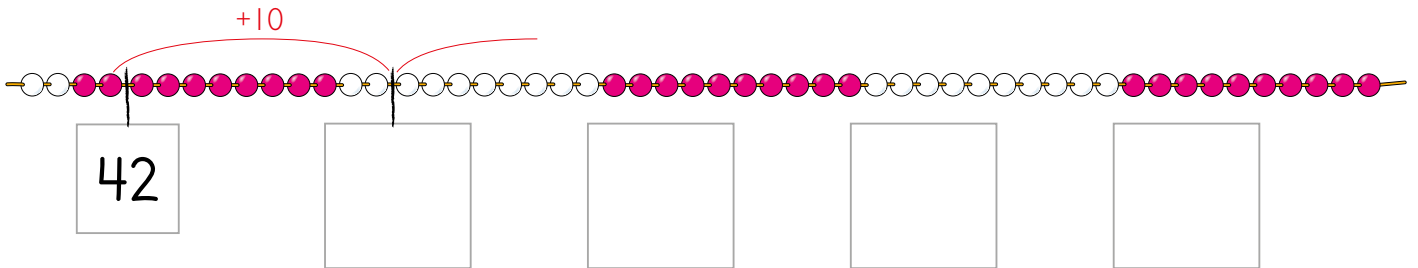
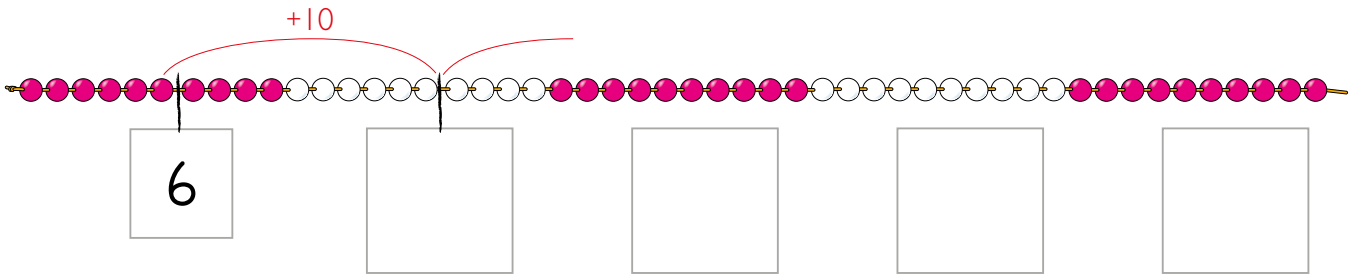
[···] Darjoeh sievh mahte dan riektes sæjjan taale-sievesne.

10 62 89

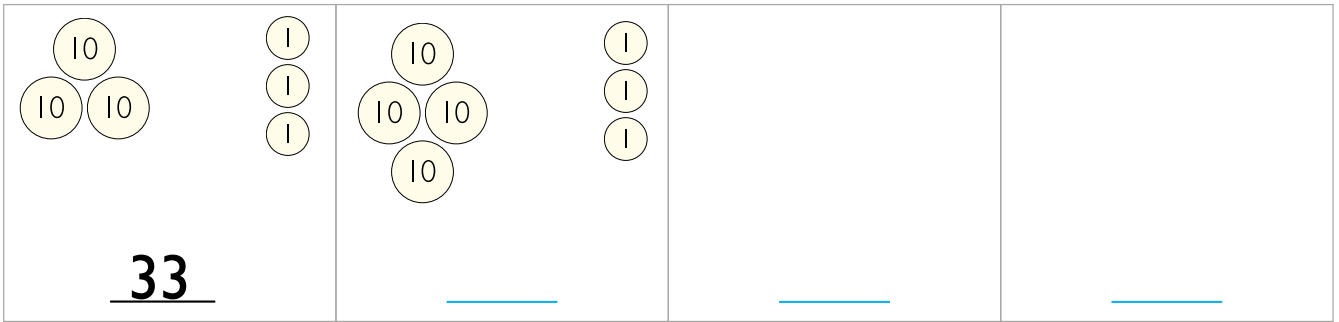


25 51 93

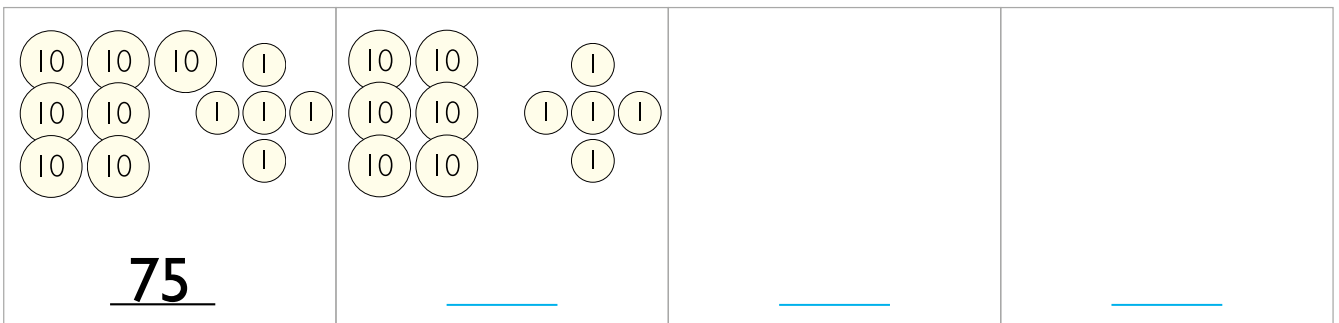
[·] Njulhtjh 10 fierhtene vâarosne.



[··] Biejh 10 krâvnah fierhtene vâarosne.



[··] Tramhkelh 10 krâvnah fierhtene vâarosne.



[··] Ryöknedh.

$24 + 10 = \underline{\quad}$

$32 + 20 = \underline{\quad}$

$68 - 10 = \underline{\quad}$

$34 + 10 = \underline{\quad}$

$14 + 20 = \underline{\quad}$

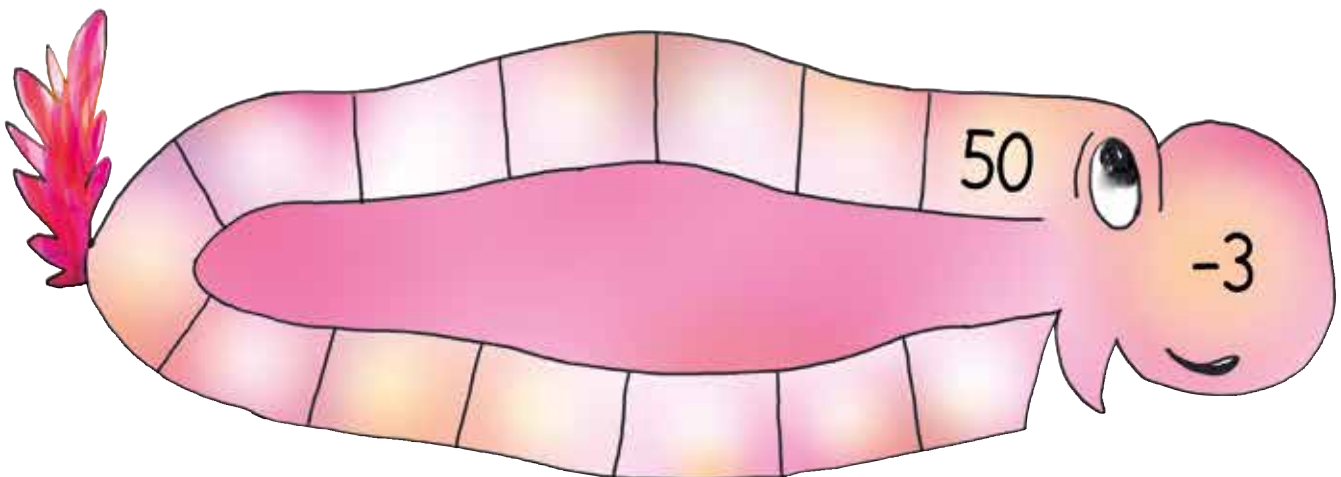
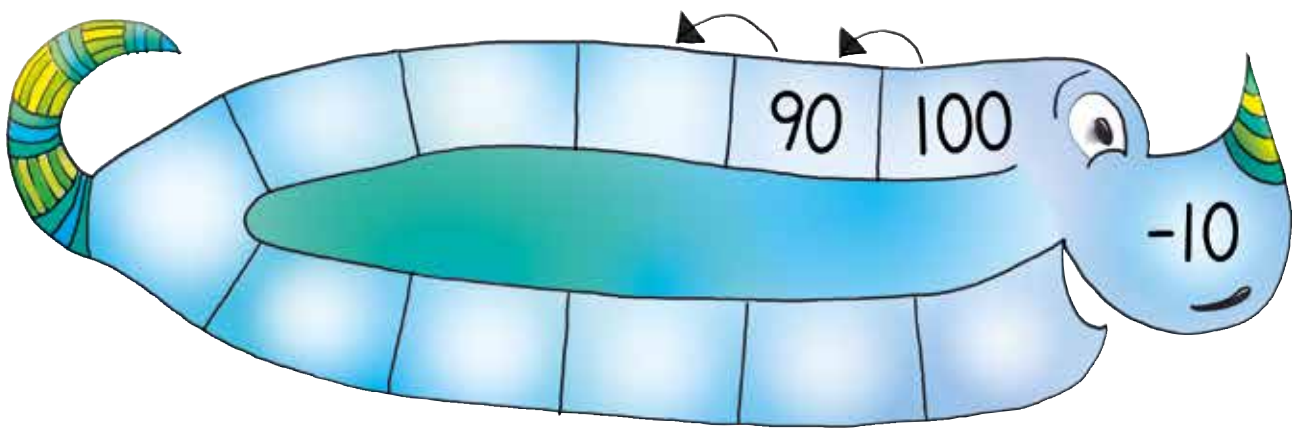
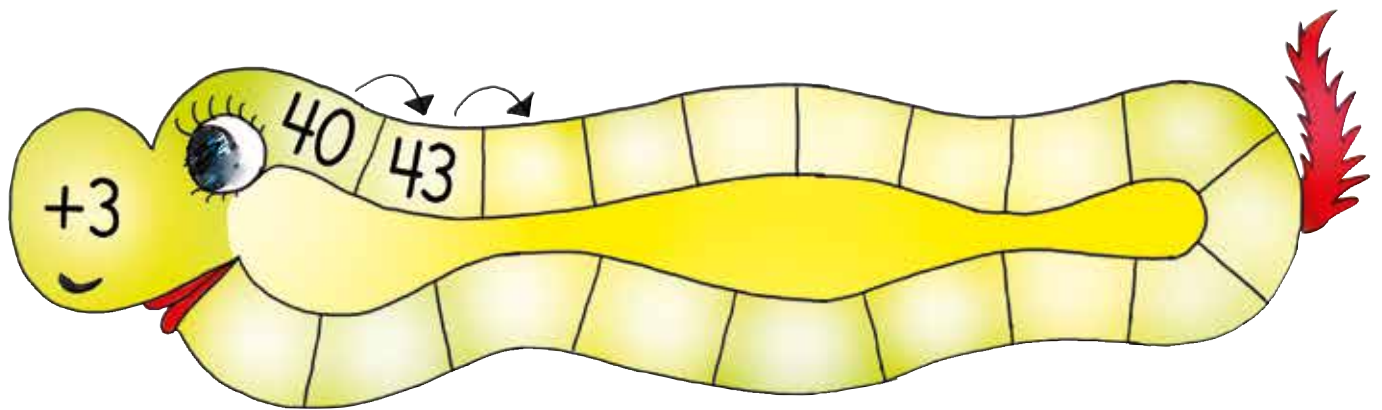
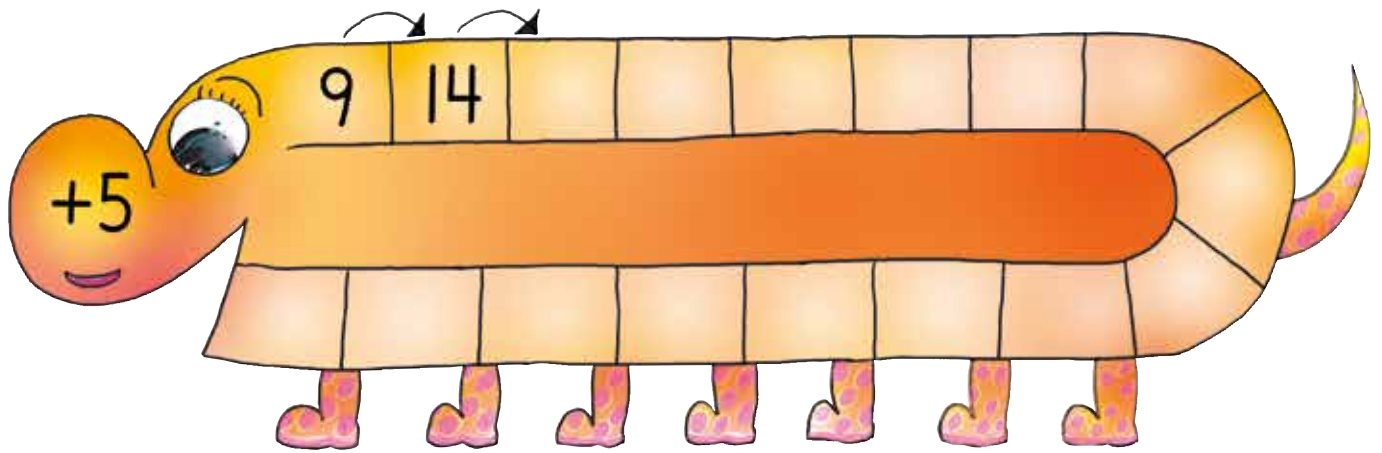
$52 - 10 = \underline{\quad}$

$89 + 10 = \underline{\quad}$

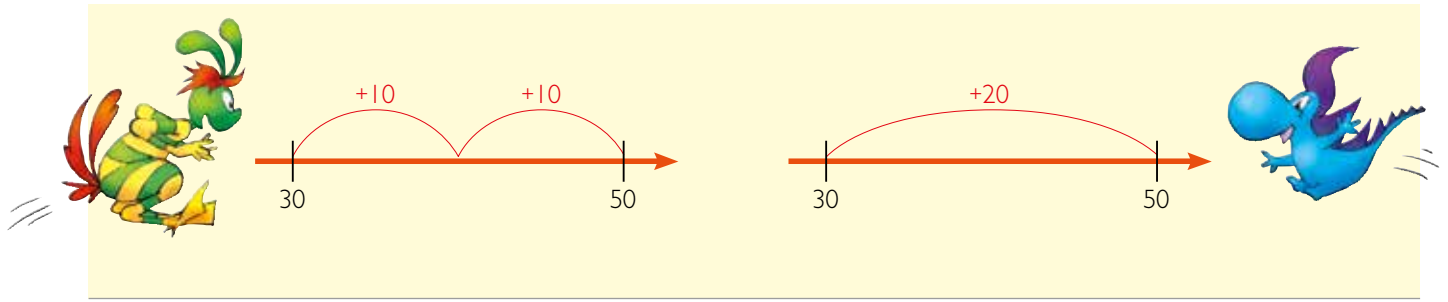
$53 + 20 = \underline{\quad}$

$35 - 10 = \underline{\quad}$

[.] Tjælieh taalh rovhtide.



[·] Njulhtjh gáaroes taale-síevesne. Tjaelieh vaastoem.



$$30 + 30 = \underline{\quad}$$



$$40 + 30 = \underline{\quad}$$



$$17 + 40 = \underline{\quad}$$

[·] Njulhtjh taale-síevesne. Tjaelieh vaastoem.



$$36 + 15 = \underline{\quad}$$



$$68 + 19 = \underline{\quad}$$

[·] Njulhtjh taale-sievesne. Tjaelieh vaastoem.

 $64 - 20 = \underline{\quad}$

 $75 - 40 = \underline{\quad}$

 $56 - 19 = \underline{\quad}$

 $81 - 43 = \underline{\quad}$

[··] Ryöknedh.

$9 + 20 = \underline{\quad}$

$25 + 30 = \underline{\quad}$

$51 - 20 = \underline{\quad}$

$19 + 20 = \underline{\quad}$

$82 + 11 = \underline{\quad}$

$65 - 30 = \underline{\quad}$

$21 + 30 = \underline{\quad}$

$57 + 12 = \underline{\quad}$

$77 - 50 = \underline{\quad}$

$16 + 30 = \underline{\quad}$

$54 + 21 = \underline{\quad}$

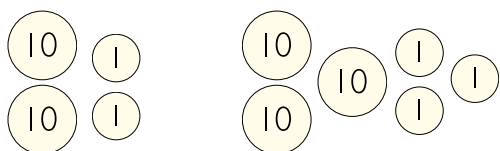
$89 - 31 = \underline{\quad}$

$15 + 40 = \underline{\quad}$

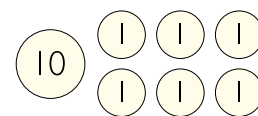
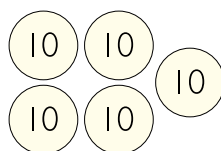
$36 + 53 = \underline{\quad}$

$46 - 22 = \underline{\quad}$

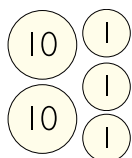
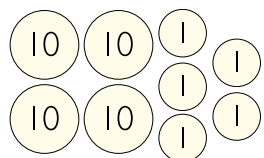
[·] Man jeene ektesne?



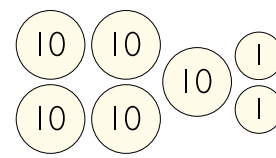
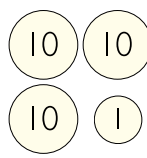
$22 + 33 = \underline{\quad}$



$50 + \underline{\quad} = \underline{\quad}$



$45 + 23 = \underline{\quad}$



$\underline{\quad} + \underline{\quad} = \underline{\quad}$

[·] Ryöknedh.

$32 + 20 = \underline{\quad}$

$64 + 34 = \underline{\quad}$

$33 + 43 = \underline{\quad}$

$52 + 17 = \underline{\quad}$

$41 + 51 = \underline{\quad}$

$72 + 17 = \underline{\quad}$

$36 + 42 = \underline{\quad}$

$25 + 43 = \underline{\quad}$

$44 + 53 = \underline{\quad}$

$55 + 22 = \underline{\quad}$

$56 + 21 = \underline{\quad}$

$38 + 31 = \underline{\quad}$

$24 + 54 = \underline{\quad}$

$61 + 37 = \underline{\quad}$

$63 + 36 = \underline{\quad}$

$33 + 46 = \underline{\quad}$

$23 + 45 = \underline{\quad}$

$35 + 64 = \underline{\quad}$

$51 + 38 = \underline{\quad}$

$42 + 17 = \underline{\quad}$

$48 + 12 = \underline{\quad}$

[.] Man jeene aajmojne?

Dov leah:

Datne aastah:

Datne aastah:



25 kr

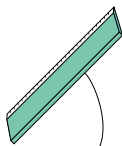
$$50 - \underline{\quad} =$$

kr



$$30 - \underline{\quad} =$$


 kr



22 kr

$$40 - \underline{\quad} =$$

 kr




54 kr

$$70 - \underline{\quad} =$$

 kr

[·] Man jeene dov leah aajmojne?

Dov leah:



Datne aastah:



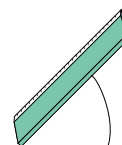
25 kr

$$46 - 25 = \underline{\hspace{2cm}} \text{ kr}$$

Dov leah:



Datne aastah:



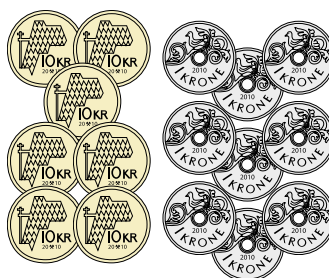
22 kr

$$\underline{\hspace{2cm}} - \underline{\hspace{2cm}} = \underline{\hspace{2cm}} \text{ kr}$$



18 kr

$$\underline{\hspace{2cm}} - \underline{\hspace{2cm}} = \underline{\hspace{2cm}} \text{ kr}$$



65 kr

$$\underline{\hspace{2cm}} - \underline{\hspace{2cm}} = \underline{\hspace{2cm}} \text{ kr}$$

[·] Ryöknedh.

$99 - 15 = \underline{\hspace{2cm}}$

$39 - 14 = \underline{\hspace{2cm}}$

$68 - 32 = \underline{\hspace{2cm}}$

$58 - 24 = \underline{\hspace{2cm}}$

$46 - 15 = \underline{\hspace{2cm}}$

$90 - 15 = \underline{\hspace{2cm}}$

$63 - 12 = \underline{\hspace{2cm}}$

$73 - 31 = \underline{\hspace{2cm}}$

$48 - 36 = \underline{\hspace{2cm}}$

$76 - 56 = \underline{\hspace{2cm}}$

$95 - 42 = \underline{\hspace{2cm}}$

$84 - 51 = \underline{\hspace{2cm}}$

$77 - 27 = \underline{\hspace{2cm}}$

$66 - 33 = \underline{\hspace{2cm}}$

$85 - 56 = \underline{\hspace{2cm}}$

$53 - 42 = \underline{\hspace{2cm}}$

$79 - 36 = \underline{\hspace{2cm}}$

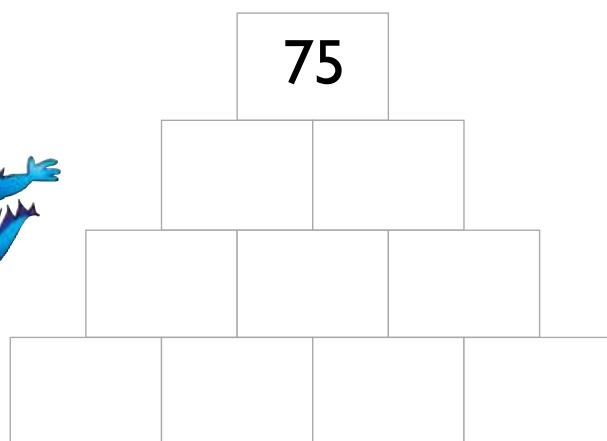
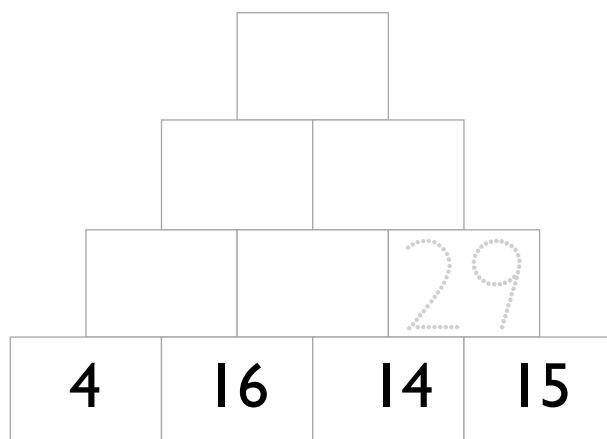

$42 - 38 = \underline{\hspace{2cm}}$

$98 - 12 = \underline{\hspace{2cm}}$

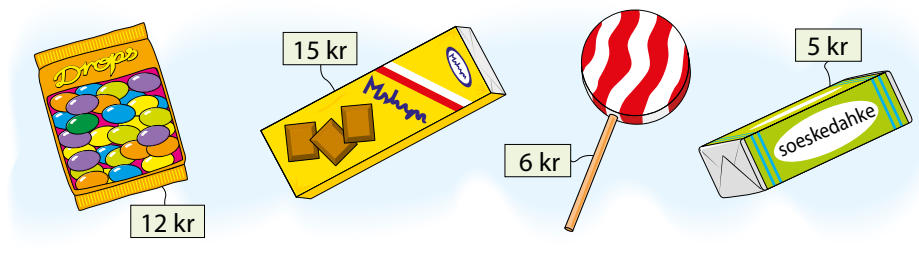
$57 - 21 = \underline{\hspace{2cm}}$

$61 - 47 = \underline{\hspace{2cm}}$

[·] Gaavnh taalide gáaroes rovhtine.




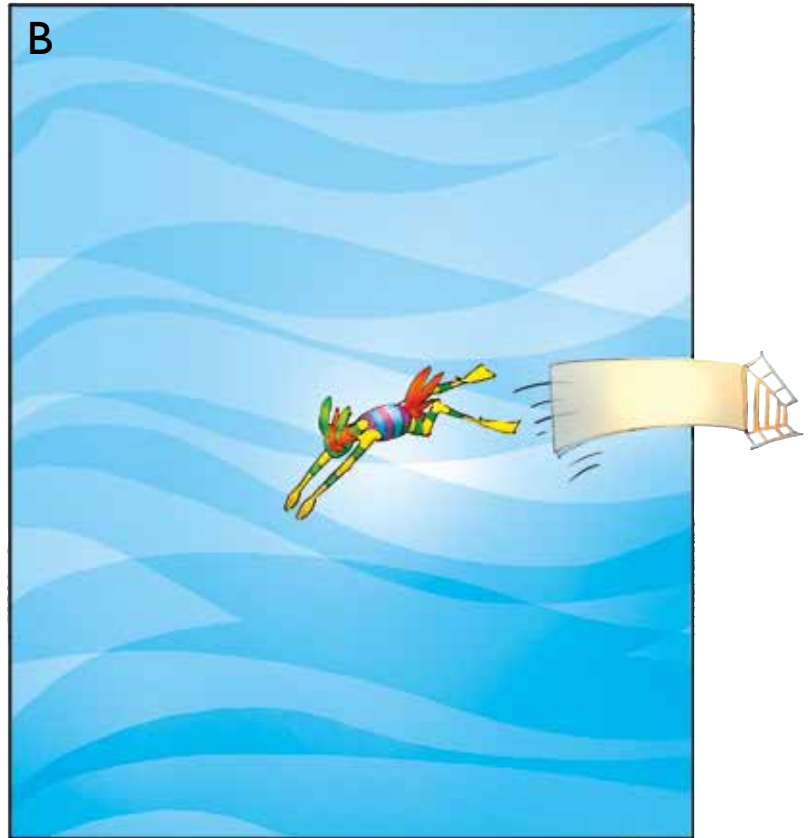

[··] Maam maahtah 50 krávnaj ávteste ástedh?





AREAALE

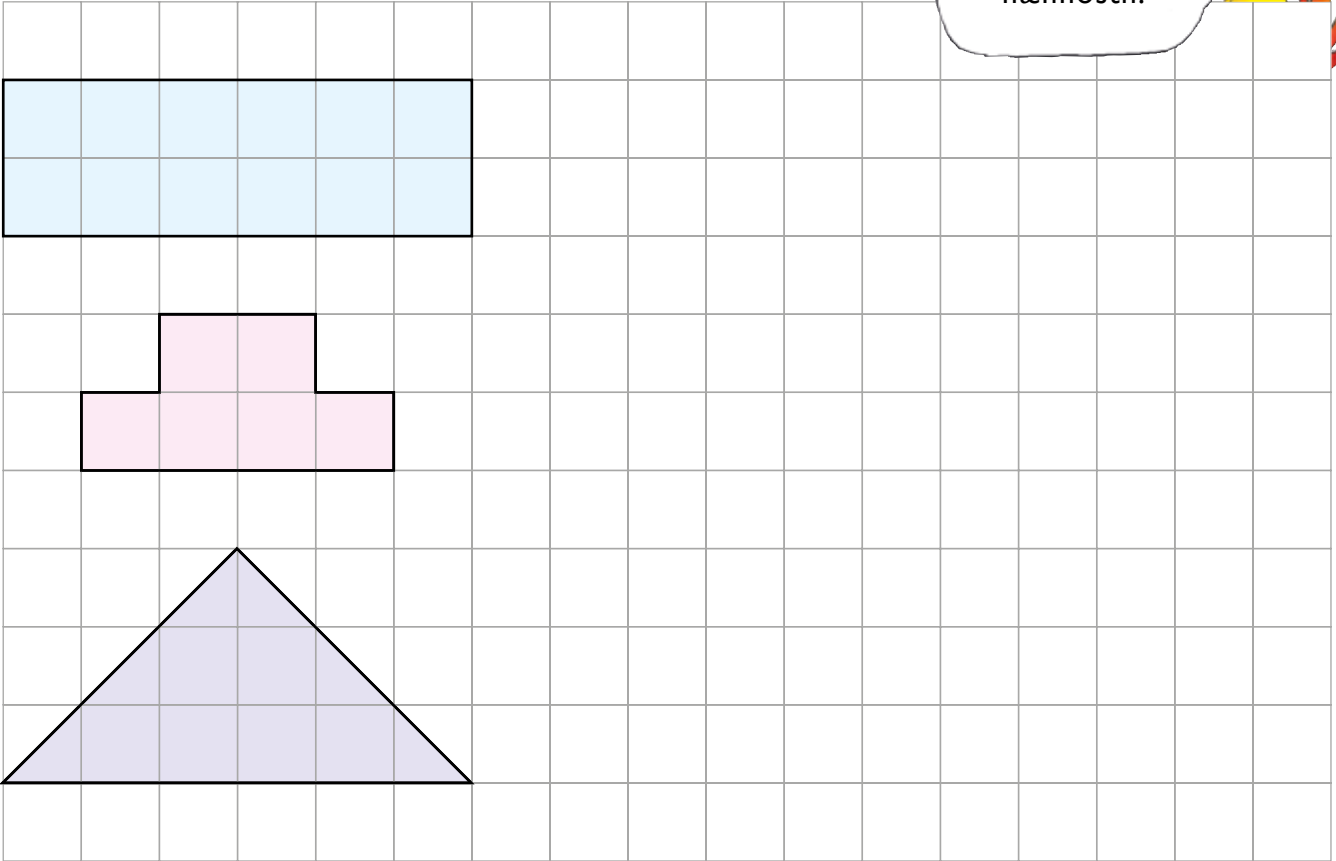
[·] Mij laavkome-bassenge stööremes? Mïetesth skubpeginie.



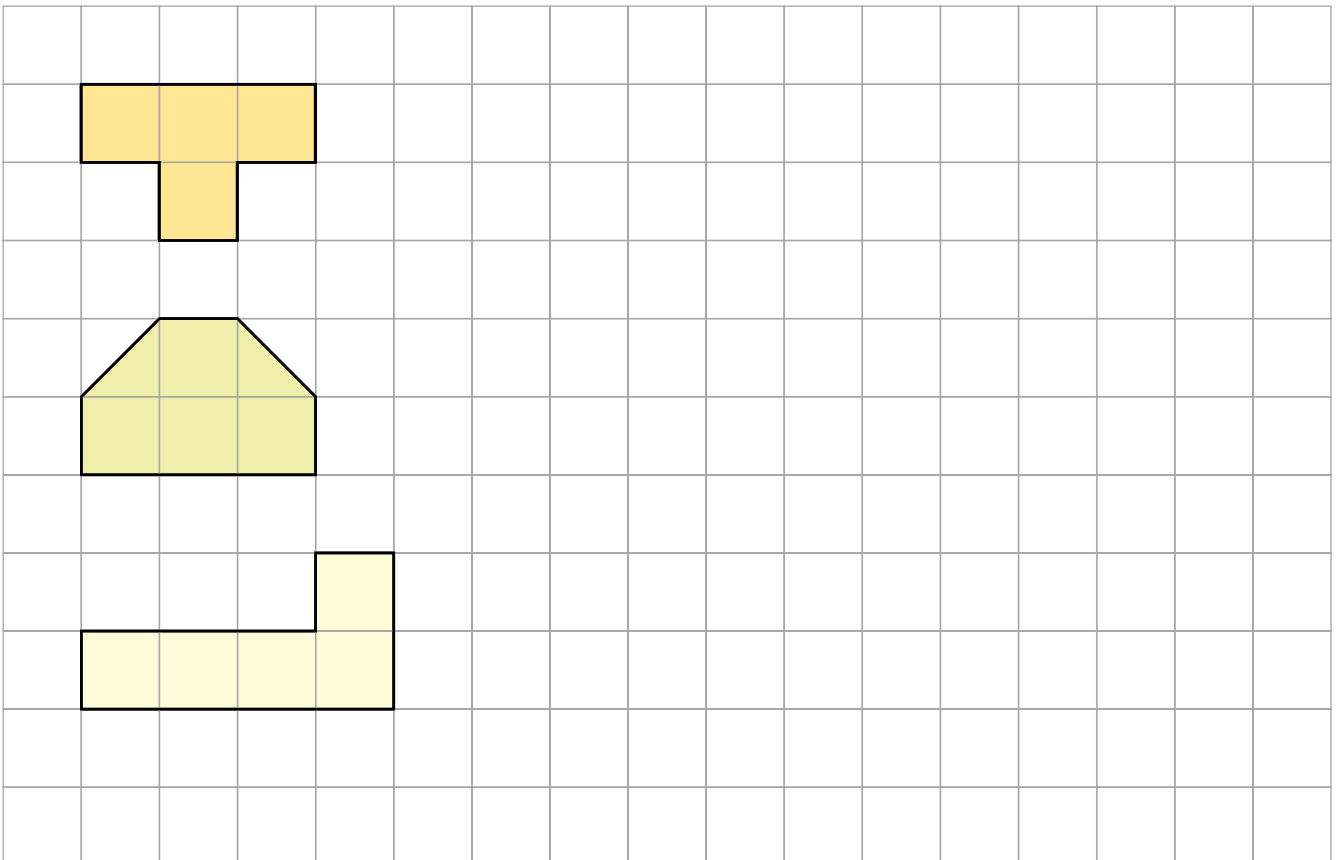
Bassenge _____ dïhte stööremes.

[.] Guvvedh haemieh lehkien stoere areaaline.

Hammoem
haemide jijtje
nænnosth.

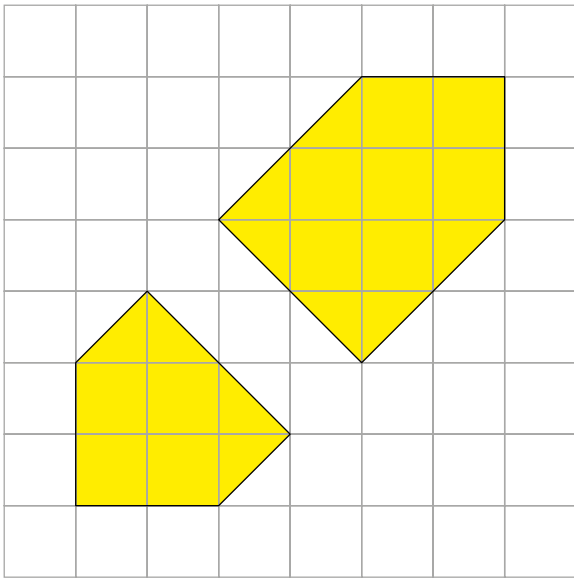


[..] Guvvedh haemieh guektien giërth stoere areaaline.




[.] Man gieje stööremes?

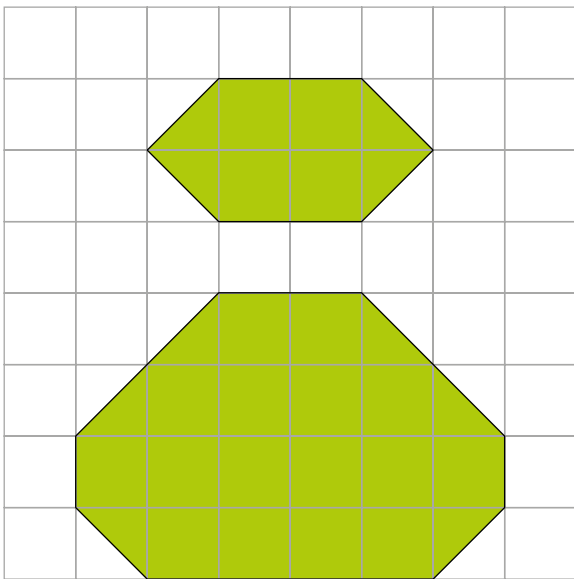
Man unnemes?



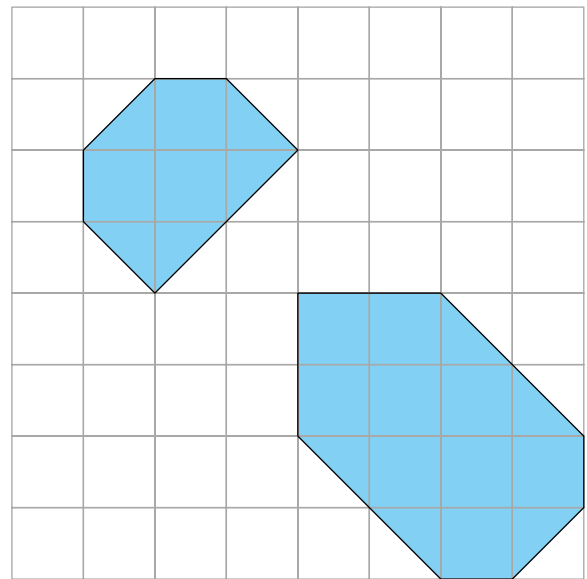
Medtie _____ rovth.



Medtie _____ rovth.



Medtie _____ rovth.




Medtie _____ rovth.

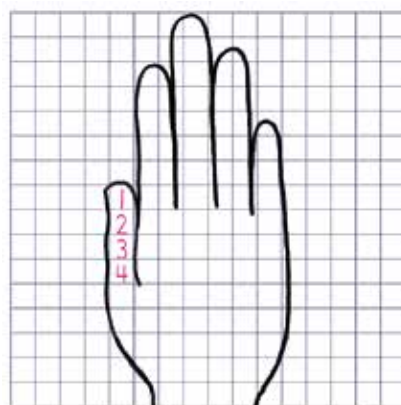
Dihthe stööremes gieje medtie _____ rovth.

Dihthe unnemes gieje medtie _____ rovth.

[·] Guvvedh jïjtjedh gieten ståaroem.



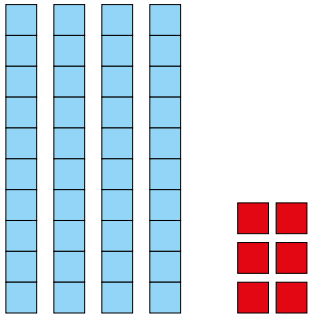
[·] Man gellie medtie rovthth dov giete?



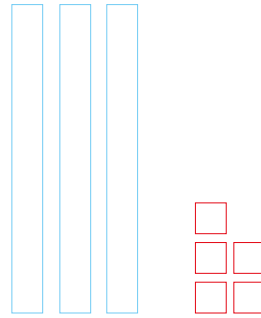
Medtie _____ rovthth.

12 RYÖKNEDIDH

[·] Man jeene ektesne?



$$40 + 6 = \underline{\quad}$$



$$30 + 5 = \underline{\quad}$$

$$50 + 9 = \underline{\quad}$$

$$20 + 5 = \underline{\quad}$$

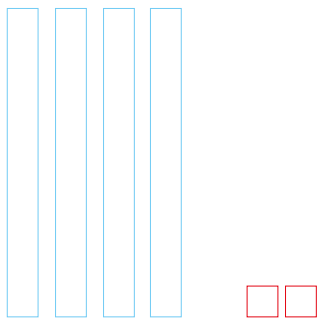
$$70 + 6 = \underline{\quad}$$

$$60 + 7 = \underline{\quad}$$


$$40 + 8 = \underline{\quad}$$

$$80 + 4 = \underline{\quad}$$

[··] Juekieh lähkaginie jih aktaginie.

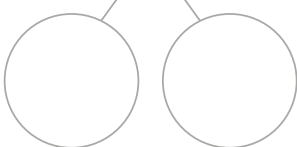


$$42 = 40 + \underline{\quad}$$



$$38 = \underline{\quad} + \underline{\quad}$$

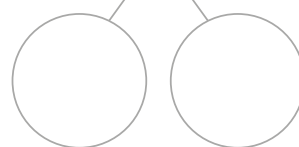
23




72



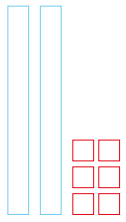
58



91

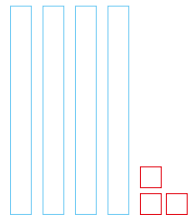


[·] Biejh lähkegh jñh aktegh tjáanghkan. Ryöknedh.



26

+



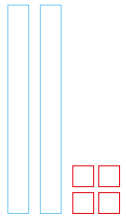
43 =

60

+

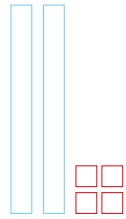
9

=



24

+

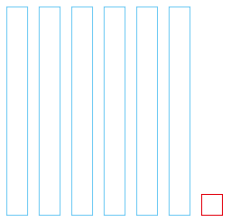


24 =

40

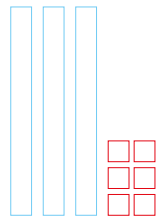
+

=



61


+



36 =

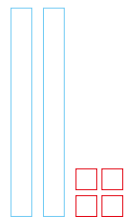
+

=



42

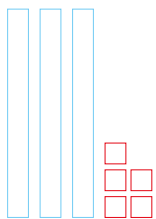
+



24 =

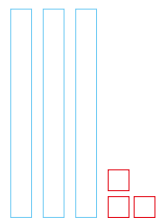
+

=



35

+

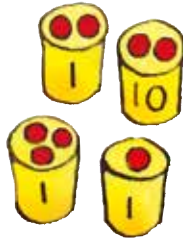


33 =


+

=


[·] Man gellie tjægkieh sjidtieh?



$$20 + 6 = \underline{\quad}$$




$$\underline{\quad} + \underline{\quad} = \underline{\quad}$$




$$\underline{\quad} + \underline{\quad} = \underline{\quad}$$

[·] Guvvedh tjengkerh lihtide.


$$32 = 30 + \underline{\quad}$$




$$45 = \underline{\quad} + \underline{\quad}$$



$$28 = \underline{\quad} + \underline{\quad}$$



$$56 = \underline{\quad} + \underline{\quad}$$



[·] Juekieh lähkaginie jñh aktaginie. Ryöknedh.

$$\begin{array}{c} 36 \\ \swarrow \quad \searrow \\ \textcircled{30} \quad \textcircled{6} \end{array} + \begin{array}{c} 43 \\ \swarrow \quad \searrow \\ \textcircled{40} \quad \textcircled{3} \end{array} = 70 + 9 = \underline{\hspace{2cm}}$$

$$\begin{array}{c} 54 \\ \swarrow \quad \searrow \\ \textcircled{\hspace{1cm}} \quad \textcircled{\hspace{1cm}} \end{array} + \begin{array}{c} 31 \\ \swarrow \quad \searrow \\ \textcircled{\hspace{1cm}} \quad \textcircled{\hspace{1cm}} \end{array} = \underline{\hspace{2cm}} + \underline{\hspace{2cm}} = \underline{\hspace{2cm}}$$

$$\begin{array}{c} 72 \\ \swarrow \quad \searrow \\ \textcircled{\hspace{1cm}} \quad \textcircled{\hspace{1cm}} \end{array} + \begin{array}{c} 27 \\ \swarrow \quad \searrow \\ \textcircled{\hspace{1cm}} \quad \textcircled{\hspace{1cm}} \end{array} = \underline{\hspace{2cm}} + \underline{\hspace{2cm}} = \underline{\hspace{2cm}}$$

$$\begin{array}{c} 63 \\ \swarrow \quad \searrow \\ \textcircled{\hspace{1cm}} \quad \textcircled{\hspace{1cm}} \end{array} + \begin{array}{c} 24 \\ \swarrow \quad \searrow \\ \textcircled{\hspace{1cm}} \quad \textcircled{\hspace{1cm}} \end{array} = \underline{\hspace{2cm}} + \underline{\hspace{2cm}} = \underline{\hspace{2cm}}$$

[··] Ryöknedh.

$33 + 66 = \underline{\hspace{2cm}}$

$34 + 14 = \underline{\hspace{2cm}}$

$65 + 24 = \underline{\hspace{2cm}}$

$21 + 57 = \underline{\hspace{2cm}}$

$75 + 12 = \underline{\hspace{2cm}}$

$56 + 31 = \underline{\hspace{2cm}}$

$18 + 21 = \underline{\hspace{2cm}}$

$17 + 32 = \underline{\hspace{2cm}}$

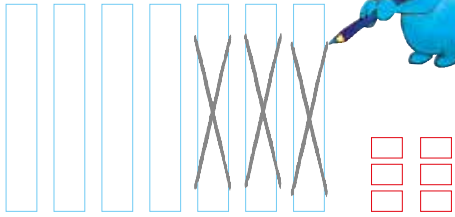
$43 + 35 = \underline{\hspace{2cm}}$

$28 + 31 = \underline{\hspace{2cm}}$

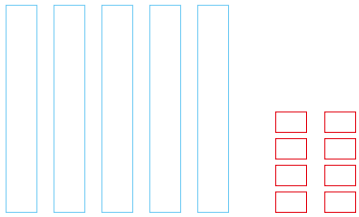
$13 + 72 = \underline{\hspace{2cm}}$

$83 + 16 = \underline{\hspace{2cm}}$

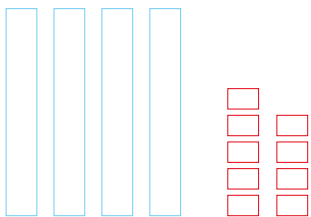
[·] Ryöknedh.



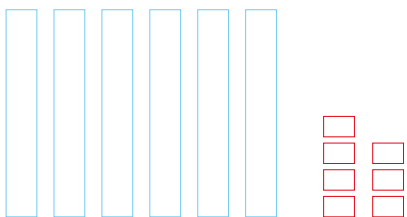
$$76 - 30 = \underline{40} + \underline{6} = \underline{\quad}$$




$$58 - 24 = \underline{\quad} + \underline{\quad} = \underline{\quad}$$



$$49 - 37 = \underline{\quad} + \underline{\quad} = \underline{\quad}$$



$$67 - 43 = \underline{\quad} + \underline{\quad} = \underline{\quad}$$



$$88 - 56 = \underline{\quad} + \underline{\quad} = \underline{\quad}$$

[·] Ryöknedh.

$$\begin{array}{c} 54 \\ \swarrow \quad \searrow \\ \textcircled{50} \quad \textcircled{4} \end{array} - \begin{array}{c} 23 \\ \swarrow \quad \searrow \\ \textcircled{20} \quad \textcircled{3} \end{array} = \underline{30} + \underline{1} = \underline{\quad}$$

$$\begin{array}{c} 76 \\ \swarrow \quad \searrow \\ \textcircled{\quad} \quad \textcircled{\quad} \end{array} - \begin{array}{c} 34 \\ \swarrow \quad \searrow \\ \textcircled{\quad} \quad \textcircled{\quad} \end{array} = \underline{\quad} + \underline{\quad} = \underline{\quad}$$

$$\begin{array}{c} 84 \\ \swarrow \quad \searrow \\ \textcircled{\quad} \quad \textcircled{\quad} \end{array} - \begin{array}{c} 43 \\ \swarrow \quad \searrow \\ \textcircled{\quad} \quad \textcircled{\quad} \end{array} = \underline{\quad} + \underline{\quad} = \underline{\quad}$$

$$\begin{array}{c} 49 \\ \swarrow \quad \searrow \\ \textcircled{\quad} \quad \textcircled{\quad} \end{array} - \begin{array}{c} 27 \\ \swarrow \quad \searrow \\ \textcircled{\quad} \quad \textcircled{\quad} \end{array} = \underline{\quad} + \underline{\quad} = \underline{\quad}$$

[··] Ryöknedh.

$58 - 30 = \underline{\quad}$

$79 - 33 = \underline{\quad}$

$29 - 13 = \underline{\quad}$

$67 - 42 = \underline{\quad}$

$85 - 21 = \underline{\quad}$

$66 - 42 = \underline{\quad}$

$36 - 24 = \underline{\quad}$

$97 - 42 = \underline{\quad}$

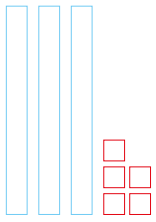
$58 - 27 = \underline{\quad}$

$85 - 14 = \underline{\quad}$

$99 - 46 = \underline{\quad}$

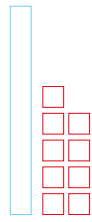
$78 - 25 = \underline{\quad}$

[·] Ryöknedh.



35

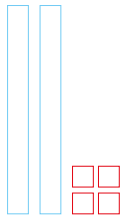
+



19

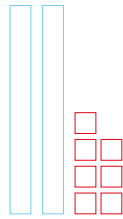
=

= _____



24

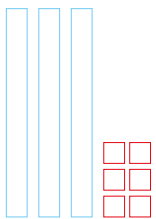
+



27

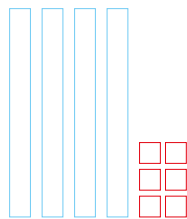
=

= _____



36

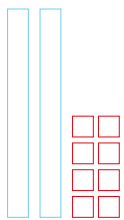
+



46

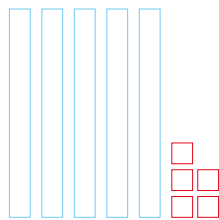
=

= _____



28

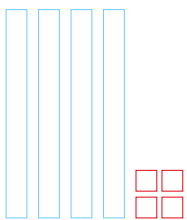
+



55

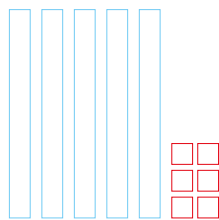
=

= _____



44

+



56

=

= _____

[·] Ryöknedh.

$$\begin{array}{c}
 49 \\
 \swarrow \quad \searrow \\
 \textcircled{40} \quad \textcircled{9}
 \end{array}
 +
 \begin{array}{c}
 14 \\
 \swarrow \quad \searrow \\
 \textcircled{10} \quad \textcircled{4}
 \end{array}
 =
 \underline{50}
 +
 \underline{13}
 =
 \underline{\quad}$$

$$\begin{array}{c}
 23 \\
 \swarrow \quad \searrow \\
 \textcircled{\quad} \quad \textcircled{\quad}
 \end{array}
 +
 \begin{array}{c}
 68 \\
 \swarrow \quad \searrow \\
 \textcircled{\quad} \quad \textcircled{\quad}
 \end{array}
 =
 \underline{\quad}
 +
 \underline{\quad}
 =
 \underline{\quad}$$

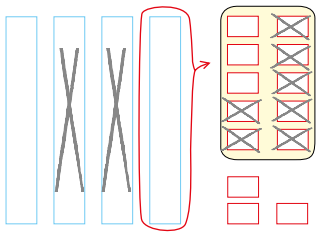
$$\begin{array}{c}
 54 \\
 \swarrow \quad \searrow \\
 \textcircled{\quad} \quad \textcircled{\quad}
 \end{array}
 +
 \begin{array}{c}
 39 \\
 \swarrow \quad \searrow \\
 \textcircled{\quad} \quad \textcircled{\quad}
 \end{array}
 =
 \underline{\quad}
 +
 \underline{\quad}
 =
 \underline{\quad}$$

$$\begin{array}{c}
 28 \\
 \swarrow \quad \searrow \\
 \textcircled{\quad} \quad \textcircled{\quad}
 \end{array}
 +
 \begin{array}{c}
 33 \\
 \swarrow \quad \searrow \\
 \textcircled{\quad} \quad \textcircled{\quad}
 \end{array}
 =
 \underline{\quad}
 +
 \underline{\quad}
 =
 \underline{\quad}$$

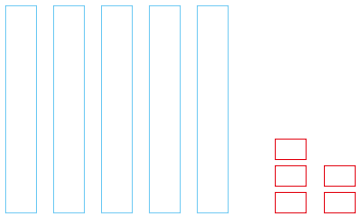
$$\begin{array}{c}
 36 \\
 \swarrow \quad \searrow \\
 \textcircled{\quad} \quad \textcircled{\quad}
 \end{array}
 +
 \begin{array}{c}
 54 \\
 \swarrow \quad \searrow \\
 \textcircled{\quad} \quad \textcircled{\quad}
 \end{array}
 =
 \underline{\quad}
 +
 \underline{\quad}
 =
 \underline{\quad}$$

$$\begin{array}{c}
 46 \\
 \swarrow \quad \searrow \\
 \textcircled{\quad} \quad \textcircled{\quad}
 \end{array}
 +
 \begin{array}{c}
 25 \\
 \swarrow \quad \searrow \\
 \textcircled{\quad} \quad \textcircled{\quad}
 \end{array}
 =
 \underline{\quad}
 +
 \underline{\quad}
 =
 \underline{\quad}$$

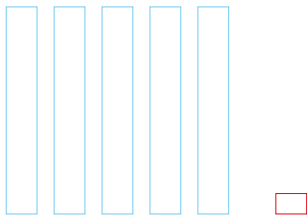
[·] Ryöknedh.



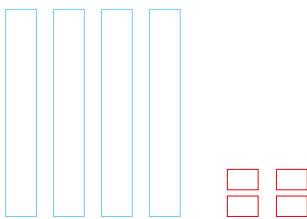
$$43 - 27 = \underline{\quad}$$



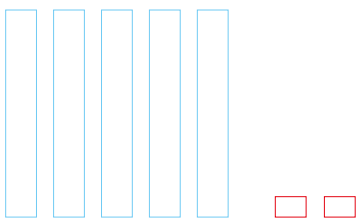
$$55 - 38 = \underline{\quad}$$



$$61 - 26 = \underline{\quad}$$



$$44 - 17 = \underline{\quad}$$



$$52 - 36 = \underline{\quad}$$

[·] Ryöknedh.



$$72 - 19 = \underline{\quad}$$

$$64 - 16 = \underline{\quad}$$

$$52 - 27 = \underline{\quad}$$

$$63 - 36 = \underline{\quad}$$

$$81 - 18 = \underline{\quad}$$



Maarjan leah 100 krávnah. Díhte aktem bietskeme-káarhtem áasta 50 krávnaj ávteste. Man jeenem aajmojne átna? _____ kr

Ryöknedh daesnie.



Díhte sohkere-gurremem 15 krávnaj ávteste áasta. Man gellie krávnah dellie aajmojne? _____ kr

Ryöknedh daesnie.

Maarja aahkebem ráaka. Aahkabistie 25 krávnah áádtje. Man jeenem dellie átna? _____ kr

Ryöknedh daesnie.





Maarjan leah 60 kråvnah. Dïhte aktem njaalke-jovkemes 10 kråvnaj åvteste jïh popcorn 20 kråvnaj åvteste åasta. Man gellie kråvnah dellie aajmojne? _____ kr

Ryöknedh daesnie.


Maarja njoelh tjatska. Dïhte 10 kråvnah maaksa. Man gellie kråvnah dellie aajmojne? _____ kr

Ryöknedh daesnie.



Maarja sæjhta tjastem jïh njaalke-jovkemes åastedh. Mejtie nuekies beetnegh disse åtna? _____ kr

Ryöknedh daesnie



[·] Ryöknedh.

$$23 + 42 =$$

$$36 + 21 =$$

$$57 + 24 =$$

$$61 + 19 =$$

$$26 + 35 =$$

$$45 + 16 =$$

$$53 + 46 =$$

$$29 + 37 =$$

[·] Ryöknedh.

$$39 - 16 =$$

$$45 - 23 =$$

$$29 - 19 =$$

$$62 - 37 =$$

$$31 - 18 =$$

$$43 - 25 =$$

$$34 - 27 =$$

$$42 - 39 =$$

[·] Ryöknedh.

$47 + 10 = \underline{\quad}$

$35 + 13 = \underline{\quad}$

$26 + 58 = \underline{\quad}$

$59 + 30 = \underline{\quad}$

$72 + 21 = \underline{\quad}$

$44 + 27 = \underline{\quad}$

$67 + 40 = \underline{\quad}$

$45 + 42 = \underline{\quad}$

$19 + 44 = \underline{\quad}$

$58 + 20 = \underline{\quad}$

$24 + 62 = \underline{\quad}$

$35 + 29 = \underline{\quad}$

$35 + 12 = \underline{\quad}$

$56 + 22 = \underline{\quad}$

$49 + 13 = \underline{\quad}$

$26 + 51 = \underline{\quad}$

$77 + 12 = \underline{\quad}$

$39 + 25 = \underline{\quad}$

$35 - 20 = \underline{\quad}$

$64 - 14 = \underline{\quad}$

$65 - 19 = \underline{\quad}$

$43 - 30 = \underline{\quad}$

$85 - 25 = \underline{\quad}$

$78 - 29 = \underline{\quad}$

$62 - 20 = \underline{\quad}$

$73 - 32 = \underline{\quad}$

$99 - 33 = \underline{\quad}$

$77 - 40 = \underline{\quad}$

$46 - 32 = \underline{\quad}$

$51 - 39 = \underline{\quad}$

$45 - 31 = \underline{\quad}$

$69 - 32 = \underline{\quad}$

$81 - 26 = \underline{\quad}$

$64 - 22 = \underline{\quad}$


$58 - 14 = \underline{\quad}$

$72 - 43 = \underline{\quad}$

$96 - 33 = \underline{\quad}$

$43 - 21 = \underline{\quad}$

$100 - 55 = \underline{\quad}$



[·] Trymen leah 50 kr. Dïhte edtja göökte vadtesh åstedh.

Maam mahta åstedh? _____ jïh _____

Man jeenem aajmojne åtna? _____ kr

Ryöknedh daesnie.

Ejvan leah 47 kr. Dïhte sæjhta stååke-ruevtieraajroem åstedh. Man jeenh beetnegh fååtesieh? _____ kr

Ryöknedh daesnie.

[··] Darjoeh lierehtimmiem jïjtje.

Ryöknedh daesnie.

[·] Klaeredh kånstem.




rööpses jallh plaaves




viskes jallh kruana



oransje jallh tjoevke-
rööpses



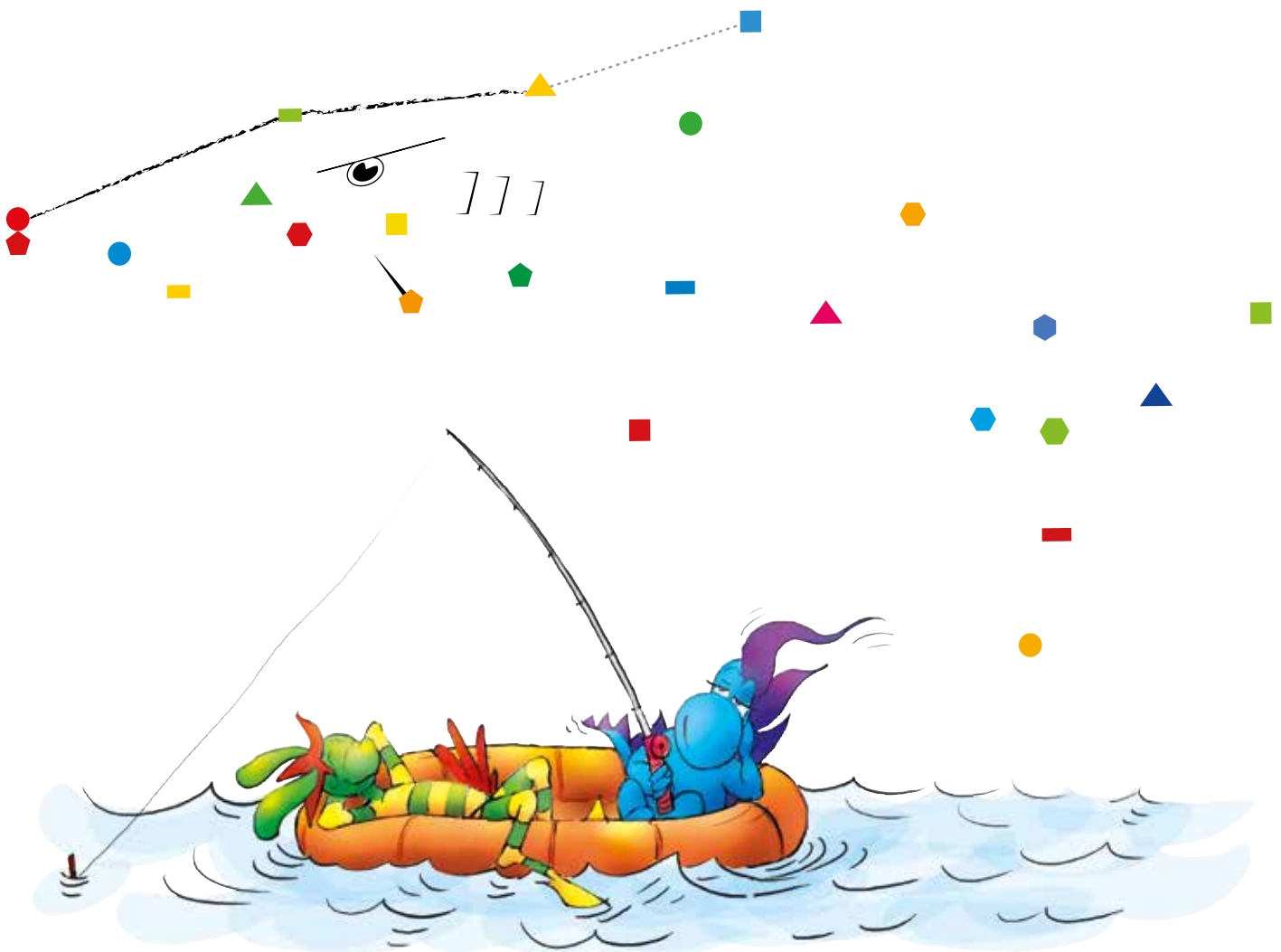
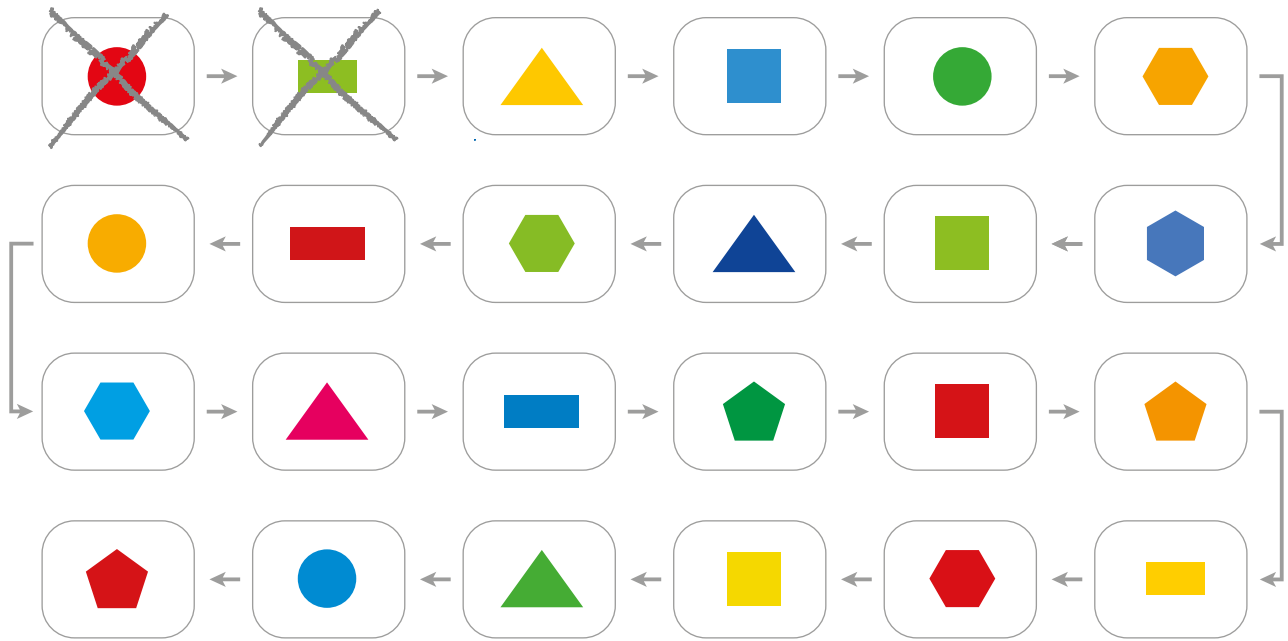
[··] Jæerhkieh goeride.



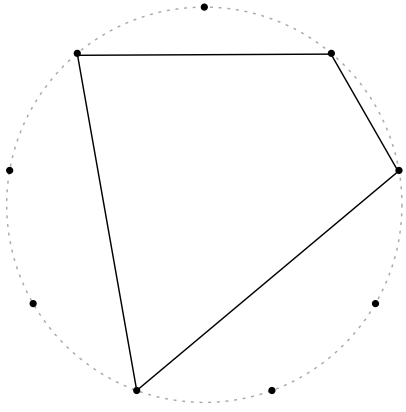
[···] Darjoeh jÿjtjedh goerem.



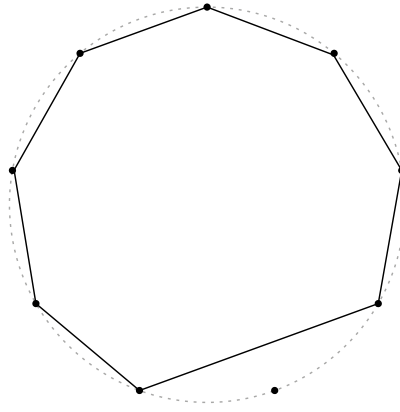
[.] Darjoeh sievh haemeste haaman.



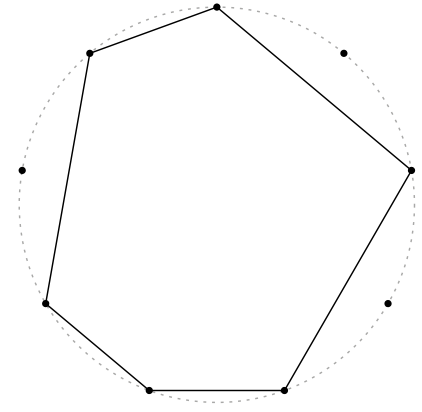
[·] Man gellie bortege haemiej?



_____ bortege

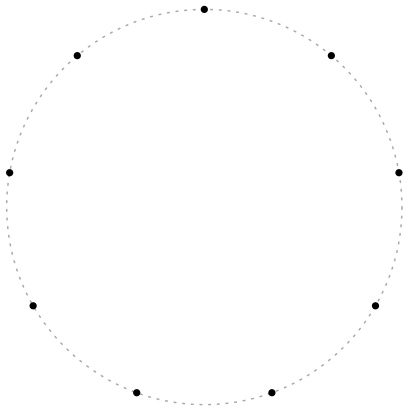


_____ bortege

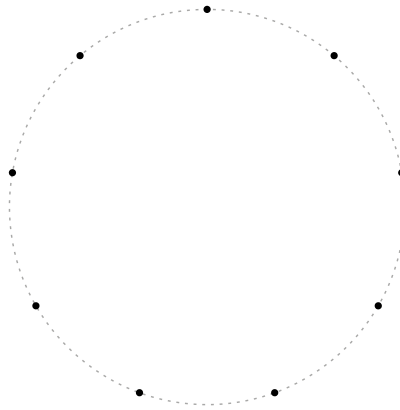


_____ bortege

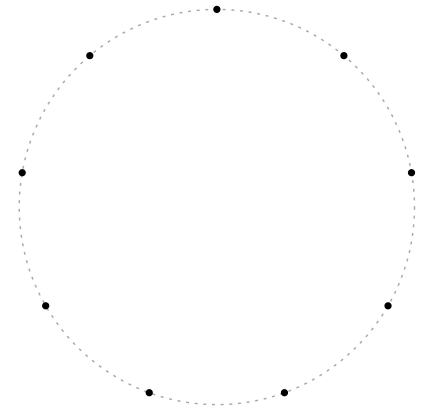
[··] Guvvedh gellien-bortege.



vijhten-bortege

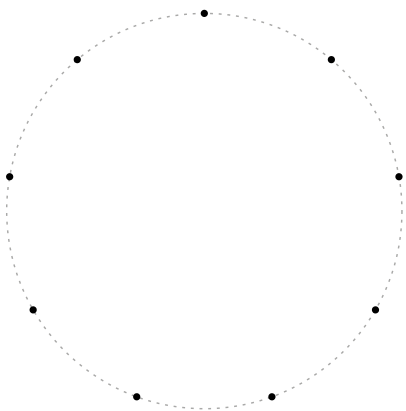


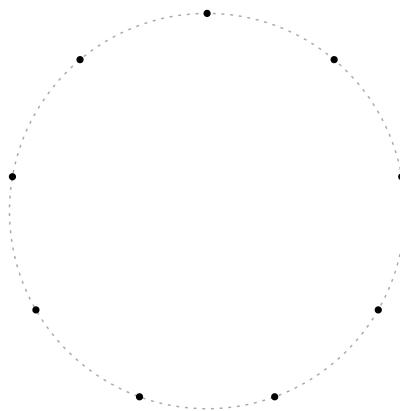
tjijhtjen-bortege

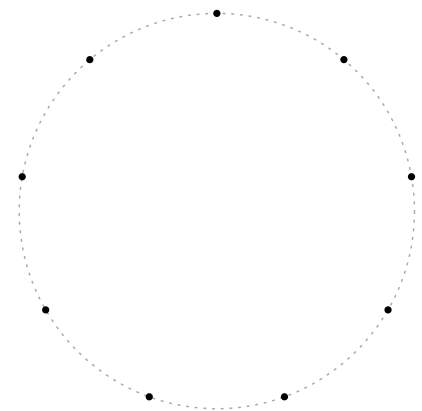


uksien-bortege

[·:] Guvvedh jih tjaelieh nommh ovmesse gellien-bortegidie.


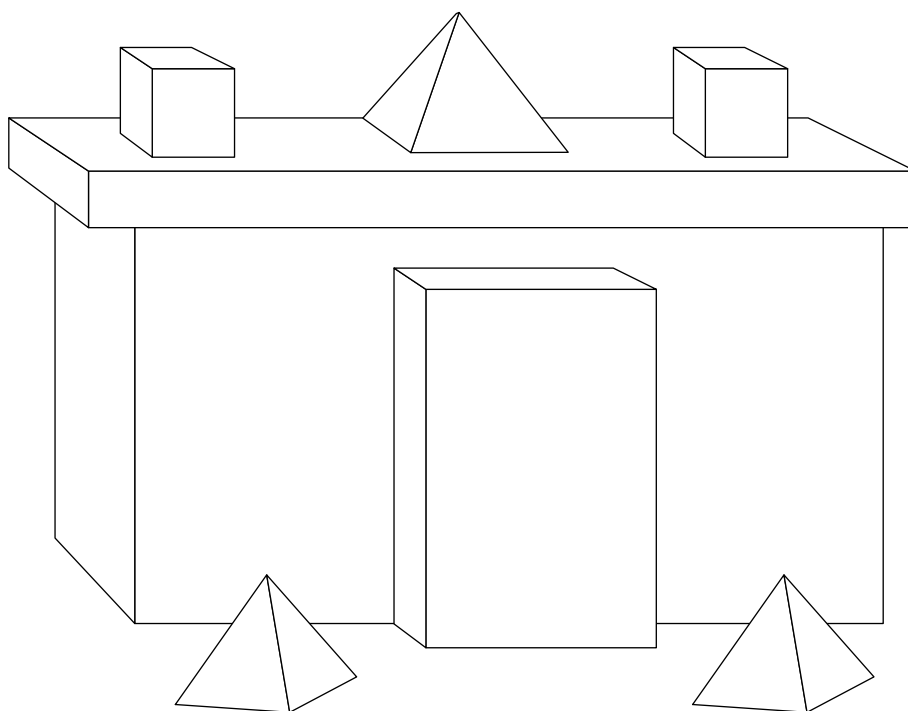
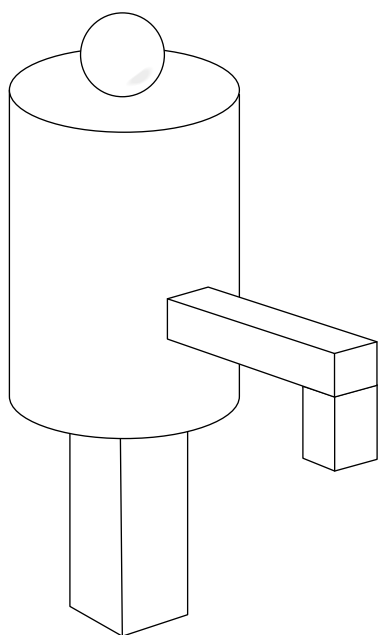
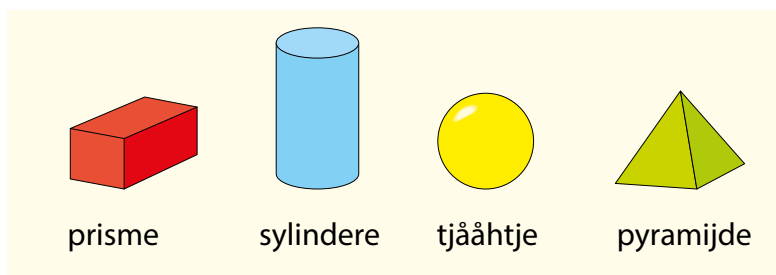






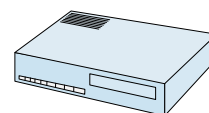
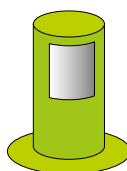

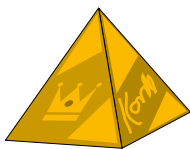


14 TJAEKEDS HAMMOEH

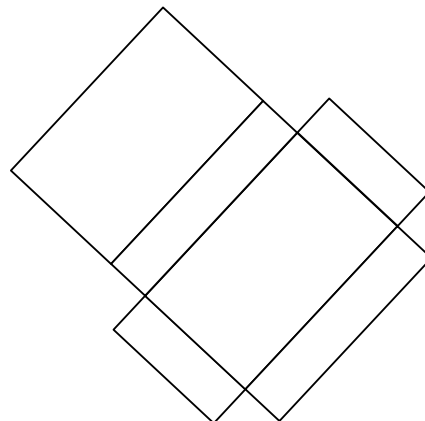
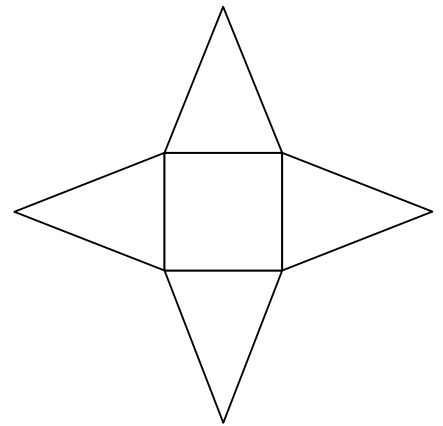
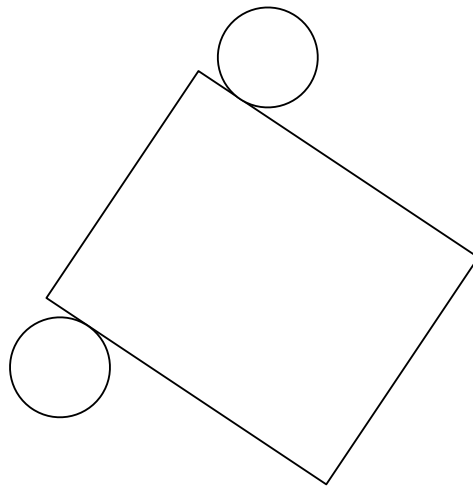
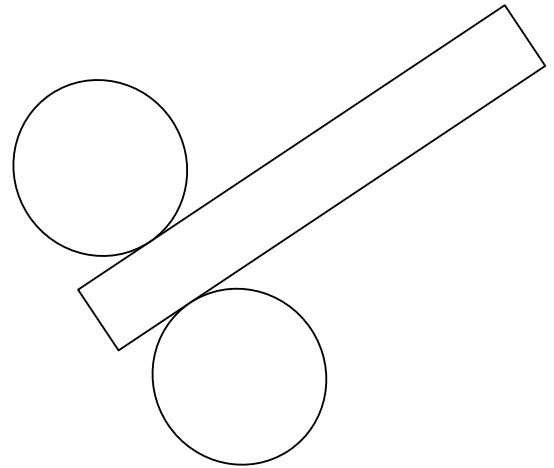
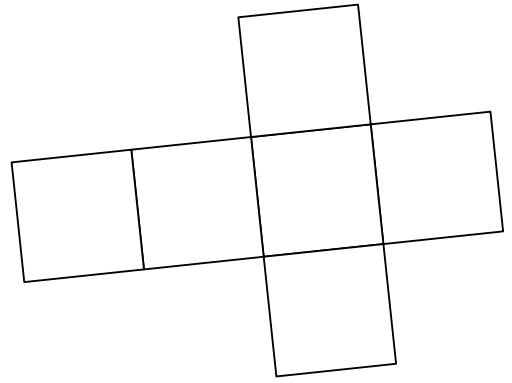
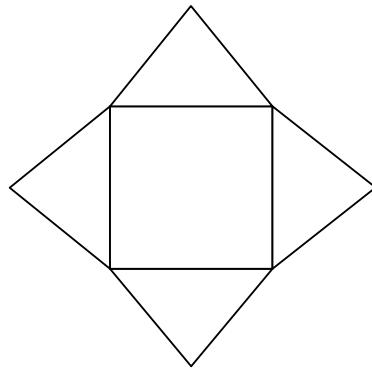
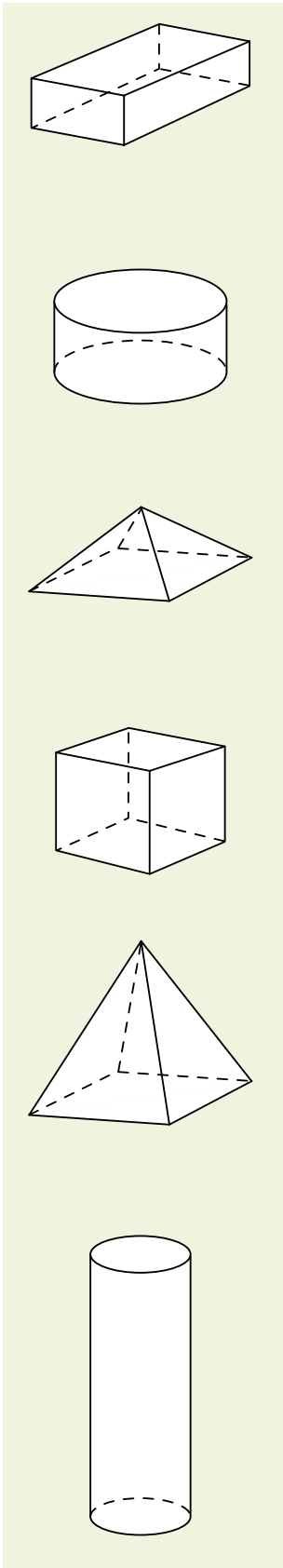
[·] Klaeredh haemide guvvesne.



[.] Guvvedh guktie gaevnieh nuelesne v  jnoeh.



[.] Magkerh haemieh ektesne? Darjoeh sievh.



[.] Mej göökte seamma-laakan?



[·] Fibo jñh Fiboline gaadtan edtjijægan.

Goerehth maam sinsætnan jiehtiejægan.



$56 + 28 = A$

$72 + 19 = H$

$45 + 45 = I$

$55 + 32 = D$

$42 + 47 = I$

$27 + 52 = E$

$26 + 68 = E$

$67 + 28 = K$

$32 + 38 = S$

$52 + 47 = J$

$58 + 38 = M$

$40 + 40 = V$

$23 + 49 = G$

$63 + 35 = N$

91	90	99	80	94	98

72	89	94	70	89	94

72	84	84	99	91	95	79	70	89	87	90	79

!

[·] Gåabph Fibi jñh Fiboline edttijjægan eejehtalledh.



$$92 - 25 = A$$

$$93 - 28 = K$$

$$91 - 19 = S$$

$$100 - 50 = M$$

$$85 - 14 = L$$

$$84 - 26 = T$$

$$75 - 15 = E$$

$$100 - 25 = N$$

$$73 - 28 = U$$

$$83 - 21 = V$$

$$96 - 35 = O$$

$$74 - 18 = J$$

$$76 - 52 = G$$

$$92 - 49 = R$$

$$78 - 39 = \text{Å}$$

$$86 - 22 = I$$

Fibo

50	67	75	75	60

24	64	43	58	64	75	60

58	43	39	67	75	58	60	72	60

62	45	67	71	65	67	50

Fiboline

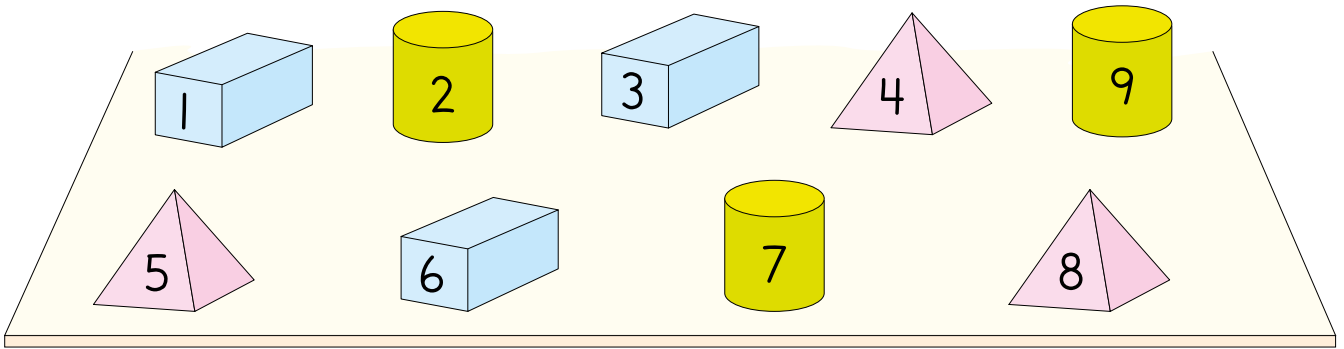
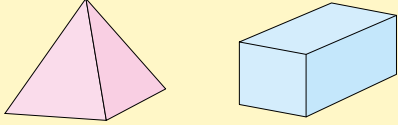
43	45	60	62	58	64	60

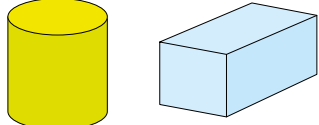
43	67	67	56	43	61	56	75	60	

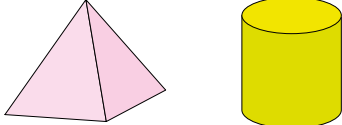
72	75	39	67	72	60	72	60

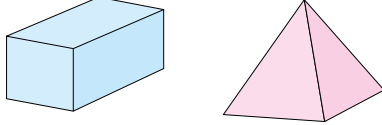
62	45	67	71	65	67	50	

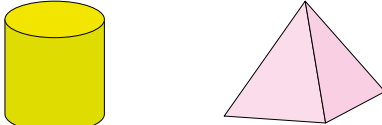
[.] Gaavnh haemiej taalem. Darjoeh ryöknedimmie-boelkhk.

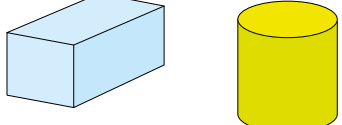



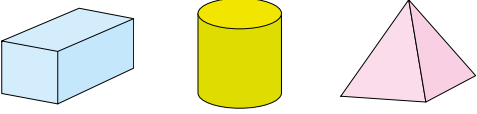
$$5 + 3 = \underline{8}$$


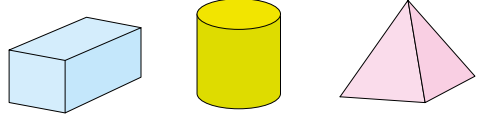
$$\underline{\quad} + \underline{\quad} = 15$$


$$\underline{\quad} + \underline{\quad} = 10$$


$$\underline{\quad} + \underline{\quad} = 14$$


$$\underline{\quad} + \underline{\quad} = 15$$


$$\underline{\quad} + \underline{\quad} = 13$$


$$\underline{\quad} + \underline{\quad} + \underline{\quad} = 18$$


$$\underline{\quad} + \underline{\quad} + \underline{\quad} = 20$$

Multi

Matematihke maanadaltesasse

Multi fleksibiliteetem matematihke-lohkehtæmman vadta gosse lohkehtæjjide däärje jñh nuepiem vadta måedtie lohkehtimmie-vuekieh provhkedh. MULTI eadtjaldávva, buerie mielem vadta jñh lustes baalka matematihkese.

Multi se vihkeles:

- Måedtie iedtjh gosse vueptiestidh, goerehtidh jñh eadtjohkelaakan barkedh
- Lohkehtimmie mejtie sjiehtesjamme lohkehtimmie-ektievökosne
- Veele maahtoe-ulmide learoesejkesjen mietie vuartasjidh
- Buerielaakan faagine kapihtelistie kapihtelidie barkedh jaepijste jaepide
- Vijries jñh eensie learohkevierhtiedimmie maam lohkehtimmesne sjiehtesje

Multi eeremes:

- Teorijem jñh iedtjide ektede
- Vuartesje guktie åvtese barkedh; fierhtene aamhtesinie eensilaakan jñh guhkies boelhkine vuesehte guktie barkedh
- Ånehks jñh aelhie teksth åtna
- Lohkehtimmie learoehkidie sjiehtesje sjiere faagi daltesinie
- Buerie jñh tjjelke gærjam Lærerens bok
- Dejtie learoesejkesjen ulmide fierhtene kapihtelisnie vuesehte

Multi åejviekomponenth fierhten daltesasse:

- Maadth-gærja A jñh B
- Lierehtimmiegærja
- Gaskeviermiesijje www.lagadus.org/multi

ČállidLágádus

ISBN 978-82-8263-076-4

