

Bjørnar Alseth
Ann-Christin Arnås
Henrik Kirkegaard
Mona Røsseland

Multi

2. lårkoe





ÅARJELSAEMIEN

1b

MAADTH-GÆRJA

Matematihke
maanadaltesasse



$$8 + 12 =$$

ČálliidLágádus

SISVEGE

6 TAALH 7-10	2
7 MÏETESTIDH	18
8 PLUSSE JÏH MIJNUSE	28
9 TAALH TAALESTE 0 TAALESE 20	48
10 HAMMOEH JÏH HAEMIEH	66

Baakoelæstoe

aalkoe-taale starttall
aate element, objekt
aktegi i enere
baste-gâhkoe binderslengde
berteme stabel
biejjie-lâhkoe kalender
borhtje boks
byöpmelgidh bli spist
damtijidh kjenne igjen
dov våaroe din tur
fååtesidh mangle
gaektsie-taale åttetall
gaerie, gaaran fat, til fatet
gaevnjieruktie rekkefølge
geervehtidh gjøre ferdig
gierkie-værjoe perlesnor
goeje strå
goeredh finne ut
govhtesh seks (sammen)
guhkebe lengre
guhkemes lengst
gööktesh to sammen
gåahta drops
ïedtje aktivitet
illeldahke resultat
jïjtjedh egne
joekehtasse forskjell
kluehkie spinnerplate
kruana giere grønt felt
kråvna krone (mynt)

laante-muerjie jordbær
learohke elev
lissiehtidh legge til
luhkje-taale titall
lâhkege tier
lâhkegi i tiere
lâhkesh ti (sammen)
mietestidh måle
morhtjelgamme sammenkrøllet
mubpie neste
mæנגese bakover
möölege-dîrrege måleredskap
möölege-ektievoete måleenhet
möölege-illeldahke måleresultat
nomme-væhta navneskilt
passa pose
plaave giere blått felt
pleajma blomst
plearoe lignende
påaste-låara postkasse
ruevtieraajroe-våagne togvogn
ryöknedidh regne
ryöknedimmie-boelhke regnestykke
rööpses giere rødt felt
siejpie-gietjie halespiss
snjeara-sille museskritt
soptses-bollenjes snakkeboble
stööremes største
stååke-gaevnie leke
tabelle tabell

tjatskoe kast
tjeevtedh stige
tjegkie bukett
tjïjhtjesh sju (sammen)
tjïjhtje-taale sjutall
tjueptjie klype
tjåenghkesne til sammen
tjåenghkie sum, beløp
tjååhtje kule
tramhkelh destie trekk fra
tramhkelidh trekke fra
trebliejujmie med prikkene
treblie-snjieble marihøne
T-sjåarhtoe T-skjorte
uktsie-taale nitall
unnemes minste
vaarjoe-tjueptjie klesklype
vaastoe svar
vïjhtege femmer
vïjhtesh fem (sammen)
vâhkoe-biejjie ukedag
åasa pris
âeniehkommes kortest
âeniehkåbpoe kortere
âvtese fremover

Daate lea Multi-raajroen vuoestes versjovdne åarjelsaemiengielese. Berteme ja Saemiedigkie
utnijn vaajteliéh raerieh/bihkedassh buektedh juktie mubpien æjkién goh trygkesåvva daejtie
maahta dåvvodh. Seedth raerieh dan e-påastese: poasta@lagadus.org

© ČálliidLágádus – ForfatternesForlag – Authors/Publisher
Pb 140, NO-9735 Kárásjohka-Karasjok
Fanasgieddi, NO-9845 Deatnu-Tana

Gærjabovre gaskeviermesne: www.lagadus.org

Redaktöore Gyldendal: Thor-Atle Refsdal
Redaktöore saemien, ČálliidLágádus: Svein Nordsletta
Design jïh layout, originaale: Anne Tryti
Layout, saemien: Britt Hansen
Jarkoestamme: Sig-Britt Persson, Karin Rensberg Ripa, Elin Fjellheim

Bijjjebieliedesign: Hanne Dahl
Bijjjebielieguvvie: Børre Holth

Guvvieh: Anne Tryti
Dataguvvieh: Børre Holth

Gærja åndsverk-laaken mietie vaarjelåvva. Ij Leah luhpie kopijem gærjeste
vaeltedh jis ij luhpie dejstie mah gærjam buakteme jallh
tjaaleme. Jis kopijem læjhkan vaalta, dellie iehciem dorjeme jïh
maahta bysvesovvedh böötine jallh faangke-gåetine.

© ČálliidLágádus 2017
Originaale reaktah-aajhtere: Gyldendal Norsk Forlag AS 2006, 2. lâhkoe
Gærja dehtie matematihkelearoevierhteste Multi 1-7.
Trygkesovveme: Waasa Graphics Oy, Vaasa
ISBN 978-82-8263-072-6

Bjørnar Alseth · Ann-Christin Arnås · Henrik Kirkegaard · Mona Røsseland

Multi 2. lánkoe


1b

MAADTH-GÆRJA
Matematigke maanadaltesasse

ČállidLágádus

6 TAALH 7-10



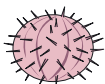


[·] MAN GELLIE?




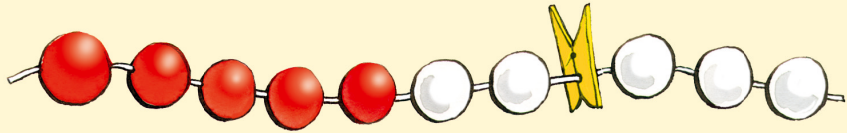





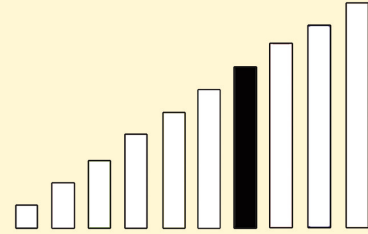




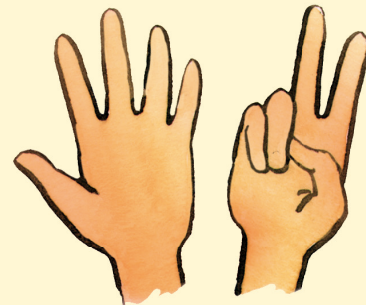




7



TJIIJHTJE




7 SMAAVE AFRIKAN GNUH
TJÅADTJOEH JIH DAELVIE-TJOHPH
DUEKIEH. BÏJVELE JIH LÆJNOES
VEARELDE, IJ GUHTE MAA TJOHPH
DAESNIE ÅESTIEH.


[.]





[..]


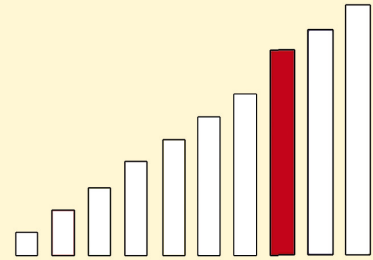


[..]

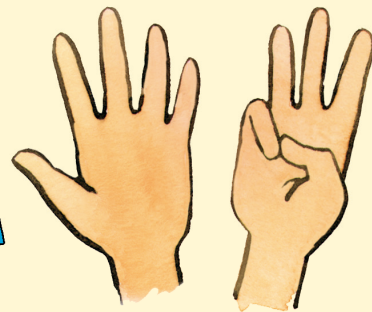




8




GAEKTSIE




LÅMMESNE DOV LEAH **8** KRÅVNAH,
 ÅESTIEH PLIJHTJEHTAHKEM NAMHTAH
 TJOEJEM, JIH DLE BÅALOE-RAEJKIEM
 JIH AKTEM SPIJHKEM, DAM GUJHTH
 GAAJHKESH LYJHKOEH.

[.]





[.]


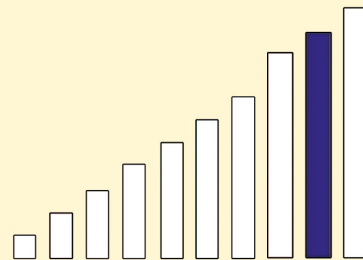


[.]

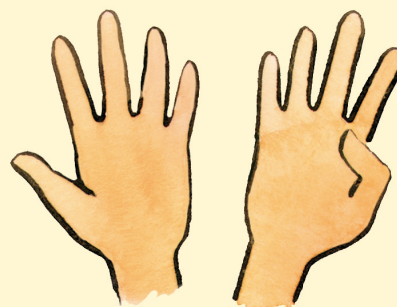




9



UKTSIE



9 BALLÅNGH EDTJIN JAVSODH,
 FIERHTEDE RAVVESTE TJOEJI.
 BALLÅNGH NAA SMAAVE SJİDTIN,
 GAATH, OVGAAATH, GUKTIE MAAHTA
 SJİDTEHDH.

[.]

1

2

3

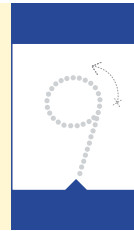
4

5

6


7

8





10

[..]


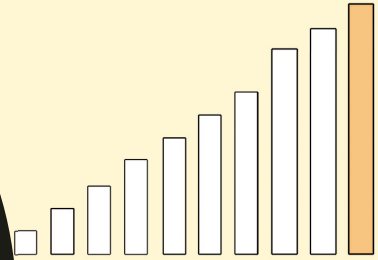


[:]

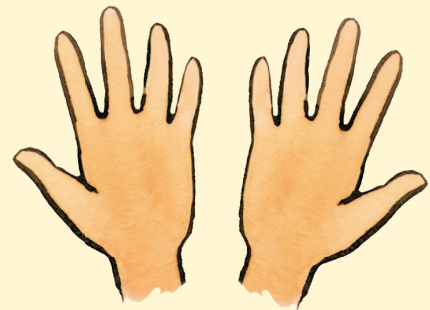
--	--	--	--	--	--	--



10

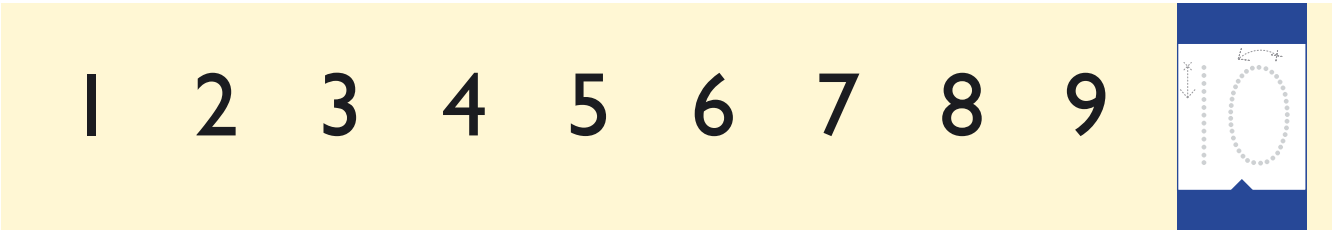


LUHKIE

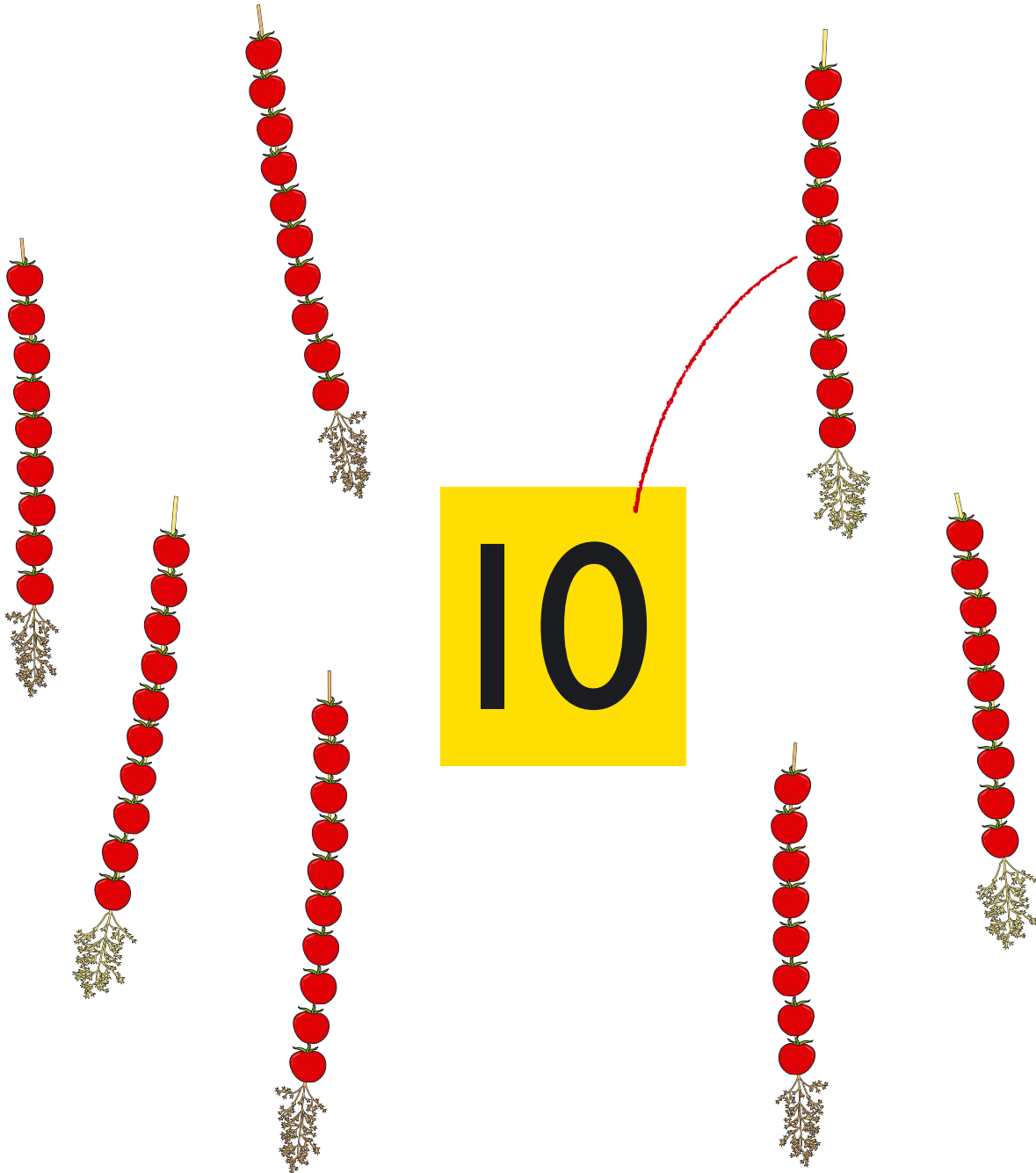


10 JEETNJETJH HIEJESE MİNNIN,
GEAHKH HEARKAN DAHKOE RIJRIN.
JEENEM BYÖPMEDIN JİH JOVKIN
GOSSEHKE RAAJSIN.


[.]




[.]



[.]






[.] MAN GELLIE?





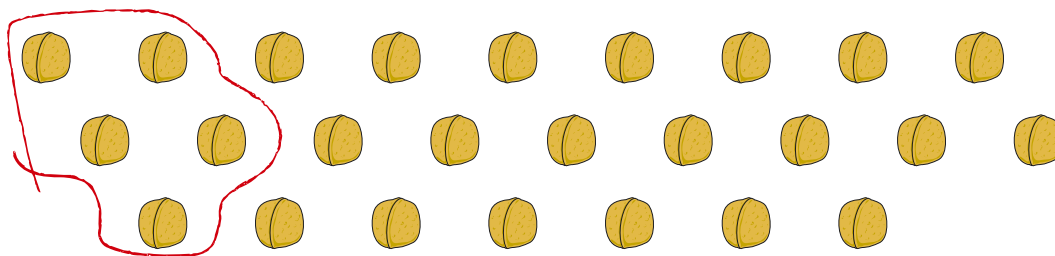


[.] TJALIEH TAALH.




[.] GIEVLEDH AATI BÏJRE.

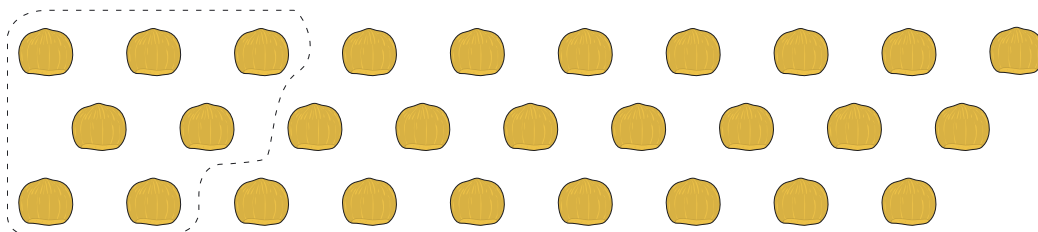
5




6




7




8



9



10



[.] KLAEREDH KRÄVNIDE.

[.] TJÆLIEH TAALIDE.

7	7						
7							
8	8						
8							

[.] KLAEREDH KRÄVNIDE. TJÆLIEH TAALEM.

2 kr

3 kr

5

2 kr

3 kr

4 kr

2 kr

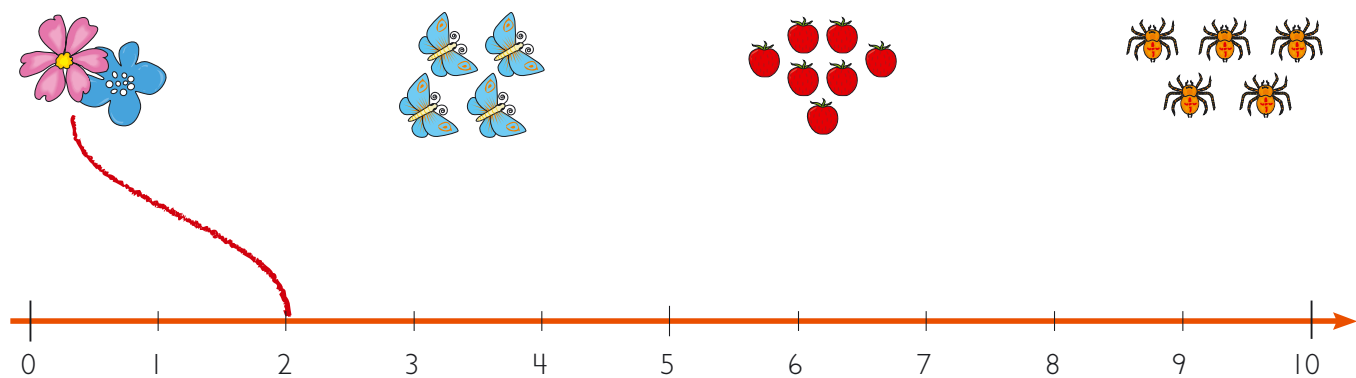
4 kr

5 kr

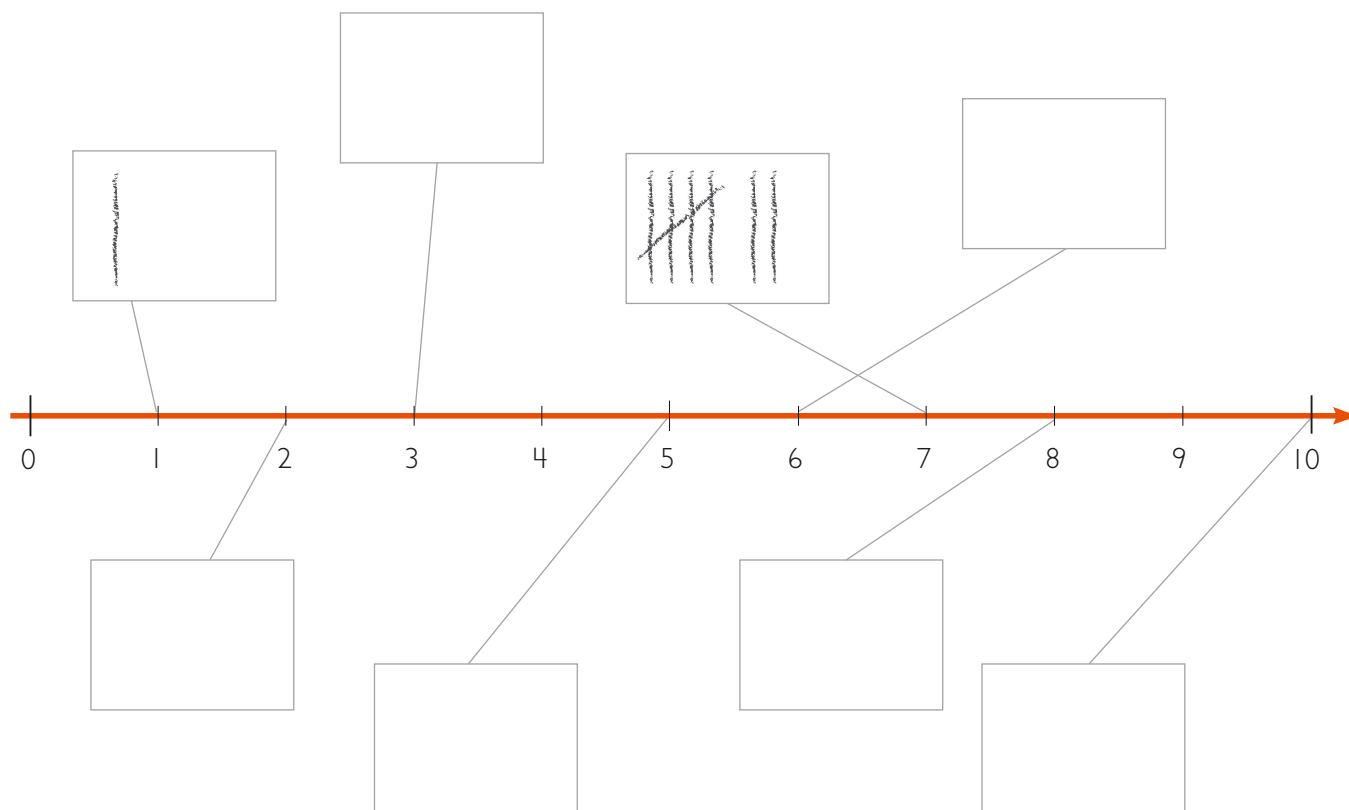
[.] TJÆLIEH TAALEDE.

9	9						
9							
10	10						
10							

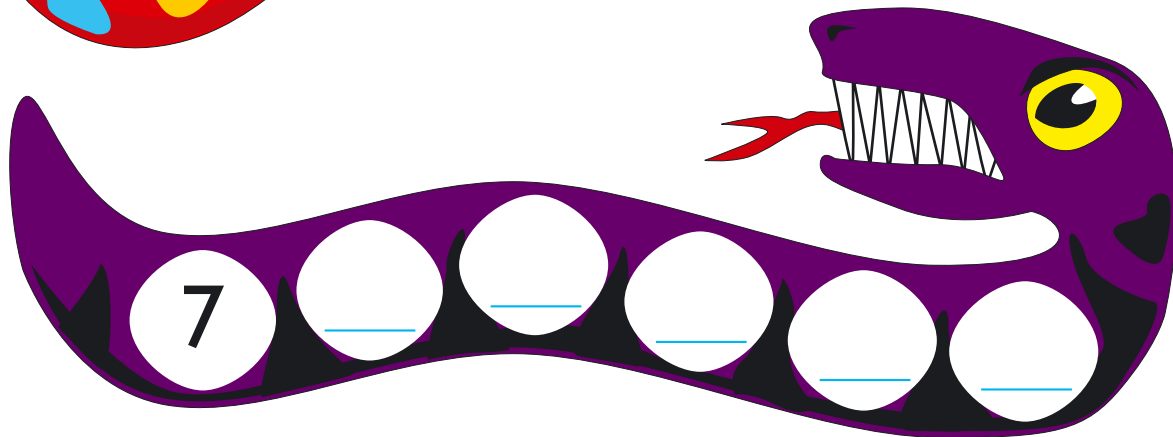
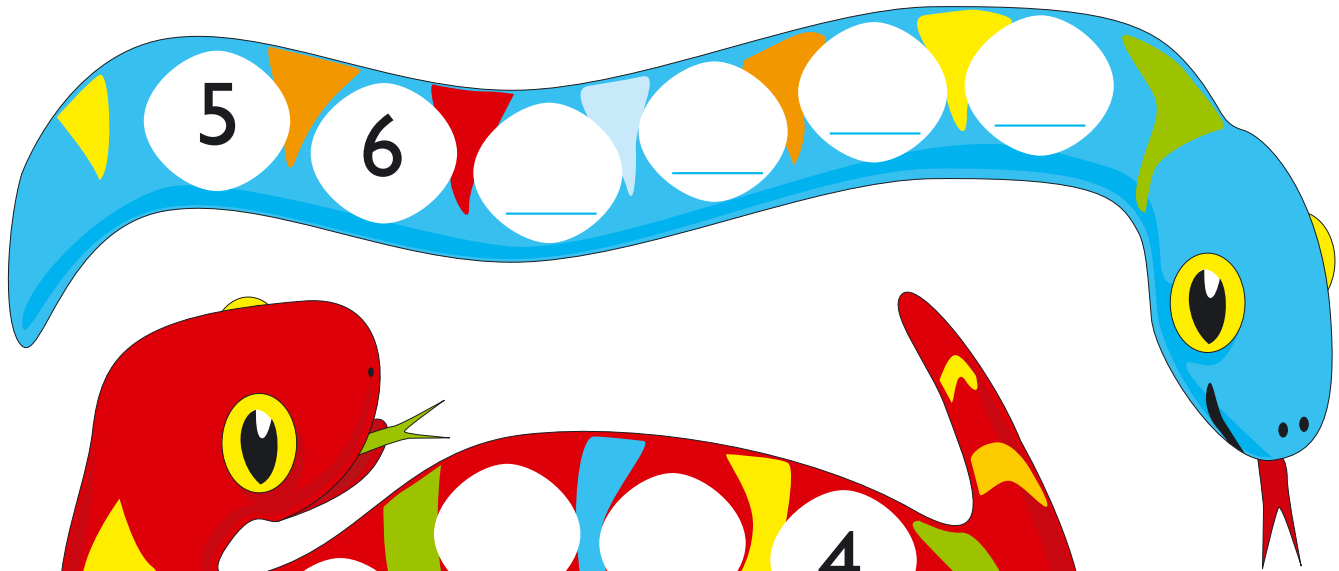

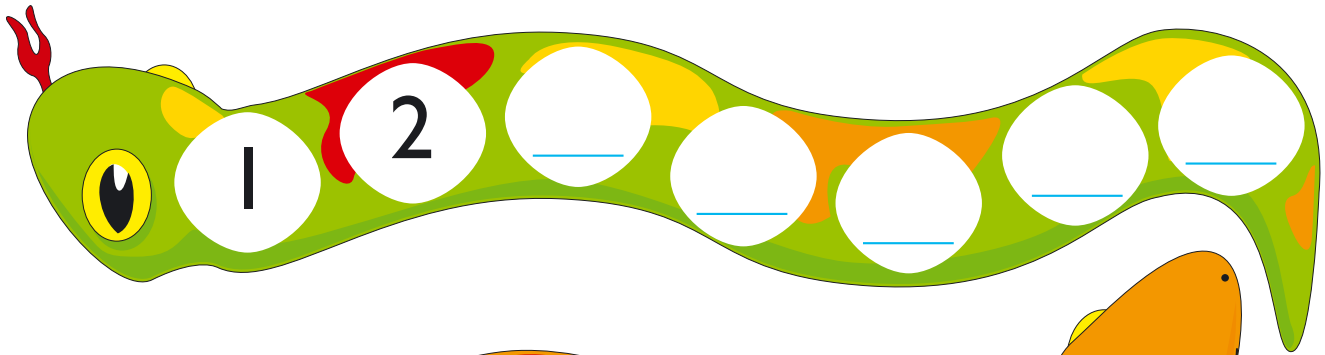
[·] DARJOEH SĪEVH TAALE-SĪEVESE.



[·] TJALIEH RYÖKNE-SĪEVH.




[.] TJÆLIEH TAAALIDE MAH FÅÅTESIEH.



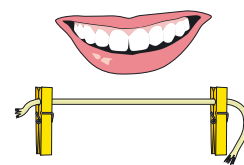
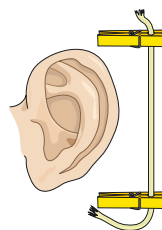
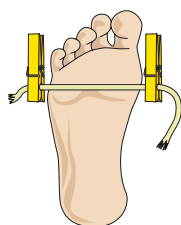
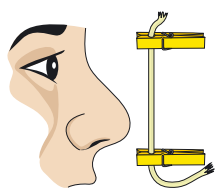
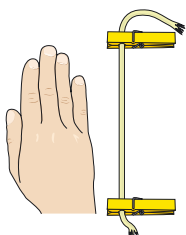
7 MÏETESTIDH



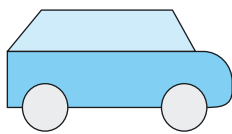
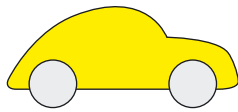


[·] MÏETESTH GÅHKOJDE. KLAEREDH.



--	--	--	--	--	--	--	--



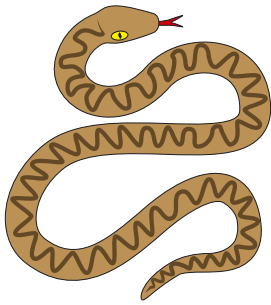
[·] GUVVEDH GUHKEBE BÏJLEM.








[·] GIEVLEDH DAAN BÏJRE MIJ GUHKEMES.




[·] GUVVEDH ÅENIEHKÅBPOEM.



[·] GIEVLEDH BÏJRE DAM MIJ ÅENIEHKOMMES.





[.] GIE BORHTJEN LÏHKEMES BÅATA?

	NOMME: _____	NOMME: _____	NOMME: _____
TJATSKOE 1			
TJATSKOE 2			
TJATSKOE 3			
TJATSKOE 4			
TJATSKOE 5			

[.]




[.]








MANNE MÏETESTEM:

MANNE PROVHKEM:

ILLELDAHKE:



[.] PROVHKH BASTEM. MÏETESTH GÅHKOEM.





[.] MAN GELLIE SNJEARA-SÏLLH MAANAH VAADTSEME?



[·] VÅHKOE-BIEJJIEH



MÅANTA	DÆJSTA	GASKE-VÅHKOE	DUARSTA	BEARJA-DAHKE	LAAVVAR-DAHKE	AEJLEGE
						



[·] TJÆLIEH BIEJJIDE GÆVNJIERUKTIEN MIETIE.

MÅANTA

DÆJSTA

MÅANTA

ÆJLEGE

DUARSTA

GASKE-VÅHKOE

BEARJADAHKE

LAAVVARDAHKE

[·] TJÆLIEH BIEJJIDE MAH FÅÅTESIEH.

JÅÅKTAN	DAANBIEN	JIRREDEN
DÆJSTA	GASKE-VÅHKOE	
	MÅANTA	
GASKE-VÅHKOE		
		ÆJLEGE

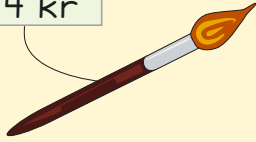
8

PLUSSE JIH MIJNUSE




[·] KLAEREDH RĪKTES KRĀVNALĀHKOEM.

4 kr




Four red scribbled circles and ten empty circles arranged in two rows of five.

6 kr




Six empty circles arranged in two rows of three.

5 kr




Five empty circles arranged in two rows of five.

8 kr



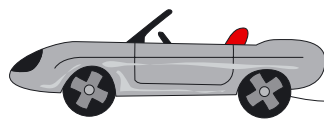
Eight empty circles arranged in two rows of four.

2 kr



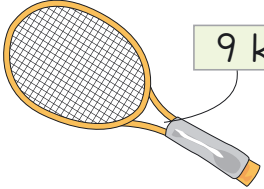
Two empty circles arranged in two rows of two.

10 kr




Ten empty circles arranged in two rows of five.

9 kr



Nine empty circles arranged in two rows of five.

7 kr

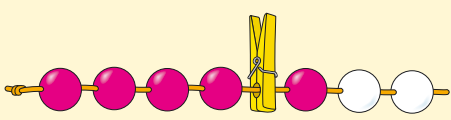


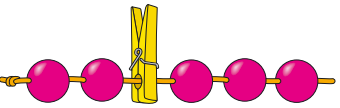
Seven empty circles arranged in two rows of four.

[.] GUVVEDH KRÁVNAH. TJÆLIEH LÅHKOEM.

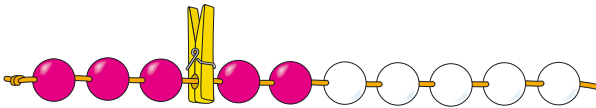


[·] MAN GELLIE LEAH TJÅANGHKAN?

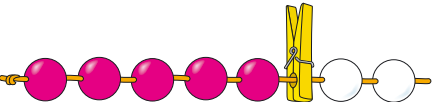

4 JIH
3 LEAH
7



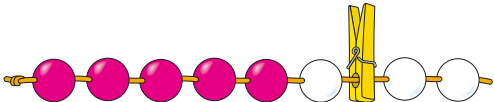
2 JIH
3 LEAH



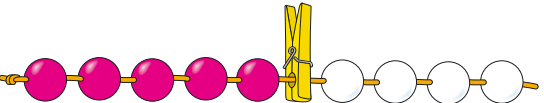
___ JIH
___ LEAH



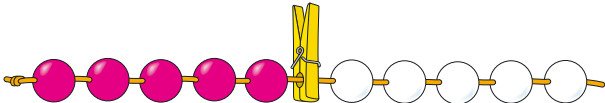
___ JIH
___ LEAH



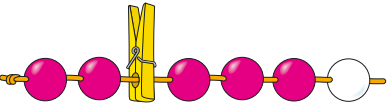
___ JIH
___ LEAH




___ JIH
___ LEAH



___ JIH
___ LEAH

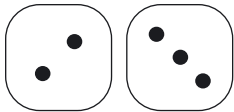
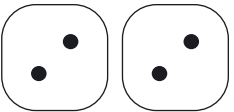

















___ JIH
___ LEAH

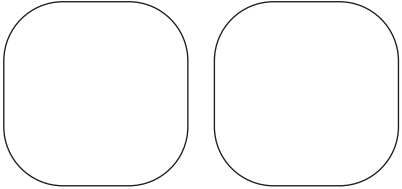
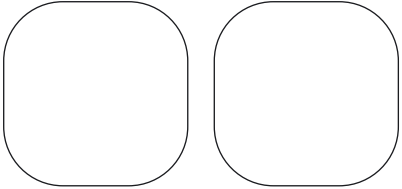
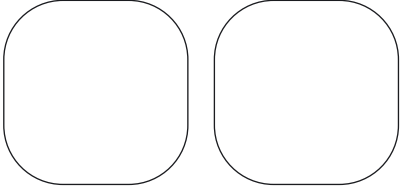
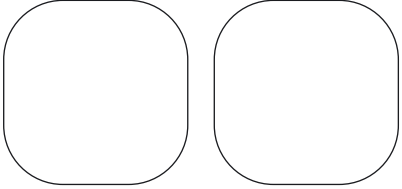


___ JIH
___ LEAH


[.] MAN GELLIE TJELMIEH?

 _____	 _____	 _____
 _____	 _____	 _____
 _____	 _____	 _____
 _____	 _____	 _____
 _____	 _____	 _____
 _____	 _____	


[.] DARJOEH TJELMIEH.

 5	 7
 8	 10


[.] MAN GELLIE TJÅANGHKAN?




2 + 5 = 7




4 + 4 =




+ =




+ =




+ =



+ =




+ =



+ =

[·] MAN GELLIE TJÅANGHKAN?



5 + 3 = 8

$5 + 2 = \square$

$5 + 4 = \square$

$5 + 5 = \square$

$3 + 2 = \square$

$3 + 5 = \square$

$4 + 2 = \square$




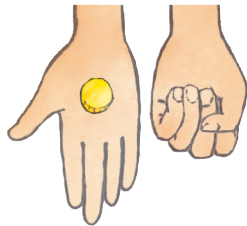



$4 + 5 = \square$

$4 + 3 = \square$

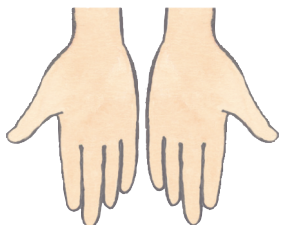
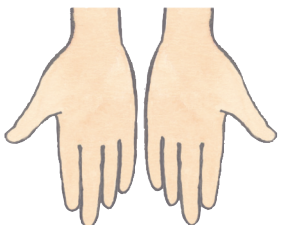
$6 + 2 = \square$

$6 + 3 = \square$

[·] MAN GELLIE TJÅANGHKAN?

			<input type="text"/>			
<input type="text"/> 3	+	<input type="text"/> 2	=	<input type="text"/> 5		
<input type="text"/>	+	<input type="text"/> 4	=	<input type="text"/>		
		<input type="text"/>	+	<input type="text"/> 2	=	<input type="text"/>
<input type="text"/>	+	<input type="text"/> 5	=	<input type="text"/>		
		<input type="text"/>	+	<input type="text"/> 2	=	<input type="text"/>
<input type="text"/>	+	<input type="text"/> 5	=	<input type="text"/>		
<input type="text"/>	+	<input type="text"/> 2	=	<input type="text"/>		

[·] DARJOEH JÏJTJEDH LIËREHTIMMIEH.

				
<input type="text"/>	+	<input type="text"/>	=	<input type="text"/>
<input type="text"/>	+	<input type="text"/>	=	<input type="text"/>

[.] MAN GELLIE FÅÅTESIEH?



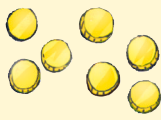







$6 = 3 + 3$		$4 = 2 + \underline{\quad}$	

$\underline{\quad} = \underline{\quad} + \underline{\quad}$		$\underline{\quad} = \underline{\quad} + \underline{\quad}$	

$\underline{\quad} = \underline{\quad} + \underline{\quad}$		$\underline{\quad} = \underline{\quad} + \underline{\quad}$	

$\underline{\quad} = \underline{\quad} + \underline{\quad}$		$\underline{\quad} = \underline{\quad} + \underline{\quad}$	

[·] MAN GELLIE VÖÖRHKESOVVEME?

 <div style="border: 1px solid black; padding: 5px; width: 40px; margin: 0 auto;">7</div>	=	 <div style="border: 1px solid black; padding: 5px; width: 40px; margin: 0 auto;">4</div>	+	 <div style="border: 1px solid black; padding: 5px; width: 40px; margin: 0 auto;">3</div>
 <div style="border: 1px solid black; padding: 5px; width: 40px; margin: 0 auto;">5</div>	=	<div style="border: 1px solid black; padding: 5px; width: 40px; margin: 0 auto;"> <input style="width: 100%; height: 100%;" type="text"/> </div>	+	<div style="border: 1px solid black; padding: 5px; width: 40px; margin: 0 auto;"> <input style="width: 100%; height: 100%;" type="text"/> </div>
 <div style="border: 1px solid black; padding: 5px; width: 40px; margin: 0 auto;">8</div>	=	<div style="border: 1px solid black; padding: 5px; width: 40px; margin: 0 auto;"> <input style="width: 100%; height: 100%;" type="text"/> </div>	+	<div style="border: 1px solid black; padding: 5px; width: 40px; margin: 0 auto;"> <input style="width: 100%; height: 100%;" type="text"/> </div>
 <div style="border: 1px solid black; padding: 5px; width: 40px; margin: 0 auto;">5</div>	=	<div style="border: 1px solid black; padding: 5px; width: 40px; margin: 0 auto;">2</div>	+	<div style="border: 1px solid black; padding: 5px; width: 40px; margin: 0 auto;"> <input style="width: 100%; height: 100%;" type="text"/> </div>
 <div style="border: 1px solid black; padding: 5px; width: 40px; margin: 0 auto;">8</div>	=	<div style="border: 1px solid black; padding: 5px; width: 40px; margin: 0 auto;"> <input style="width: 100%; height: 100%;" type="text"/> </div>	+	<div style="border: 1px solid black; padding: 5px; width: 40px; margin: 0 auto;"> <input style="width: 100%; height: 100%;" type="text"/> </div>
 <div style="border: 1px solid black; padding: 5px; width: 40px; margin: 0 auto;">10</div>	=	<div style="border: 1px solid black; padding: 5px; width: 40px; margin: 0 auto;"> <input style="width: 100%; height: 100%;" type="text"/> </div>	+	<div style="border: 1px solid black; padding: 5px; width: 40px; margin: 0 auto;"> <input style="width: 100%; height: 100%;" type="text"/> </div>

[·] DARJOEH JÏJTJEDH LÏEREHTIMMIEH.

<div style="border: 1px solid black; padding: 5px; width: 40px; margin: 0 auto;"> <input style="width: 100%; height: 100%;" type="text"/> </div>	=	<div style="border: 1px solid black; padding: 5px; width: 40px; margin: 0 auto;"> <input style="width: 100%; height: 100%;" type="text"/> </div>	+	<div style="border: 1px solid black; padding: 5px; width: 40px; margin: 0 auto;"> <input style="width: 100%; height: 100%;" type="text"/> </div>
<div style="border: 1px solid black; padding: 5px; width: 40px; margin: 0 auto;"> <input style="width: 100%; height: 100%;" type="text"/> </div>	=	<div style="border: 1px solid black; padding: 5px; width: 40px; margin: 0 auto;"> <input style="width: 100%; height: 100%;" type="text"/> </div>	+	<div style="border: 1px solid black; padding: 5px; width: 40px; margin: 0 auto;"> <input style="width: 100%; height: 100%;" type="text"/> </div>

[·] DARJOEH VÏJHTESH.

5
4 1
 $4 + 1 = 5$

5
3
 $3 + \underline{\quad} = 5$

5
2
 $2 + \underline{\quad} = 5$

5
1
 $1 + \underline{\quad} = 5$

[·] DARJOEH TJÏJHTJESH.

7
6
 $\underline{\quad} + \underline{\quad} = 7$

7
5
 $\underline{\quad} + \underline{\quad} = 7$

7
4
 $\underline{\quad} + \underline{\quad} = 7$

7
3
 $\underline{\quad} + \underline{\quad} = 7$

[·] DARJOEH LÄHKESH.

10
9 1
 $9 + 1 = 10$

10
5
___ + ___ = 10

10
7
___ + ___ = 10

10
1
___ + ___ = 10

[··]

10
___ 4
___ + ___ = 10

10
___ 8
___ + ___ = 10



10
___ ___
___ + ___ = 10

10
___ ___
___ + ___ = 10



[.] MAN GELLIE AAJMONE?

MANNE KROESSEM BËJEM DEJTIE GÖÖKTESIDIE MAH BYÖPMELGIN.



$6 - 2 = 4$





$5 - 3 = \underline{\quad}$





$\underline{\quad} - \underline{\quad} = \underline{\quad}$





$\underline{\quad} - \underline{\quad} = \underline{\quad}$



$\underline{\quad} - \underline{\quad} = \underline{\quad}$


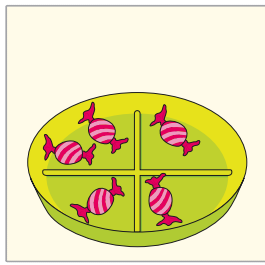


$\underline{\quad} - \underline{\quad} = \underline{\quad}$


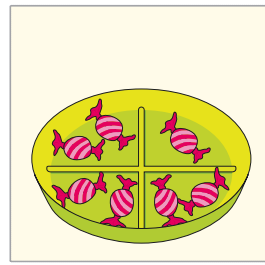


$\underline{\quad} - \underline{\quad} = \underline{\quad}$


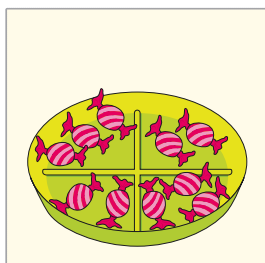
[.] MAN GELLIE AAJMONE?




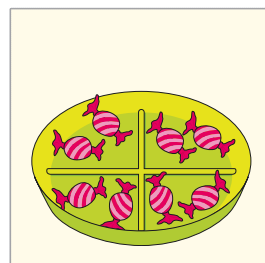
$$\underline{8} - \underline{2} = \underline{\quad}$$




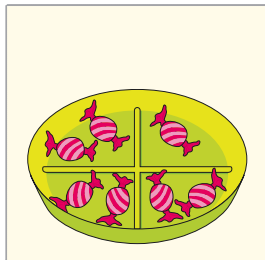
$$\underline{\quad} - \underline{\quad} = \underline{\quad}$$




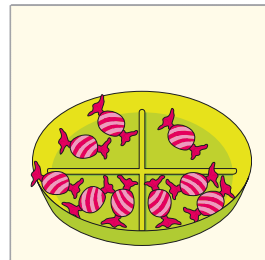
$$\underline{\quad} - \underline{\quad} = \underline{\quad}$$




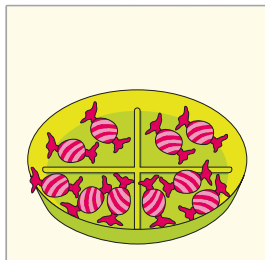
$$\underline{\quad} - \underline{\quad} = \underline{\quad}$$




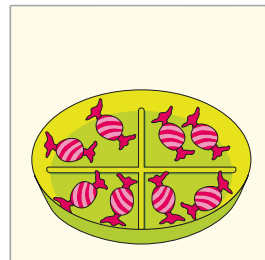
$$\underline{\quad} - \underline{\quad} = \underline{\quad}$$



$$\underline{\quad} - \underline{\quad} = \underline{\quad}$$




$$\underline{\quad} - \underline{\quad} = \underline{\quad}$$



$$\underline{\quad} - \underline{\quad} = \underline{\quad}$$

[.] MIJ DÏHTE JOEKEHTASSE?



$4 - 2 = 2$

___ - ___ = ___

___ - ___ = ___

___ - ___ = ___

___ - ___ = ___

___ - ___ = ___

___ - ___ = ___

___ - ___ = ___

___ - ___ = ___

[.] MIJ DĪHTE JOEKEHTASSE?



MOV LEAH 3 VIELIE GAEVNIEH GOH DOV.

$7 - 4 = 3$

$6 - 2 = \underline{4}$

$8 - 5 = \underline{\quad}$

$9 - 4 = \underline{\quad}$

$7 - 5 = \underline{\quad}$

$10 - 3 = \underline{\quad}$

$7 - 6 = \underline{\quad}$


$10 - 4 = \underline{\quad}$


$8 - 3 = \underline{\quad}$


$8 - 5 = \underline{\quad}$

[·] NJULHTJH TAALE-SÏEVESNE. TJÆLIEH VAASTOEM.

$4 + 2$

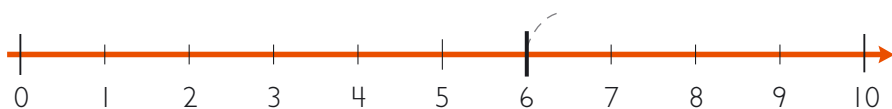






$4 + 2 = 6$

$6 + 1$



$\underline{6} + \underline{1} = \underline{\quad}$

$3 + 3$



$\underline{\quad} + \underline{\quad} = \underline{\quad}$

$5 + 4$



$\underline{\quad} + \underline{\quad} = \underline{\quad}$

$7 + 2$



$\underline{\quad} + \underline{\quad} = \underline{\quad}$

$2 + 6$



$\underline{\quad} + \underline{\quad} = \underline{\quad}$

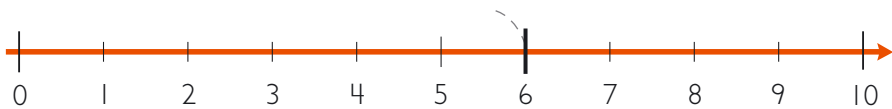
[·] NJULHTJH TAALE-SÏEVESNE. TJÆLIEH VAASTOEM.

$5 - 3$



$5 - 3 = 2$

$6 - 2$



$6 - 2 = \underline{\quad}$

$8 - 3$



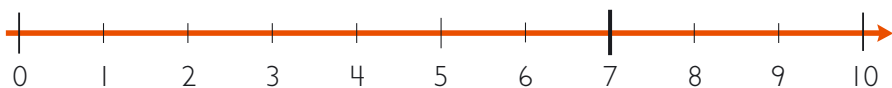
$\underline{\quad} - \underline{\quad} = \underline{\quad}$

$10 - 6$



$\underline{\quad} - \underline{\quad} = \underline{\quad}$

$7 - 4$



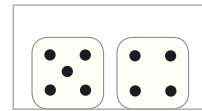

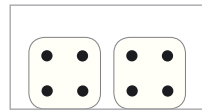


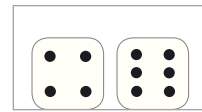



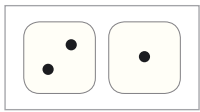
$\underline{\quad} - \underline{\quad} = \underline{\quad}$

$9 - 8$



$\underline{\quad} - \underline{\quad} = \underline{\quad}$

[·] GUVVEDH SĪEVH TAALE-SĪEVESE.

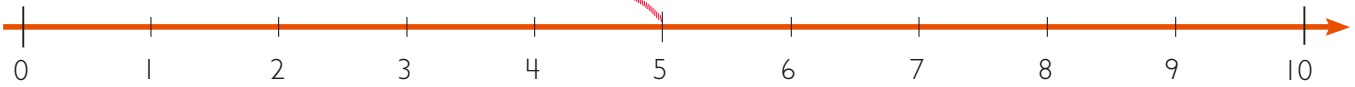


$$2 + 3$$

$$7 + 1$$

$$5 + 2$$

$$5 + 3$$



$$1 + 2$$

$$3 + 4$$

$$\underline{\quad} + \underline{\quad}$$

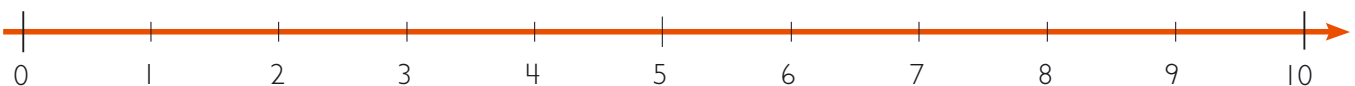
$$\underline{\quad} + \underline{\quad}$$

[··]
$$5 - 4$$

$$6 - 1$$

$$10 - 8$$

$$10 - 3$$







$$8 - 5$$

$$9 - 1$$

$$\underline{\quad} - \underline{\quad}$$

$$\underline{\quad} - \underline{\quad}$$

[.] TJETSKIEH GÖÖKTE TJELMIE-SKAAVHTEGH JÏH KLAEREDH GUVVIEM.



2 – 4

5 – 6

7

8

9 – 10

11 – 12



TAALH TAALESTE 10 – TAALESE 20



10



11



12



13



14



15



16



17



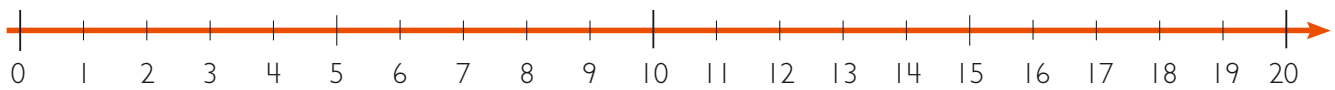
18



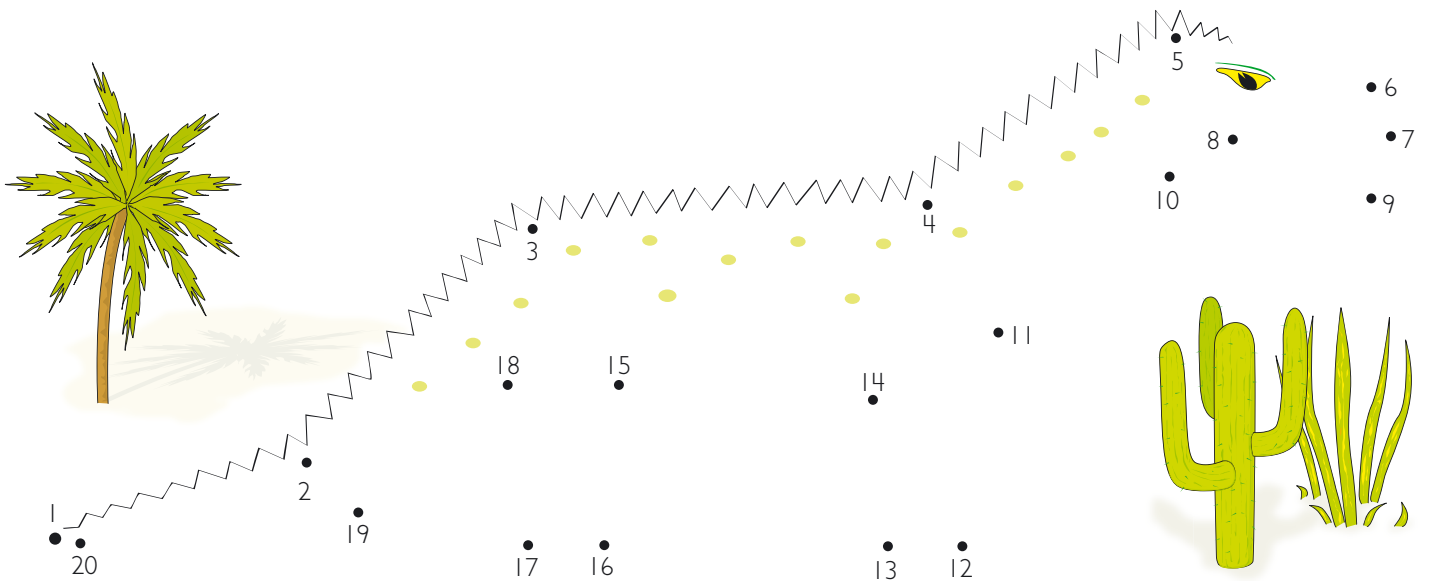
19



20



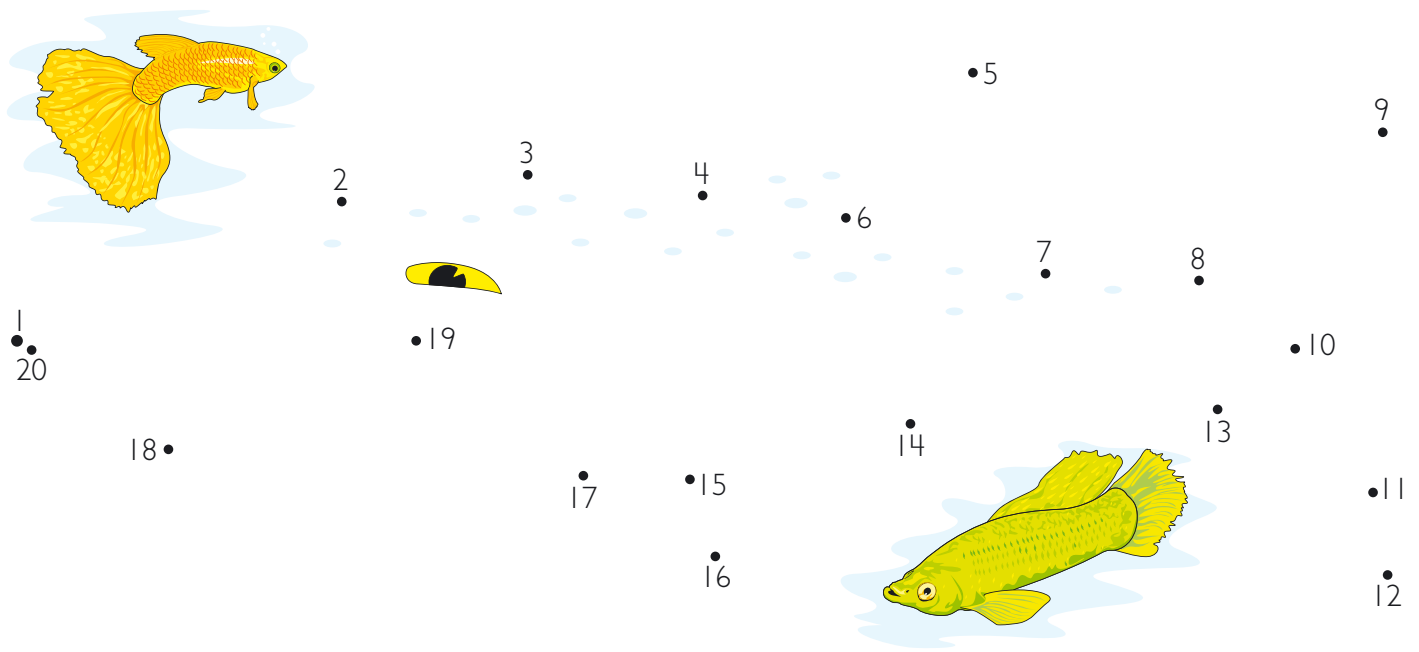
[·] DARJOEH SIEVEM TAALESTE TAALESE.



[··] TJAEIEH TAAALIDE.

11					
12					
13					
14					
15					

[•] DARJOEH SĪEVEM TAALESTE TAALESE.

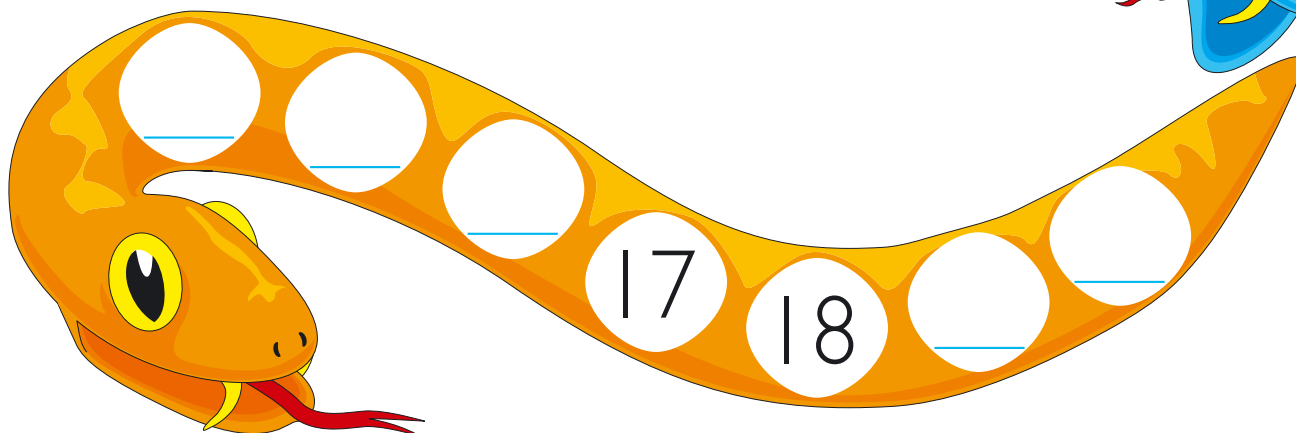

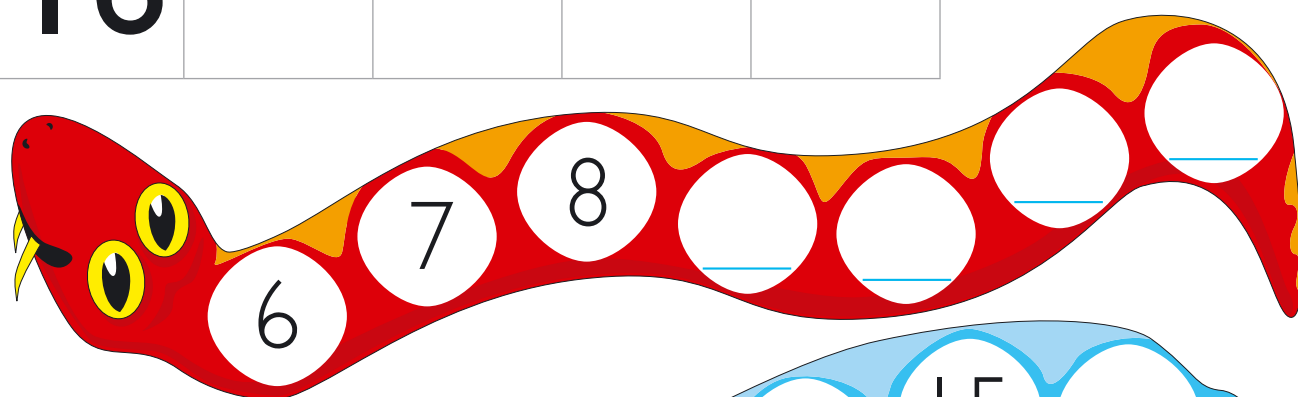


[•] TJÆELIEH TAAALIDE.

16	16				
17	17				
18	18				
19	19				
20	20				

[·] TJAELIEH TAALIDE MAH FÅÅTESIEH.


1	2	3		
6	7			
	12			
16				



SPĪELE: VOESTEMES TAALESE 20.

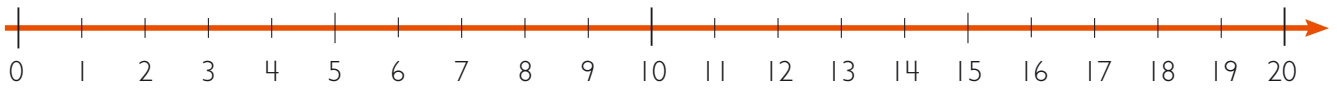
SPĪELEN NJOELKEDASSH:

2 jallh 3 spielijh. Biejh jovhtem siejpie-geatjan. Järrehth bastem vāaroej mietie dennie jorphekisnie. Ryöknh 1, 2 jallh 3 meatesth siejpie-gietjem. Mubpien aejkien gosse dov vāaroe, ryöknh destie gusnie tjäadtjoeminie, 4, 5... Dihte gie voestemes taalese 20 bāata lea vitneme.



[·] TJAELIEH TAALEM MIJ I UNNEBE JÏH TAALEM MIJ I STUEREBE.

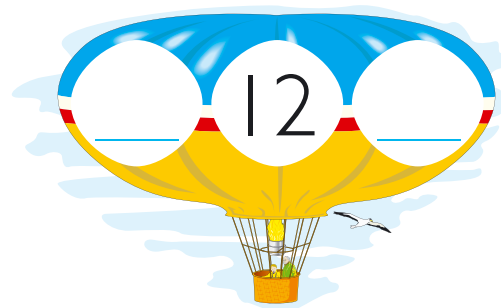

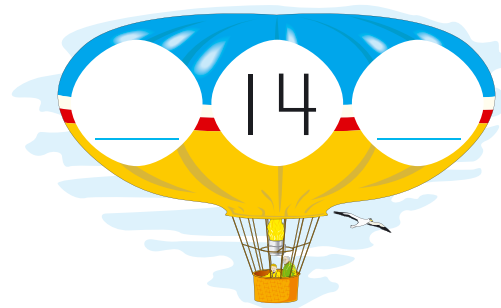
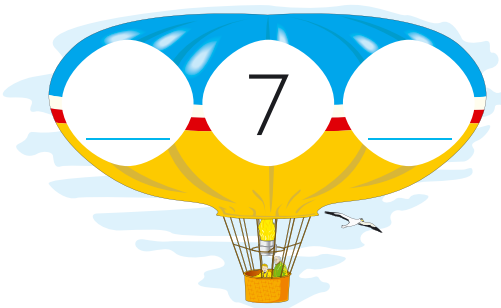




[.] TJAELIEH TAALEM MIJ 2 UNNEBE JÏH TAALEM MIJ 2 STUEREBE.



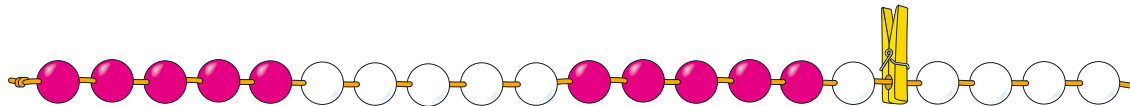
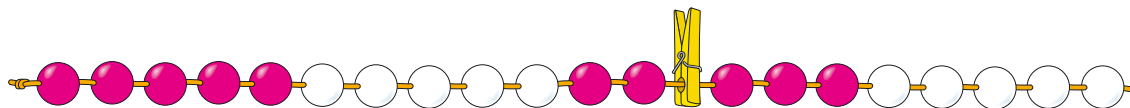
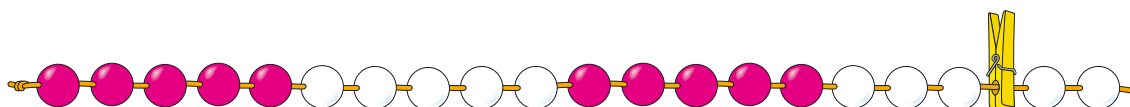
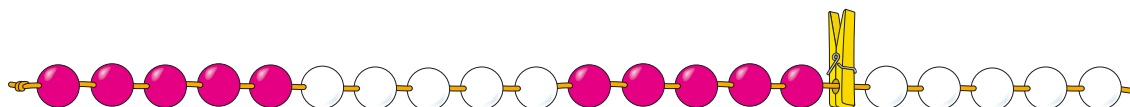
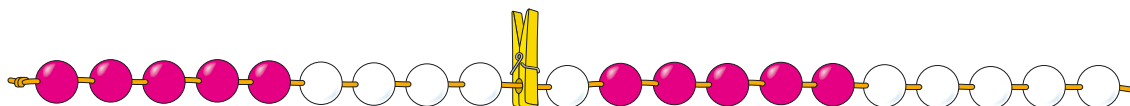

[..] TJAELIEH TAALEM MIJ 3 UNNEBE JÏH TAALEM MIJ 3 STUEREBE.



[·] MAN GELLIE TJÄÄHTJH?

13

MANNE DEJTIE TJÄÄHTJIDE
RYÖKNEM MAH VAARJOE-
TJUEPTJIEJEN DAENNIE BIELESNE.



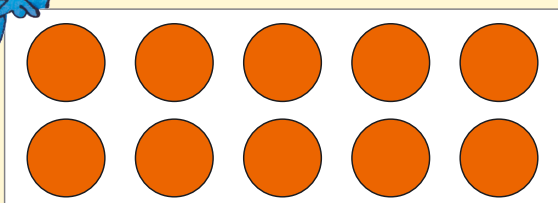
[·] KLAEREDH RĪKTES LĀHKOEM.

DELLIE MANNE KLAERE-
DEM DEJTIE GUAKTIDE
MAH FĀĀTESIEH.

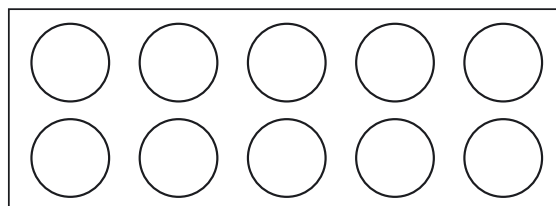
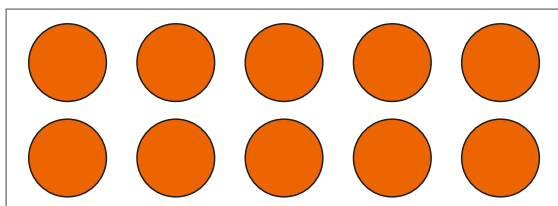


TAALEM 10 JOE
KLAERIEDAMME.

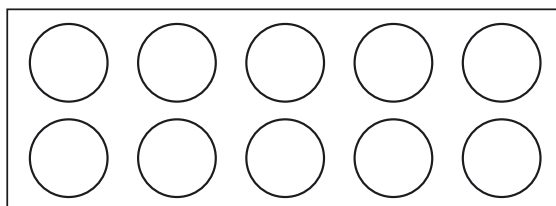
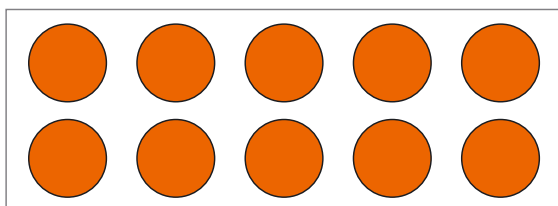
12



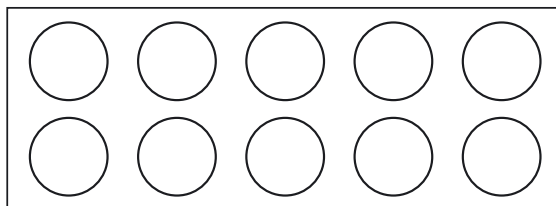
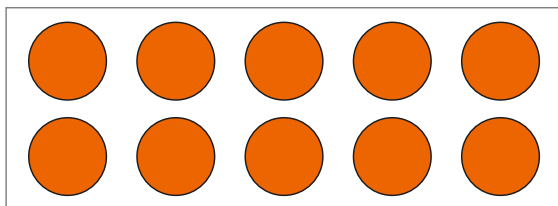
15



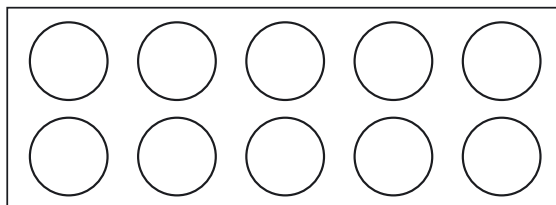
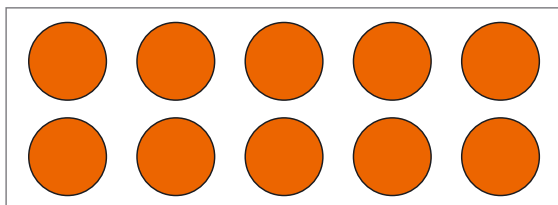
11



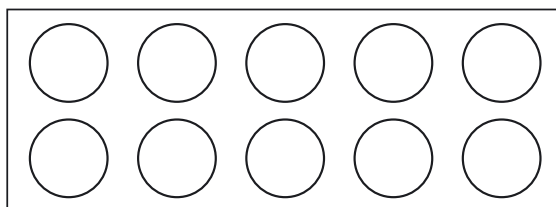
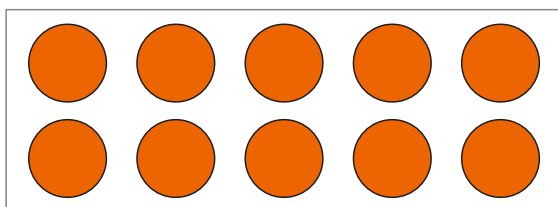
17




19



14



[.] KLAEREDH RÏEKTES LÅHKOEM.



[..] GUVVEDH KRÅVNAH.

7 kr	16 kr
13 kr	20 kr

[.] MAN JEENE?

8 kr

_____ kr

_____ kr

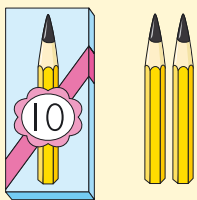
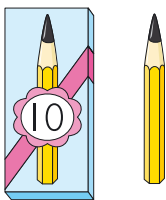
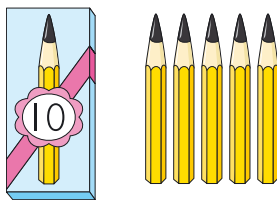
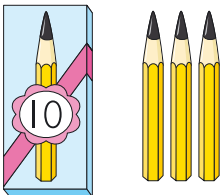

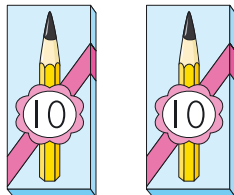
_____ kr

_____ kr

_____ kr

[.] GIEN LEA JEENEMES? GIEVLEDH.

[·] MAN GELLIE PLÆJJOHKH?

 <p>12</p>	 <p>_____</p>	 <p>_____</p>
 <p>_____</p>	 <p>_____</p>	 <p>_____</p>

[·] MAN GELLIE TJÅANGHKAN?

<table border="1"> <tr> <td>12</td> <td>· ·</td> </tr> </table> <p>14</p>	12	· ·	<table border="1"> <tr> <td>5</td> <td>· · ·</td> </tr> </table> <p>_____</p>	5	· · ·	<table border="1"> <tr> <td>15</td> <td>· · ·</td> </tr> </table> <p>_____</p>	15	· · ·
12	· ·							
5	· · ·							
15	· · ·							
<table border="1"> <tr> <td>7</td> <td>· · ·</td> </tr> </table> <p>_____</p>	7	· · ·	<table border="1"> <tr> <td>6</td> <td>· · ·</td> </tr> </table> <p>_____</p>	6	· · ·	<table border="1"> <tr> <td>9</td> <td>· ·</td> </tr> </table> <p>_____</p>	9	· ·
7	· · ·							
6	· · ·							
9	· ·							
<table border="1"> <tr> <td>14</td> <td>· · ·</td> </tr> </table> <p>_____</p>	14	· · ·	<table border="1"> <tr> <td>11</td> <td>· · ·</td> </tr> </table> <p>_____</p>	11	· · ·	<table border="1"> <tr> <td>13</td> <td>· · ·</td> </tr> </table> <p>_____</p>	13	· · ·
14	· · ·							
11	· · ·							
13	· · ·							

[·] MAN GELLIE FÅÅTESIEH TAALESE 10?

●				
●	●	●	●	●

$6 + 4 = 10$

●	●	●	●	●

$5 + \underline{\quad} = 10$

●	●			
●	●	●	●	●

$7 + \underline{\quad} = 10$

●	●			

$2 + \underline{\quad} = 10$

[·] MAN GELLIE FÅÅTESIEH TAALESE 20?

●	●	●	●	●	●	●		
●	●	●	●	●				

$13 + \underline{\quad} = 20$

●	●	●	●	●	●	●	●	●
●	●	●	●	●	●			

$16 + \underline{\quad} = 20$

●	●	●	●	●				
●	●	●						

$8 + \underline{\quad} = 20$

[·] JUEKIEH LÅHKEGIDIE JÏH AKTEGIDIE.

18

10 8

1 l hkege j h 8 aktegh

12

10

1 l hkege j h ___ aktegh

15

___ l hkege j h ___ aktegh

13

___ l hkege j h ___ aktegh


16

___ l hkege j h ___ aktegh



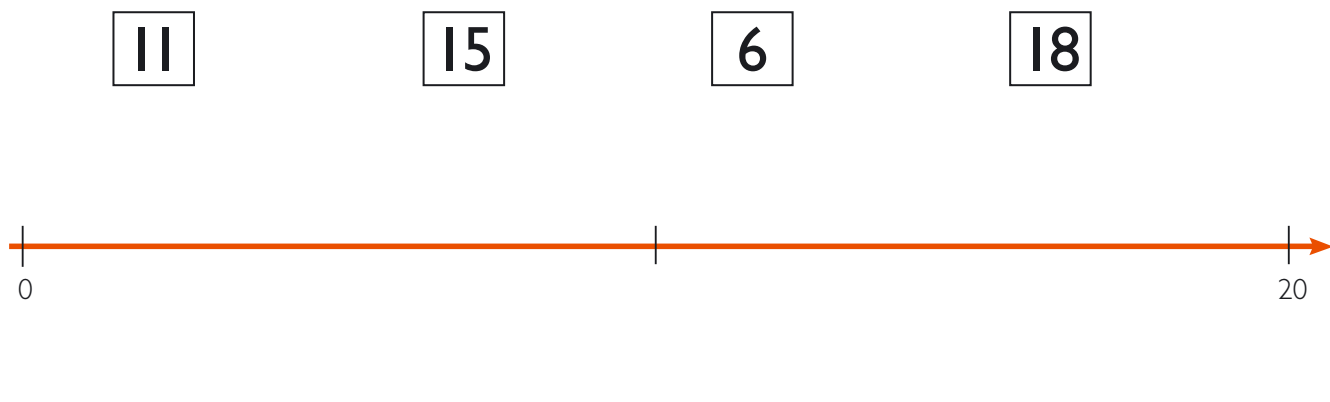
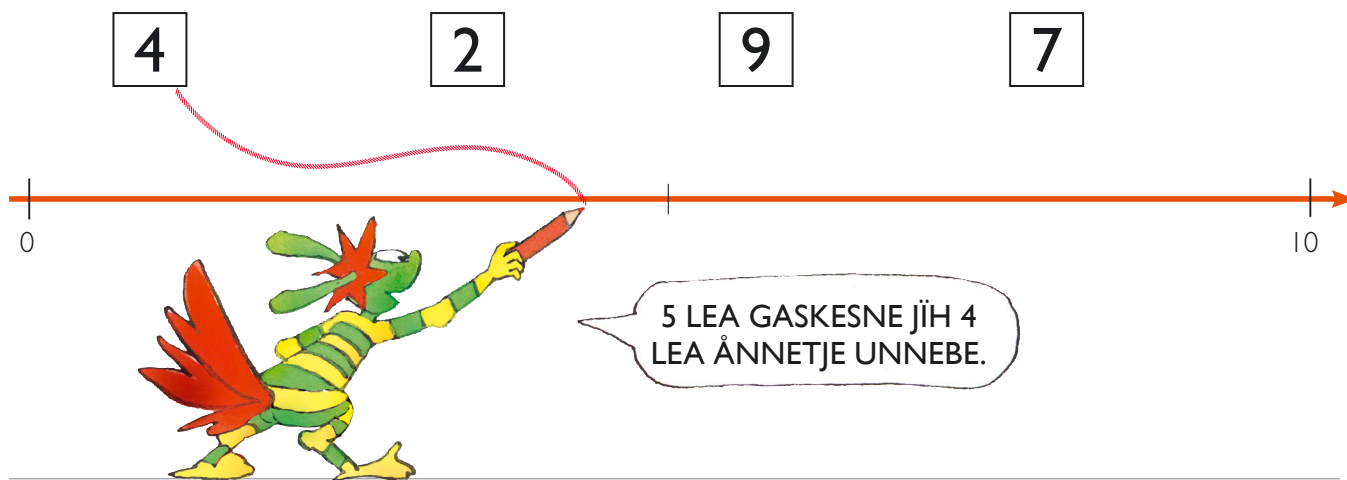
20

___ l hkege j h ___ aktegh

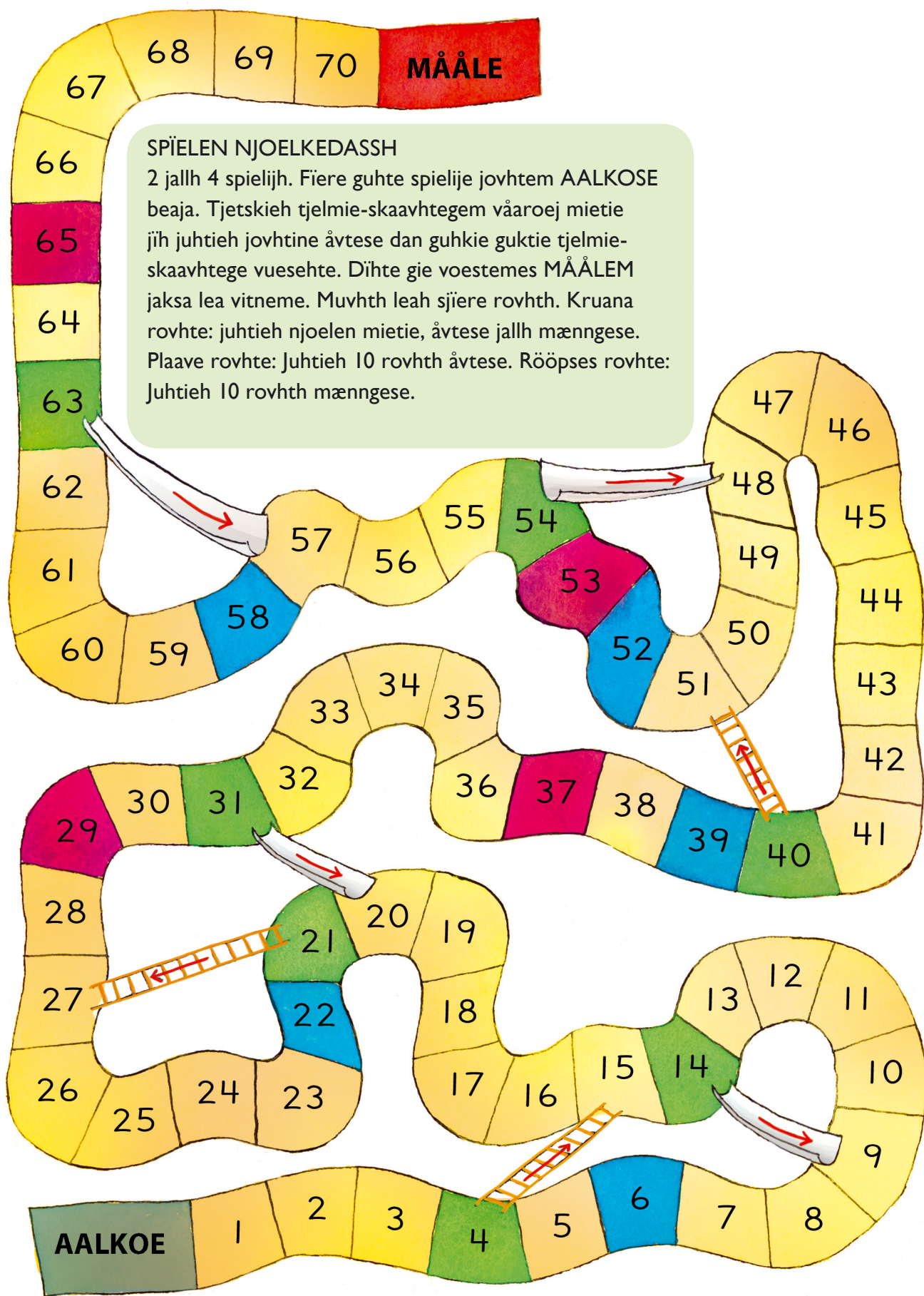
SPĪELE: VOESTEMES TJASTEN GĀAJKOE .



[·] DARJOEH SĪEVEM TAALESTE TAALE-SĪEVESE.



SPĪELE: RAAJTERE-SPĪELE




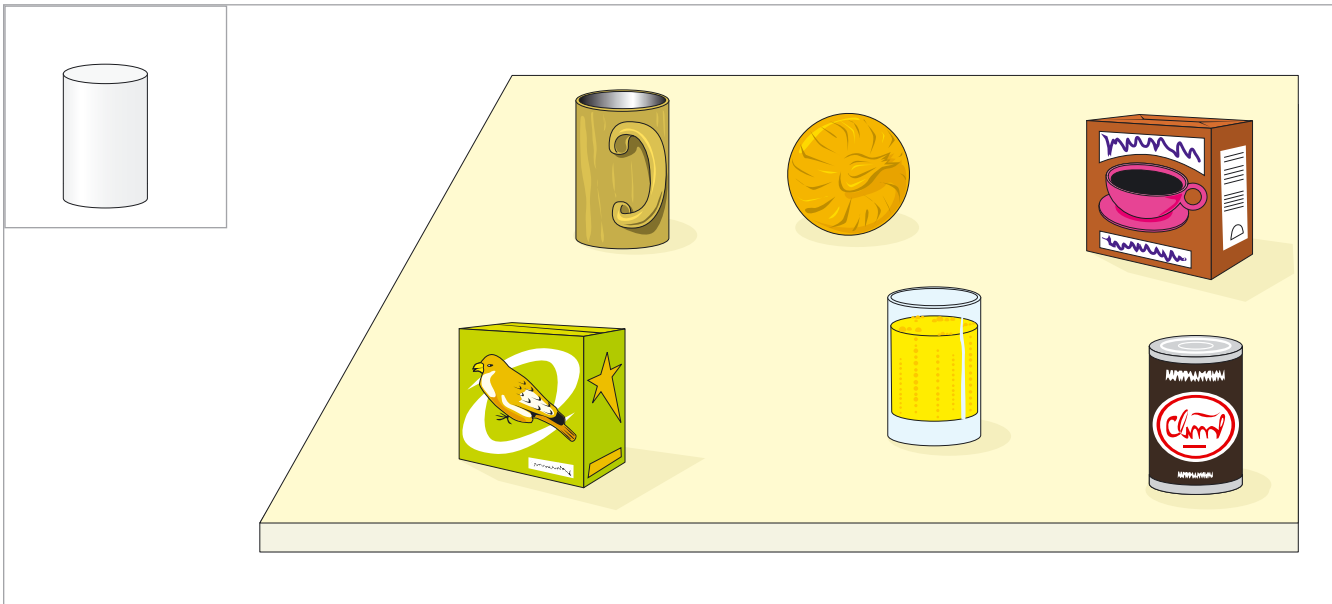
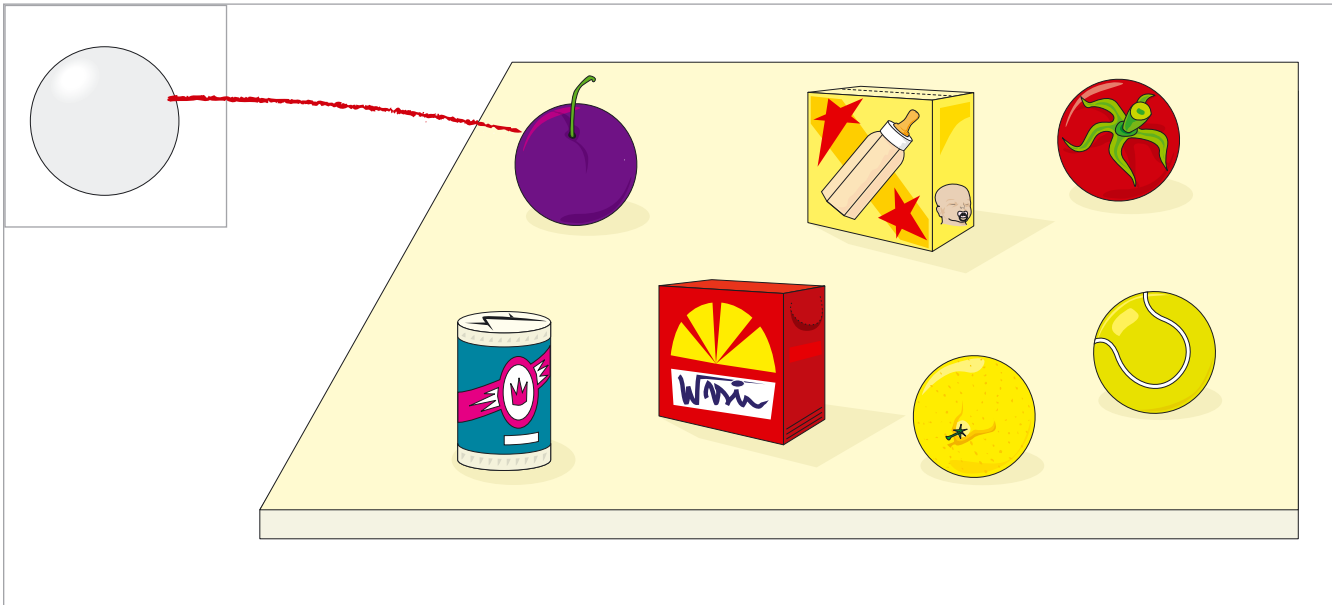
SPĪELEN NJOELKEDASSH


2 jallh 4 spieljh. Fiere guhte spielje jovhem AALKOSE beaja. Tjetskieh tjelmie-skaavhtegem vāarooj mietie jĭh juhtieh jovhtine āvtese dan guhkie guktie tjelmie-skaavhtege vuesehte. Dihte gie voestemes MÅÅLEM jaksa lea vitneme. Muvhth Leah sjiere rovthh. Kruana rovhte: juhtieh njoelen mietie, āvtese jallh mængese. Plaave rovhte: juhtieh 10 rovthh āvtese. Rööpses rovhte: juhtieh 10 rovthh mængese.

10 HAMMOEH JIH HAEMIEH




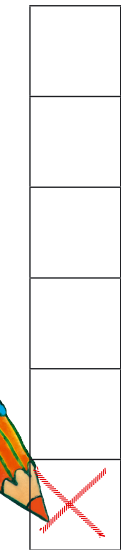
[.]










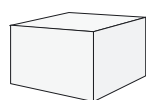
[·] MAN GELLIE? _____

DAESNIE
AKTE.


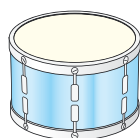
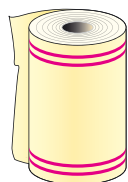
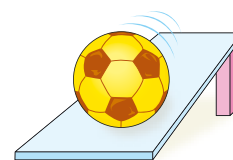






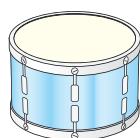
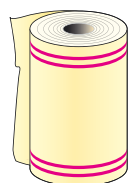

[·] MAN GELLIE?




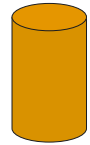
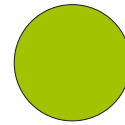
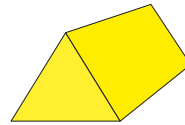
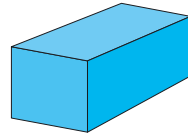
[·] MIJ HAEMIDE MAEHTIEH JÄRREDH? GIEVLEDH DEJ BÏJRE.



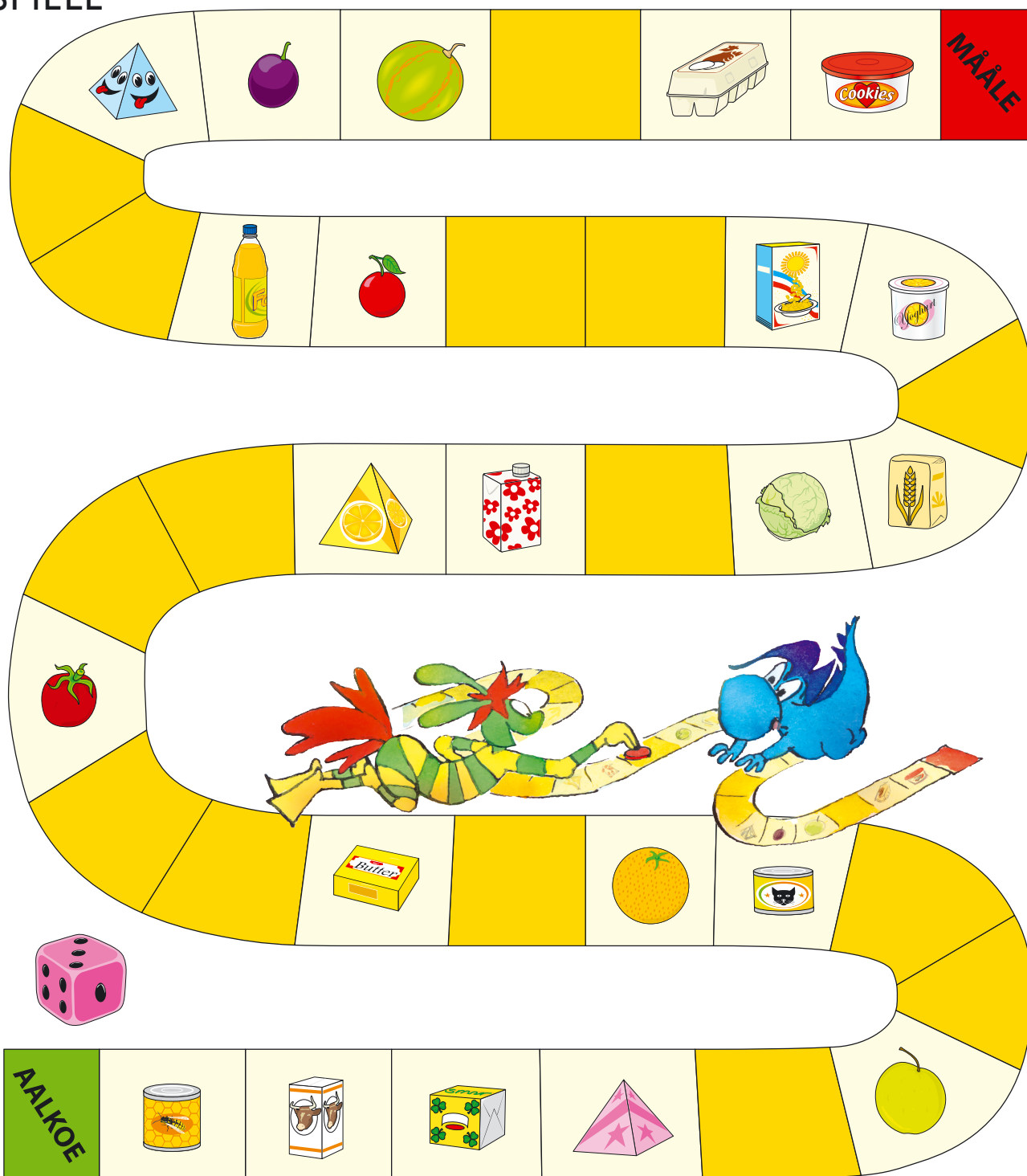
[·] MIJ HAEMIDE MAEHTIEH BERTEDH?
GIEVLEDH DEJ BÏJRE.



[·] KLAEREDH.







SPĪELE



SPĪELE-NJOELKEDASSH:

Akte spēle göökte - golme learoehkidie. Fiere guhte spēlije jovhtem AALKOSE beaja. Tjetskieh tjelmie-skaavhtegem vāaroej mietie jīh juhtieh jovhtem dan gellie rovhth guktie tjelmie-skaavhtege vuesehte. Jis jovhte gāvvan akten gaevneste tjöödtjeste, spēlije tjægkieh āadtje dan gaevnien hammoen mietie. Giehtelidie nemhtie guktie akte spēlije määlem jakseme. Vitnije dīhte gie jeenemes tjægkieh tjænghesne ātna.

 = + 1 tjægkie	 = + 5 tjægkieh
 = + 2 tjægkieh	 = - 1 tjægkie

Multi

Matematihke maanadaltesasse

Multi fleksibiliteetem matematihke-lohkehtæmman vadta gosse lohkehtæjjide dâârje jih nuepiem vadta måedtie lohkehtimmie-vuekieh provhkedh. MULTI eadtjaldávva, buerie mielem vadta jih lustes baalka matematihkese.

Multi se vihkkes:

- Måedtie iedtjh gosse vueptiestidh, goerehtidh jih eadtjohkelaakan barkedh
- Lohkehtimmie mejtie sjiehtesjamme lohkehtimmie-ektievvyökosne
- Veele maahtoe-ulmide learoesejkesjen mietie vuortasjidh
- Buerielaakan faagine kapihtelistie kapihtelidie barkedh jaepijste jaepide
- Vijries jih eens learohkevierhtiedimmie maam lohkehtimmesne sjiehtesje

Multi eeremes:

- Teorijem jih iedtjide ektede
- Vuortesje guktie åvtese barkedh; fierhtene aamhtesinie eensilaakan jih guhkies boelhkine vuesehte guktie barkedh
- Ånehks jih aelhie teksth åtna
- Lohkehtimmie learoehkidie sjiehtesje sjiere faagi daltesinie
- Buerie jih tjielke gærjam Lærerens bok
- Dejtie learoesejkesjen ulmide fierhtene kapihtelisnie vuesehte

Multi åejviekomponenth fierhten daltesasse:

- Maadth-gærja A jih B
- Lierehtimmiegærja
- Gaskeviermiesijje www.lagadus.org/multi

ČállidLágádus

ISBN 978-82-8263-072-6



9 788282 630726